





Use the array provided to solve each problem.


1)  $20 \times 35 =$




2)  $29 \times 20 =$




3)  $10 \times 18 =$




4)  $10 \times 17 =$



5)  $10 \times 19 =$



6)  $10 \times 13 =$



**Answers**

1. \_\_\_\_\_

2. \_\_\_\_\_

3. \_\_\_\_\_

4. \_\_\_\_\_

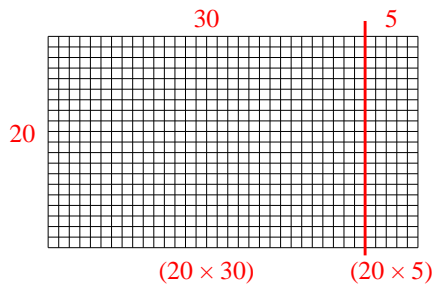
5. \_\_\_\_\_

6. \_\_\_\_\_

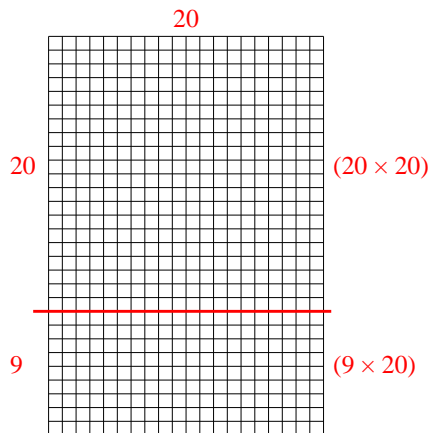


Use the array provided to solve each problem.

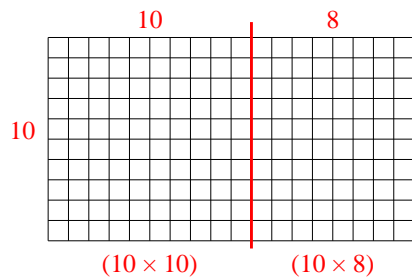
1)  $20 \times 35 =$



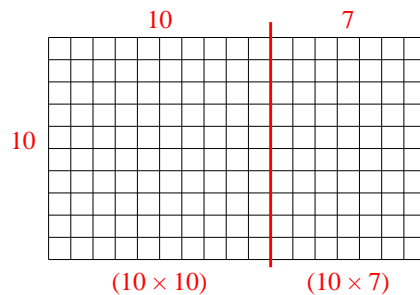
2)  $29 \times 20 =$



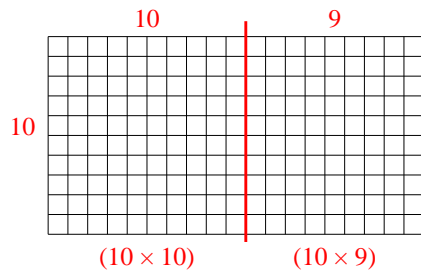
3)  $10 \times 18 =$



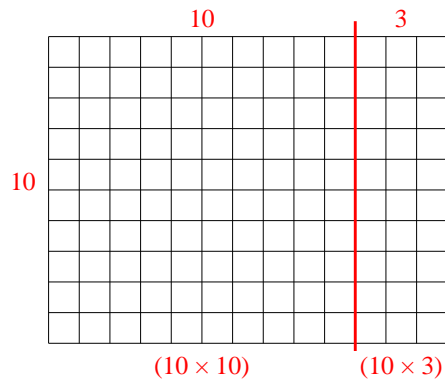
4)  $10 \times 17 =$



5)  $10 \times 19 =$



6)  $10 \times 13 =$



**Answers**

1. **700**
2. **580**
3. **180**
4. **170**
5. **190**
6. **130**