





Use the array provided to solve each problem.


1) $20 \times 16 =$




2) $10 \times 17 =$




3) $10 \times 19 =$




4) $10 \times 13 =$



5) $19 \times 10 =$



6) $15 \times 10 =$



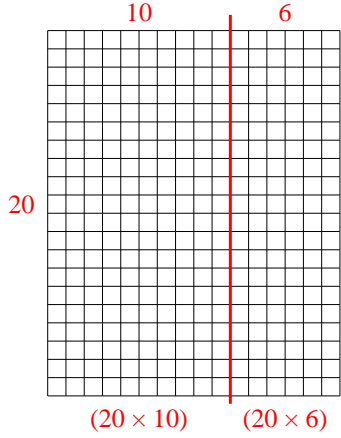
Answers

- 1. _____
- 2. _____
- 3. _____
- 4. _____
- 5. _____
- 6. _____

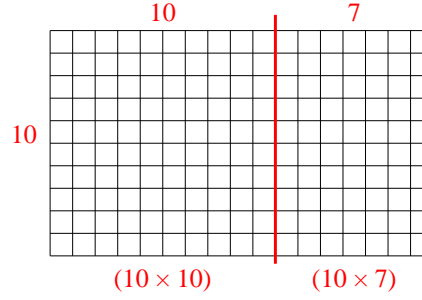


Use the array provided to solve each problem.

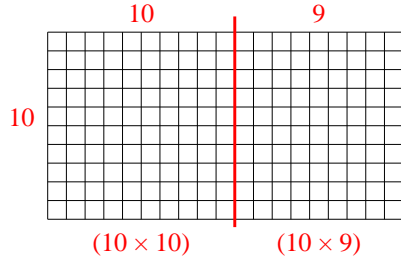
1) $20 \times 16 =$



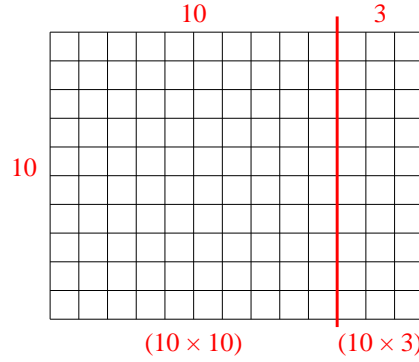
2) $10 \times 17 =$



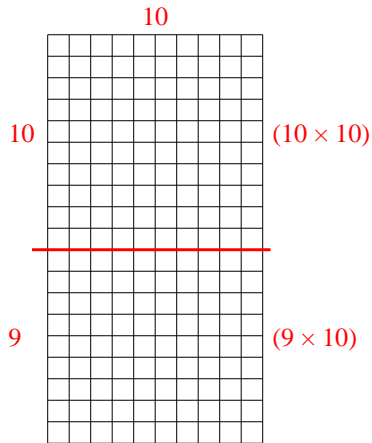
3) $10 \times 19 =$



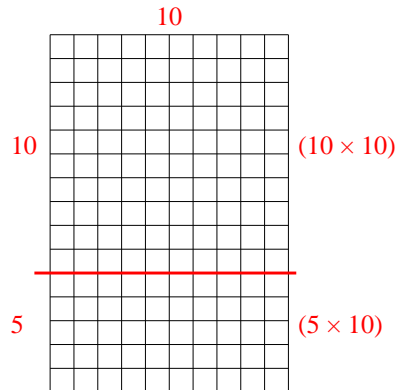
4) $10 \times 13 =$



5) $19 \times 10 =$



6) $15 \times 10 =$



Answers

1. 320
2. 170
3. 190
4. 130
5. 190
6. 150