





Use the array provided to solve each problem.


1) $15 \times 10 =$




2) $12 \times 10 =$




3) $10 \times 16 =$




4) $18 \times 10 =$



5) $16 \times 10 =$



6) $11 \times 10 =$



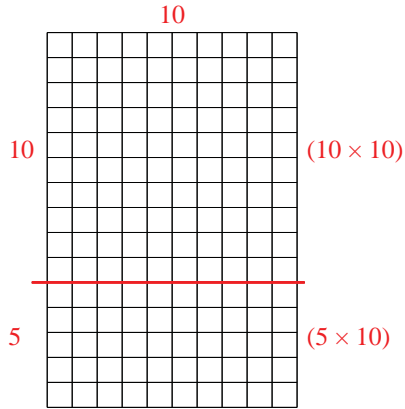
Answers

- 1. _____
- 2. _____
- 3. _____
- 4. _____
- 5. _____
- 6. _____

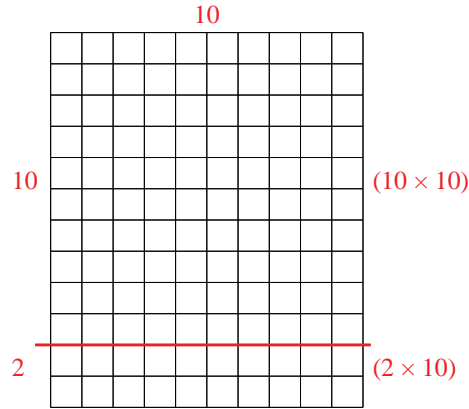


Use the array provided to solve each problem.

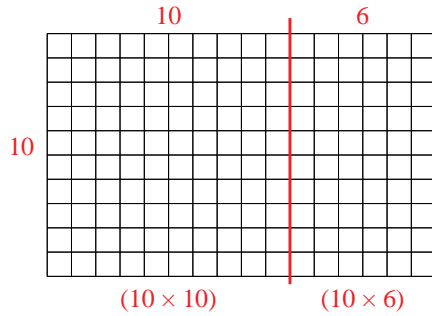
1) $15 \times 10 =$



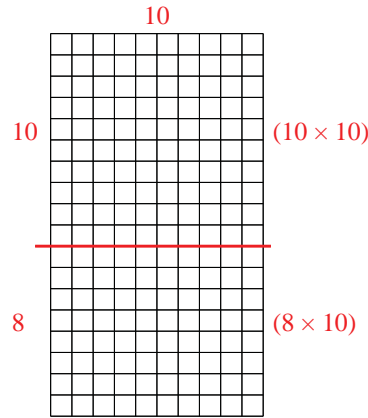
2) $12 \times 10 =$



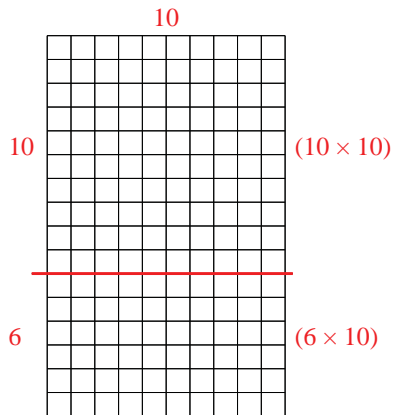
3) $10 \times 16 =$



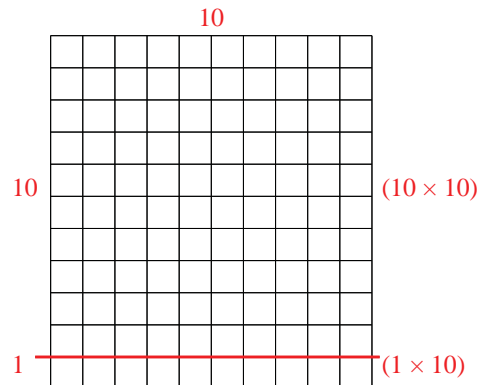
4) $18 \times 10 =$



5) $16 \times 10 =$



6) $11 \times 10 =$



Answers

1. 150
2. 120
3. 160
4. 180
5. 160
6. 110