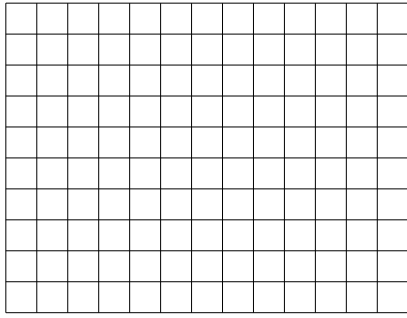





Use the array provided to solve each problem.


1) $10 \cdot 13 =$




2) $16 \cdot 10 =$




3) $18 \cdot 10 =$




4) $15 \cdot 10 =$



5) $13 \cdot 10 =$



6) $11 \cdot 10 =$



Answers

1. _____

2. _____

3. _____

4. _____

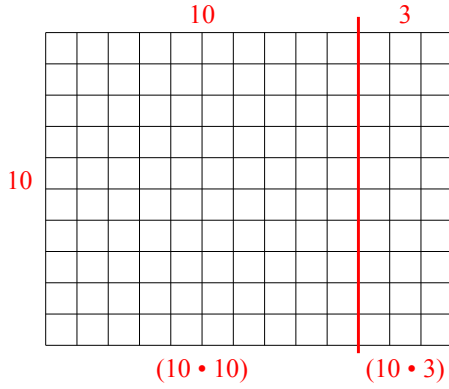
5. _____

6. _____

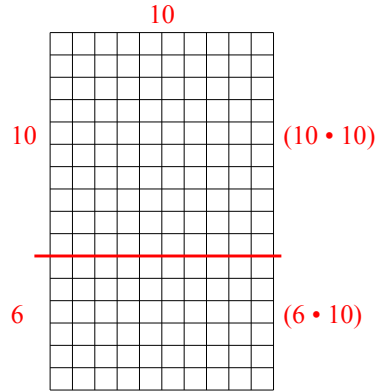


Use the array provided to solve each problem.

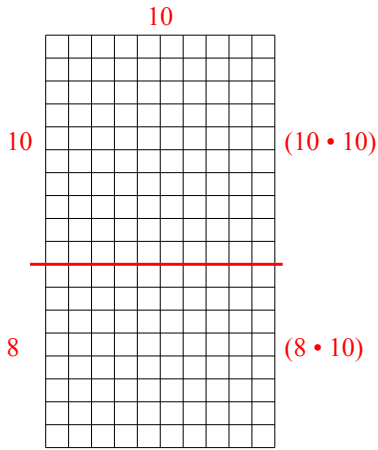
1) $10 \cdot 13 =$



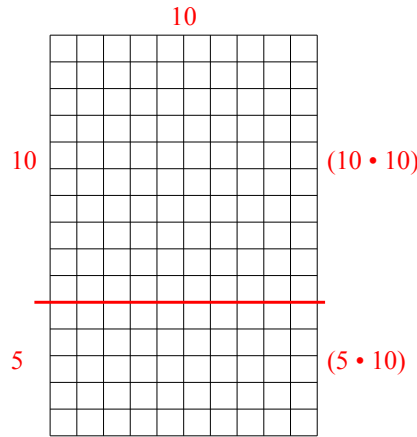
2) $16 \cdot 10 =$



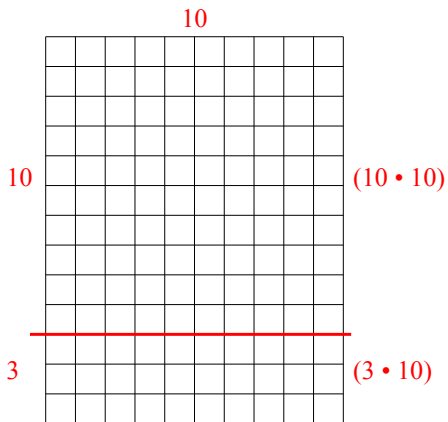
3) $18 \cdot 10 =$



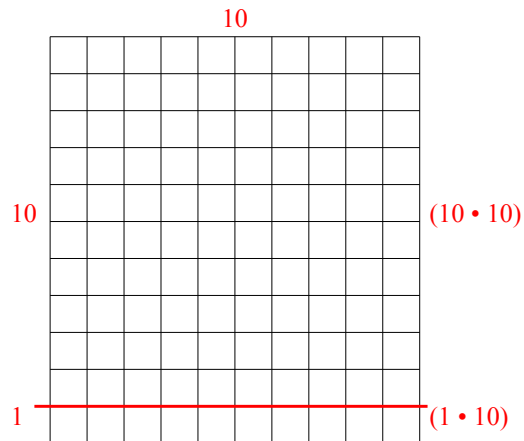
4) $15 \cdot 10 =$



5) $13 \cdot 10 =$



6) $11 \cdot 10 =$



Answers

1. 130
2. 160
3. 180
4. 150
5. 130
6. 110