





Use the array provided to solve each problem.


1) $10 \times 19 =$




2) $10 \times 17 =$




3) $11 \times 10 =$




4) $12 \times 10 =$



5) $10 \times 12 =$



6) $18 \times 10 =$



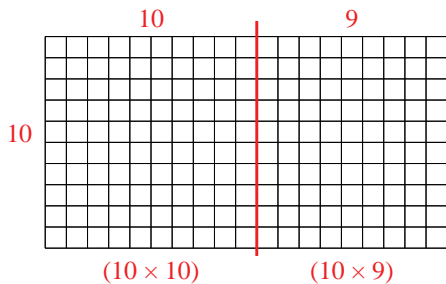
Answers

- 1. _____
- 2. _____
- 3. _____
- 4. _____
- 5. _____
- 6. _____

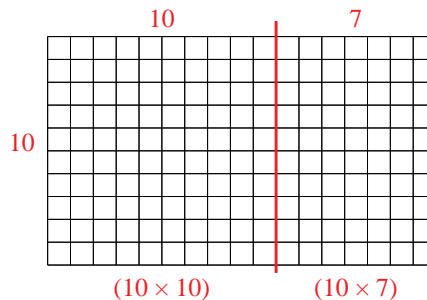


Use the array provided to solve each problem.

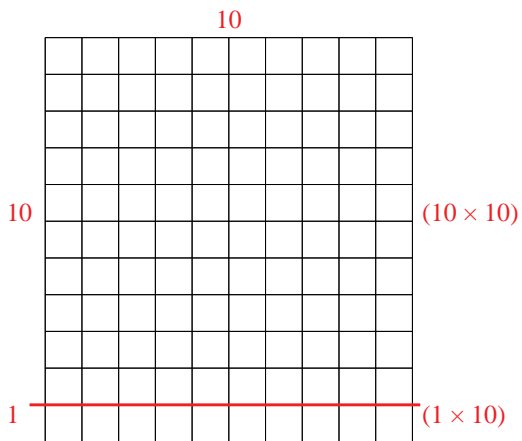
1) $10 \times 19 =$



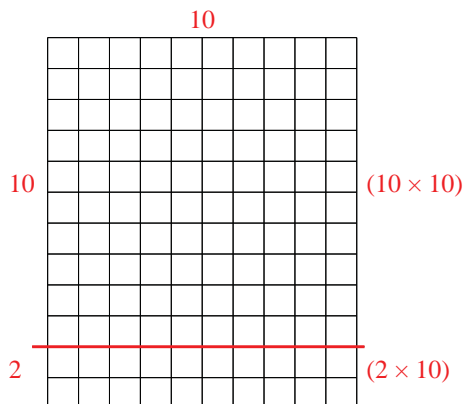
2) $10 \times 17 =$



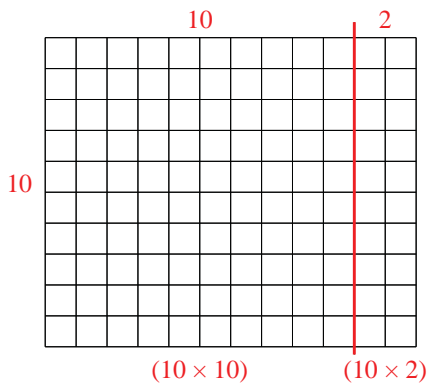
3) $11 \times 10 =$



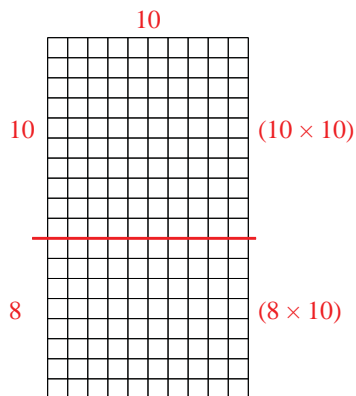
4) $12 \times 10 =$



5) $10 \times 12 =$



6) $18 \times 10 =$



Answers

1. 190
2. 170
3. 110
4. 120
5. 120
6. 180