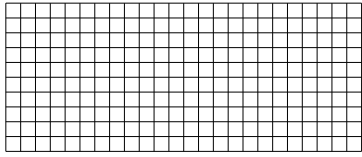





Use the array provided to solve each problem.


1) $10 \cdot 24 =$




2) $20 \cdot 22 =$




3) $10 \cdot 15 =$




4) $18 \cdot 10 =$



5) $17 \cdot 10 =$



6) $19 \cdot 10 =$



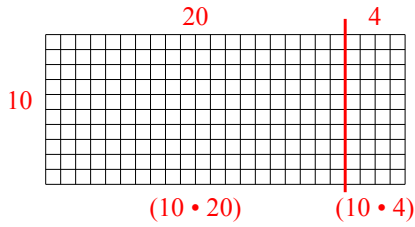
Answers

- 1. _____
- 2. _____
- 3. _____
- 4. _____
- 5. _____
- 6. _____

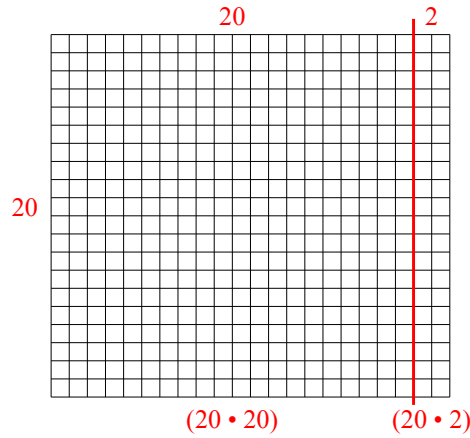


Use the array provided to solve each problem.

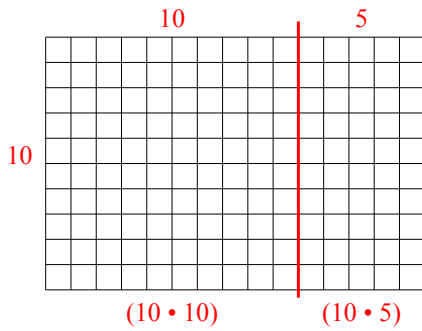
1) $10 \cdot 24 =$



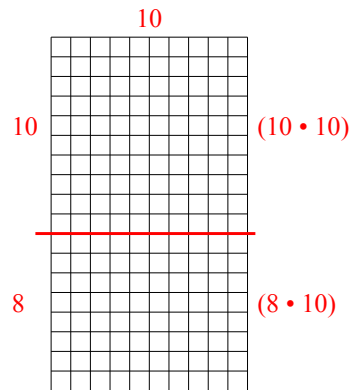
2) $20 \cdot 22 =$



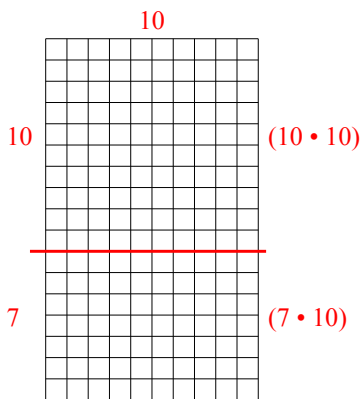
3) $10 \cdot 15 =$



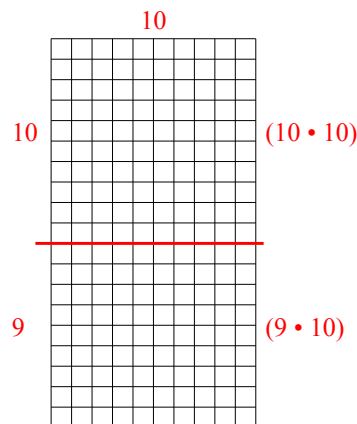
4) $18 \cdot 10 =$



5) $17 \cdot 10 =$



6) $19 \cdot 10 =$



Answers

1. 240
2. 440
3. 150
4. 180
5. 170
6. 190