





Use the array provided to solve each problem.


1) $20 \cdot 15 =$




2) $10 \cdot 21 =$




3) $10 \cdot 13 =$




4) $10 \cdot 14 =$



5) $10 \cdot 11 =$



6) $14 \cdot 10 =$



Answers

1. _____

2. _____

3. _____

4. _____

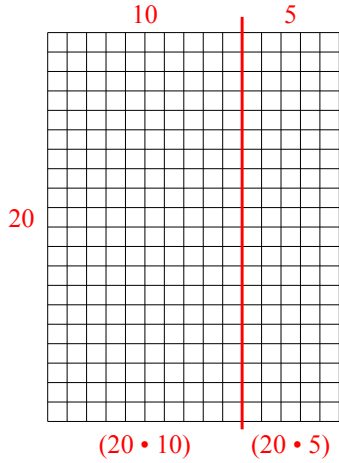
5. _____

6. _____

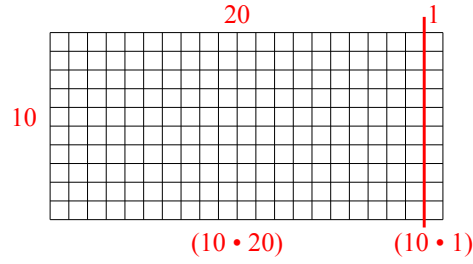


Use the array provided to solve each problem.

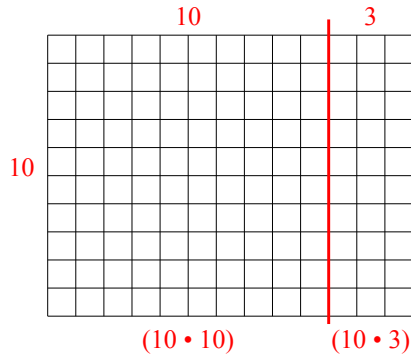
1) $20 \cdot 15 =$



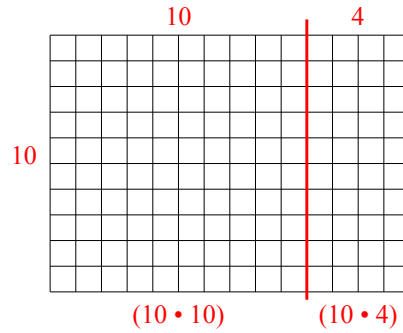
2) $10 \cdot 21 =$



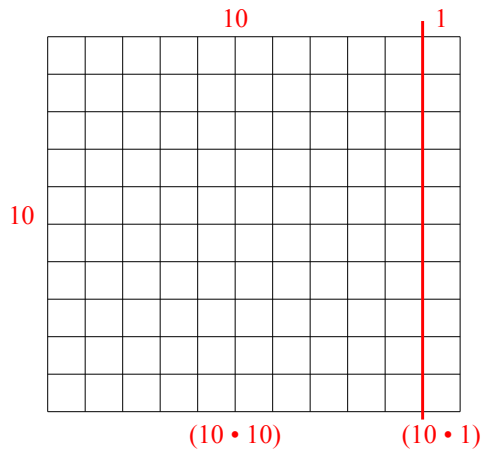
3) $10 \cdot 13 =$



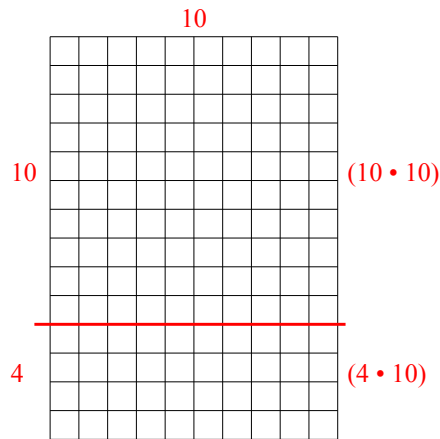
4) $10 \cdot 14 =$



5) $10 \cdot 11 =$



6) $14 \cdot 10 =$



Answers

1. 300
2. 210
3. 130
4. 140
5. 110
6. 140