





Use the array provided to solve each problem.


1) $29 \cdot 10 =$



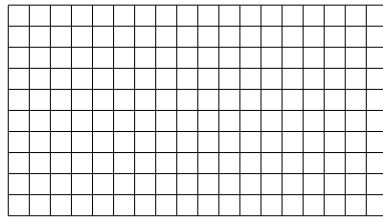
2) $19 \cdot 20 =$




3) $10 \cdot 19 =$




4) $10 \cdot 18 =$



5) $19 \cdot 10 =$



6) $10 \cdot 14 =$



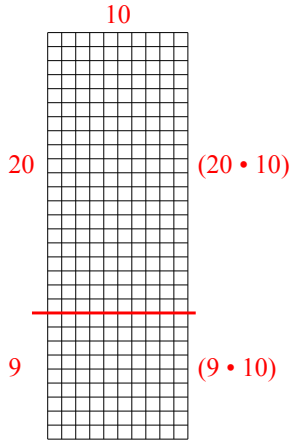
Answers

- 1. _____
- 2. _____
- 3. _____
- 4. _____
- 5. _____
- 6. _____

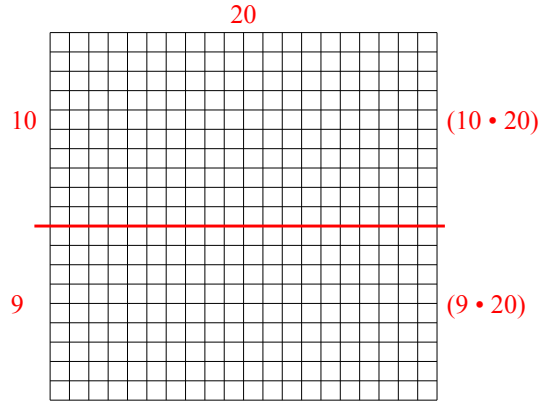


Use the array provided to solve each problem.

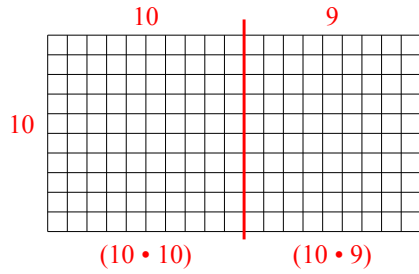
1) $29 \cdot 10 =$



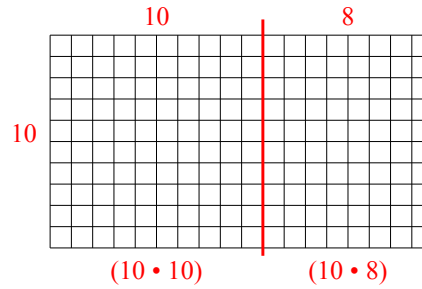
2) $19 \cdot 20 =$



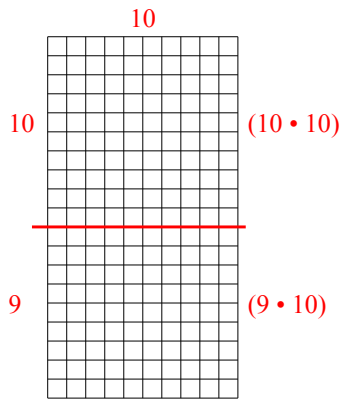
3) $10 \cdot 19 =$



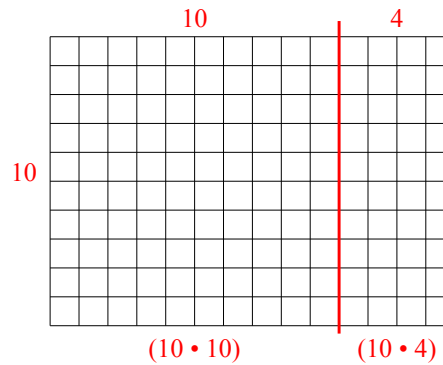
4) $10 \cdot 18 =$



5) $19 \cdot 10 =$



6) $10 \cdot 14 =$



Answers

1. 290
2. 380
3. 190
4. 180
5. 190
6. 140