
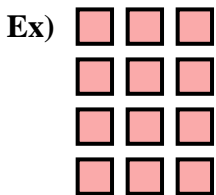




Write an equation to express the array and then find the number of shapes.



Answers

Ex. 4 × 3 = 12

1. _____

2. _____

3. _____

4. _____

5. _____

6. _____

7. _____

8. _____

9. _____



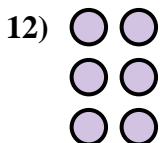





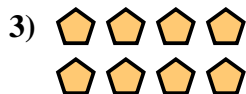
10. _____

11. _____

12. _____


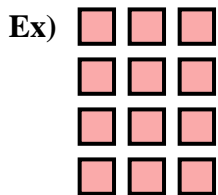
13. _____

14. _____





Write an equation to express the array and then find the number of shapes.



Answers

Ex. $4 \times 3 = 12$

1. $2 \times 3 = 6$

2. $3 \times 5 = 15$

3. $2 \times 4 = 8$

4. $2 \times 2 = 4$

5. $5 \times 3 = 15$

6. $3 \times 3 = 9$

7. $5 \times 4 = 20$

8. $4 \times 2 = 8$

9. $5 \times 2 = 10$



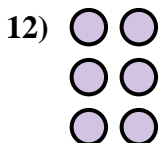





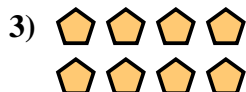
10. $3 \times 4 = 12$

11. $2 \times 5 = 10$

12. $3 \times 2 = 6$


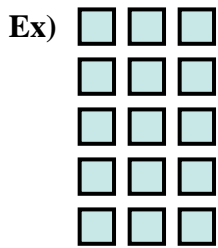
13. $4 \times 5 = 20$

14. $4 \times 4 = 16$





Write an equation to express the array and then find the number of shapes.



Answers

Ex. 5 × 3 = 15

1. _____

2. _____

3. _____

4. _____

5. _____

6. _____

7. _____

8. _____

9. _____

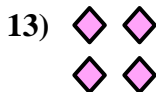

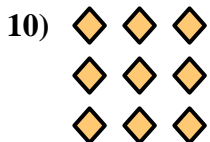
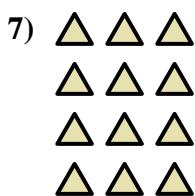
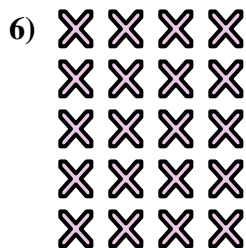


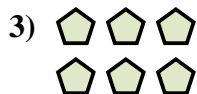
10. _____

11. _____

12. _____

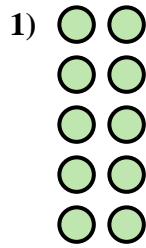
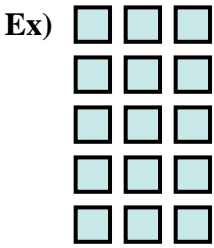
13. _____

14. _____





Write an equation to express the array and then find the number of shapes.



Answers

Ex. $5 \times 3 = 15$

1. $5 \times 2 = 10$

2. $5 \times 5 = 25$

3. $2 \times 3 = 6$

4. $4 \times 4 = 16$

5. $4 \times 5 = 20$

6. $5 \times 4 = 20$

7. $4 \times 3 = 12$

8. $3 \times 2 = 6$

9. $2 \times 4 = 8$

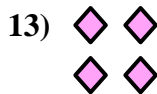

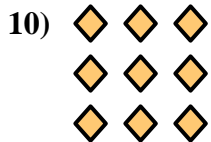

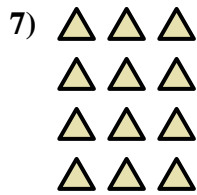
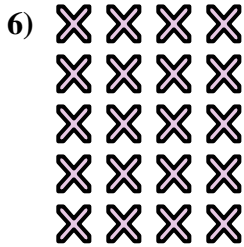


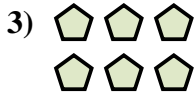
10. $3 \times 3 = 9$

11. $3 \times 4 = 12$

12. $2 \times 5 = 10$

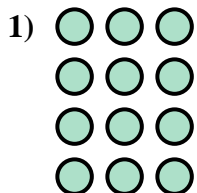
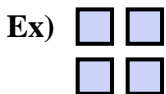
13. $2 \times 2 = 4$

14. $4 \times 2 = 8$





Write an equation to express the array and then find the number of shapes.



Answers

Ex. 2 × 2 = 4

1. _____

2. _____

3. _____

4. _____

5. _____

6. _____

7. _____

8. _____

9. _____

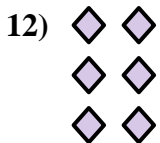



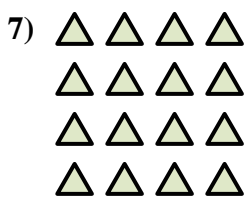


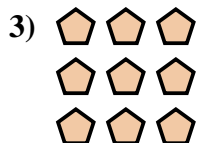
10. _____

11. _____

12. _____

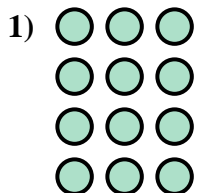
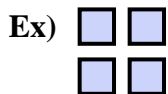
13. _____

14. _____





Write an equation to express the array and then find the number of shapes.



Answers

Ex. $2 \times 2 = 4$

1. $4 \times 3 = 12$

2. $5 \times 2 = 10$

3. $3 \times 3 = 9$

4. $5 \times 3 = 15$

5. $3 \times 5 = 15$

6. $4 \times 2 = 8$

7. $4 \times 4 = 16$

8. $5 \times 4 = 20$

9. $3 \times 4 = 12$

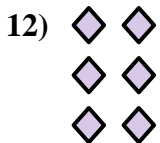



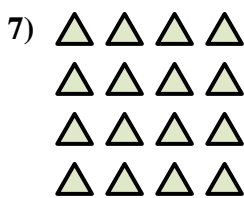


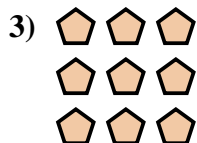
10. $2 \times 3 = 6$

11. $2 \times 4 = 8$

12. $3 \times 2 = 6$


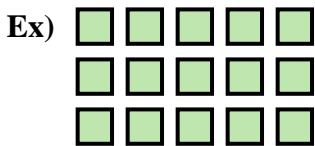
13. $4 \times 5 = 20$

14. $2 \times 5 = 10$





Write an equation to express the array and then find the number of shapes.



Answers

Ex. 3 × 5 = 15

1. _____

2. _____

3. _____

4. _____

5. _____

6. _____

7. _____

8. _____

9. _____

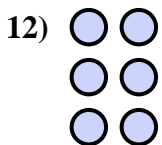
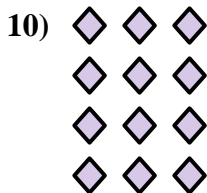



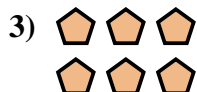
10. _____

11. _____

12. _____


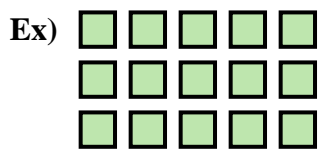
13. _____

14. _____





Write an equation to express the array and then find the number of shapes.



Answers

Ex. $3 \times 5 = 15$

1. $5 \times 2 = 10$

2. $4 \times 5 = 20$

3. $2 \times 3 = 6$

4. $5 \times 3 = 15$

5. $5 \times 5 = 25$

6. $3 \times 4 = 12$

7. $2 \times 5 = 10$

8. $3 \times 3 = 9$

9. $5 \times 4 = 20$

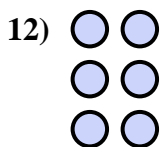

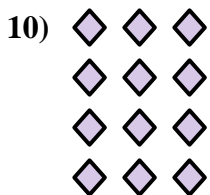




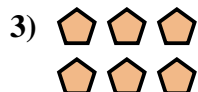
10. $4 \times 3 = 12$

11. $4 \times 4 = 16$

12. $3 \times 2 = 6$


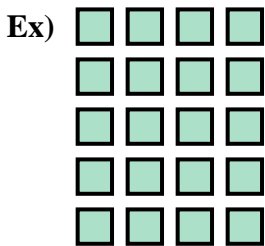
13. $2 \times 2 = 4$

14. $2 \times 4 = 8$





Write an equation to express the array and then find the number of shapes.



Answers

Ex. 5 × 4 = 20

1. _____

2. _____

3. _____

4. _____

5. _____

6. _____

7. _____

8. _____

9. _____

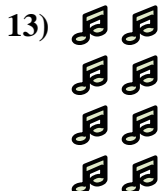





10. _____

11. _____

12. _____


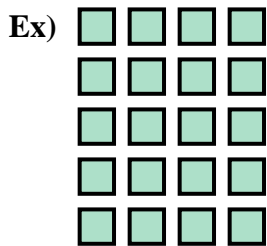
13. _____

14. _____





Write an equation to express the array and then find the number of shapes.



Answers

Ex. $5 \times 4 = 20$

1. $3 \times 4 = 12$

2. $4 \times 4 = 16$

3. $4 \times 5 = 20$

4. $3 \times 3 = 9$

5. $2 \times 2 = 4$

6. $4 \times 3 = 12$

7. $3 \times 5 = 15$

8. $3 \times 2 = 6$

9. $2 \times 3 = 6$

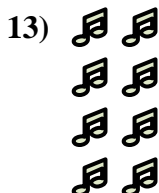






10. $2 \times 4 = 8$

11. $5 \times 2 = 10$

12. $5 \times 3 = 15$


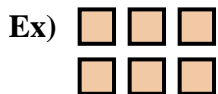
13. $4 \times 2 = 8$

14. $2 \times 5 = 10$





Write an equation to express the array and then find the number of shapes.



Answers

Ex. 2 × 3 = 6

1. _____

2. _____

3. _____

4. _____

5. _____

6. _____

7. _____

8. _____

9. _____


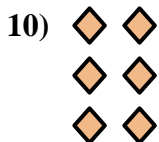

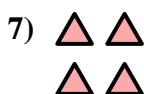
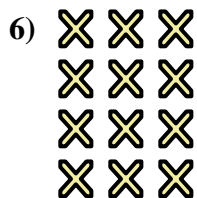


10. _____

11. _____

12. _____


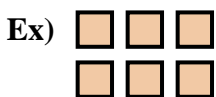
13. _____

14. _____





Write an equation to express the array and then find the number of shapes.



Answers

Ex. $2 \times 3 = 6$

1. $2 \times 5 = 10$

2. $4 \times 5 = 20$

3. $3 \times 4 = 12$

4. $4 \times 2 = 8$

5. $5 \times 2 = 10$

6. $4 \times 3 = 12$

7. $2 \times 2 = 4$

8. $3 \times 5 = 15$

9. $5 \times 4 = 20$



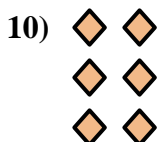

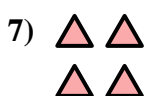
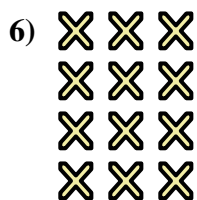



10. $3 \times 2 = 6$

11. $3 \times 3 = 9$

12. $5 \times 3 = 15$


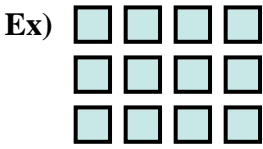
13. $2 \times 4 = 8$

14. $5 \times 5 = 25$





Write an equation to express the array and then find the number of shapes.



Answers

Ex. 3 × 4 = 12

1. _____

2. _____

3. _____

4. _____

5. _____

6. _____

7. _____

8. _____

9. _____

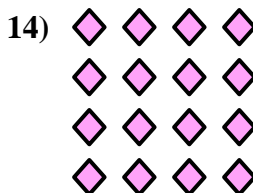





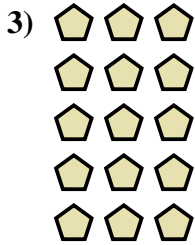
10. _____

11. _____

12. _____


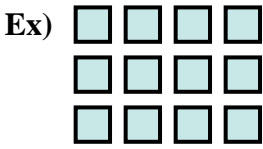
13. _____

14. _____





Write an equation to express the array and then find the number of shapes.



Answers

Ex. $3 \times 4 = 12$

1. $3 \times 5 = 15$

2. $2 \times 5 = 10$

3. $5 \times 3 = 15$

4. $2 \times 2 = 4$

5. $3 \times 2 = 6$

6. $4 \times 2 = 8$

7. $2 \times 3 = 6$

8. $5 \times 4 = 20$

9. $4 \times 3 = 12$

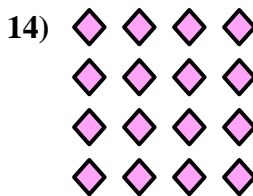



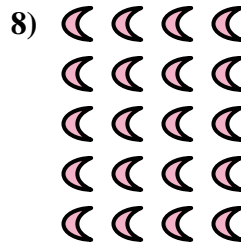

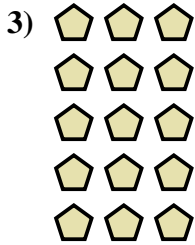
10. $4 \times 5 = 20$

11. $3 \times 3 = 9$

12. $2 \times 4 = 8$


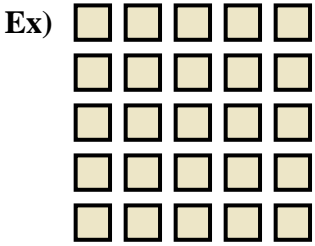
13. $5 \times 5 = 25$

14. $4 \times 4 = 16$





Write an equation to express the array and then find the number of shapes.



Answers

Ex. 5 × 5 = 25

1. _____

2. _____

3. _____

4. _____

5. _____

6. _____

7. _____

8. _____

9. _____

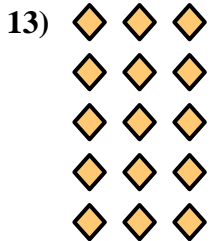




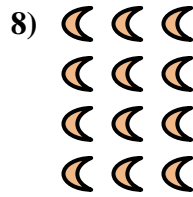
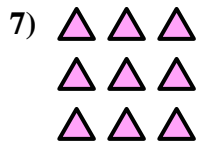
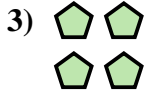
10. _____

11. _____

12. _____


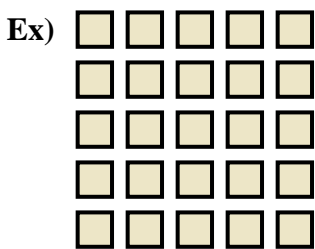
13. _____

14. _____





Write an equation to express the array and then find the number of shapes.



Answers

Ex. $5 \times 5 = 25$

1. $5 \times 2 = 10$

2. $3 \times 4 = 12$

3. $2 \times 2 = 4$

4. $2 \times 5 = 10$

5. $4 \times 2 = 8$

6. $2 \times 4 = 8$

7. $3 \times 3 = 9$

8. $4 \times 3 = 12$

9. $5 \times 4 = 20$


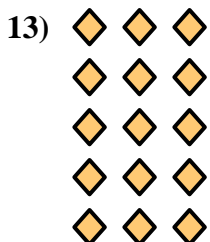




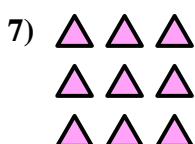
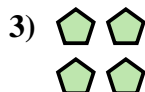
10. $2 \times 3 = 6$

11. $4 \times 4 = 16$

12. $4 \times 5 = 20$

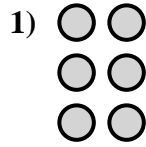
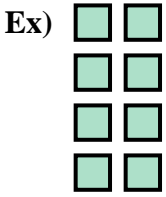
13. $5 \times 3 = 15$

14. $3 \times 2 = 6$





Write an equation to express the array and then find the number of shapes.



Answers

Ex. 4 × 2 = 8

1. _____

2. _____

3. _____

4. _____

5. _____

6. _____

7. _____

8. _____

9. _____


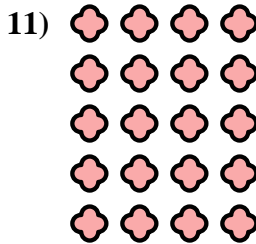

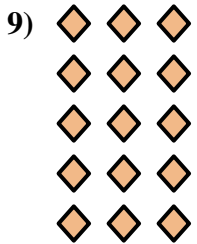

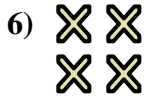


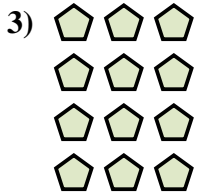
10. _____

11. _____

12. _____

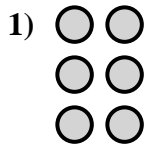
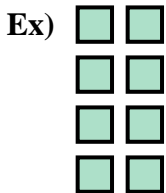
13. _____

14. _____





Write an equation to express the array and then find the number of shapes.



Answers

Ex. $4 \times 2 = 8$

1. $3 \times 2 = 6$

2. $2 \times 4 = 8$

3. $4 \times 3 = 12$

4. $3 \times 4 = 12$

5. $4 \times 5 = 20$

6. $2 \times 2 = 4$

7. $2 \times 5 = 10$

8. $5 \times 5 = 25$

9. $5 \times 3 = 15$


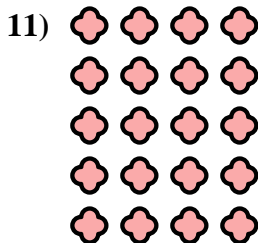

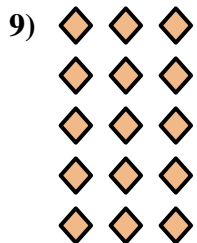

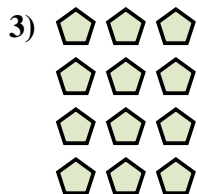
10. $2 \times 3 = 6$

11. $5 \times 4 = 20$

12. $4 \times 4 = 16$


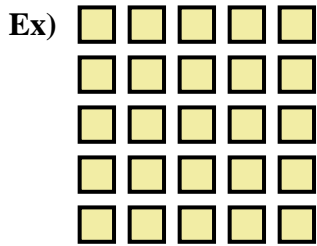
13. $3 \times 5 = 15$

14. $5 \times 2 = 10$





Write an equation to express the array and then find the number of shapes.



Answers

Ex. 5 × 5 = 25

1. _____

2. _____

3. _____

4. _____

5. _____

6. _____

7. _____

8. _____

9. _____




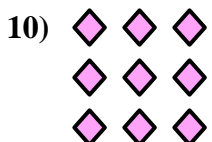


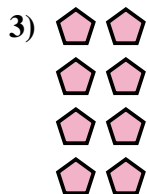
10. _____

11. _____

12. _____


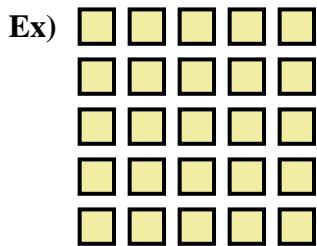
13. _____

14. _____





Write an equation to express the array and then find the number of shapes.



Answers

Ex. $5 \times 5 = 25$

1. $2 \times 3 = 6$

2. $3 \times 2 = 6$

3. $4 \times 2 = 8$

4. $2 \times 4 = 8$

5. $2 \times 5 = 10$

6. $3 \times 4 = 12$

7. $5 \times 3 = 15$

8. $4 \times 4 = 16$

9. $4 \times 5 = 20$

10. $3 \times 3 = 9$

11. $5 \times 4 = 20$

12. $5 \times 2 = 10$

13. $4 \times 3 = 12$

14. $3 \times 5 = 15$

