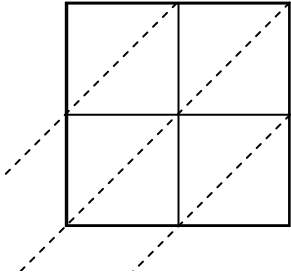


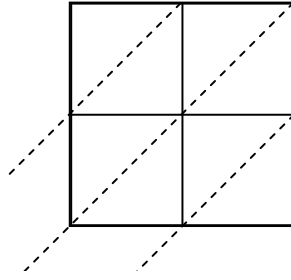


Use lattice multiplication to solve each problem.

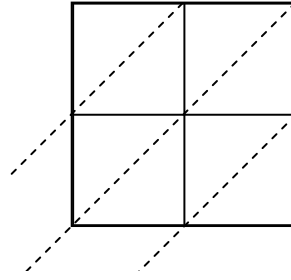
1) $58 \times 69 =$



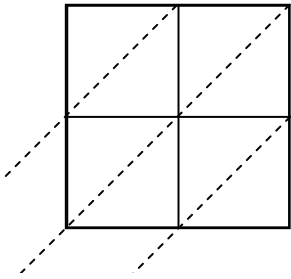
2) $69 \times 80 =$



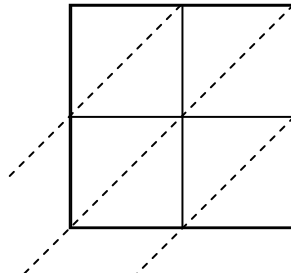
3) $55 \times 98 =$



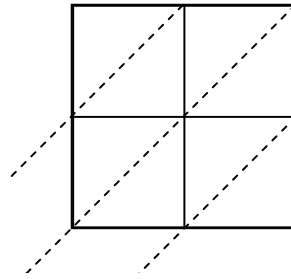
4) $17 \times 97 =$



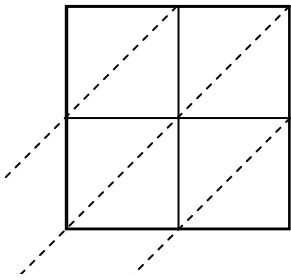
5) $94 \times 94 =$



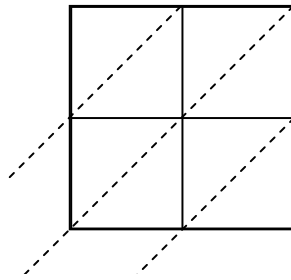
6) $56 \times 77 =$



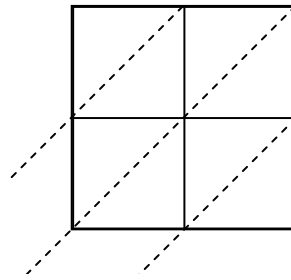
7) $29 \times 10 =$



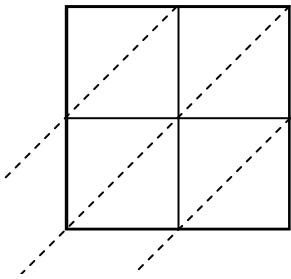
8) $79 \times 37 =$



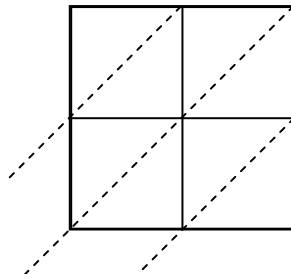
9) $78 \times 68 =$



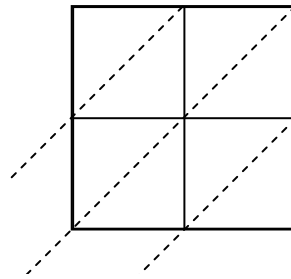
10) $66 \times 53 =$



11) $79 \times 48 =$



12) $58 \times 91 =$



Answers

1. _____

2. _____

3. _____

4. _____

5. _____

6. _____

7. _____

8. _____

9. _____

10. _____

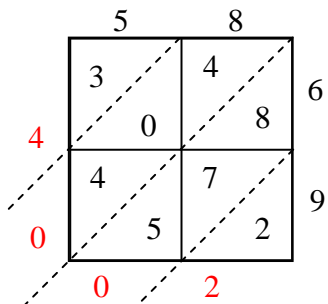
11. _____

12. _____

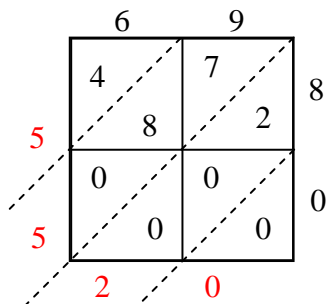


Use lattice multiplication to solve each problem.

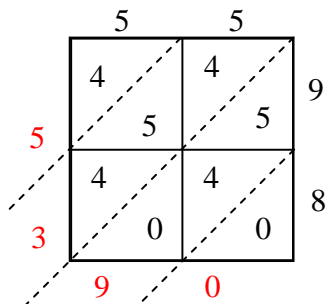
1) $58 \times 69 =$



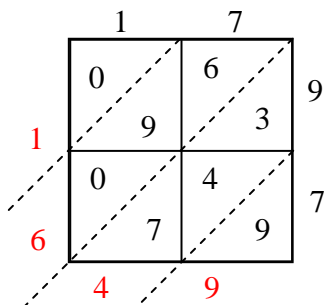
2) $69 \times 80 =$



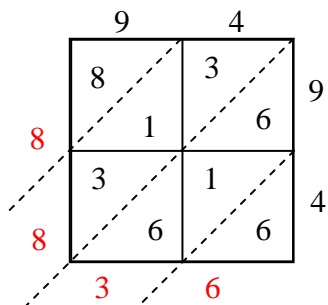
3) $55 \times 98 =$



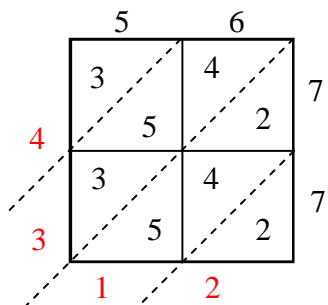
4) $17 \times 97 =$



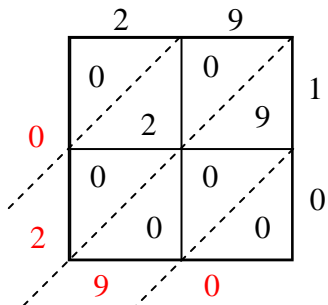
5) $94 \times 94 =$



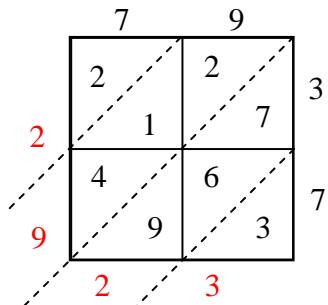
6) $56 \times 77 =$



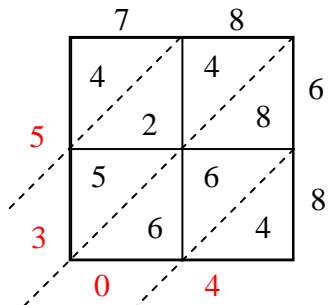
7) $29 \times 10 =$



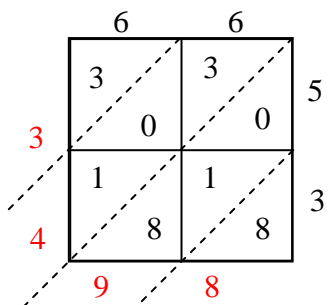
8) $79 \times 37 =$



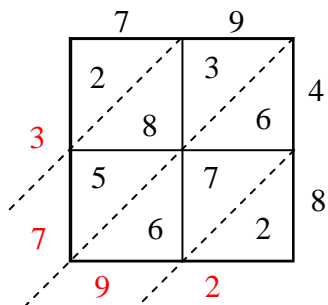
9) $78 \times 68 =$



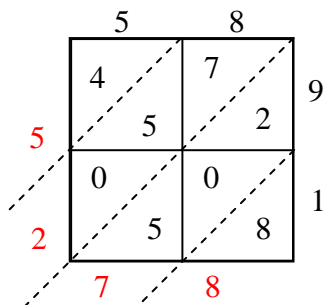
10) $66 \times 53 =$



11) $79 \times 48 =$



12) $58 \times 91 =$



Answers

1. 4,002
2. 5,520
3. 5,390
4. 1,649
5. 8,836
6. 4,312
7. 290
8. 2,923
9. 5,304
10. 3,498
11. 3,792
12. 5,278