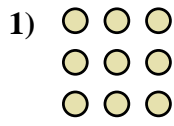





Write each array as an addition problem and solve.



Answers

Ex. 5+5+5+5=20

1. _____

2. _____

3. _____

4. _____

5. _____

6. _____

7. _____

8. _____

9. _____

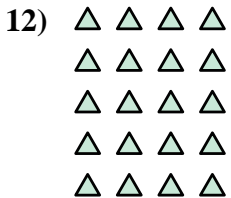
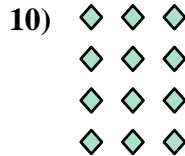


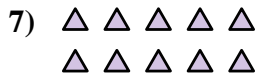



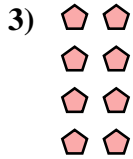
10. _____

11. _____

12. _____

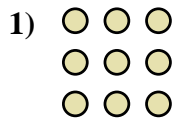

13. _____

14. _____





Write each array as an addition problem and solve.



Answers

Ex. 5+5+5+5=20

1. 3+3+3=9

2. 4+4+4=12

3. 2+2+2+2=8

4. 5+5+5+5+5=25

5. 3+3+3+3+3=15

6. 4+4+4+4=16

7. 5+5=10

8. 2+2+2=6

9. 3+3=6

10. 3+3+3+3=12

11. 4+4=8

12. 4+4+4+4+4=20

13. 2+2+2+2+2=10

14. 5+5+5=15

