

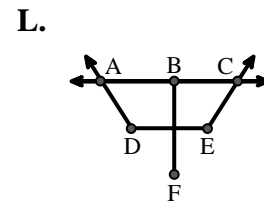
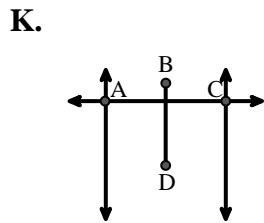
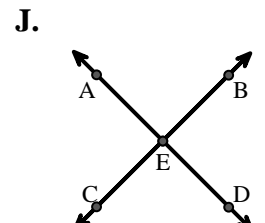
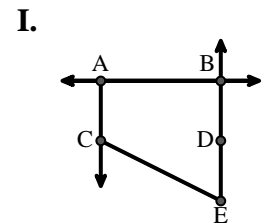
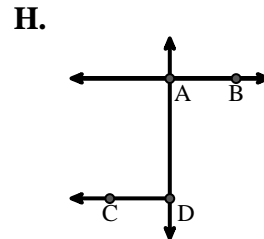
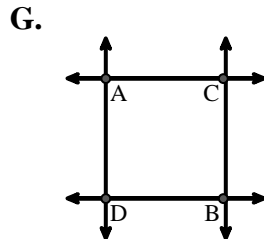
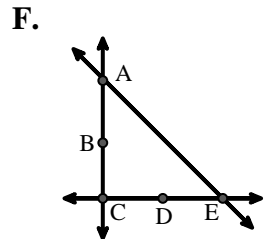
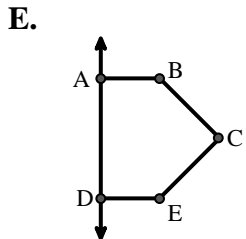
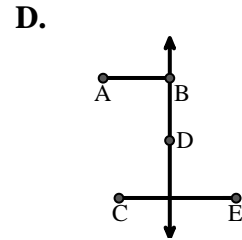
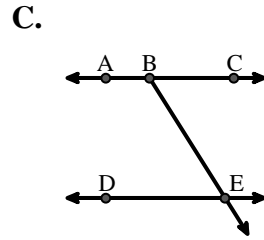
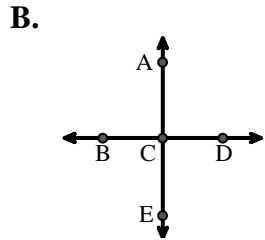
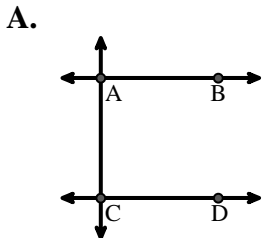


Match the description on the top with the visual image on the bottom.

Answers

- 1) Acute $\angle BED$
- 2) \overleftrightarrow{AC} intersected by \overleftrightarrow{BD}
- 3) \overleftrightarrow{AC} parallel to \overleftrightarrow{EB}
- 4) D as the midpoint of \overleftrightarrow{CE}
- 5) Right $\angle ADE$
- 6) \overleftrightarrow{AB} parallel to \overleftrightarrow{CD}
- 7) \overleftrightarrow{AC} perpendicular to \overleftrightarrow{AD}
- 8) $\angle DEC$ intersected by \overleftrightarrow{AC}
- 9) \overleftrightarrow{AB} intersecting \overleftrightarrow{AD}
- 10) \overleftrightarrow{AD} intersecting \overleftrightarrow{BC} at point E
- 11) \overleftrightarrow{AE} intersecting \overleftrightarrow{DB}
- 12) \overleftrightarrow{BD} intersecting \overleftrightarrow{CE}

1. _____
2. _____
3. _____
4. _____
5. _____
6. _____
7. _____
8. _____
9. _____
10. _____
11. _____
12. _____





Match the description on the top with the visual image on the bottom.

- 1) Acute $\angle BED$
- 2) \overleftrightarrow{AC} intersected by \overline{BD}
- 3) \overleftrightarrow{AC} parallel to \overleftrightarrow{EB}
- 4) D as the midpoint of \overleftrightarrow{CE}
- 5) Right $\angle ADE$
- 6) \overleftrightarrow{AB} parallel to \overleftrightarrow{CD}
- 7) \overleftrightarrow{AC} perpendicular to \overleftrightarrow{AD}
- 8) $\angle DEC$ intersected by \overleftrightarrow{AC}
- 9) \overleftrightarrow{AB} intersecting \overleftrightarrow{AD}
- 10) \overleftrightarrow{AD} intersecting \overleftrightarrow{BC} at point E
- 11) \overleftrightarrow{AE} intersecting \overleftrightarrow{DB}
- 12) \overleftrightarrow{BD} intersecting \overline{CE}

Answers

1. **C**
2. **K**
3. **I**
4. **F**
5. **E**
6. **A**
7. **G**
8. **L**
9. **H**
10. **J**
11. **B**
12. **D**

