


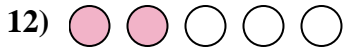
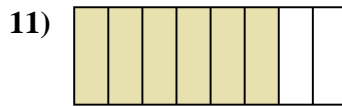
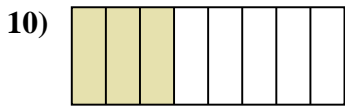
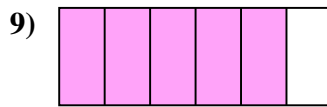
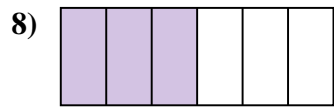
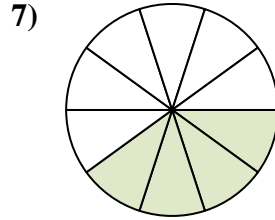
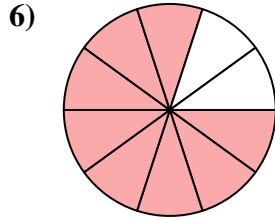
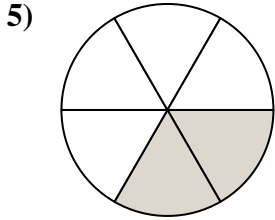

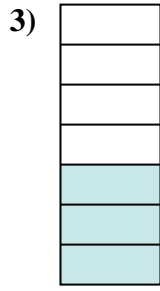
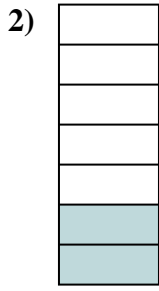




Determine if the shaded amount is 'more', 'less' or 'equal' to half.



Answers

1. \_\_\_\_\_

2. \_\_\_\_\_

3. \_\_\_\_\_

4. \_\_\_\_\_

5. \_\_\_\_\_

6. \_\_\_\_\_

7. \_\_\_\_\_

8. \_\_\_\_\_

9. \_\_\_\_\_

10. \_\_\_\_\_

11. \_\_\_\_\_

12. \_\_\_\_\_

13. \_\_\_\_\_

14. \_\_\_\_\_

15. \_\_\_\_\_

16. \_\_\_\_\_

17. \_\_\_\_\_

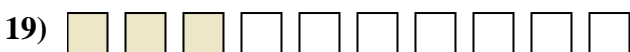
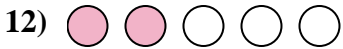
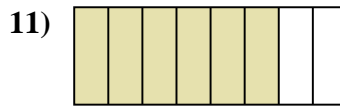
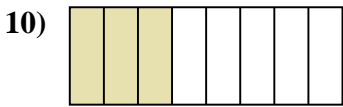
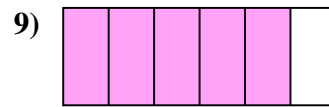
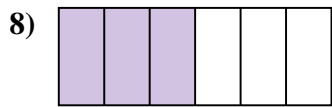
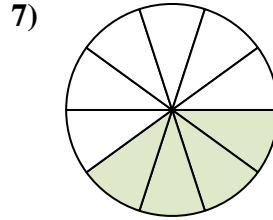
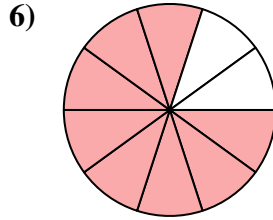
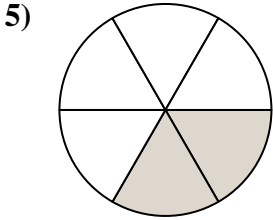



18. \_\_\_\_\_

19. \_\_\_\_\_

20. \_\_\_\_\_



Determine if the shaded amount is 'more', 'less' or 'equal' to half.



Answers

1. more

2. less

3. less

4. more

5. less

6. more

7. less

8. equal

9. more

10. less

11. more

12. less

13. less

14. less

15. more

16. equal

17. equal

18. more

19. less

20. less