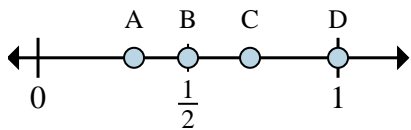
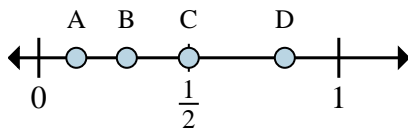




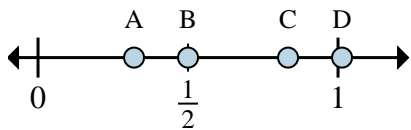
Determine which letter best shows the location of the fraction.



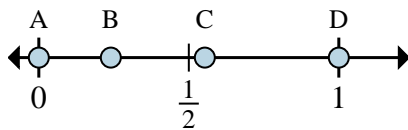
- 1) Which letter best shows  $\frac{4}{4}$ ?
- 2) Which letter best shows  $\frac{2}{4}$ ?



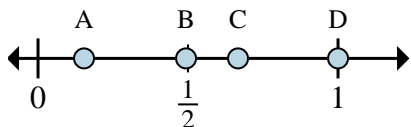
- 3) Which letter best shows  $\frac{4}{8}$ ?
- 4) Which letter best shows  $\frac{1}{8}$ ?



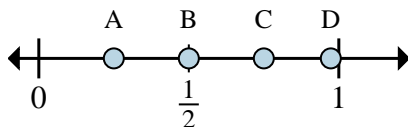
- 5) Which letter best shows  $\frac{5}{6}$ ?
- 6) Which letter best shows  $\frac{3}{6}$ ?



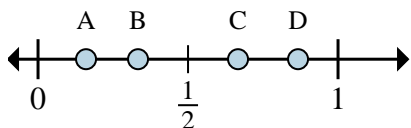
- 7) Which letter best shows  $\frac{0}{3}$ ?
- 8) Which letter best shows  $\frac{3}{3}$ ?



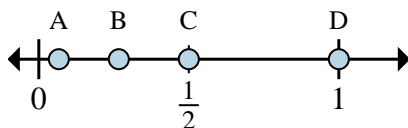
- 9) Which letter best shows  $\frac{6}{6}$ ?
- 10) Which letter best shows  $\frac{4}{6}$ ?



- 11) Which letter best shows  $\frac{1}{4}$ ?
- 12) Which letter best shows  $\frac{3}{4}$ ?



- 13) Which letter best shows  $\frac{2}{3}$ ?
- 14) Which letter best shows  $\frac{1}{3}$ ?



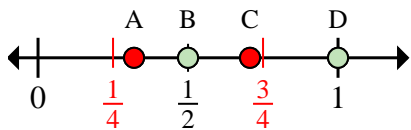
- 15) Which letter best shows  $\frac{1}{2}$ ?
- 16) Which letter best shows  $\frac{2}{2}$ ?

Answers

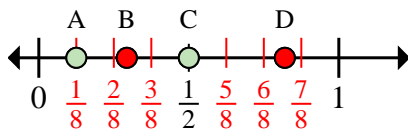
- 1. \_\_\_\_\_
- 2. \_\_\_\_\_
- 3. \_\_\_\_\_
- 4. \_\_\_\_\_
- 5. \_\_\_\_\_
- 6. \_\_\_\_\_
- 7. \_\_\_\_\_
- 8. \_\_\_\_\_
- 9. \_\_\_\_\_
- 10. \_\_\_\_\_
- 11. \_\_\_\_\_
- 12. \_\_\_\_\_
- 13. \_\_\_\_\_
- 14. \_\_\_\_\_
- 15. \_\_\_\_\_
- 16. \_\_\_\_\_



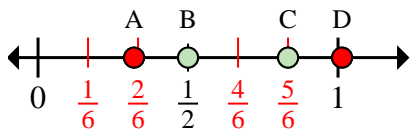
Determine which letter best shows the location of the fraction.



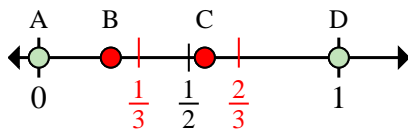
- 1) Which letter best shows  $\frac{3}{4}$ ?
- 2) Which letter best shows  $\frac{2}{4}$ ?



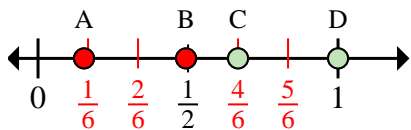
- 3) Which letter best shows  $\frac{4}{8}$ ?
- 4) Which letter best shows  $\frac{1}{8}$ ?



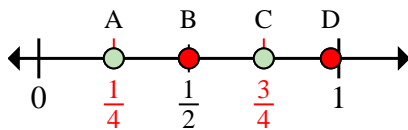
- 5) Which letter best shows  $\frac{5}{6}$ ?
- 6) Which letter best shows  $\frac{3}{6}$ ?



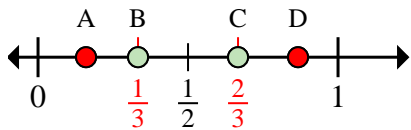
- 7) Which letter best shows  $\frac{0}{3}$ ?
- 8) Which letter best shows  $\frac{3}{3}$ ?



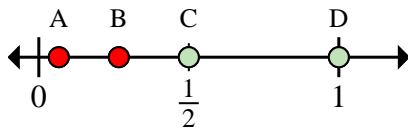
- 9) Which letter best shows  $\frac{6}{6}$ ?
- 10) Which letter best shows  $\frac{4}{6}$ ?



- 11) Which letter best shows  $\frac{1}{4}$ ?
- 12) Which letter best shows  $\frac{3}{4}$ ?



- 13) Which letter best shows  $\frac{2}{3}$ ?
- 14) Which letter best shows  $\frac{1}{3}$ ?



- 15) Which letter best shows  $\frac{1}{2}$ ?
- 16) Which letter best shows  $\frac{2}{2}$ ?

Answers

- 1.     **D**
- 2.     **B**
- 3.     **C**
- 4.     **A**
- 5.     **C**
- 6.     **B**
- 7.     **A**
- 8.     **D**
- 9.     **D**
- 10.     **C**
- 11.     **A**
- 12.     **C**
- 13.     **C**
- 14.     **B**
- 15.     **C**
- 16.     **D**