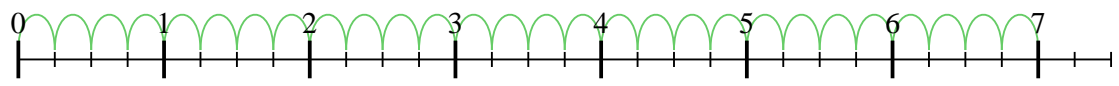


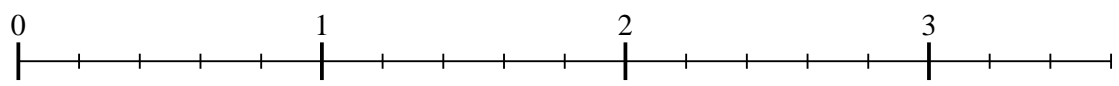


Use the numberline to solve each problem. The first is marked for you.

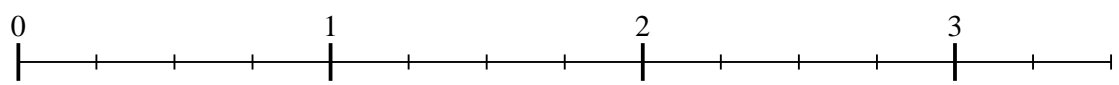
1) $7 \div \frac{1}{4}$



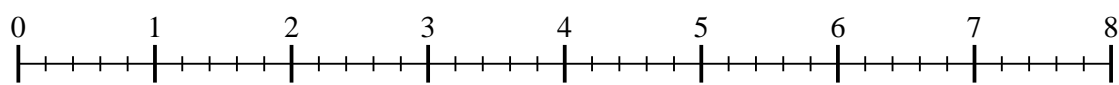
2) $3 \div \frac{1}{5}$



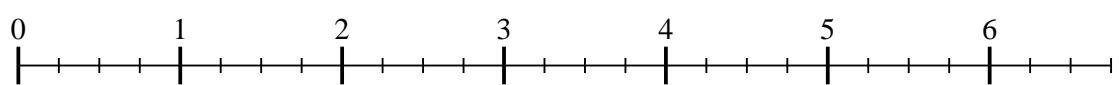
3) $3 \div \frac{1}{4}$



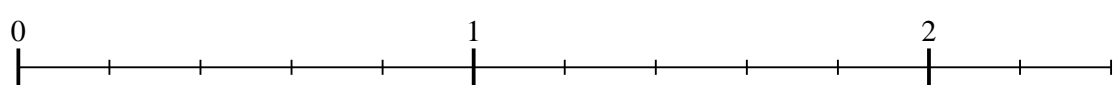
4) $7 \div \frac{1}{5}$



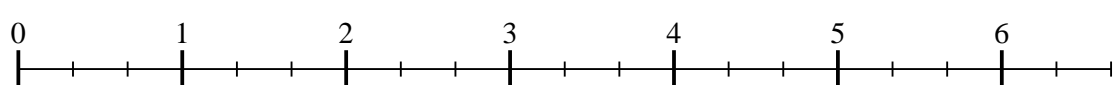
5) $6 \div \frac{1}{4}$




6) $2 \div \frac{1}{5}$



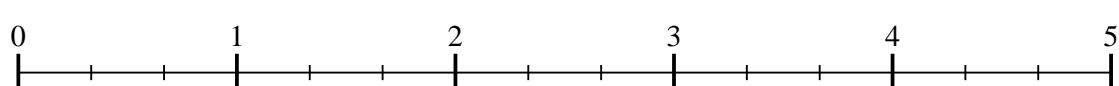
7) $6 \div \frac{1}{3}$



8) $3 \div \frac{1}{3}$



9) $4 \div \frac{1}{3}$



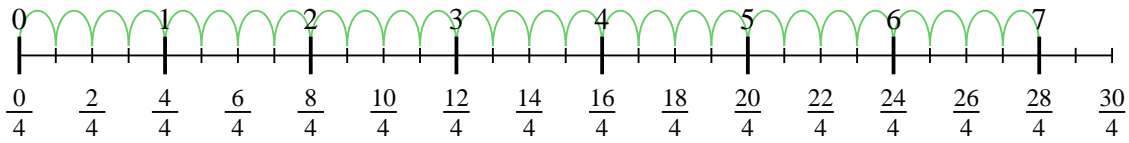
Answers

1. _____
2. _____
3. _____
4. _____
5. _____
6. _____
7. _____
8. _____
9. _____

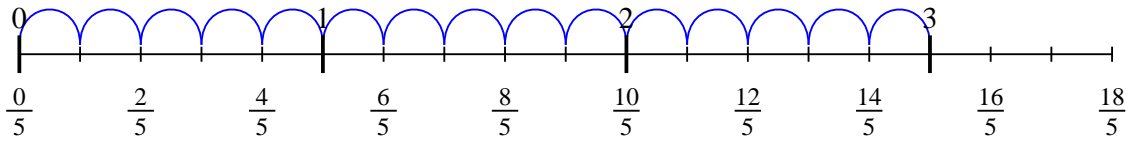


Use the numberline to solve each problem. The first is marked for you.

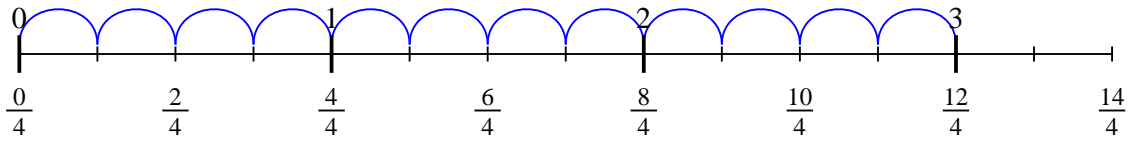
1) $7 \div \frac{1}{4}$



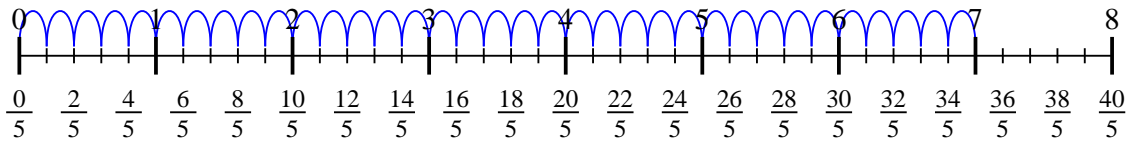
2) $3 \div \frac{1}{5}$



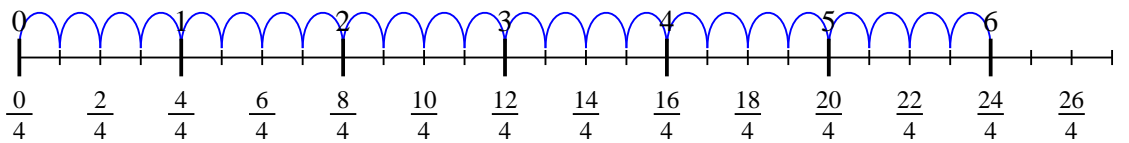
3) $3 \div \frac{1}{4}$



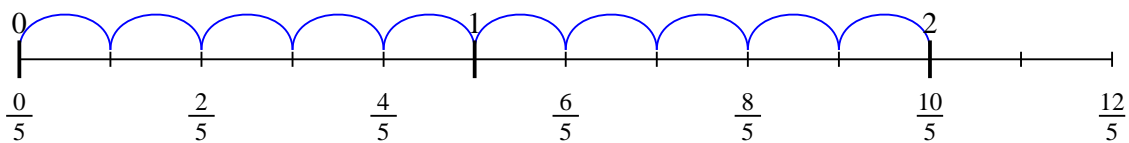
4) $7 \div \frac{1}{5}$



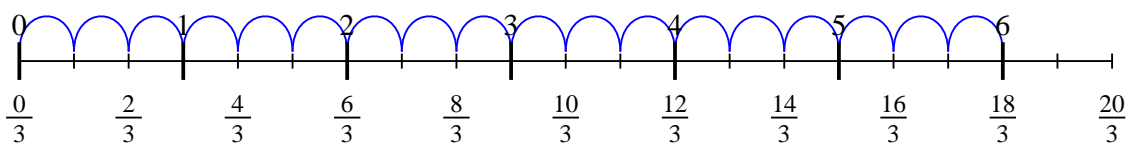
5) $6 \div \frac{1}{4}$



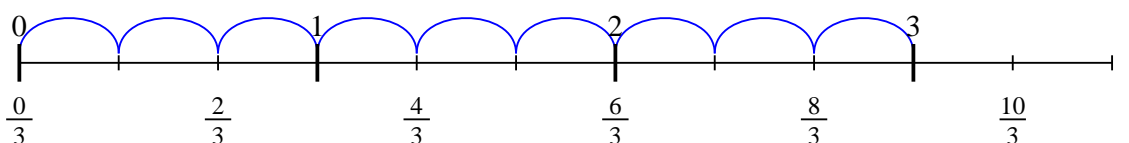
6) $2 \div \frac{1}{5}$



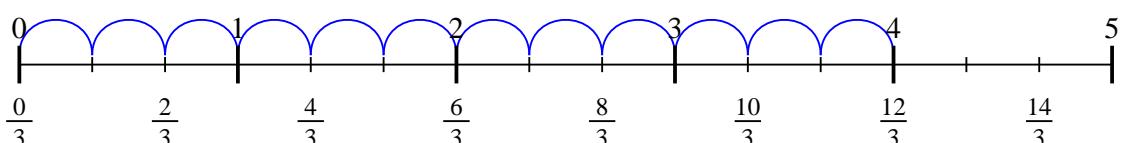
7) $6 \div \frac{1}{3}$



8) $3 \div \frac{1}{3}$



9) $4 \div \frac{1}{3}$



Answers

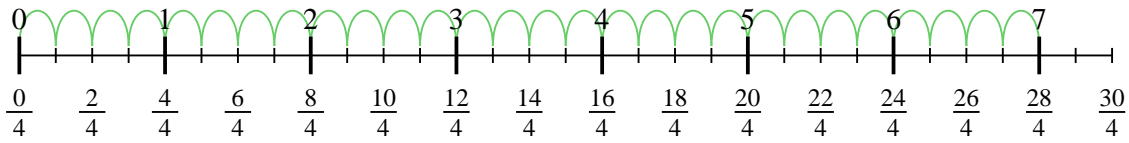
1. 28
2. 15
3. 12
4. 35
5. 24
6. 10
7. 18
8. 9
9. 12



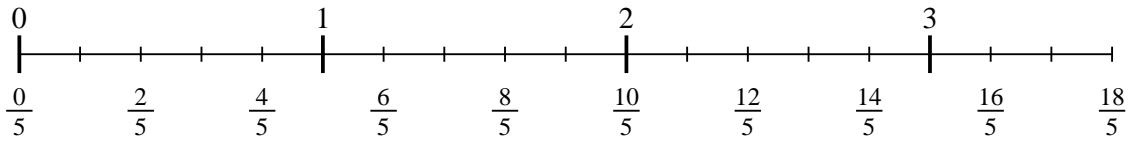
Use the numberline to solve each problem. The first is marked for you.

Answers

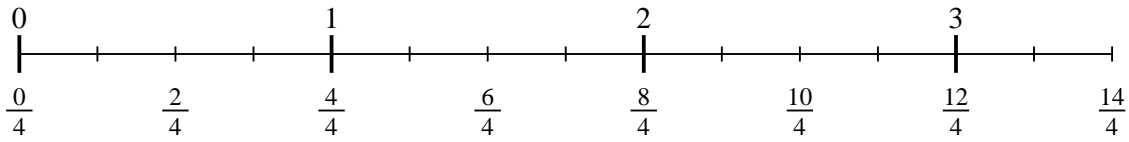
1) $7 \div \frac{1}{4}$



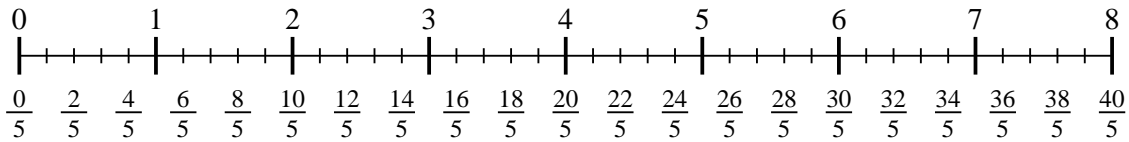
2) $3 \div \frac{1}{5}$



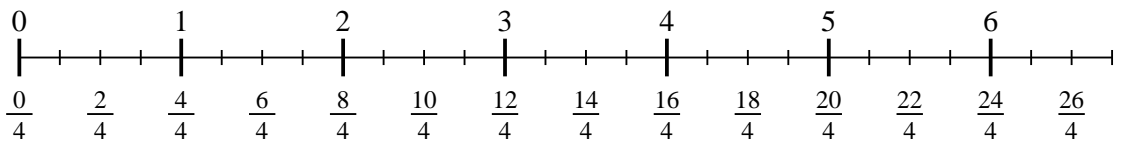
3) $3 \div \frac{1}{4}$



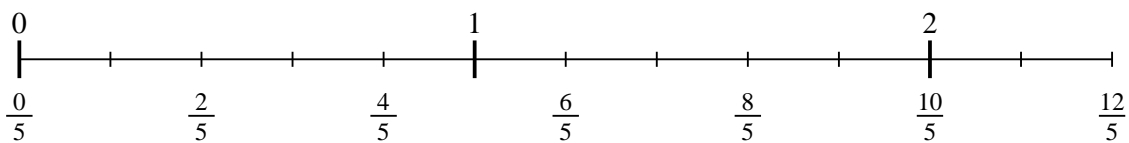
4) $7 \div \frac{1}{5}$



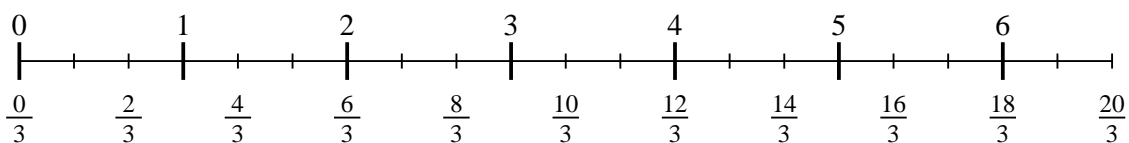
5) $6 \div \frac{1}{4}$



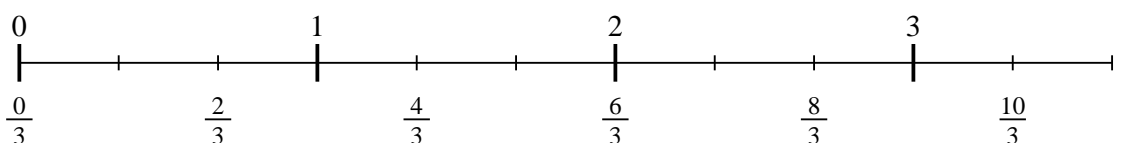
6) $2 \div \frac{1}{5}$



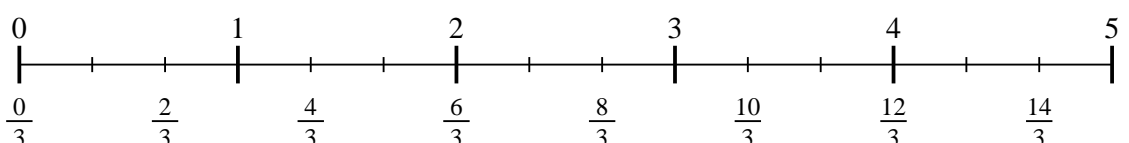
7) $6 \div \frac{1}{3}$



8) $3 \div \frac{1}{3}$



9) $4 \div \frac{1}{3}$



1. _____
2. _____
3. _____
4. _____
5. _____
6. _____
7. _____
8. _____
9. _____