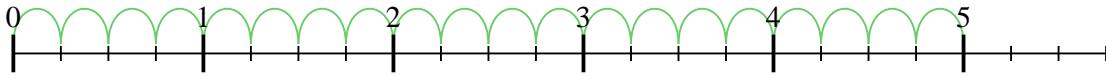


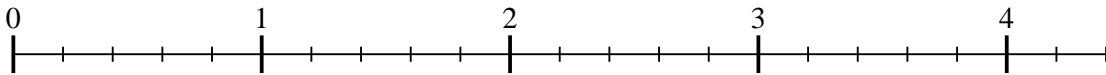


Use the numberline to solve each problem. The first is marked for you.

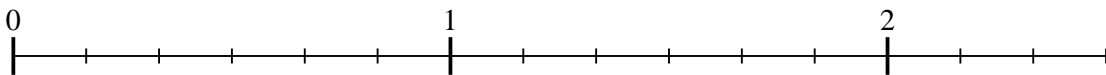
1)  $5 \div \frac{1}{4}$



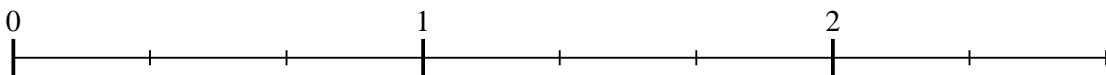
2)  $4 \div \frac{1}{5}$



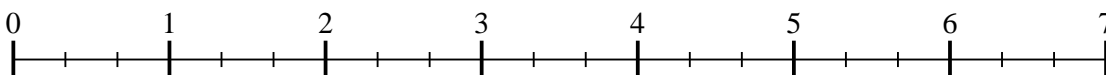
3)  $2 \div \frac{1}{6}$



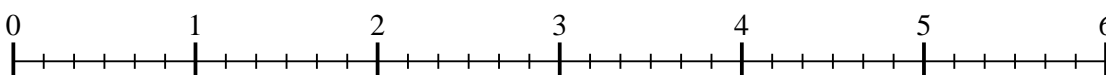
4)  $2 \div \frac{1}{3}$



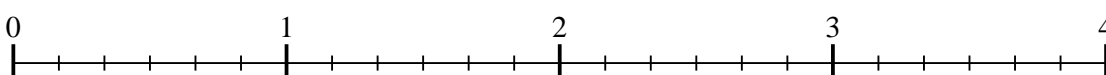
5)  $6 \div \frac{1}{3}$



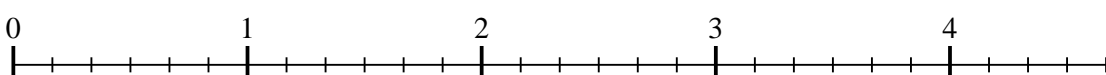
6)  $5 \div \frac{1}{6}$




7)  $3 \div \frac{1}{6}$



8)  $4 \div \frac{1}{6}$



9)  $3 \div \frac{1}{3}$



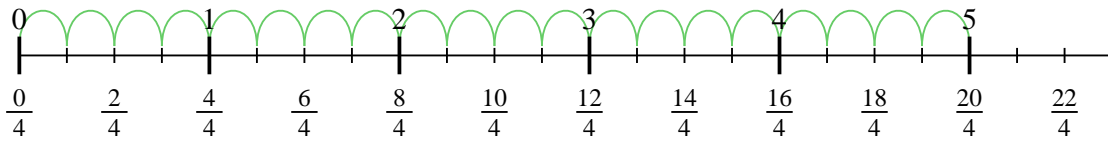
**Answers**

1. \_\_\_\_\_
2. \_\_\_\_\_
3. \_\_\_\_\_
4. \_\_\_\_\_
5. \_\_\_\_\_
6. \_\_\_\_\_
7. \_\_\_\_\_
8. \_\_\_\_\_
9. \_\_\_\_\_

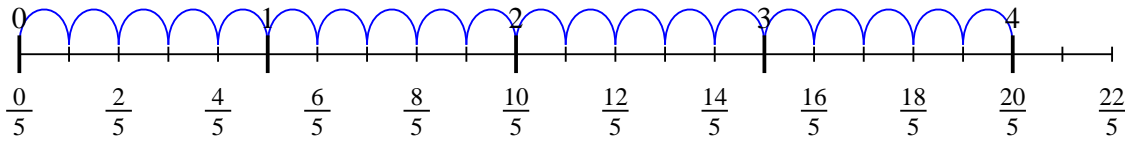


Use the numberline to solve each problem. The first is marked for you.

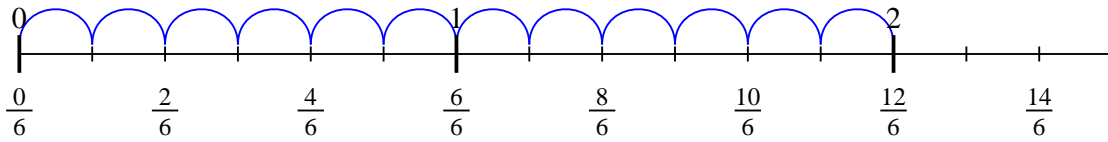
1)  $5 \div \frac{1}{4}$



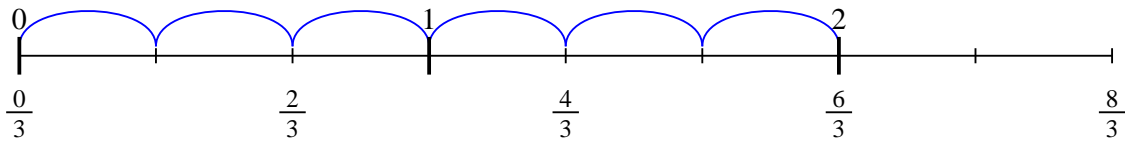
2)  $4 \div \frac{1}{5}$



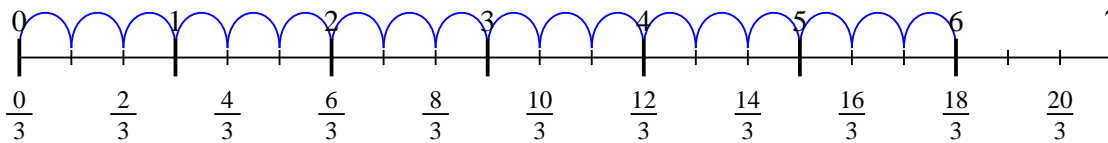
3)  $2 \div \frac{1}{6}$



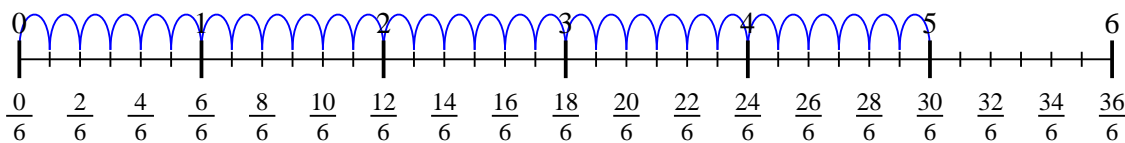
4)  $2 \div \frac{1}{3}$



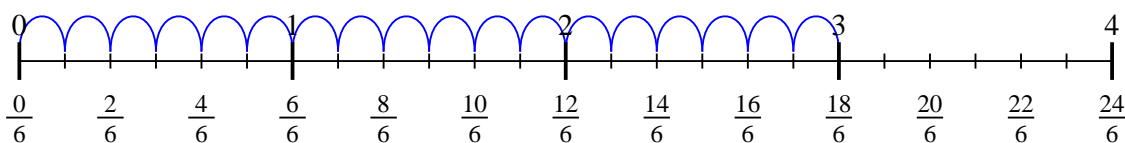
5)  $6 \div \frac{1}{3}$



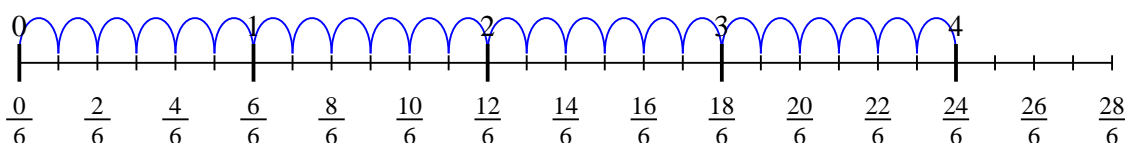
6)  $5 \div \frac{1}{6}$



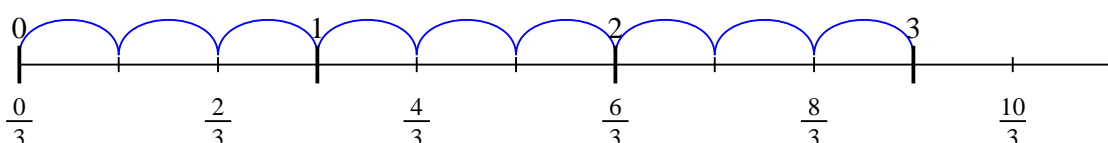
7)  $3 \div \frac{1}{6}$



8)  $4 \div \frac{1}{6}$



9)  $3 \div \frac{1}{3}$



**Answers**

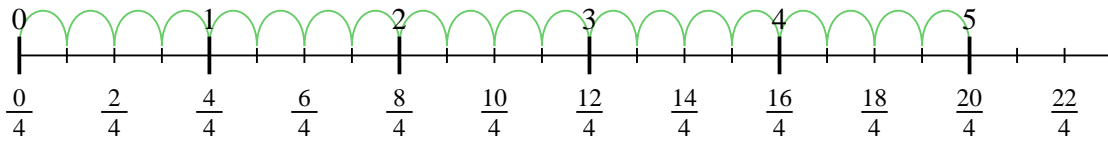
1. 20
2. 20
3. 12
4. 6
5. 18
6. 30
7. 18
8. 24
9. 9



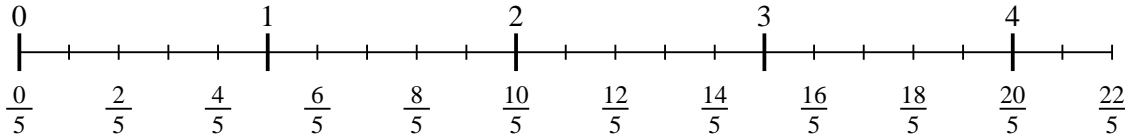
Use the numberline to solve each problem. The first is marked for you.

**Answers**

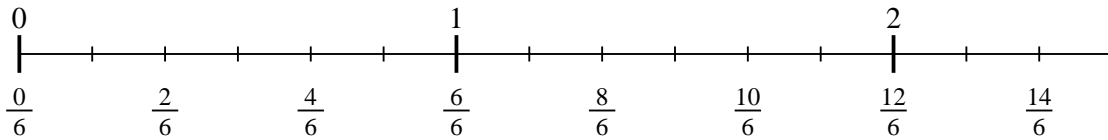
1)  $5 \div \frac{1}{4}$



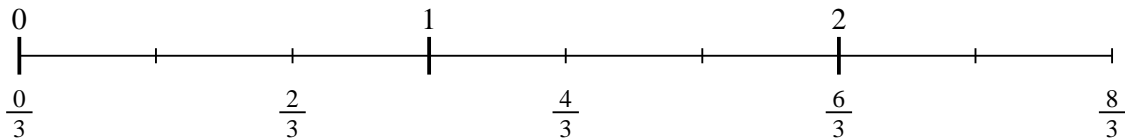
2)  $4 \div \frac{1}{5}$



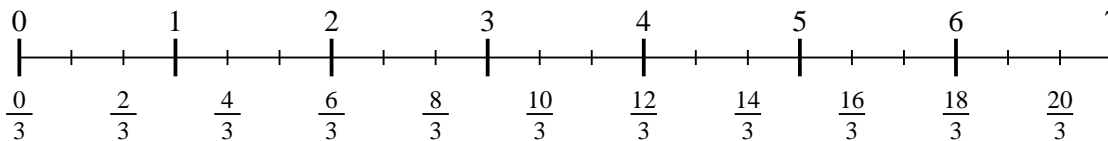
3)  $2 \div \frac{1}{6}$



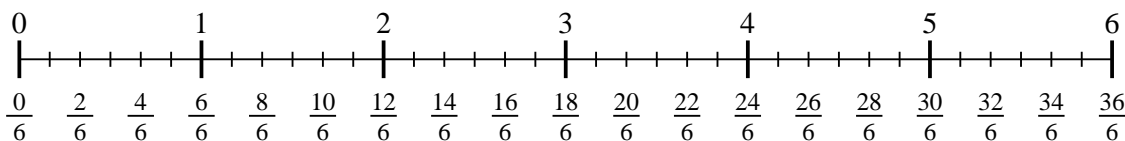
4)  $2 \div \frac{1}{3}$



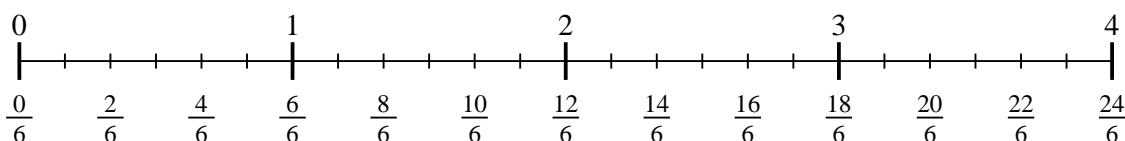
5)  $6 \div \frac{1}{3}$



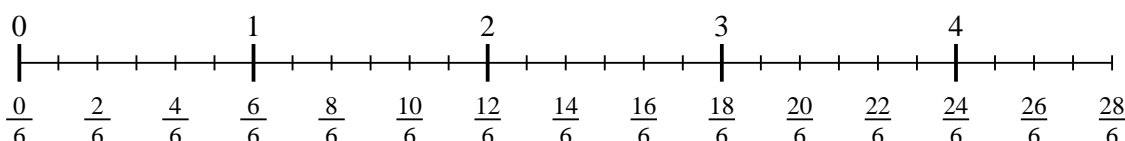
6)  $5 \div \frac{1}{6}$



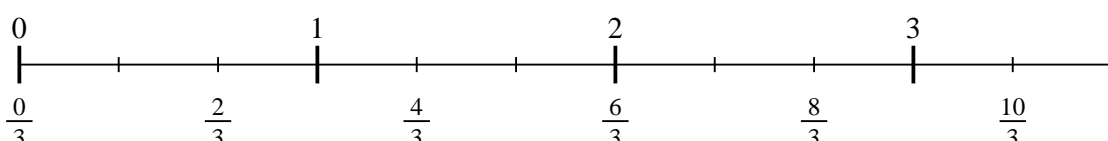
7)  $3 \div \frac{1}{6}$



8)  $4 \div \frac{1}{6}$



9)  $3 \div \frac{1}{3}$



1. \_\_\_\_\_
2. \_\_\_\_\_
3. \_\_\_\_\_
4. \_\_\_\_\_
5. \_\_\_\_\_
6. \_\_\_\_\_
7. \_\_\_\_\_
8. \_\_\_\_\_
9. \_\_\_\_\_