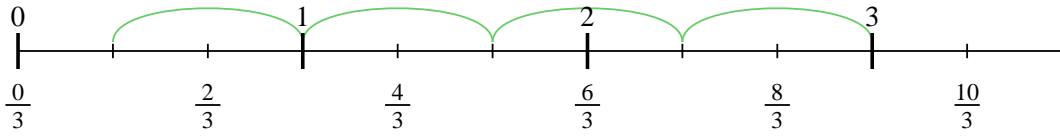




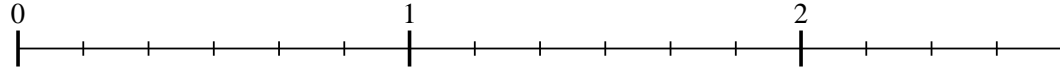
Use the numberline to solve each problem. The first is marked for you.

Answers

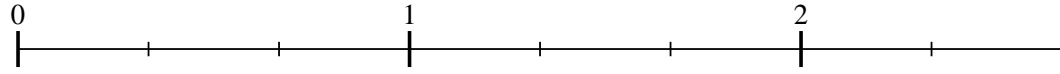
1) $3 \div \frac{2}{3}$



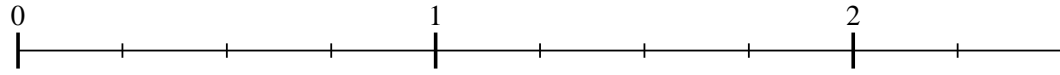
2) $2 \div \frac{2}{6}$



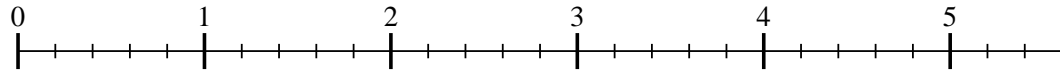
3) $2 \div \frac{2}{3}$



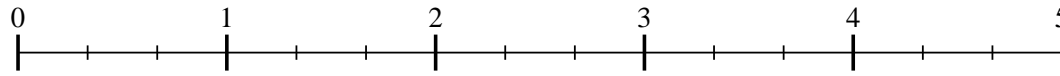
4) $2 \div \frac{3}{4}$



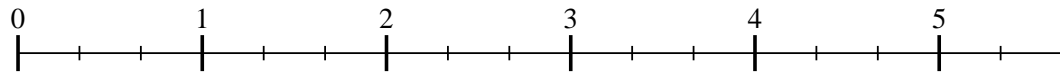
5) $5 \div \frac{4}{5}$



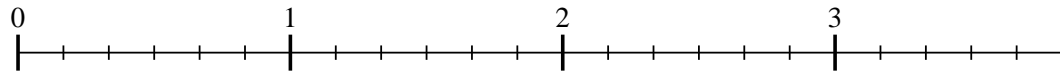
6) $4 \div \frac{2}{3}$



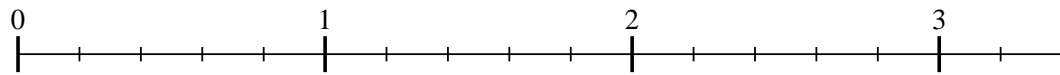
7) $5 \div \frac{2}{3}$



8) $3 \div \frac{3}{6}$



9) $3 \div \frac{3}{5}$

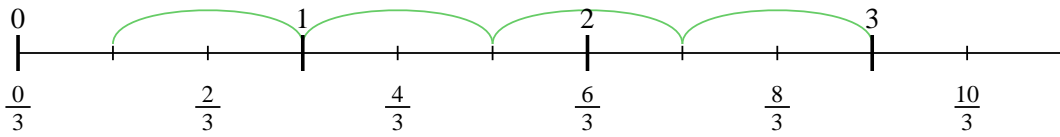


1. _____
2. _____
3. _____
4. _____
5. _____
6. _____
7. _____
8. _____
9. _____

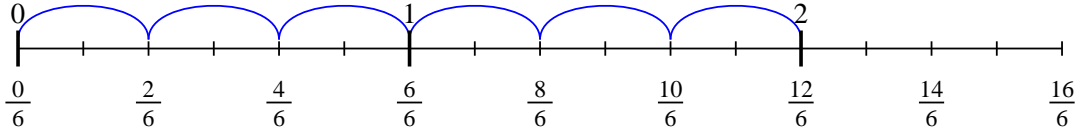


Use the numberline to solve each problem. The first is marked for you.

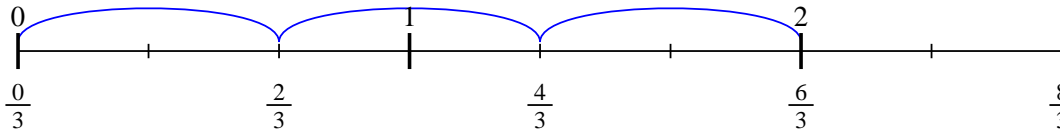
1) $3 \div \frac{2}{3}$



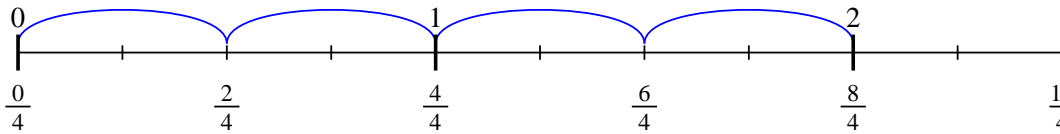
2) $2 \div \frac{2}{6}$



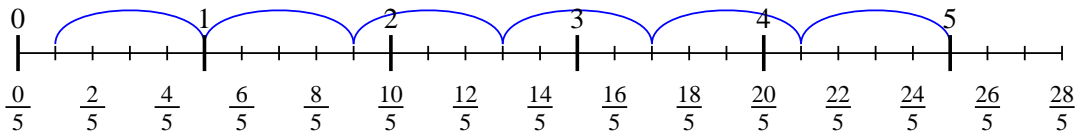
3) $2 \div \frac{2}{3}$



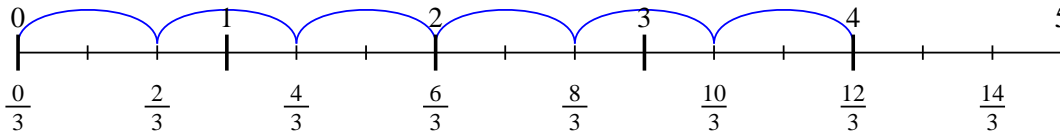
4) $2 \div \frac{2}{4}$



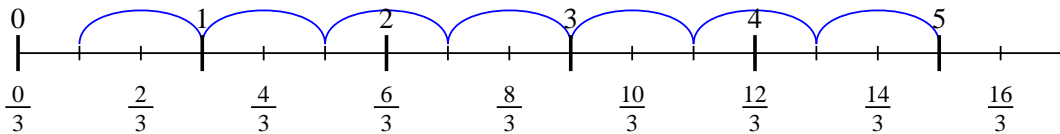
5) $5 \div \frac{4}{5}$



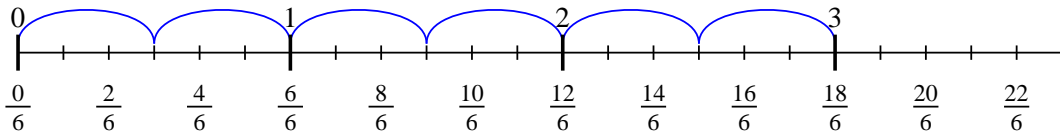
6) $4 \div \frac{2}{3}$



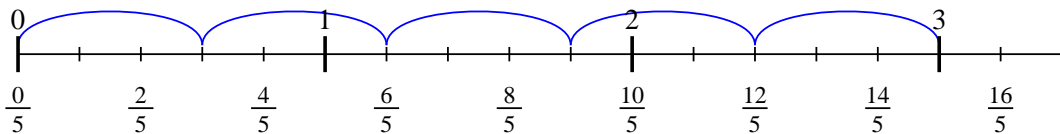
7) $5 \div \frac{2}{3}$



8) $3 \div \frac{3}{6}$



9) $3 \div \frac{3}{5}$



Answers

1. 4 $\frac{1}{2}$
2. 6
3. 3
4. 4
5. 6 $\frac{1}{4}$
6. 6
7. 7 $\frac{1}{2}$
8. 6
9. 5