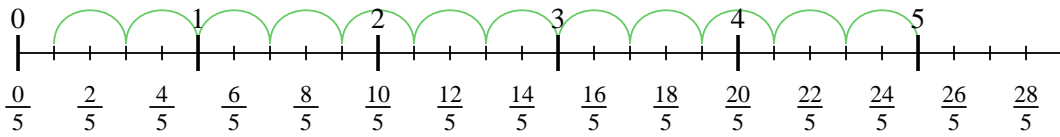




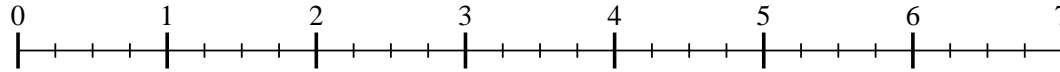
Use the numberline to solve each problem. The first is marked for you.

Answers

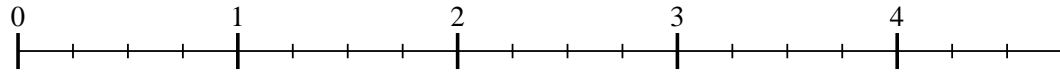
1) $5 \div \frac{2}{5}$



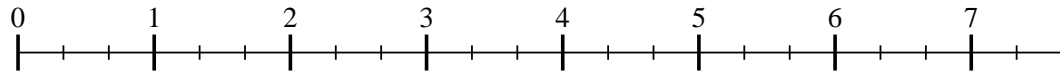
2) $6 \div \frac{3}{4}$



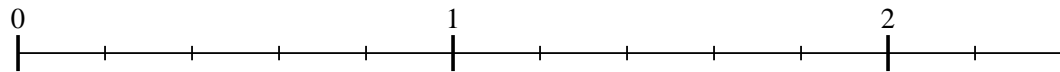
3) $4 \div \frac{3}{4}$



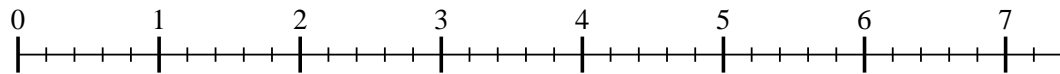
4) $7 \div \frac{2}{3}$



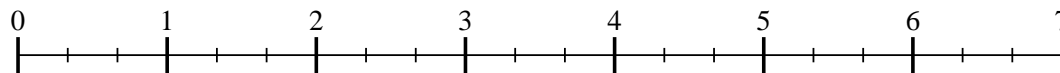
5) $2 \div \frac{4}{5}$



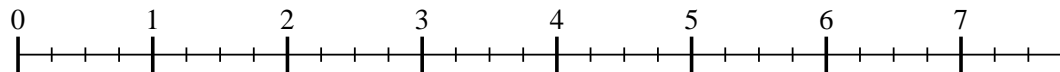
6) $7 \div \frac{3}{5}$



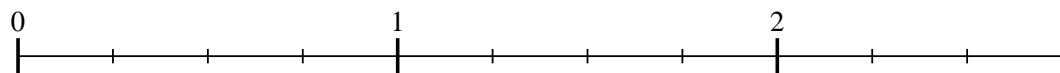
7) $6 \div \frac{2}{3}$



8) $7 \div \frac{3}{4}$



9) $2 \div \frac{2}{4}$

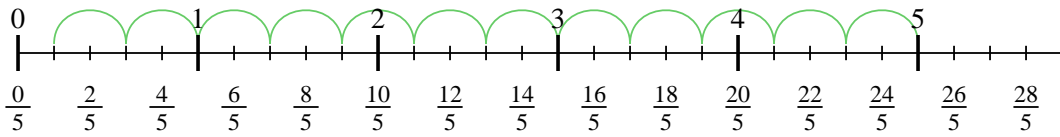


- 1. _____
- 2. _____
- 3. _____
- 4. _____
- 5. _____
- 6. _____
- 7. _____
- 8. _____
- 9. _____

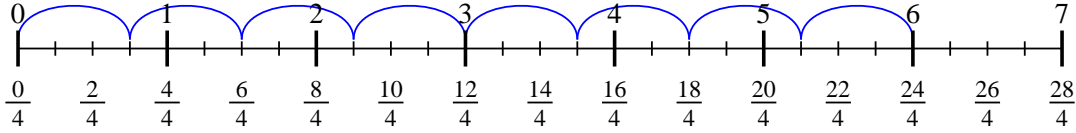


Use the numberline to solve each problem. The first is marked for you.

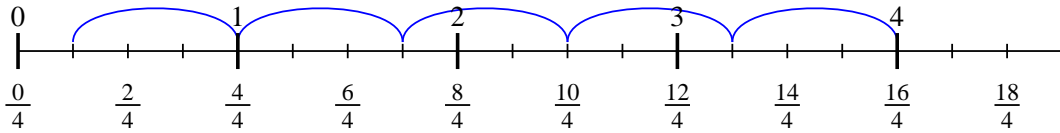
1) $5 \div \frac{2}{5}$



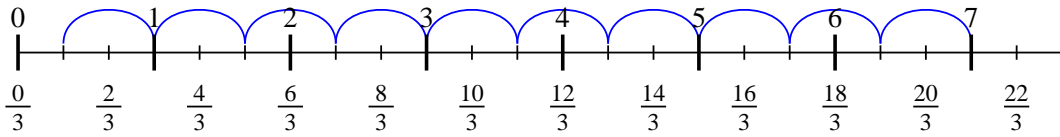
2) $6 \div \frac{3}{4}$



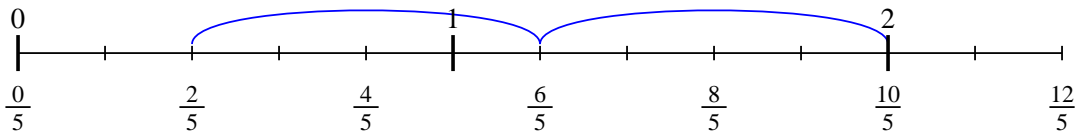
3) $4 \div \frac{3}{4}$



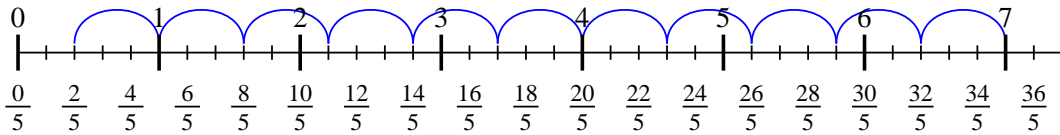
4) $7 \div \frac{2}{3}$



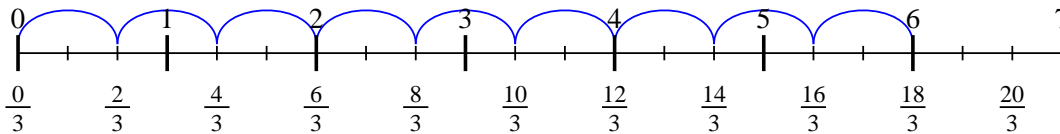
5) $2 \div \frac{4}{5}$



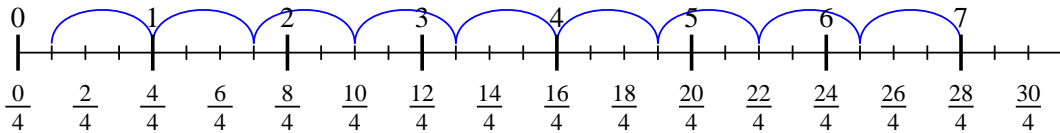
6) $7 \div \frac{3}{5}$



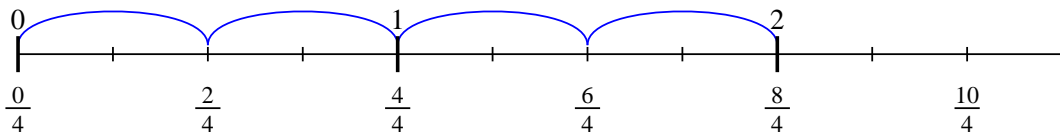
7) $6 \div \frac{2}{3}$



8) $7 \div \frac{3}{4}$



9) $2 \div \frac{2}{4}$



Answers

1. $12 \frac{1}{2}$
2. 8
3. $5 \frac{1}{3}$
4. $10 \frac{1}{2}$
5. $2 \frac{2}{4}$
6. $11 \frac{2}{3}$
7. 9
8. $9 \frac{1}{3}$
9. 4