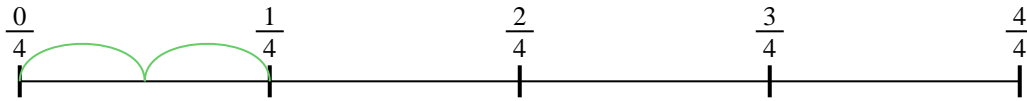




Use the numberline to solve each problem. The first is marked for you.


**Answers**

1)  $\frac{1}{4} \div 2$



1. \_\_\_\_\_

2)  $\frac{1}{3} \div 3$



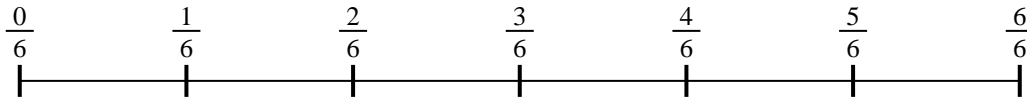
2. \_\_\_\_\_

3)  $\frac{1}{7} \div 5$



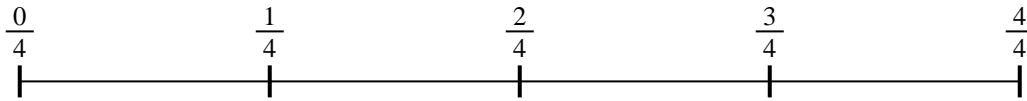
3. \_\_\_\_\_

4)  $\frac{1}{6} \div 3$



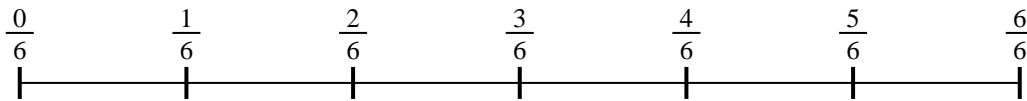
4. \_\_\_\_\_

5)  $\frac{1}{4} \div 5$



5. \_\_\_\_\_

6)  $\frac{1}{6} \div 5$




6. \_\_\_\_\_

7)  $\frac{1}{7} \div 3$



7. \_\_\_\_\_

8)  $\frac{1}{3} \div 6$



8. \_\_\_\_\_

9)  $\frac{1}{7} \div 6$

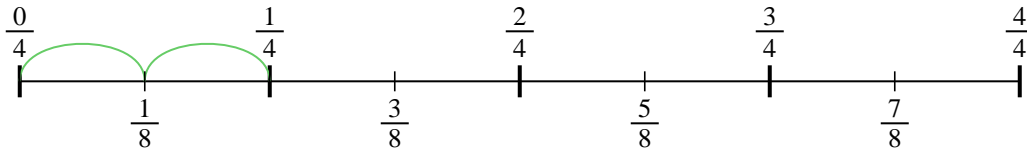


9. \_\_\_\_\_

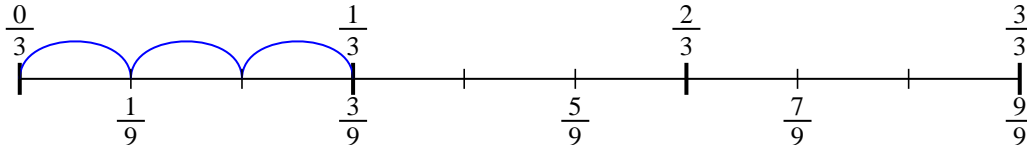


Use the numberline to solve each problem. The first is marked for you.

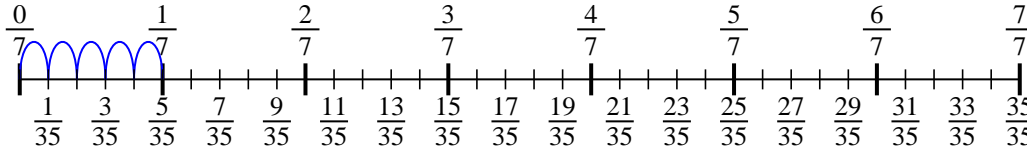
1)  $\frac{1}{4} \div 2$



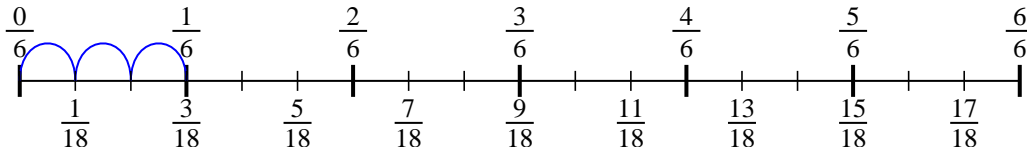
2)  $\frac{1}{3} \div 3$



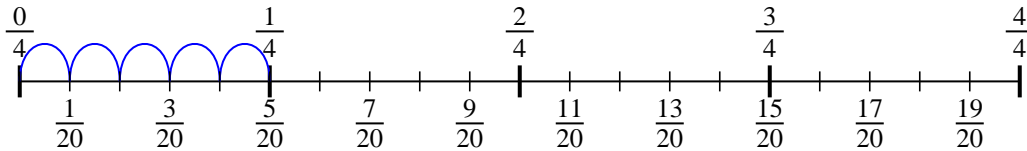
3)  $\frac{1}{7} \div 5$



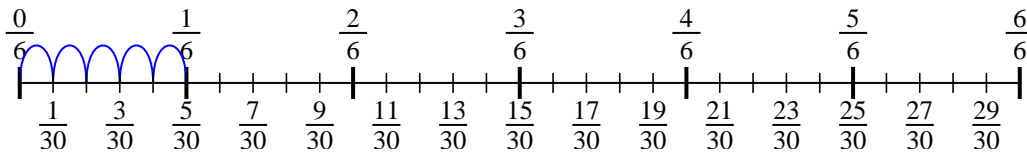
4)  $\frac{1}{6} \div 3$



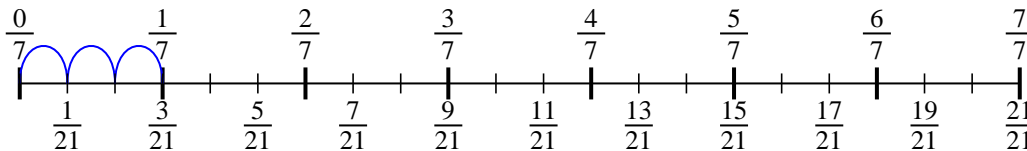
5)  $\frac{1}{4} \div 5$



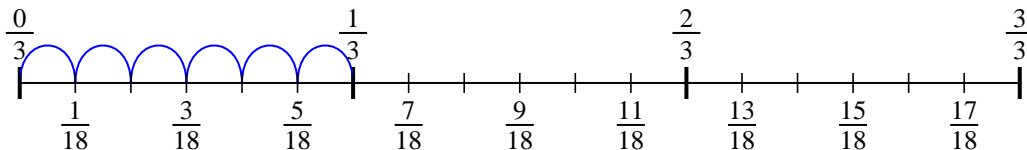
6)  $\frac{1}{6} \div 5$



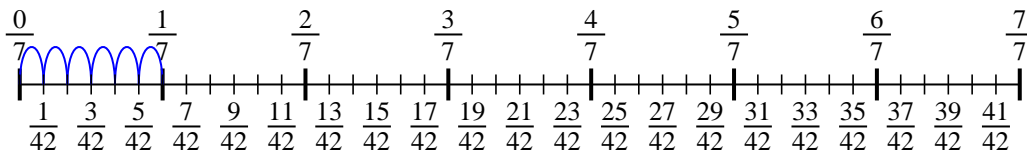
7)  $\frac{1}{7} \div 3$



8)  $\frac{1}{3} \div 6$



9)  $\frac{1}{7} \div 6$



**Answers**

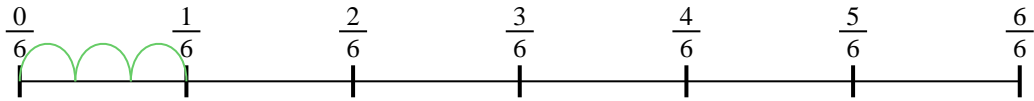
1.  $\frac{1}{8}$
2.  $\frac{1}{9}$
3.  $\frac{1}{35}$
4.  $\frac{1}{18}$
5.  $\frac{1}{20}$
6.  $\frac{1}{30}$
7.  $\frac{1}{21}$
8.  $\frac{1}{18}$
9.  $\frac{1}{42}$



Use the numberline to solve each problem. The first is marked for you.

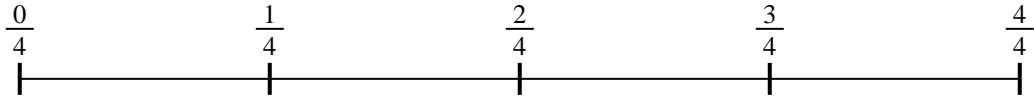
**Answers**

1)  $\frac{1}{6} \div 3$



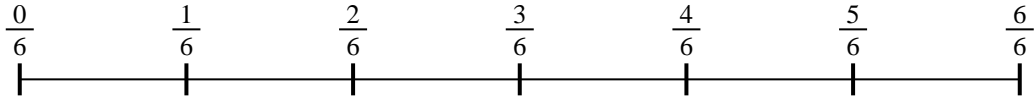
1. \_\_\_\_\_

2)  $\frac{1}{4} \div 2$




2. \_\_\_\_\_

3)  $\frac{1}{6} \div 4$



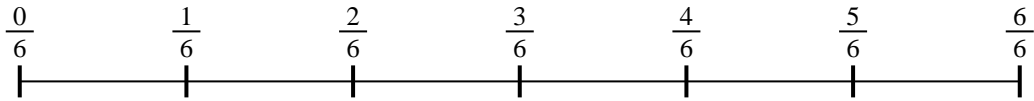
3. \_\_\_\_\_

4)  $\frac{1}{5} \div 6$



4. \_\_\_\_\_

5)  $\frac{1}{6} \div 6$



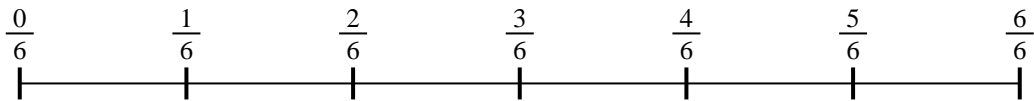
5. \_\_\_\_\_

6)  $\frac{1}{5} \div 6$



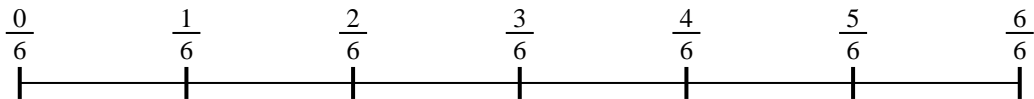
6. \_\_\_\_\_

7)  $\frac{1}{6} \div 3$



7. \_\_\_\_\_

8)  $\frac{1}{6} \div 2$



8. \_\_\_\_\_

9)  $\frac{1}{5} \div 3$

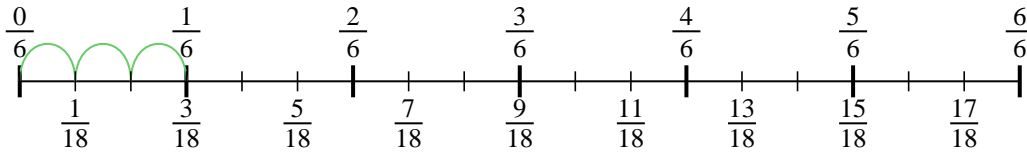


9. \_\_\_\_\_

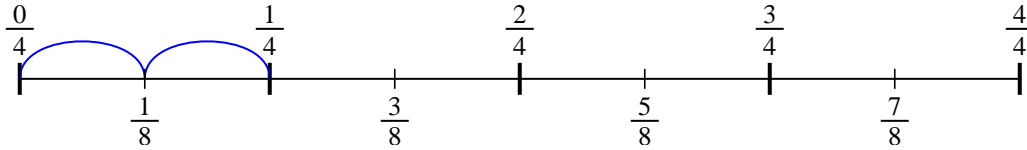


Use the numberline to solve each problem. The first is marked for you.

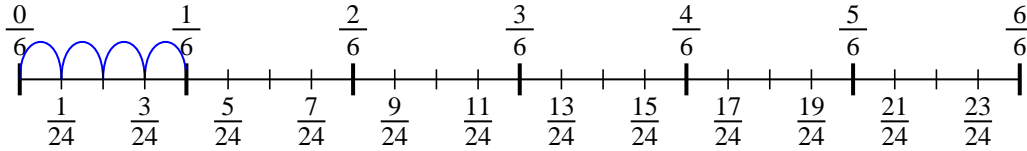
1)  $\frac{1}{6} \div 3$



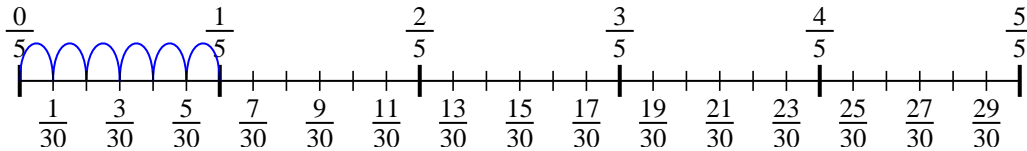
2)  $\frac{1}{4} \div 2$



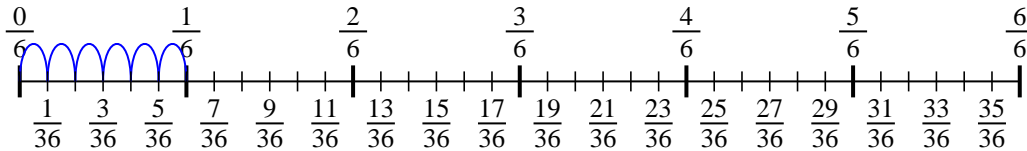
3)  $\frac{1}{6} \div 4$



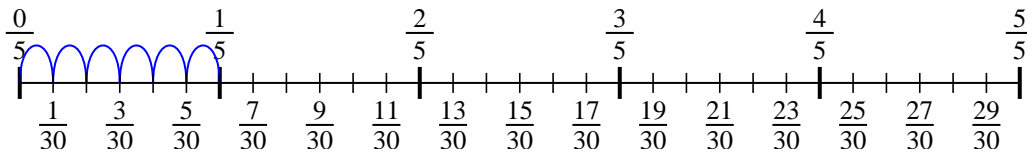
4)  $\frac{1}{5} \div 6$



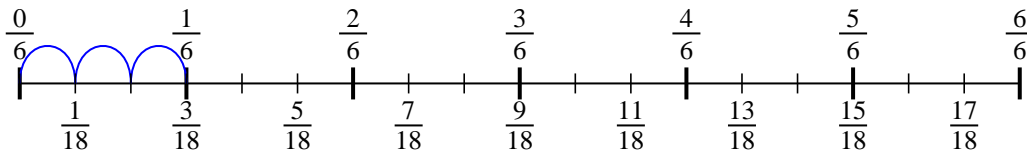
5)  $\frac{1}{6} \div 6$



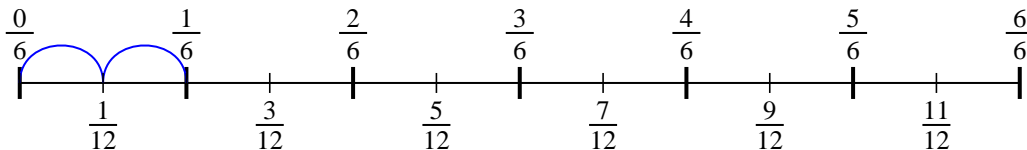
6)  $\frac{1}{5} \div 6$



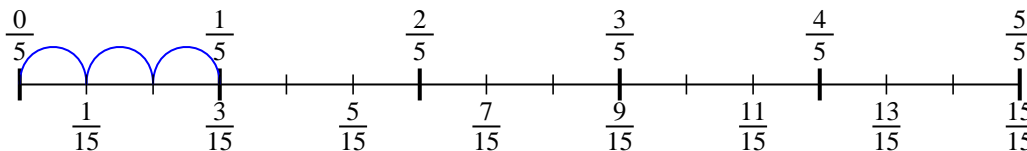
7)  $\frac{1}{6} \div 3$



8)  $\frac{1}{6} \div 2$



9)  $\frac{1}{5} \div 3$




**Answers**

1.  $\frac{1}{18}$
2.  $\frac{1}{8}$
3.  $\frac{1}{24}$
4.  $\frac{1}{30}$
5.  $\frac{1}{36}$
6.  $\frac{1}{30}$
7.  $\frac{1}{18}$
8.  $\frac{1}{12}$
9.  $\frac{1}{15}$

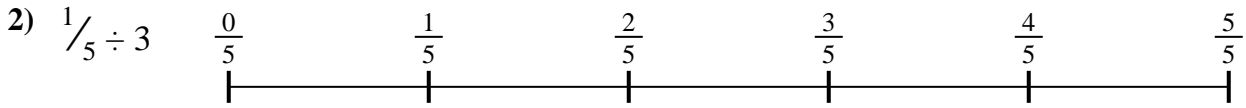


Use the numberline to solve each problem. The first is marked for you.

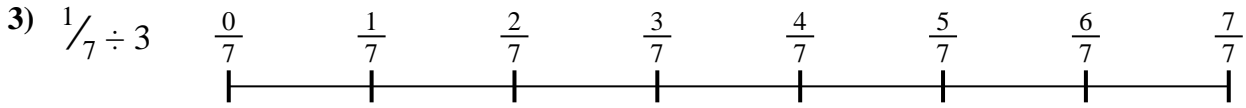
**Answers**



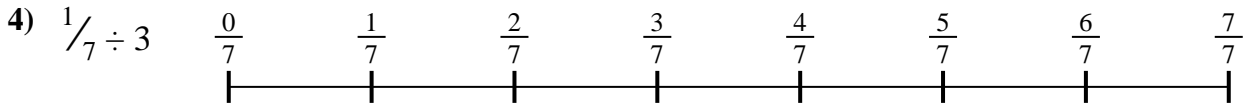
1. \_\_\_\_\_




2. \_\_\_\_\_




3. \_\_\_\_\_




4. \_\_\_\_\_



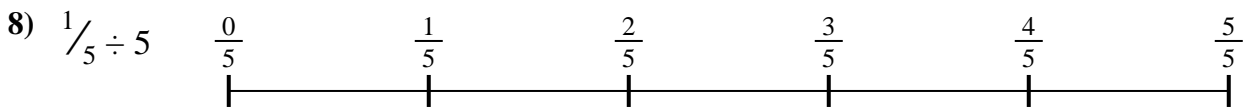
5. \_\_\_\_\_




6. \_\_\_\_\_



7. \_\_\_\_\_



8. \_\_\_\_\_

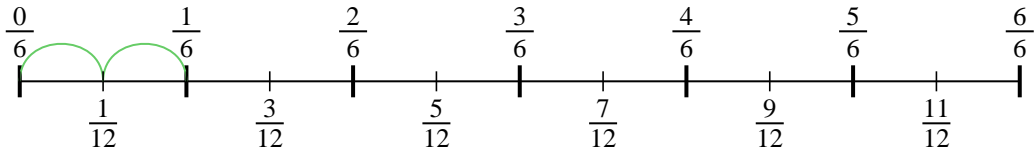


9. \_\_\_\_\_

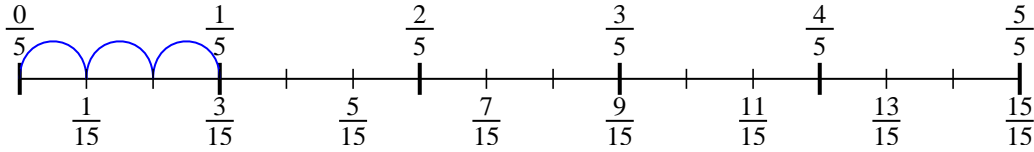


Use the numberline to solve each problem. The first is marked for you.

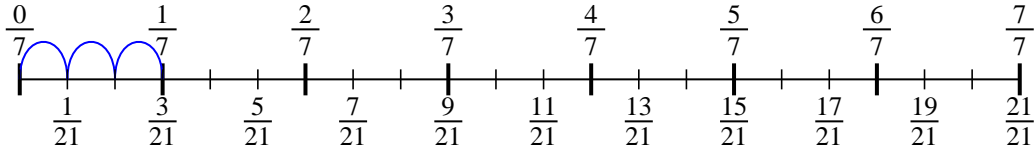
1)  $\frac{1}{6} \div 2$



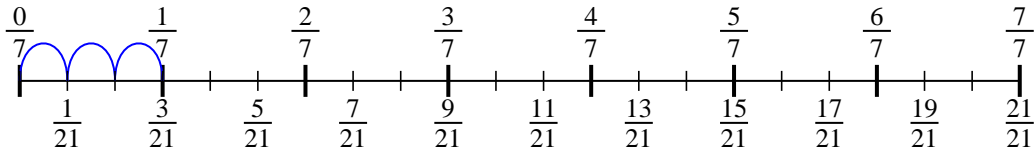
2)  $\frac{1}{5} \div 3$



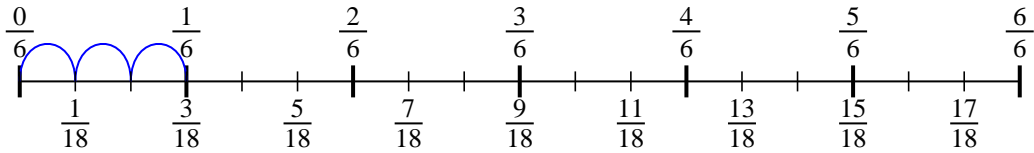
3)  $\frac{1}{7} \div 3$



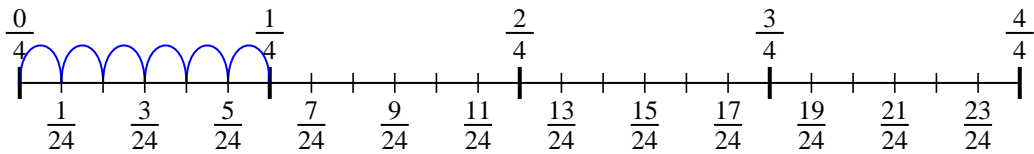
4)  $\frac{1}{7} \div 3$



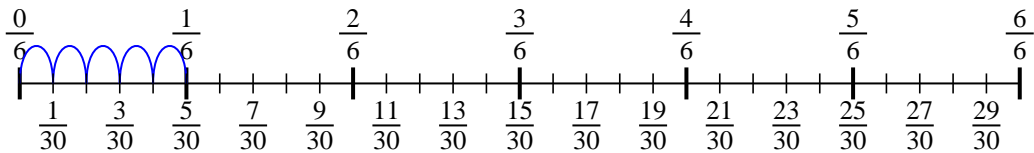
5)  $\frac{1}{6} \div 3$



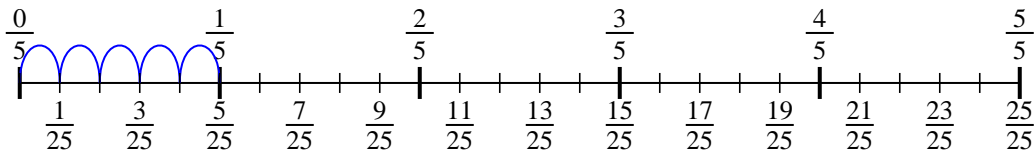
6)  $\frac{1}{4} \div 6$



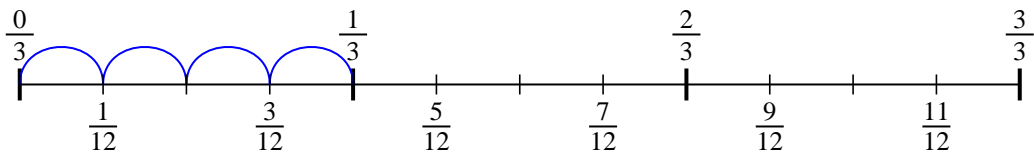
7)  $\frac{1}{6} \div 5$



8)  $\frac{1}{5} \div 5$



9)  $\frac{1}{3} \div 4$



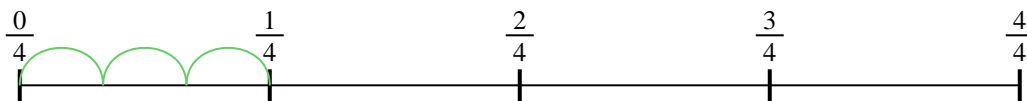
**Answers**

1.  $\frac{1}{12}$
2.  $\frac{1}{15}$
3.  $\frac{1}{21}$
4.  $\frac{1}{21}$
5.  $\frac{1}{18}$
6.  $\frac{1}{24}$
7.  $\frac{1}{30}$
8.  $\frac{1}{25}$
9.  $\frac{1}{12}$




Use the numberline to solve each problem. The first is marked for you.

1)  $\frac{1}{4} \div 3$



2)  $\frac{1}{7} \div 2$




3)  $\frac{1}{3} \div 6$



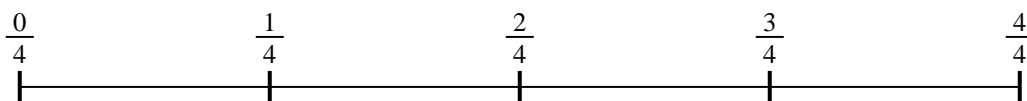
4)  $\frac{1}{7} \div 6$



5)  $\frac{1}{5} \div 6$




6)  $\frac{1}{4} \div 2$




7)  $\frac{1}{7} \div 3$



8)  $\frac{1}{3} \div 3$



9)  $\frac{1}{3} \div 5$



**Answers**

1. \_\_\_\_\_

2. \_\_\_\_\_

3. \_\_\_\_\_

4. \_\_\_\_\_

5. \_\_\_\_\_

6. \_\_\_\_\_

7. \_\_\_\_\_

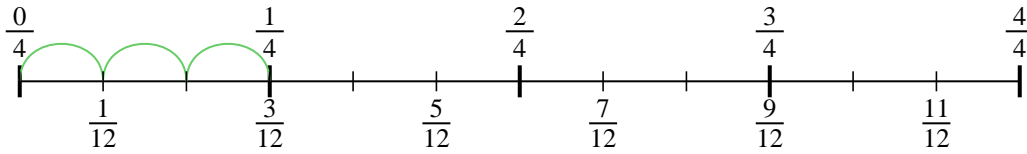
8. \_\_\_\_\_

9. \_\_\_\_\_

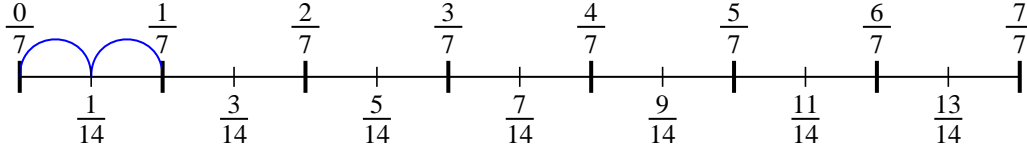


Use the numberline to solve each problem. The first is marked for you.

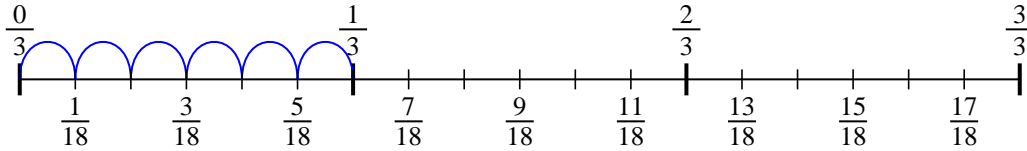
1)  $\frac{1}{4} \div 3$



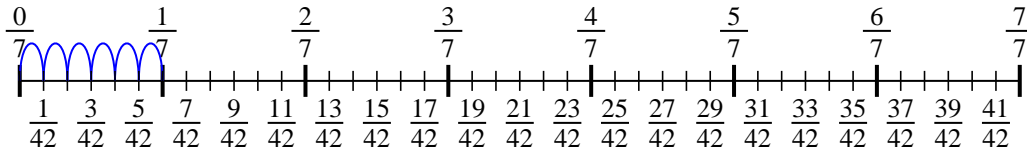
2)  $\frac{1}{7} \div 2$



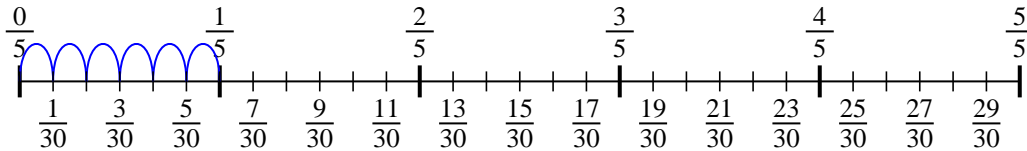
3)  $\frac{1}{3} \div 6$



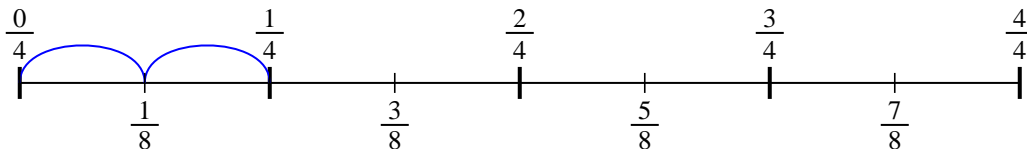
4)  $\frac{1}{7} \div 6$



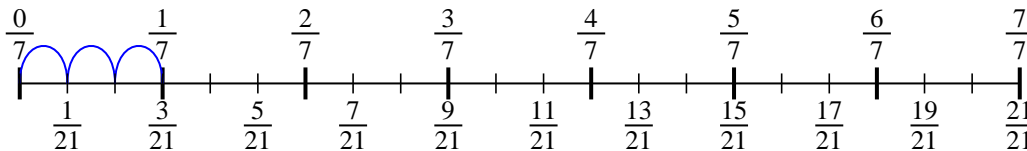
5)  $\frac{1}{5} \div 6$



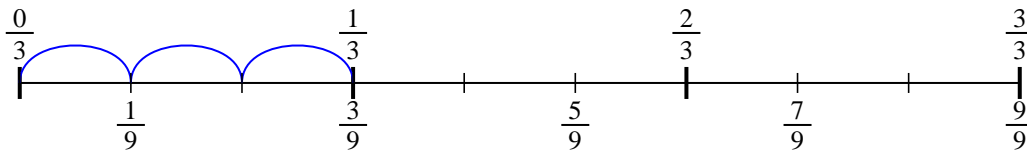
6)  $\frac{1}{4} \div 2$



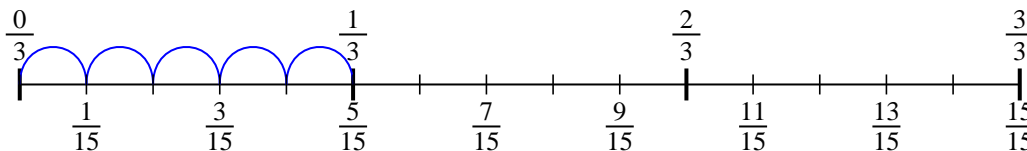
7)  $\frac{1}{7} \div 3$



8)  $\frac{1}{3} \div 3$



9)  $\frac{1}{3} \div 5$



**Answers**

1.  $\frac{1}{12}$
2.  $\frac{1}{14}$
3.  $\frac{1}{18}$
4.  $\frac{1}{42}$
5.  $\frac{1}{30}$
6.  $\frac{1}{8}$
7.  $\frac{1}{21}$
8.  $\frac{1}{9}$
9.  $\frac{1}{15}$

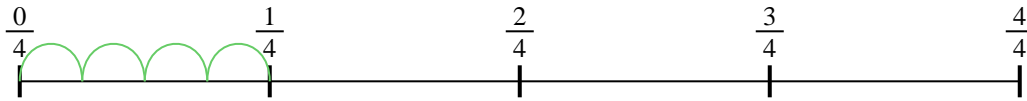




Use the numberline to solve each problem. The first is marked for you.

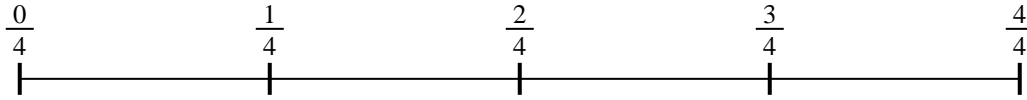
**Answers**

1)  $\frac{1}{4} \div 4$




1. \_\_\_\_\_

2)  $\frac{1}{4} \div 2$



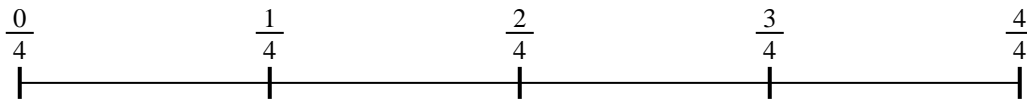
2. \_\_\_\_\_

3)  $\frac{1}{3} \div 2$



3. \_\_\_\_\_

4)  $\frac{1}{4} \div 2$




4. \_\_\_\_\_

5)  $\frac{1}{7} \div 5$



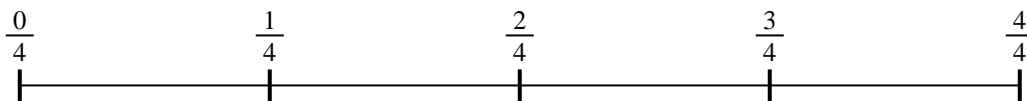
5. \_\_\_\_\_

6)  $\frac{1}{5} \div 3$




6. \_\_\_\_\_

7)  $\frac{1}{4} \div 6$



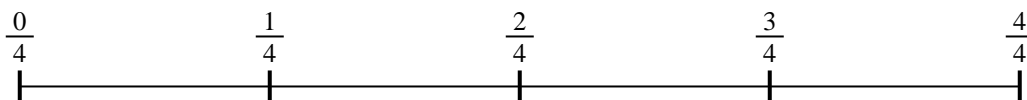
7. \_\_\_\_\_

8)  $\frac{1}{7} \div 2$



8. \_\_\_\_\_

9)  $\frac{1}{4} \div 3$

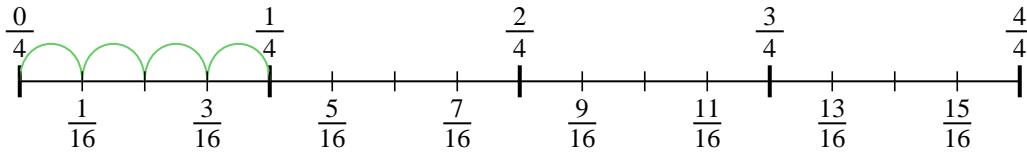


9. \_\_\_\_\_

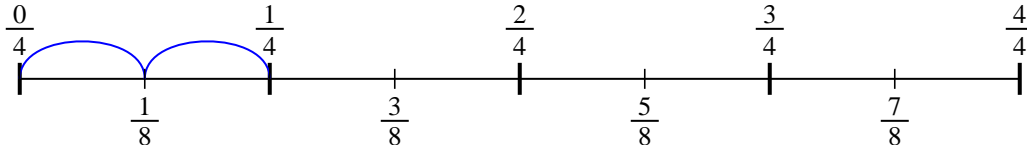


Use the numberline to solve each problem. The first is marked for you.

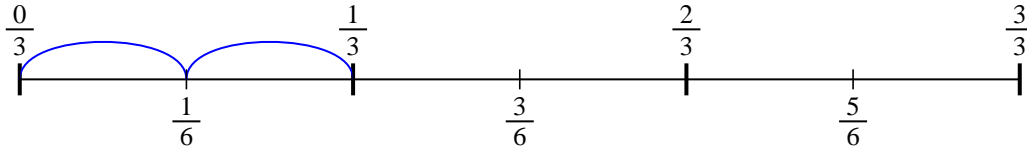
1)  $\frac{1}{4} \div 4$



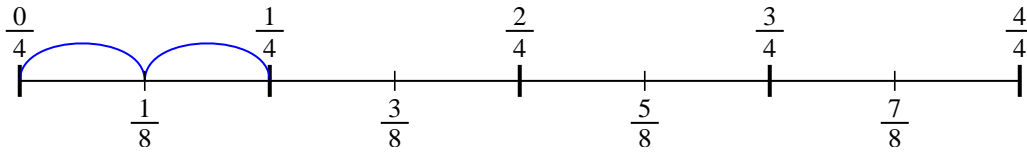
2)  $\frac{1}{4} \div 2$



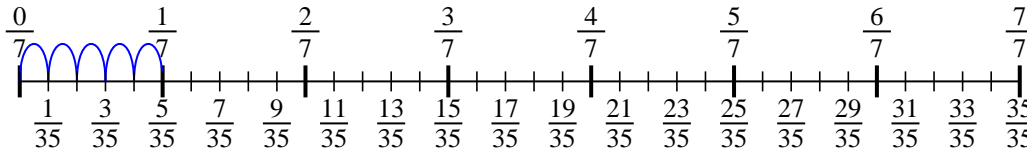
3)  $\frac{1}{3} \div 2$



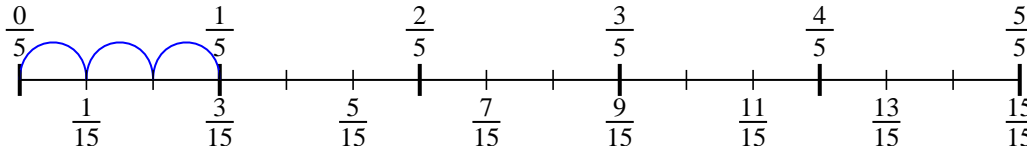
4)  $\frac{1}{4} \div 2$



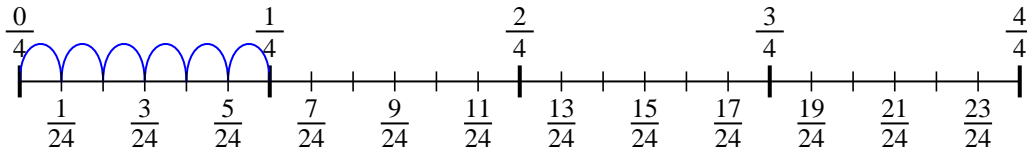
5)  $\frac{1}{7} \div 5$



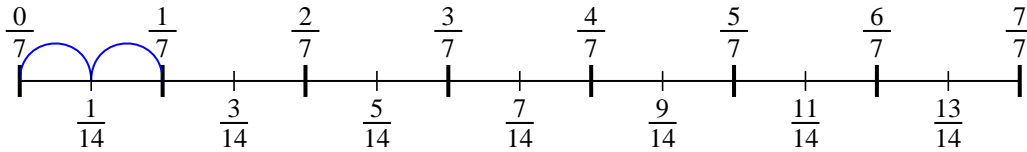
6)  $\frac{1}{5} \div 3$



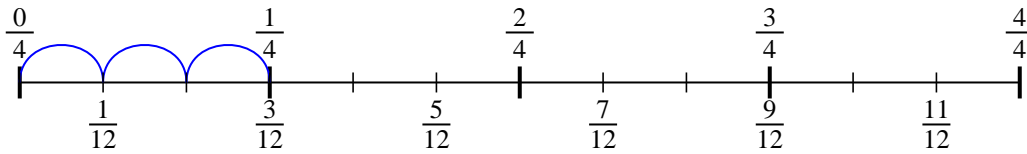
7)  $\frac{1}{4} \div 6$



8)  $\frac{1}{7} \div 2$



9)  $\frac{1}{4} \div 3$



**Answers**

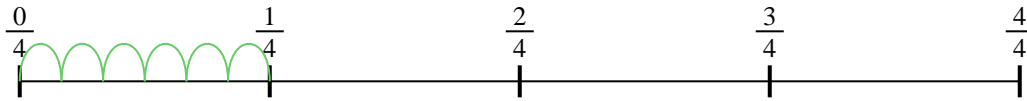
1.  $\frac{1}{16}$
2.  $\frac{1}{8}$
3.  $\frac{1}{6}$
4.  $\frac{1}{8}$
5.  $\frac{1}{35}$
6.  $\frac{1}{15}$
7.  $\frac{1}{24}$
8.  $\frac{1}{14}$
9.  $\frac{1}{12}$



Use the numberline to solve each problem. The first is marked for you.


**Answers**

1)  $\frac{1}{4} \div 6$




1. \_\_\_\_\_

2)  $\frac{1}{7} \div 5$



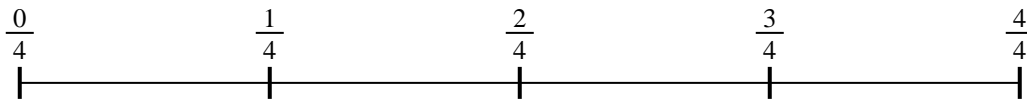
2. \_\_\_\_\_

3)  $\frac{1}{7} \div 6$



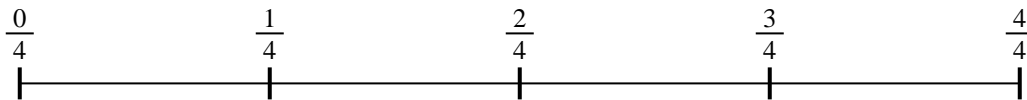
3. \_\_\_\_\_

4)  $\frac{1}{4} \div 2$




4. \_\_\_\_\_

5)  $\frac{1}{4} \div 2$



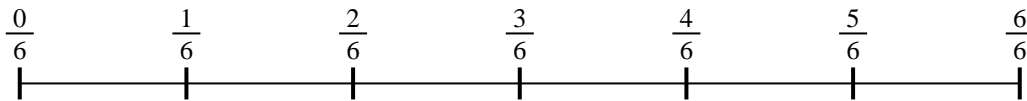
5. \_\_\_\_\_

6)  $\frac{1}{7} \div 2$




6. \_\_\_\_\_

7)  $\frac{1}{6} \div 6$



7. \_\_\_\_\_

8)  $\frac{1}{7} \div 3$



8. \_\_\_\_\_

9)  $\frac{1}{3} \div 5$

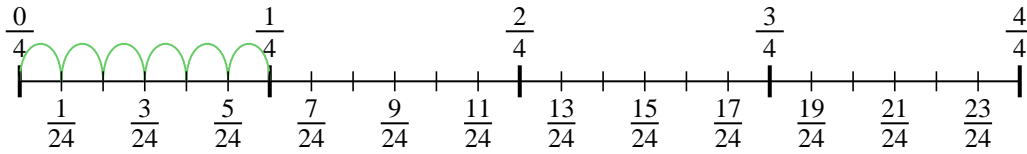


9. \_\_\_\_\_

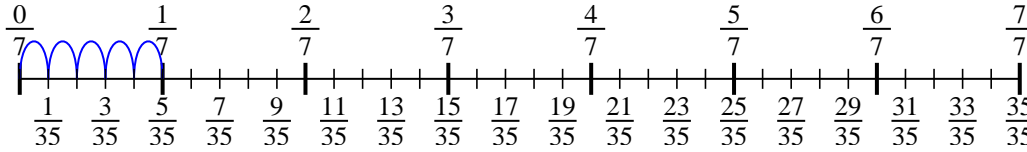


Use the numberline to solve each problem. The first is marked for you.

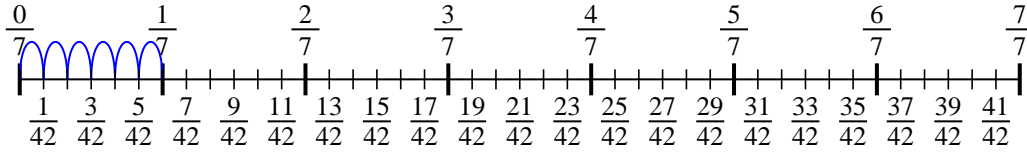
1)  $\frac{1}{4} \div 6$



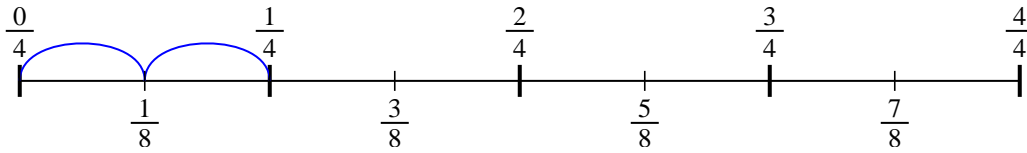
2)  $\frac{1}{7} \div 5$



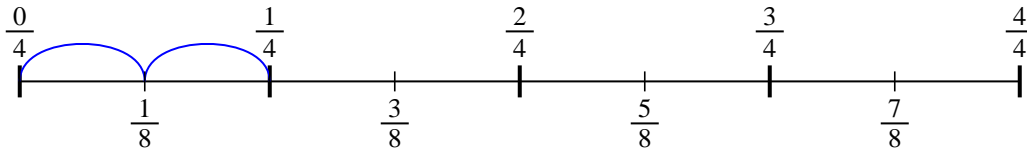
3)  $\frac{1}{7} \div 6$



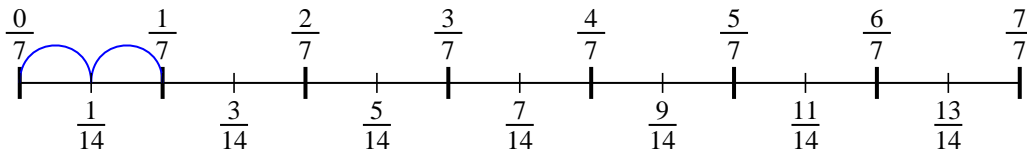
4)  $\frac{1}{4} \div 2$



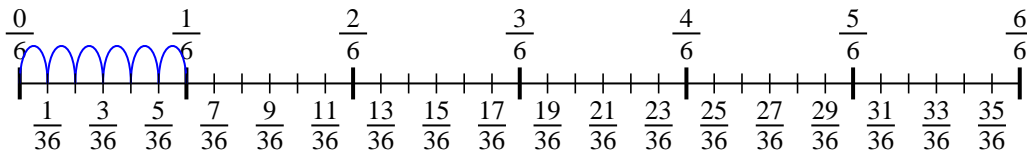
5)  $\frac{1}{4} \div 2$



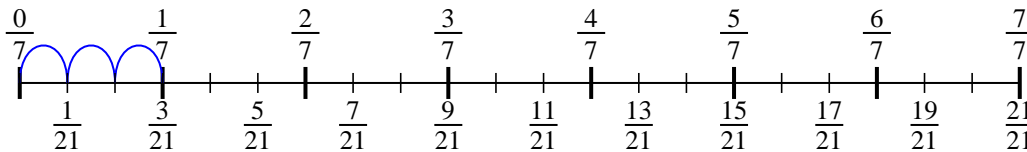
6)  $\frac{1}{7} \div 2$



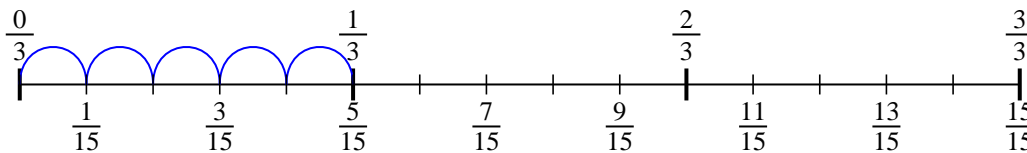
7)  $\frac{1}{6} \div 6$



8)  $\frac{1}{7} \div 3$



9)  $\frac{1}{3} \div 5$



**Answers**


1.  $\frac{1}{24}$
2.  $\frac{1}{35}$
3.  $\frac{1}{42}$
4.  $\frac{1}{8}$
5.  $\frac{1}{8}$
6.  $\frac{1}{14}$
7.  $\frac{1}{36}$
8.  $\frac{1}{21}$
9.  $\frac{1}{15}$



Use the numberline to solve each problem. The first is marked for you.

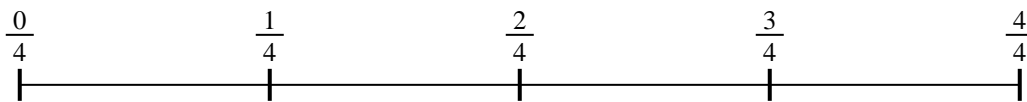
**Answers**

1)  $\frac{1}{7} \div 6$



1. \_\_\_\_\_

2)  $\frac{1}{4} \div 3$



2. \_\_\_\_\_

3)  $\frac{1}{5} \div 4$



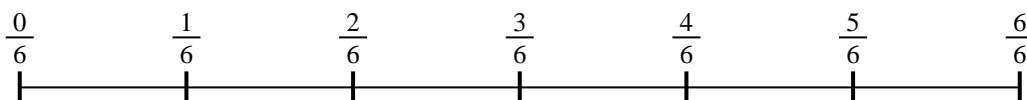
3. \_\_\_\_\_

4)  $\frac{1}{7} \div 2$




4. \_\_\_\_\_

5)  $\frac{1}{6} \div 5$




5. \_\_\_\_\_

6)  $\frac{1}{3} \div 5$



6. \_\_\_\_\_

7)  $\frac{1}{3} \div 5$



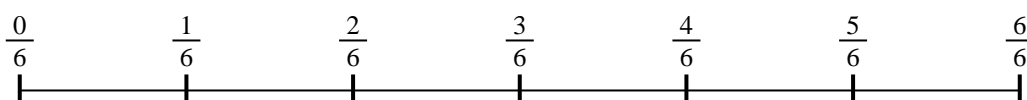
7. \_\_\_\_\_

8)  $\frac{1}{3} \div 5$



8. \_\_\_\_\_

9)  $\frac{1}{6} \div 3$

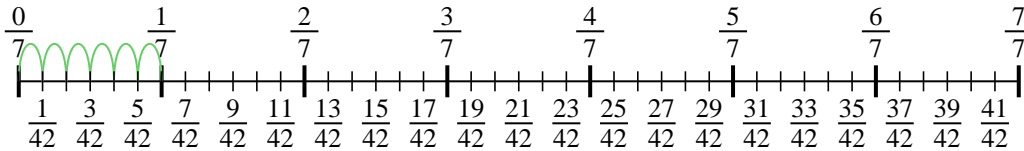


9. \_\_\_\_\_

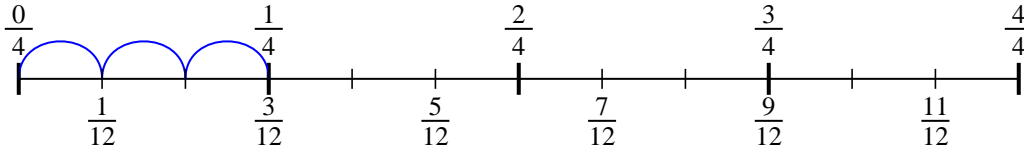


Use the numberline to solve each problem. The first is marked for you.

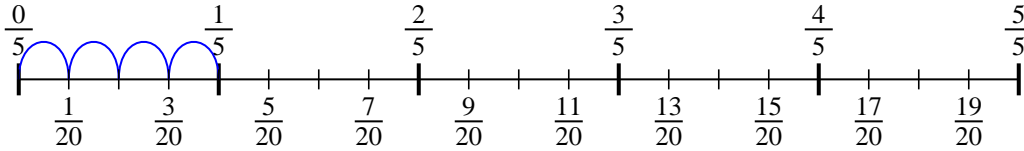
1)  $\frac{1}{7} \div 6$



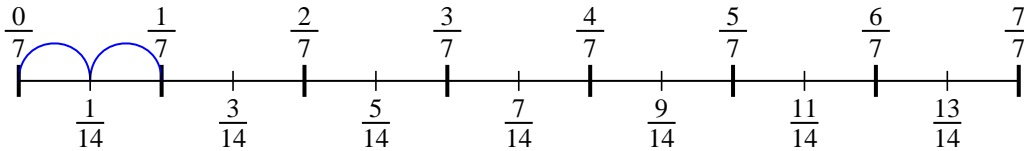
2)  $\frac{1}{4} \div 3$



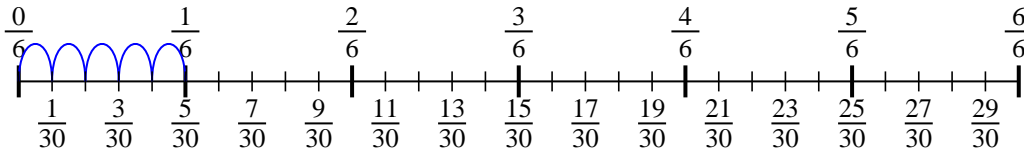
3)  $\frac{1}{5} \div 4$



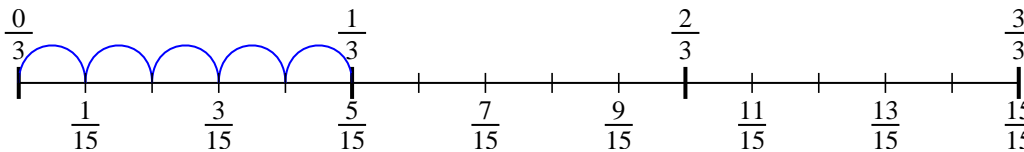
4)  $\frac{1}{7} \div 2$



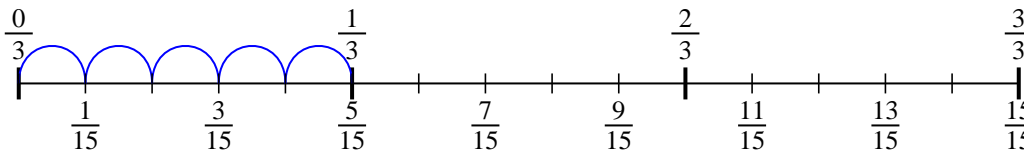
5)  $\frac{1}{6} \div 5$



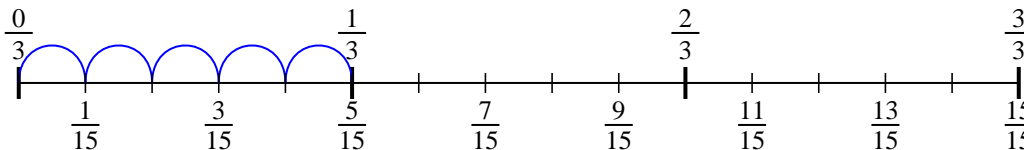
6)  $\frac{1}{3} \div 5$



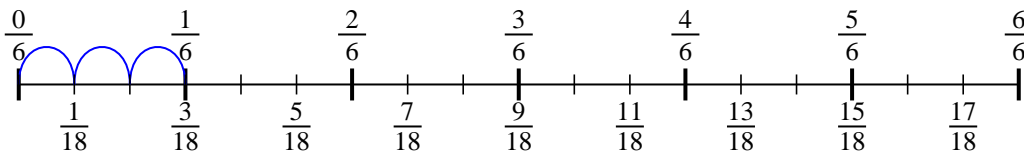
7)  $\frac{1}{3} \div 5$



8)  $\frac{1}{3} \div 5$



9)  $\frac{1}{6} \div 3$




**Answers**

1.  $\frac{1}{42}$
2.  $\frac{1}{12}$
3.  $\frac{1}{20}$
4.  $\frac{1}{14}$
5.  $\frac{1}{30}$
6.  $\frac{1}{15}$
7.  $\frac{1}{15}$
8.  $\frac{1}{15}$
9.  $\frac{1}{18}$




Use the numberline to solve each problem. The first is marked for you.

1)  $\frac{1}{5} \div 2$



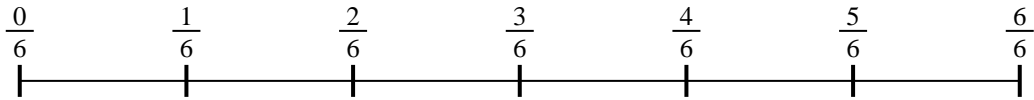
2)  $\frac{1}{3} \div 5$




3)  $\frac{1}{5} \div 6$



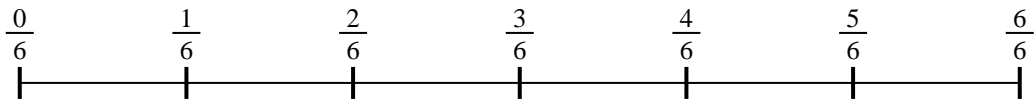
4)  $\frac{1}{6} \div 3$



5)  $\frac{1}{3} \div 4$



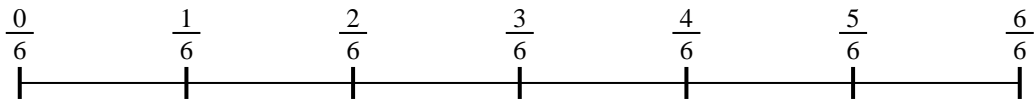
6)  $\frac{1}{6} \div 5$



7)  $\frac{1}{5} \div 2$



8)  $\frac{1}{6} \div 6$



9)  $\frac{1}{3} \div 3$



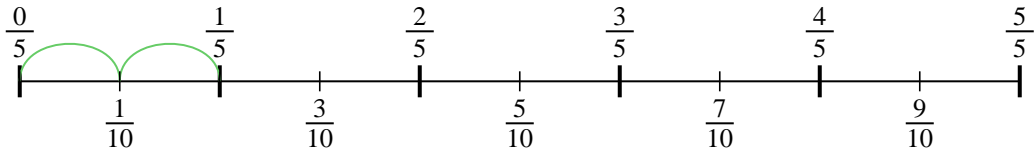
**Answers**

1. \_\_\_\_\_
2. \_\_\_\_\_
3. \_\_\_\_\_
4. \_\_\_\_\_
5. \_\_\_\_\_
6. \_\_\_\_\_
7. \_\_\_\_\_
8. \_\_\_\_\_
9. \_\_\_\_\_

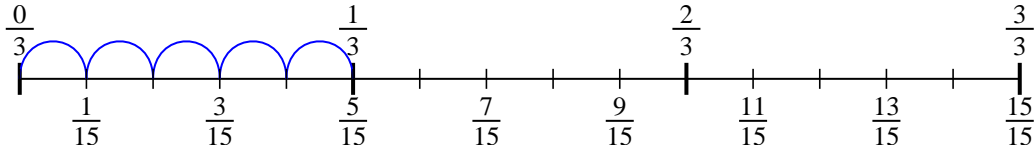


Use the numberline to solve each problem. The first is marked for you.

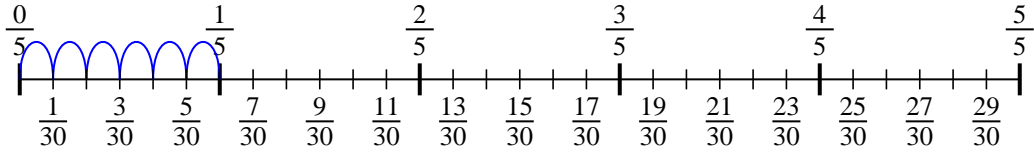
1)  $\frac{1}{5} \div 2$



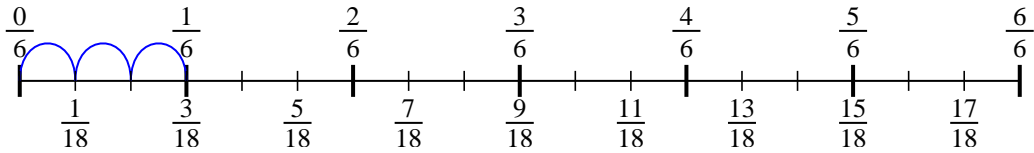
2)  $\frac{1}{3} \div 5$



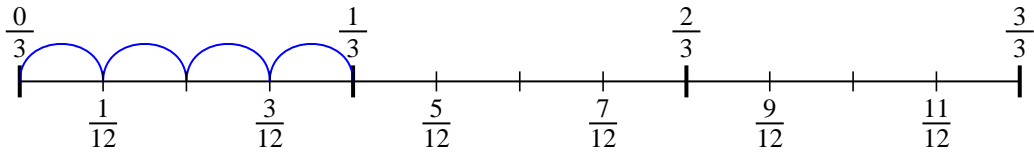
3)  $\frac{1}{5} \div 6$



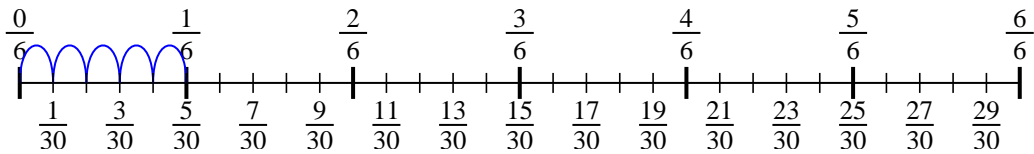
4)  $\frac{1}{6} \div 3$



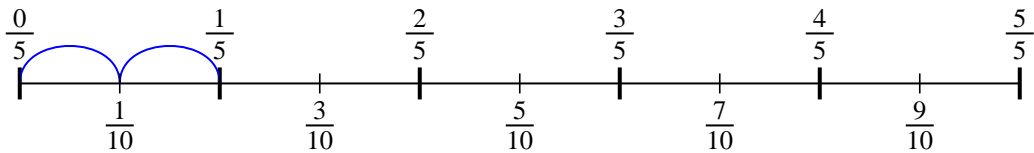
5)  $\frac{1}{3} \div 4$



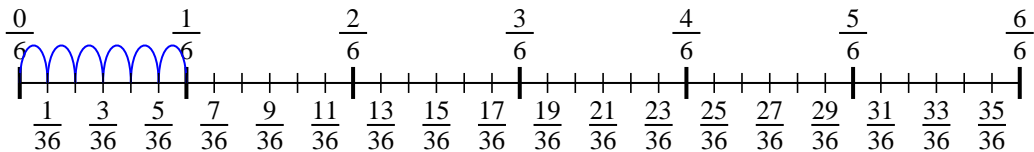
6)  $\frac{1}{6} \div 5$



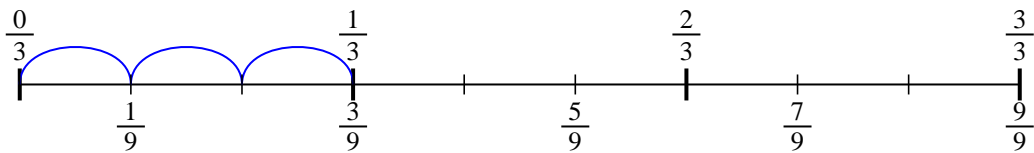
7)  $\frac{1}{5} \div 2$



8)  $\frac{1}{6} \div 6$



9)  $\frac{1}{3} \div 3$



**Answers**

1.  $\frac{1}{10}$
2.  $\frac{1}{15}$
3.  $\frac{1}{30}$
4.  $\frac{1}{18}$
5.  $\frac{1}{12}$
6.  $\frac{1}{30}$
7.  $\frac{1}{10}$
8.  $\frac{1}{36}$
9.  $\frac{1}{9}$






Use the numberline to solve each problem. The first is marked for you.


**Answers**

1)  $\frac{1}{5} \div 6$




1. \_\_\_\_\_

2)  $\frac{1}{7} \div 5$



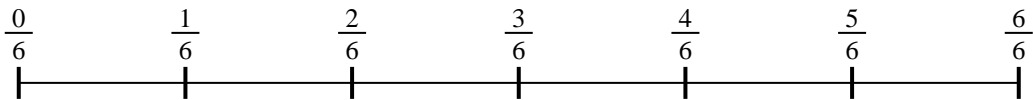
2. \_\_\_\_\_

3)  $\frac{1}{5} \div 4$



3. \_\_\_\_\_

4)  $\frac{1}{6} \div 6$



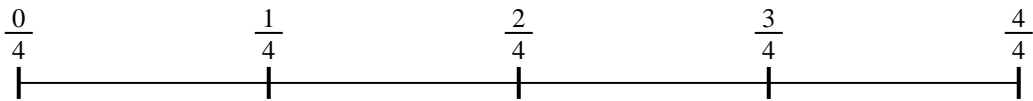
4. \_\_\_\_\_

5)  $\frac{1}{7} \div 2$



5. \_\_\_\_\_

6)  $\frac{1}{4} \div 4$



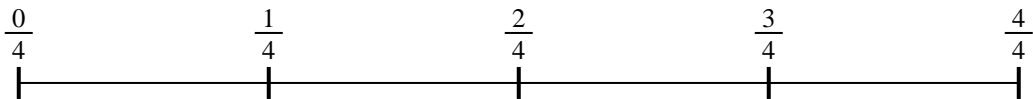
6. \_\_\_\_\_

7)  $\frac{1}{5} \div 5$



7. \_\_\_\_\_

8)  $\frac{1}{4} \div 5$



8. \_\_\_\_\_

9)  $\frac{1}{7} \div 2$

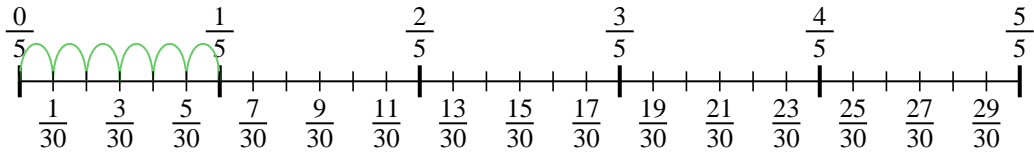


9. \_\_\_\_\_

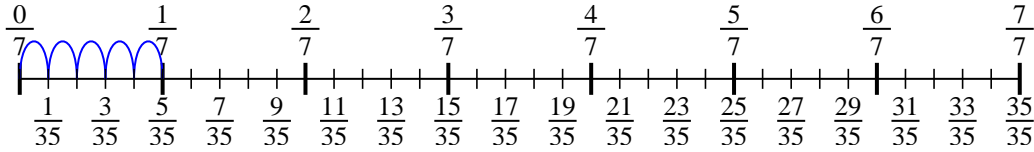


Use the numberline to solve each problem. The first is marked for you.

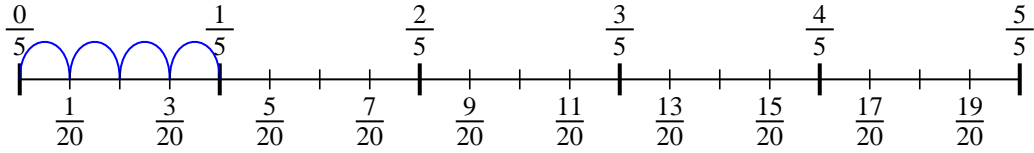
1)  $\frac{1}{5} \div 6$



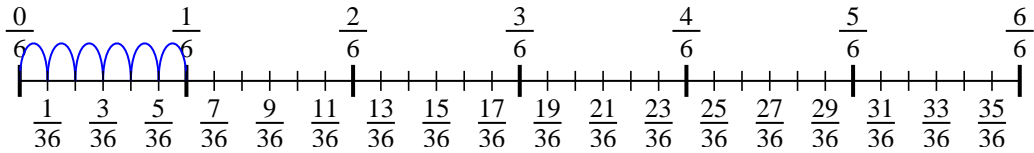
2)  $\frac{1}{7} \div 5$



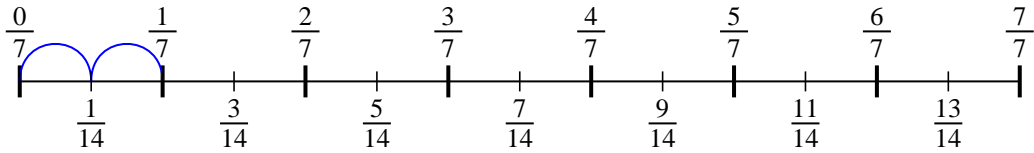
3)  $\frac{1}{5} \div 4$



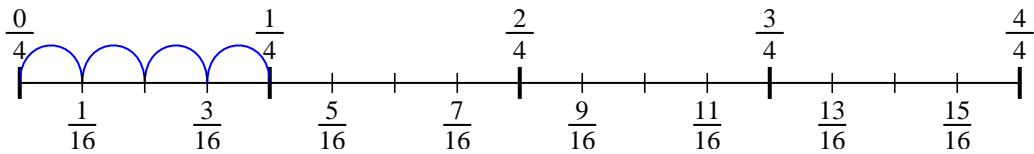
4)  $\frac{1}{6} \div 6$



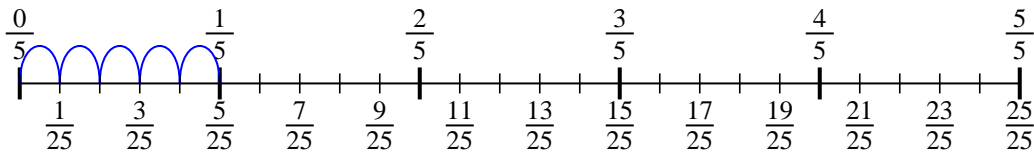
5)  $\frac{1}{7} \div 2$



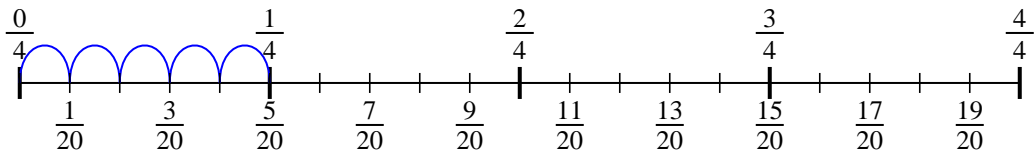
6)  $\frac{1}{4} \div 4$



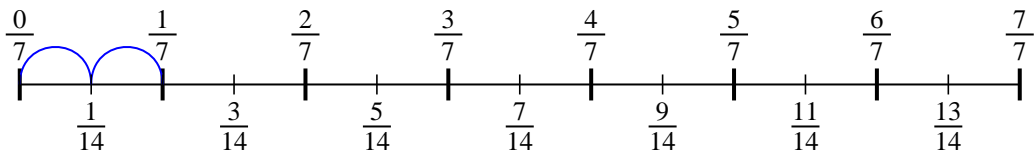
7)  $\frac{1}{5} \div 5$



8)  $\frac{1}{4} \div 5$



9)  $\frac{1}{7} \div 2$



**Answers**

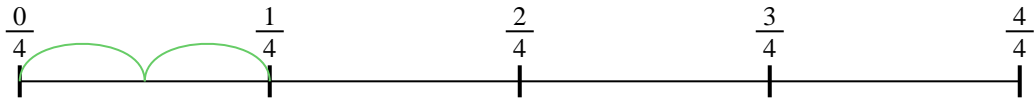
1.  $\frac{1}{30}$
2.  $\frac{1}{35}$
3.  $\frac{1}{20}$
4.  $\frac{1}{36}$
5.  $\frac{1}{14}$
6.  $\frac{1}{16}$
7.  $\frac{1}{25}$
8.  $\frac{1}{20}$
9.  $\frac{1}{14}$



Use the numberline to solve each problem. The first is marked for you.

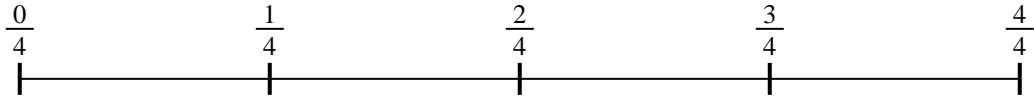
**Answers**

1)  $\frac{1}{4} \div 2$



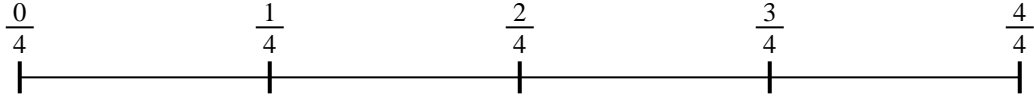
1. \_\_\_\_\_

2)  $\frac{1}{4} \div 5$




2. \_\_\_\_\_

3)  $\frac{1}{4} \div 4$



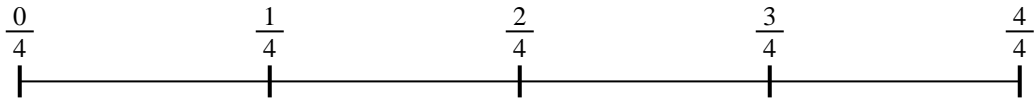
3. \_\_\_\_\_

4)  $\frac{1}{5} \div 4$




4. \_\_\_\_\_

5)  $\frac{1}{4} \div 4$



5. \_\_\_\_\_

6)  $\frac{1}{3} \div 5$




6. \_\_\_\_\_

7)  $\frac{1}{5} \div 6$



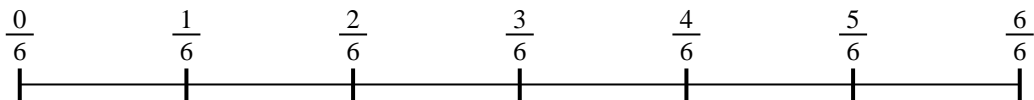
7. \_\_\_\_\_

8)  $\frac{1}{3} \div 4$



8. \_\_\_\_\_

9)  $\frac{1}{6} \div 6$

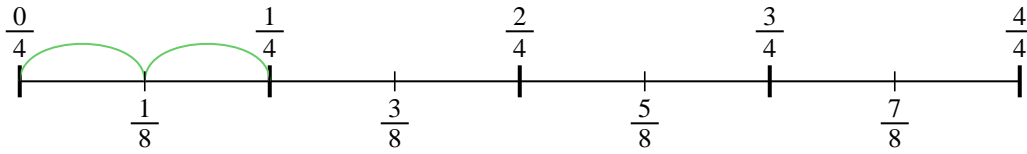


9. \_\_\_\_\_

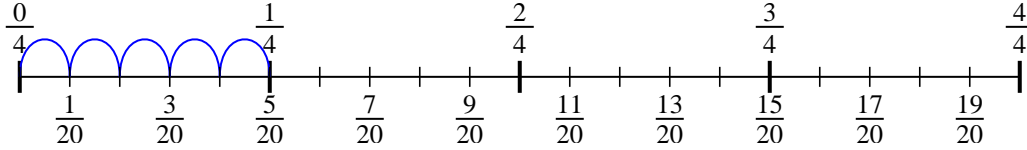


Use the numberline to solve each problem. The first is marked for you.

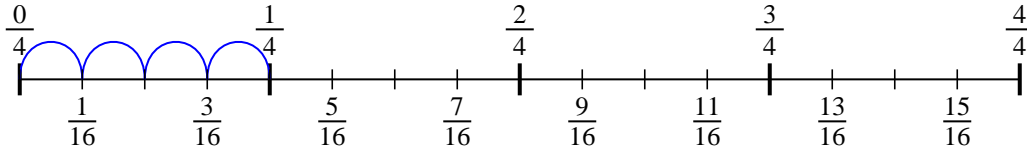
1)  $\frac{1}{4} \div 2$



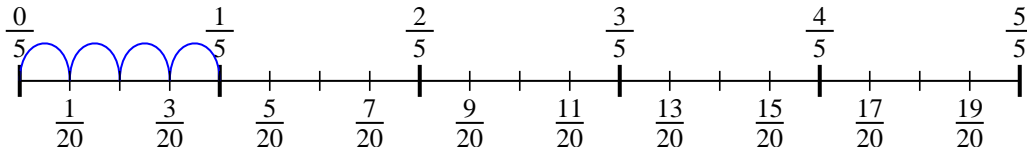
2)  $\frac{1}{4} \div 5$



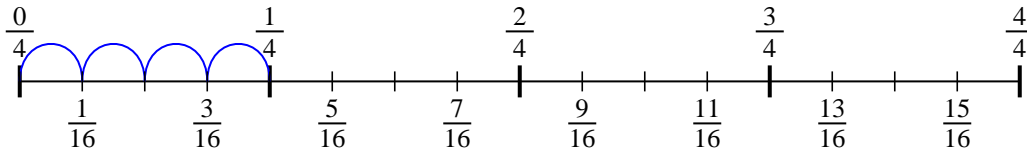
3)  $\frac{1}{4} \div 4$



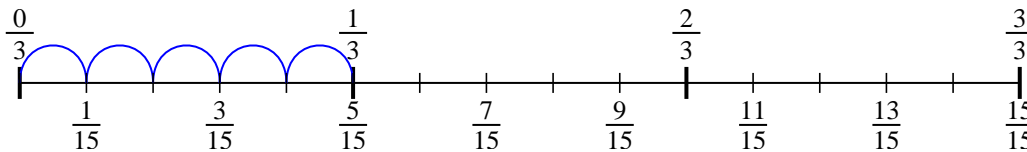
4)  $\frac{1}{5} \div 4$



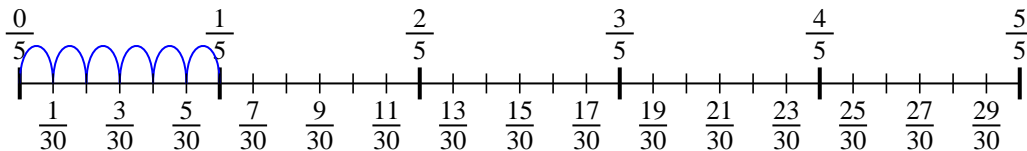
5)  $\frac{1}{4} \div 4$



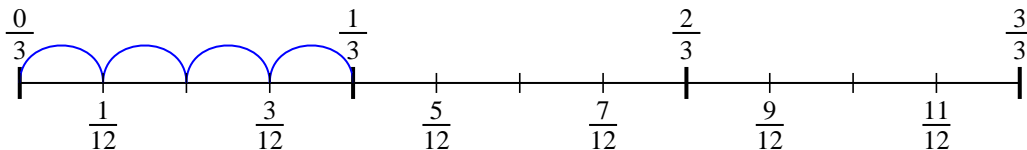
6)  $\frac{1}{3} \div 5$



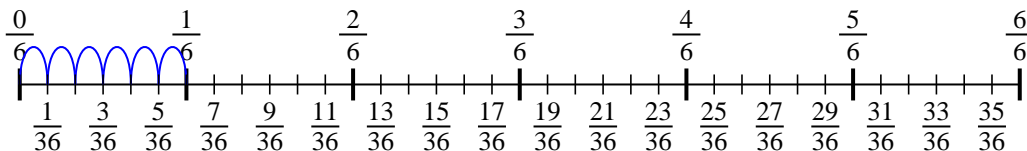
7)  $\frac{1}{5} \div 6$



8)  $\frac{1}{3} \div 4$



9)  $\frac{1}{6} \div 6$



**Answers**

1.  $\frac{1}{8}$
2.  $\frac{1}{20}$
3.  $\frac{1}{16}$
4.  $\frac{1}{20}$
5.  $\frac{1}{16}$
6.  $\frac{1}{15}$
7.  $\frac{1}{30}$
8.  $\frac{1}{12}$
9.  $\frac{1}{36}$