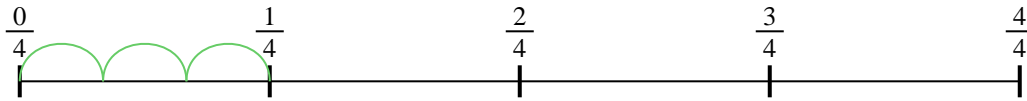




Use the numberline to solve each problem. The first is marked for you.


Answers

1) $\frac{1}{4} \div 3$




1. _____

2) $\frac{1}{7} \div 2$




2. _____

3) $\frac{1}{3} \div 6$




3. _____

4) $\frac{1}{7} \div 6$



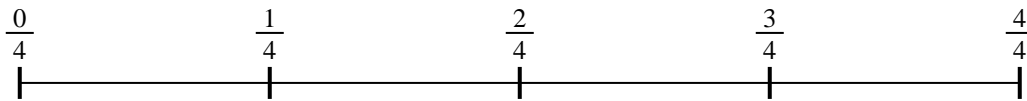
4. _____

5) $\frac{1}{5} \div 6$



5. _____

6) $\frac{1}{4} \div 2$




6. _____

7) $\frac{1}{7} \div 3$



7. _____

8) $\frac{1}{3} \div 3$



8. _____

9) $\frac{1}{3} \div 5$

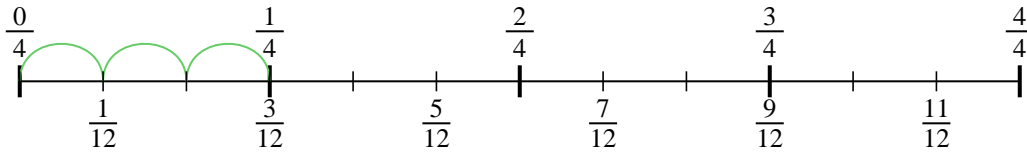


9. _____

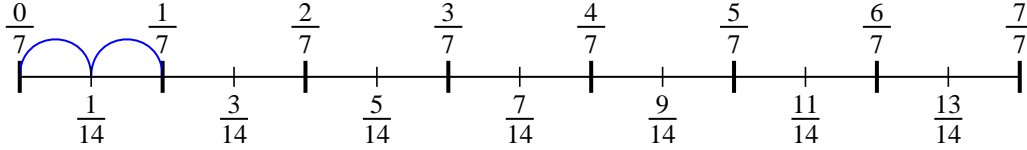


Use the numberline to solve each problem. The first is marked for you.

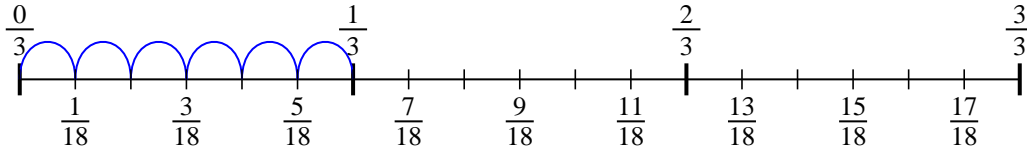
1) $\frac{1}{4} \div 3$



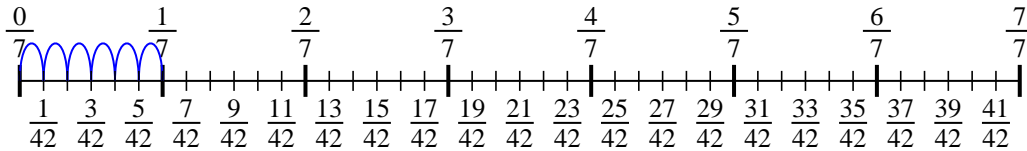
2) $\frac{1}{7} \div 2$



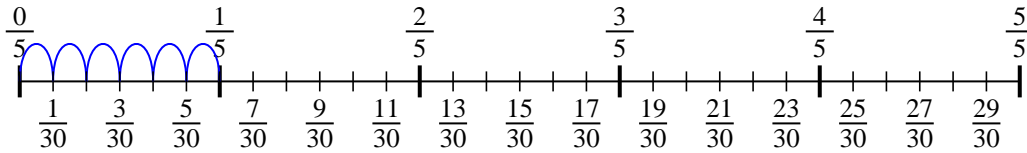
3) $\frac{1}{3} \div 6$



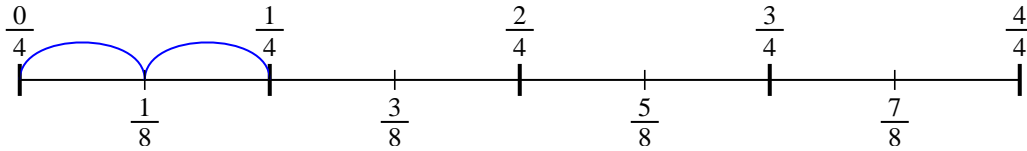
4) $\frac{1}{7} \div 6$



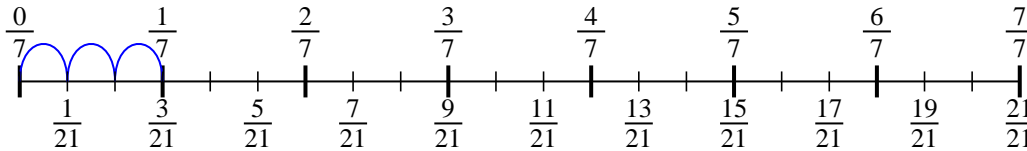
5) $\frac{1}{5} \div 6$



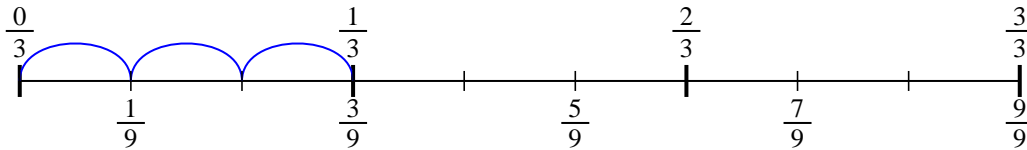
6) $\frac{1}{4} \div 2$



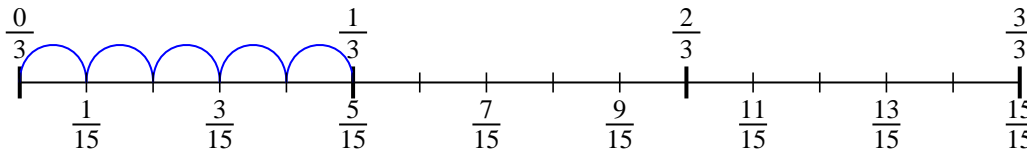
7) $\frac{1}{7} \div 3$



8) $\frac{1}{3} \div 3$



9) $\frac{1}{3} \div 5$



Answers

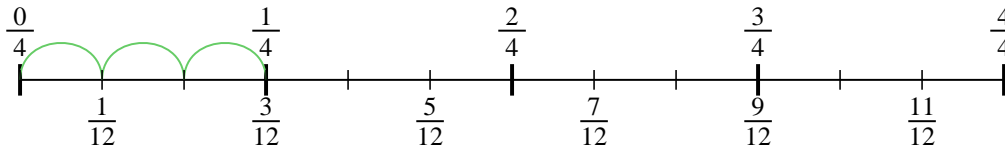
1. $\frac{1}{12}$
2. $\frac{1}{14}$
3. $\frac{1}{18}$
4. $\frac{1}{42}$
5. $\frac{1}{30}$
6. $\frac{1}{8}$
7. $\frac{1}{21}$
8. $\frac{1}{9}$
9. $\frac{1}{15}$



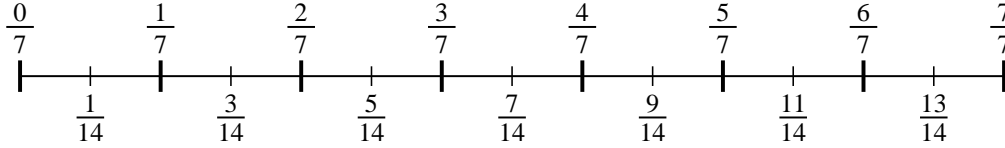
Use the numberline to solve each problem. The first is marked for you.

Answers

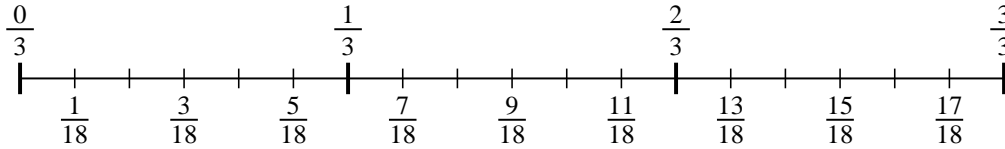
1) $\frac{1}{4} \div 3$



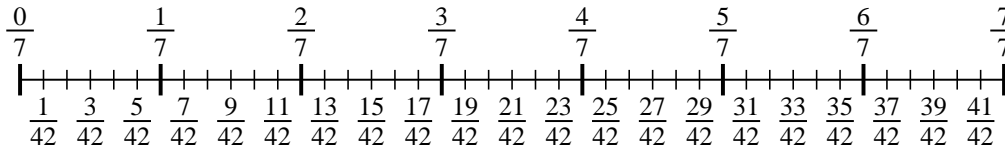
2) $\frac{1}{7} \div 2$



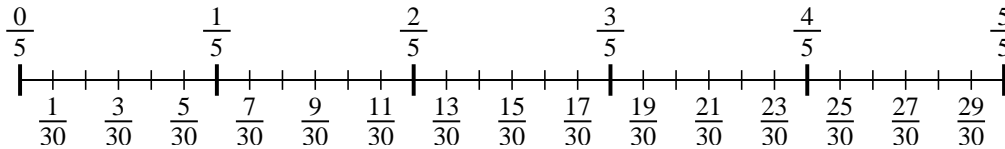
3) $\frac{1}{3} \div 6$



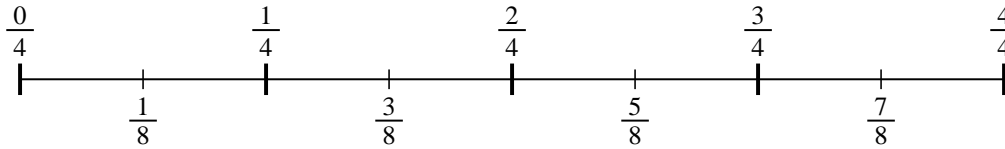
4) $\frac{1}{7} \div 6$



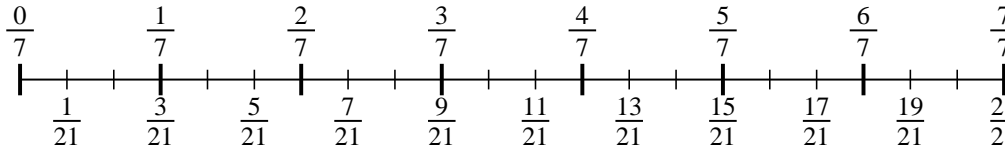
5) $\frac{1}{5} \div 6$



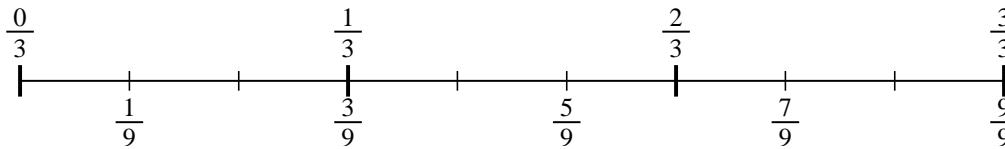
6) $\frac{1}{4} \div 2$



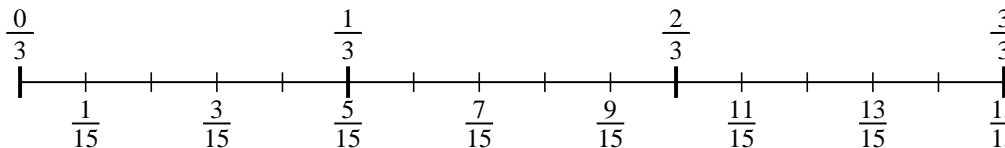
7) $\frac{1}{7} \div 3$



8) $\frac{1}{3} \div 3$



9) $\frac{1}{3} \div 5$



1. _____
2. _____
3. _____
4. _____
5. _____
6. _____
7. _____
8. _____
9. _____