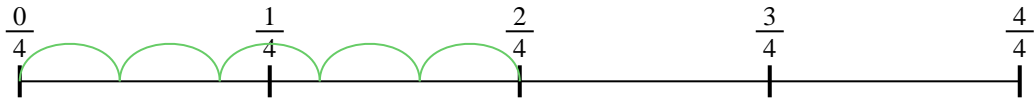




Use the numberline to solve each problem. The first is marked for you.


Answers

1) $\frac{2}{4} \div 5$



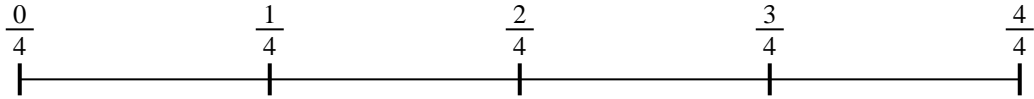
1. _____

2) $\frac{5}{7} \div 3$




2. _____

3) $\frac{3}{4} \div 3$



3. _____

4) $\frac{2}{5} \div 6$



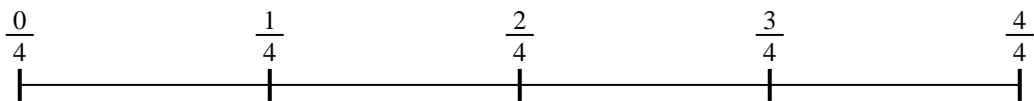
4. _____

5) $\frac{5}{7} \div 4$



5. _____

6) $\frac{3}{4} \div 2$




6. _____

7) $\frac{2}{3} \div 3$



7. _____

8) $\frac{2}{3} \div 4$



8. _____

9) $\frac{4}{7} \div 6$

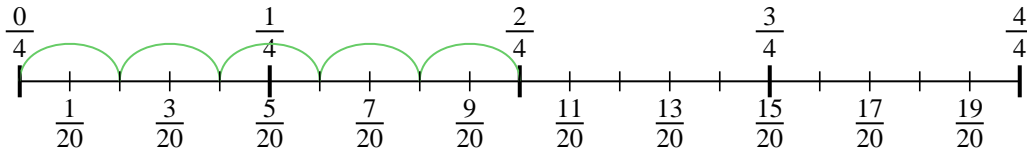


9. _____

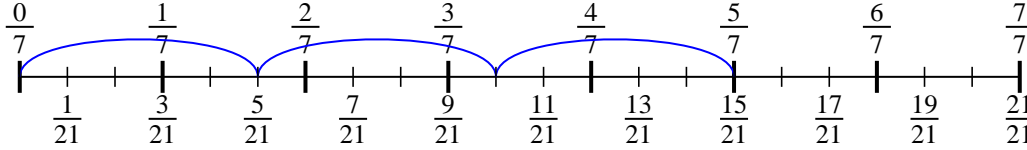


Use the numberline to solve each problem. The first is marked for you.

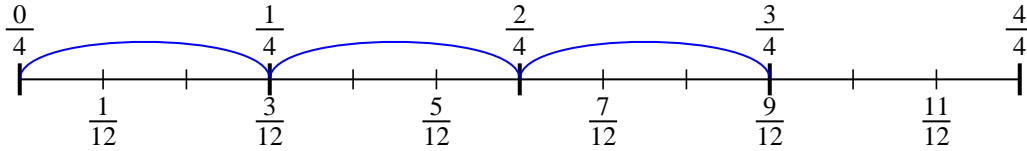
1) $\frac{2}{4} \div 5$



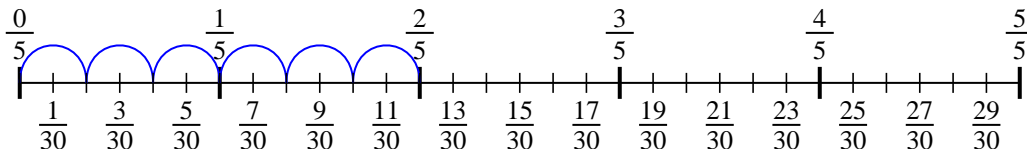
2) $\frac{5}{7} \div 3$



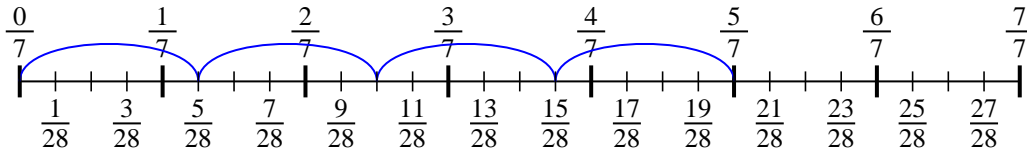
3) $\frac{3}{4} \div 3$



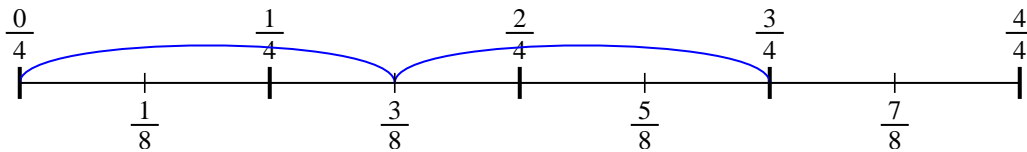
4) $\frac{2}{5} \div 6$



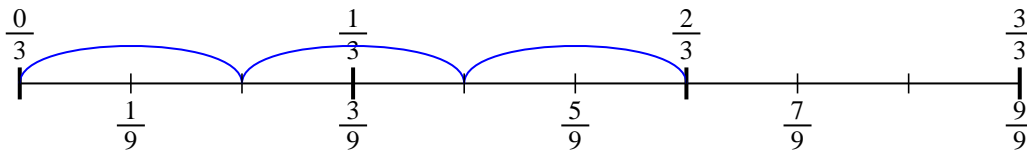
5) $\frac{5}{7} \div 4$



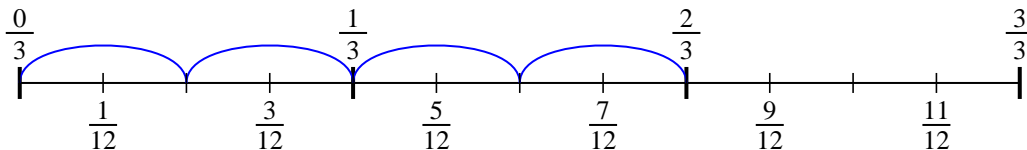
6) $\frac{3}{4} \div 2$



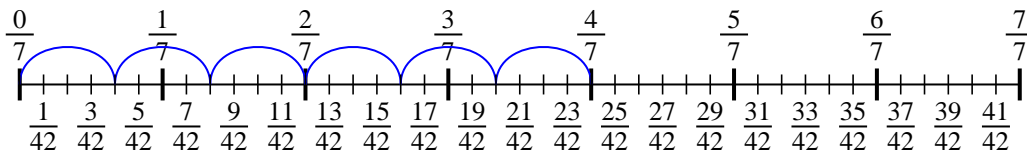
7) $\frac{2}{3} \div 3$



8) $\frac{2}{3} \div 4$



9) $\frac{4}{7} \div 6$



Answers

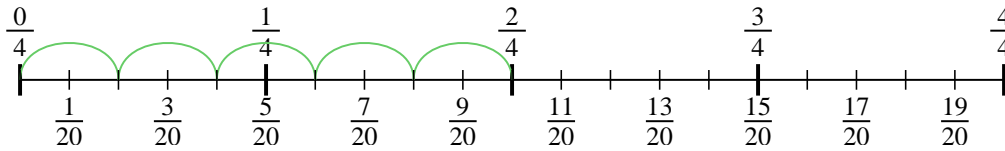
1. $\frac{2}{20}$
2. $\frac{5}{21}$
3. $\frac{3}{12}$
4. $\frac{2}{30}$
5. $\frac{5}{28}$
6. $\frac{3}{8}$
7. $\frac{2}{9}$
8. $\frac{2}{12}$
9. $\frac{4}{42}$



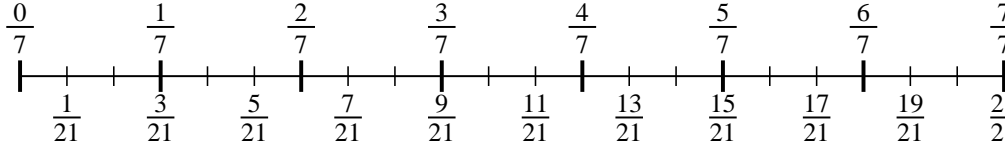
Use the numberline to solve each problem. The first is marked for you.

Answers

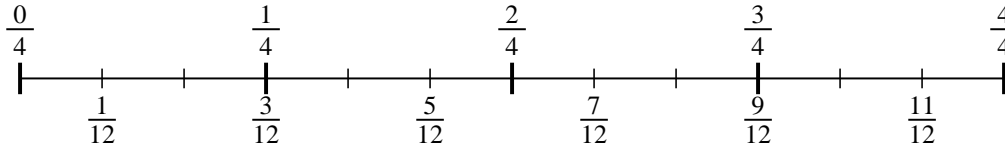
1) $\frac{2}{4} \div 5$



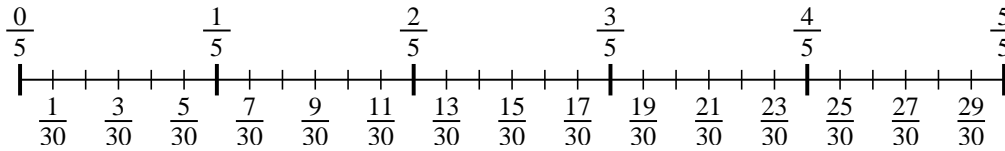
2) $\frac{5}{7} \div 3$



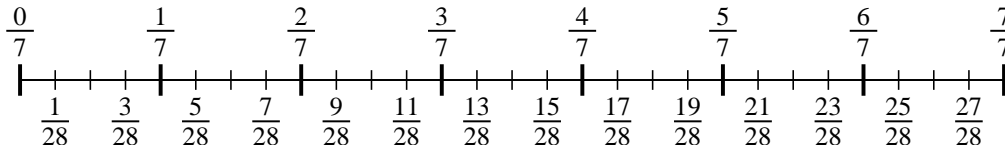
3) $\frac{3}{4} \div 3$



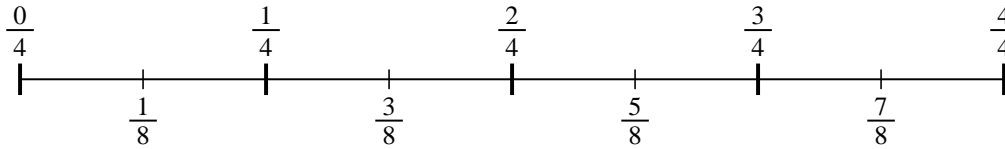
4) $\frac{2}{5} \div 6$



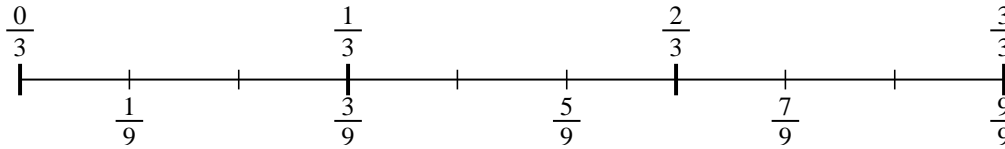
5) $\frac{5}{7} \div 4$



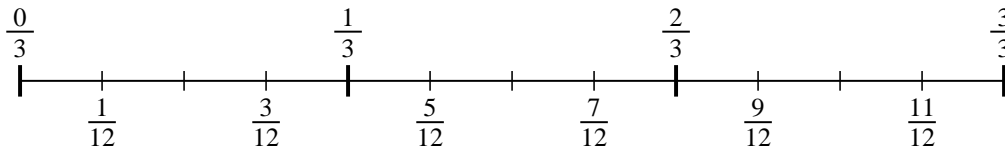
6) $\frac{3}{4} \div 2$



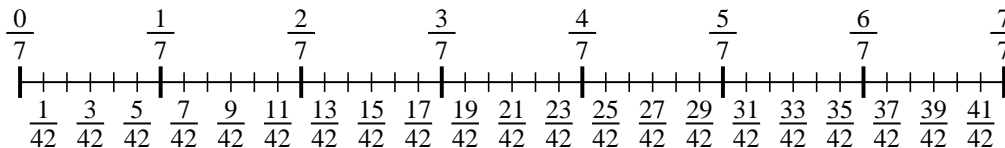
7) $\frac{2}{3} \div 3$



8) $\frac{2}{3} \div 4$



9) $\frac{4}{7} \div 6$



1. _____
2. _____
3. _____
4. _____
5. _____
6. _____
7. _____
8. _____
9. _____