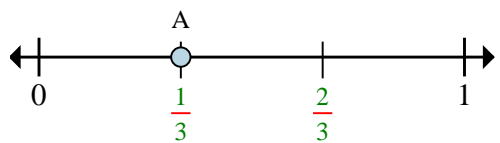




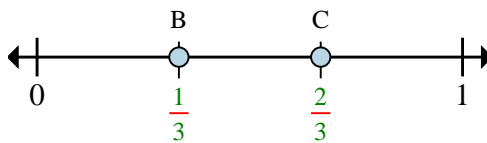
Solve each problem.

Ex)



- This numberline is divided into how many pieces?
- What is the location of A (written as a fraction)?

Ex)



- On this numberline what is the value of 0 written as a fraction?
- On this numberline from B to C is how far (written as a fraction)?

Answers

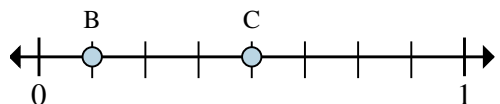
Exa. 3

Exb. 1/3

Exa. 0/3

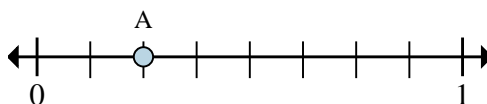
Exb. 1/3

1)



- On this numberline what is the value of 1 written as a fraction?
- On this numberline from B to C is how far (written as a fraction)?

2)



- This numberline is divided into how many pieces?
- What is the location of A (written as a fraction)?

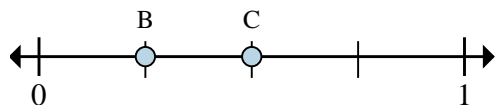
1a. _____

1b. _____

2a. _____

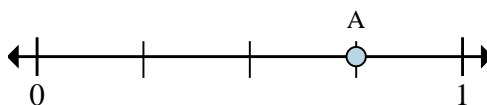
2b. _____

3)



- On this numberline what is the value of 0 written as a fraction?
- On this numberline from B to C is how far (written as a fraction)?

4)



- This numberline is divided into how many pieces?
- What is the location of A (written as a fraction)?

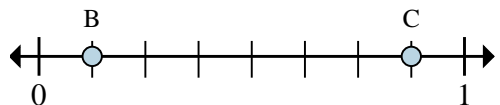
3a. _____

3b. _____

4a. _____

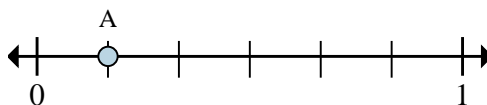
4b. _____

5)



- On this numberline what is the value of 0 written as a fraction?
- On this numberline from B to C is how far (written as a fraction)?

6)



- This numberline is divided into how many pieces?
- What is the location of A (written as a fraction)?

5a. _____

5b. _____

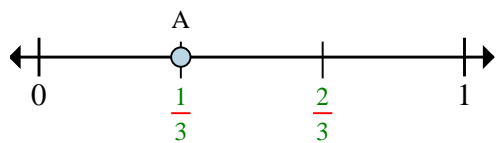
6a. _____

6b. _____



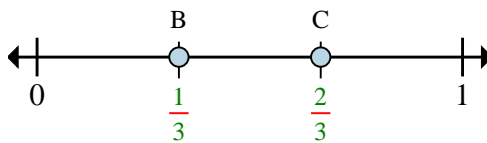
Solve each problem.

Ex)



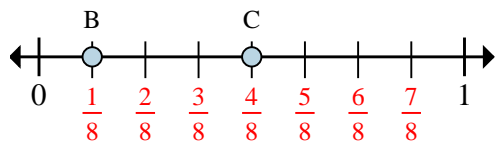
- This numberline is divided into how many pieces?
- What is the location of A (written as a fraction)?

Ex)



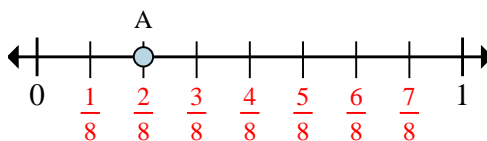
- On this numberline what is the value of 0 written as a fraction?
- On this numberline from B to C is how far (written as a fraction)?

1)



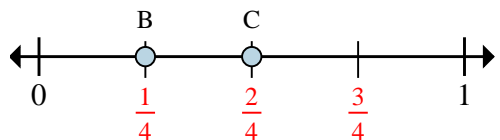
- On this numberline what is the value of 1 written as a fraction?
- On this numberline from B to C is how far (written as a fraction)?

2)



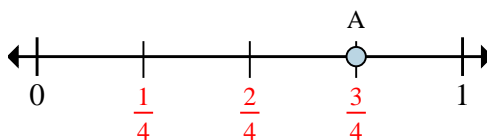
- This numberline is divided into how many pieces?
- What is the location of A (written as a fraction)?

3)



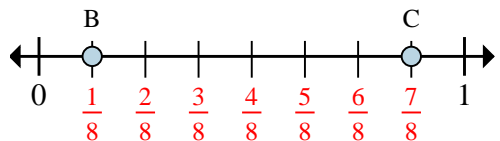
- On this numberline what is the value of 0 written as a fraction?
- On this numberline from B to C is how far (written as a fraction)?

4)



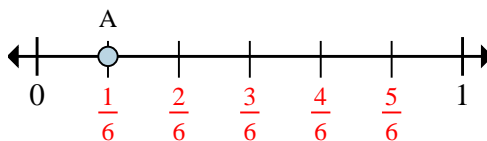
- This numberline is divided into how many pieces?
- What is the location of A (written as a fraction)?

5)



- On this numberline what is the value of 0 written as a fraction?
- On this numberline from B to C is how far (written as a fraction)?

6)



- This numberline is divided into how many pieces?
- What is the location of A (written as a fraction)?

Answers

Exa. 3

Exb. 1/3

Exa. 0/3

Exb. 1/3

1a. 8/8

1b. 3/8

2a. 8

2b. 2/8

3a. 0/4

3b. 1/4

4a. 4

4b. 3/4

5a. 0/8

5b. 6/8

6a. 6

6b. 1/6