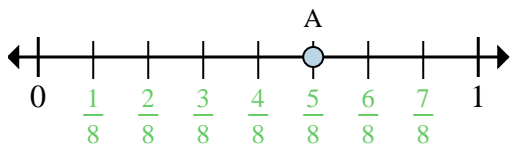


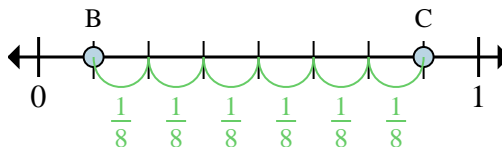


Solve each problem.



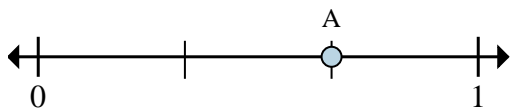
Ex) This numberline is divided into how many pieces?

Ex) What is the location of A (written as a fraction)?



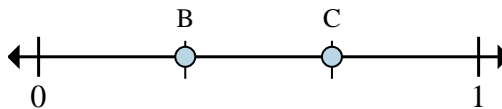
Ex) On this numberline what is the value of 1 written as a fraction?

Ex) On this numberline from B to C is how far (written as a fraction)?



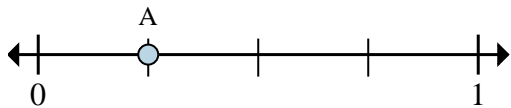
1a) This numberline is divided into how many pieces?

1b) What is the location of A (written as a fraction)?



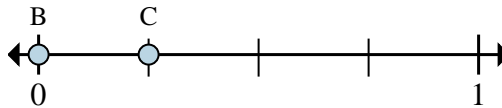
2a) On this numberline what is the value of 1 written as a fraction?

2b) On this numberline from B to C is how far (written as a fraction)?



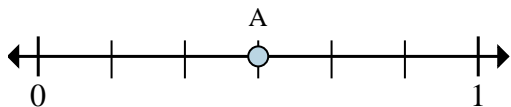
3a) This numberline is divided into how many pieces?

3b) What is the location of A (written as a fraction)?



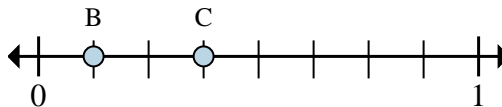
4a) On this numberline what is the value of 1 written as a fraction?

4b) On this numberline from B to C is how far (written as a fraction)?



5a) This numberline is divided into how many pieces?

5b) What is the location of A (written as a fraction)?



6a) On this numberline what is the value of 0 written as a fraction?

6b) On this numberline from B to C is how far (written as a fraction)?

Answers

Ex. 8

Ex. 5/8

Ex. 8/8

Ex. 6/8

1a. _____

1b. _____

2a. _____

2b. _____

3a. _____

3b. _____

4a. _____

4b. _____

5a. _____

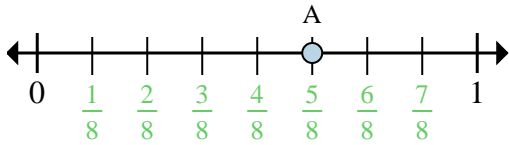
5b. _____

6a. _____

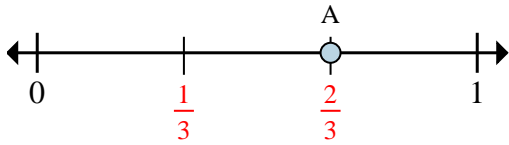
6b. _____



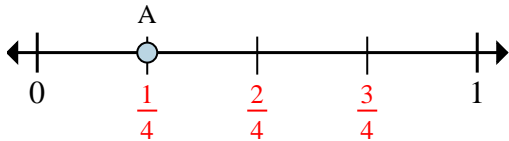
Solve each problem.



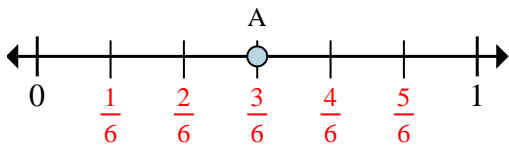
- Ex)** This numberline is divided into how many pieces?
Ex) What is the location of A (written as a fraction)?



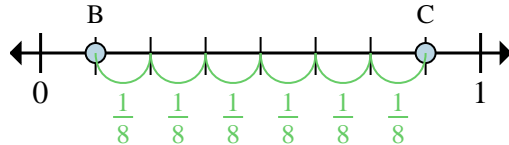
- 1a)** This numberline is divided into how many pieces?
1b) What is the location of A (written as a fraction)?



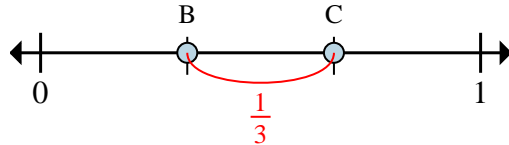
- 3a)** This numberline is divided into how many pieces?
3b) What is the location of A (written as a fraction)?



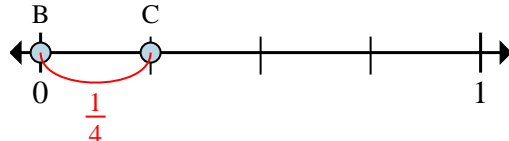
- 5a)** This numberline is divided into how many pieces?
5b) What is the location of A (written as a fraction)?



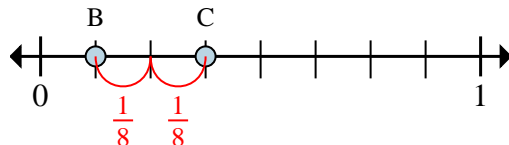
- Ex)** On this numberline what is the value of 1 written as a fraction?
Ex) On this numberline from B to C is how far (written as a fraction)?



- 2a)** On this numberline what is the value of 1 written as a fraction?
2b) On this numberline from B to C is how far (written as a fraction)?



- 4a)** On this numberline what is the value of 1 written as a fraction?
4b) On this numberline from B to C is how far (written as a fraction)?



- 6a)** On this numberline what is the value of 0 written as a fraction?
6b) On this numberline from B to C is how far (written as a fraction)?

Answers

Ex. 8

Ex. 5/8

Ex. 8/8

Ex. 6/8

1a. 3

1b. 2/3

2a. 3/3

2b. 1/3

3a. 4

3b. 1/4

4a. 4/4

4b. 1/4

5a. 6

5b. 3/6

6a. 0/8

6b. 2/8