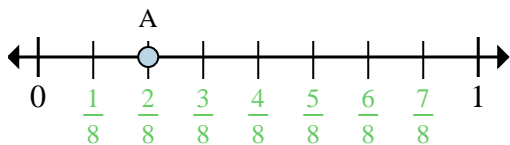


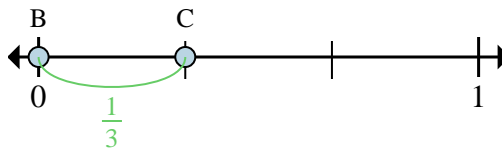


Solve each problem.



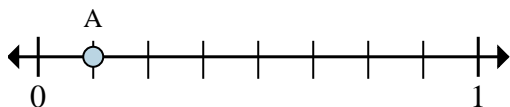
**Ex)** This numberline is divided into how many pieces?

**Ex)** What is the location of A (written as a fraction)?



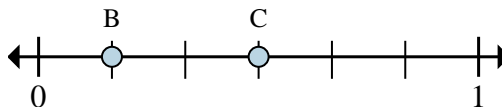
**Ex)** On this numberline what is the value of 1 written as a fraction?

**Ex)** On this numberline from B to C is how far (written as a fraction)?



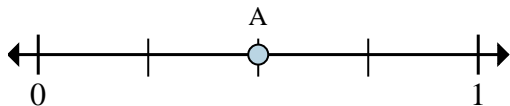
**1a)** This numberline is divided into how many pieces?

**1b)** What is the location of A (written as a fraction)?



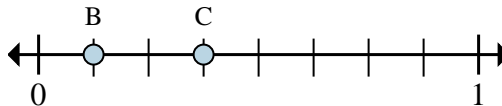
**2a)** On this numberline what is the value of 1 written as a fraction?

**2b)** On this numberline from B to C is how far (written as a fraction)?



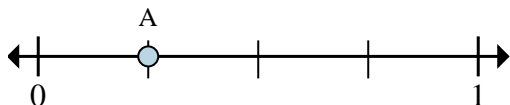
**3a)** This numberline is divided into how many pieces?

**3b)** What is the location of A (written as a fraction)?



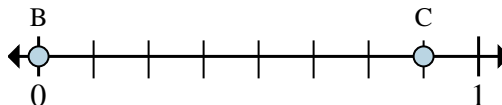
**4a)** On this numberline what is the value of 0 written as a fraction?

**4b)** On this numberline from B to C is how far (written as a fraction)?



**5a)** This numberline is divided into how many pieces?

**5b)** What is the location of A (written as a fraction)?



**6a)** On this numberline what is the value of 0 written as a fraction?

**6b)** On this numberline from B to C is how far (written as a fraction)?

Answers

Ex. 8

Ex. 2/8

Ex. 3/3

Ex. 1/3

1a. \_\_\_\_\_

1b. \_\_\_\_\_

2a. \_\_\_\_\_

2b. \_\_\_\_\_

3a. \_\_\_\_\_

3b. \_\_\_\_\_

4a. \_\_\_\_\_

4b. \_\_\_\_\_

5a. \_\_\_\_\_

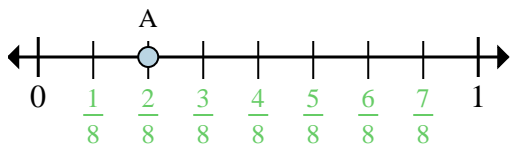
5b. \_\_\_\_\_

6a. \_\_\_\_\_

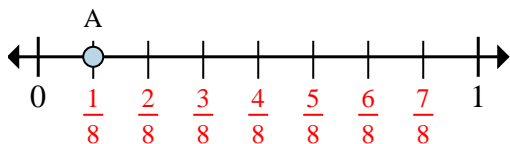
6b. \_\_\_\_\_



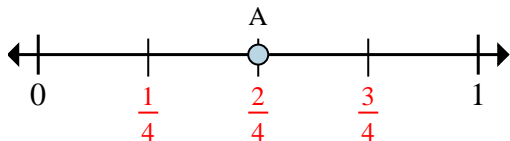
Solve each problem.



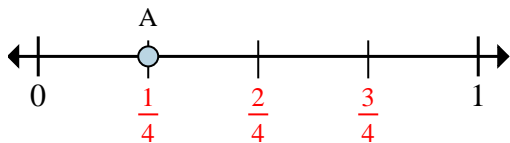
- Ex) This numberline is divided into how many pieces?
- Ex) What is the location of A (written as a fraction)?



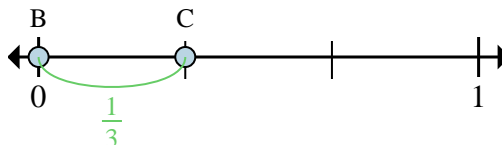
- 1a) This numberline is divided into how many pieces?
- 1b) What is the location of A (written as a fraction)?



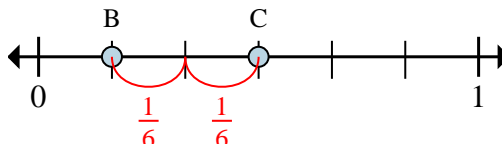
- 3a) This numberline is divided into how many pieces?
- 3b) What is the location of A (written as a fraction)?



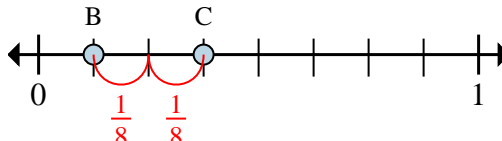
- 5a) This numberline is divided into how many pieces?
- 5b) What is the location of A (written as a fraction)?



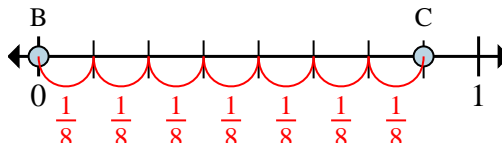
- Ex) On this numberline what is the value of 1 written as a fraction?
- Ex) On this numberline from B to C is how far (written as a fraction)?



- 2a) On this numberline what is the value of 1 written as a fraction?
- 2b) On this numberline from B to C is how far (written as a fraction)?



- 4a) On this numberline what is the value of 0 written as a fraction?
- 4b) On this numberline from B to C is how far (written as a fraction)?



- 6a) On this numberline what is the value of 0 written as a fraction?
- 6b) On this numberline from B to C is how far (written as a fraction)?

Answers

Ex. 8

Ex. 2/8

Ex. 3/3

Ex. 1/3

1a. 8

1b. 1/8

2a. 6/6

2b. 2/6

3a. 4

3b. 2/4

4a. 0/8

4b. 2/8

5a. 4

5b. 1/4

6a. 0/8

6b. 7/8