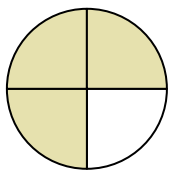




Determine which letter best describes the shaded portion.

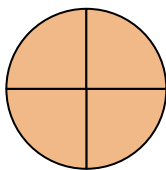
Answers

1)



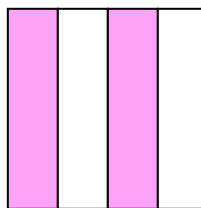
- A. one half
- B. four quarters
- C. three quarters

2)



- A. four quarters
- B. three-fourths
- C. one-third

3)



- A. four-fourths
- B. two-fourths
- C. three-fourths

1. _____

2. _____

3. _____

4. _____

5. _____

6. _____

7. _____

8. _____


9. _____

10. _____

11. _____

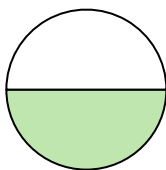
12. _____

4)




- A. two quarters
- B. three-thirds
- C. three-fourths

5)



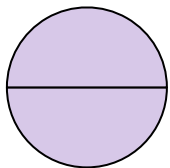
- A. one half
- B. three quarters
- C. one-third

6)




- A. four-fourths
- B. one half
- C. one quarter

7)



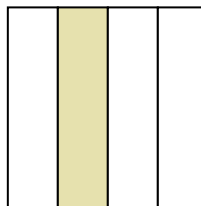
- A. two halves
- B. one-fourth
- C. one-third

8)



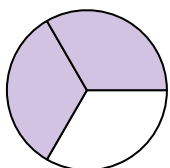
- A. one quarter
- B. two halves
- C. three-fourths

9)




- A. one-fourth
- B. three-thirds
- C. four quarters

10)



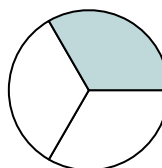
- A. three-thirds
- B. two-thirds
- C. one half

11)



- A. one half
- B. one quarter
- C. three-thirds

12)

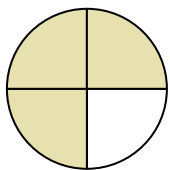


- A. two halves
- B. four-fourths
- C. one-third



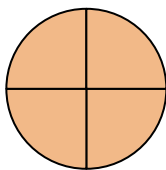
Determine which letter best describes the shaded portion.

1)



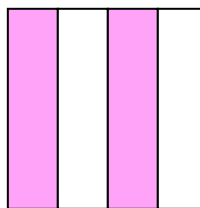
- A. one half
- B. four quarters
- C. three quarters

2)




- A. four quarters
- B. three-fourths
- C. one-third

3)



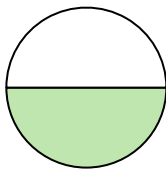
- A. four-fourths
- B. two-fourths
- C. three-fourths

4)




- A. two quarters
- B. three-thirds
- C. three-fourths

5)



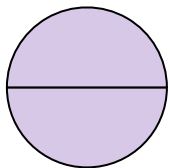
- A. one half
- B. three quarters
- C. one-third

6)




- A. four-fourths
- B. one half
- C. one quarter

7)



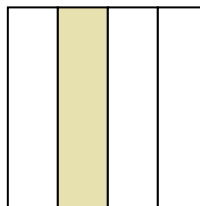
- A. two halves
- B. one-fourth
- C. one-third

8)



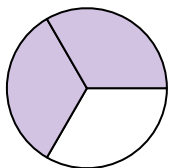
- A. one quarter
- B. two halves
- C. three-fourths

9)



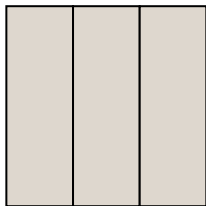
- A. one-fourth
- B. three-thirds
- C. four quarters

10)



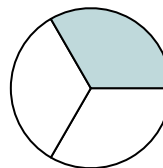
- A. three-thirds
- B. two-thirds
- C. one half

11)



- A. one half
- B. one quarter
- C. three-thirds

12)



- A. two halves
- B. four-fourths
- C. one-third

Answers

1. **C**

2. **A**

3. **B**

4. **B**

5. **A**

6. **B**

7. **A**

8. **B**

9. **A**

10. **B**

11. **C**

12. **C**