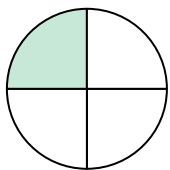




Determine which letter best describes the shaded portion.


**Answers**

1)



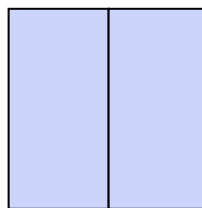
- A. two quarters
- B. one-fourth
- C. four-fourths

2)



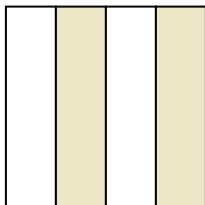
- A. two-thirds
- B. two-fourths
- C. four quarters

3)




- A. two halves
- B. one-fourth
- C. three quarters

4)




- A. two-fourths
- B. two halves
- C. one-fourth

5)



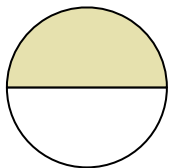
- A. one-third
- B. two halves
- C. one half

6)



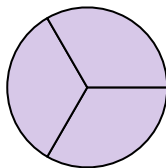
- A. one half
- B. two halves
- C. three-thirds

7)




- A. one half
- B. three-thirds
- C. one quarter

8)



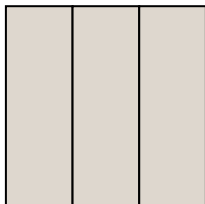
- A. three-thirds
- B. one half
- C. two-fourths

9)



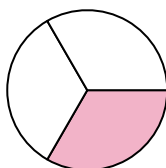
- A. three-thirds
- B. two-thirds
- C. three quarters

10)



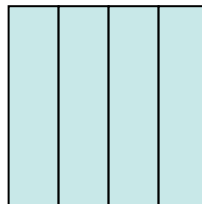
- A. three-thirds
- B. three quarters
- C. one half

11)



- A. two-thirds
- B. three quarters
- C. one-third

12)



- A. three-fourths
- B. four-fourths
- C. one half

1. \_\_\_\_\_

2. \_\_\_\_\_

3. \_\_\_\_\_

4. \_\_\_\_\_

5. \_\_\_\_\_

6. \_\_\_\_\_

7. \_\_\_\_\_

8. \_\_\_\_\_

9. \_\_\_\_\_

10. \_\_\_\_\_

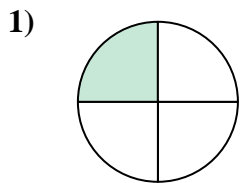
11. \_\_\_\_\_

12. \_\_\_\_\_

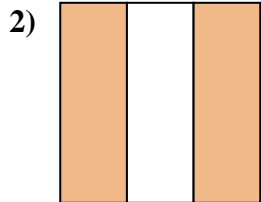


Determine which letter best describes the shaded portion.

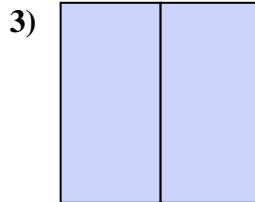
**Answers**



- A. two quarters
- B. one-fourth
- C. four-fourths



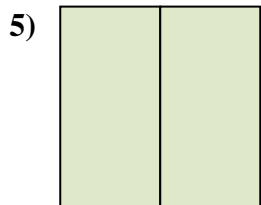
- A. two-thirds
- B. two-fourths
- C. four quarters



- A. two halves
- B. one-fourth
- C. three quarters



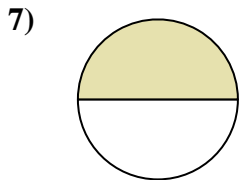
- A. two-fourths
- B. two halves
- C. one-fourth



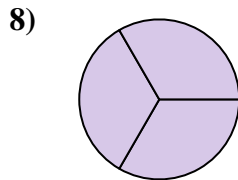
- A. one-third
- B. two halves
- C. one half



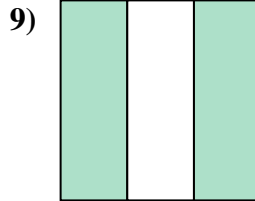
- A. one half
- B. two halves
- C. three-thirds



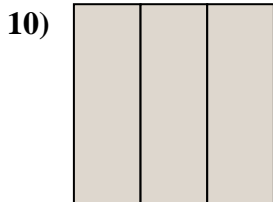
- A. one half
- B. three-thirds
- C. one quarter



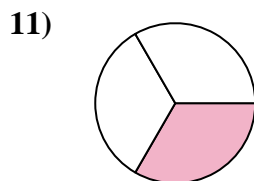
- A. three-thirds
- B. one half
- C. two-fourths



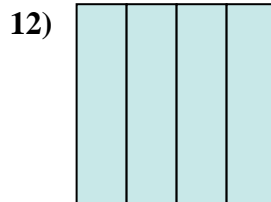
- A. three-thirds
- B. two-thirds
- C. three quarters



- A. three-thirds
- B. three quarters
- C. one half



- A. two-thirds
- B. three quarters
- C. one-third



- A. three-fourths
- B. four-fourths
- C. one half

1.   **B**  

2.   **A**  

3.   **A**  

4.   **A**  

5.   **B**  

6.   **A**  

7.   **A**  

8.   **A**  

9.   **B**  

10.   **A**  

11.   **C**  

12.   **B**