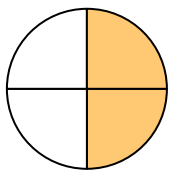




Determine which letter best describes the shaded portion.


**Answers**

1)



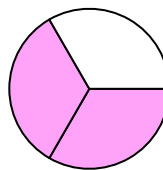
- A. one-third
- B. four-fourths
- C. two-fourths

2)



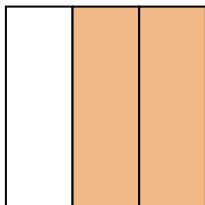
- A. one-third
- B. three-fourths
- C. one half

3)




- A. two-thirds
- B. four-fourths
- C. three-thirds

4)



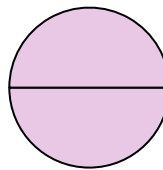
- A. two halves
- B. one half
- C. two-thirds

5)



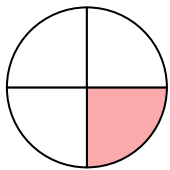
- A. two halves
- B. one quarter
- C. one-third

6)



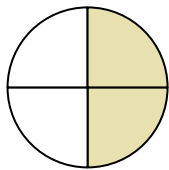
- A. one half
- B. two-fourths
- C. two halves

7)




- A. one-third
- B. two quarters
- C. one quarter

8)



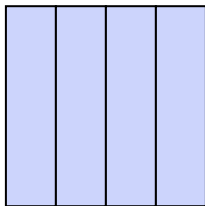
- A. three quarters
- B. two quarters
- C. four quarters

9)



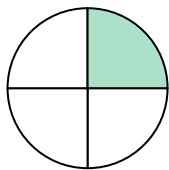
- A. one half
- B. two halves
- C. one-third

10)




- A. four quarters
- B. one half
- C. two quarters

11)



- A. one quarter
- B. one-third
- C. one half

12)



- A. one half
- B. one-third
- C. three-thirds

1. \_\_\_\_\_

2. \_\_\_\_\_

3. \_\_\_\_\_

4. \_\_\_\_\_

5. \_\_\_\_\_

6. \_\_\_\_\_

7. \_\_\_\_\_

8. \_\_\_\_\_

9. \_\_\_\_\_

10. \_\_\_\_\_

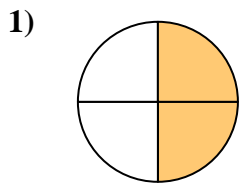
11. \_\_\_\_\_

12. \_\_\_\_\_

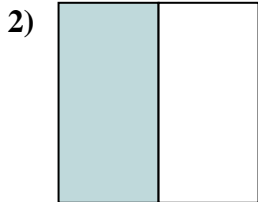


Determine which letter best describes the shaded portion.

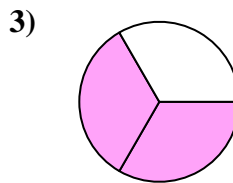
Answers



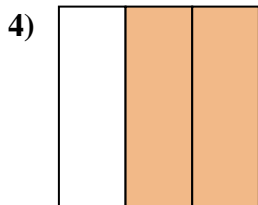
- A. one-third
- B. four-fourths
- C. two-fourths



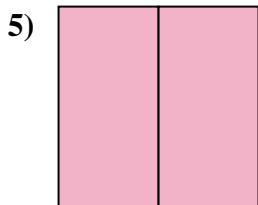
- A. one-third
- B. three-fourths
- C. one half



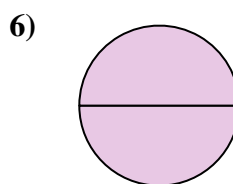
- A. two-thirds
- B. four-fourths
- C. three-thirds



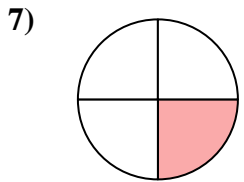
- A. two halves
- B. one half
- C. two-thirds



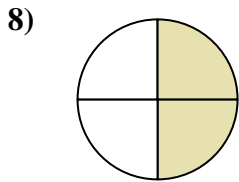
- A. two halves
- B. one quarter
- C. one-third



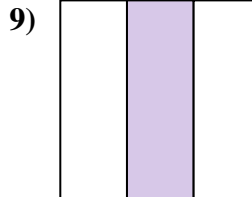
- A. one half
- B. two-fourths
- C. two halves



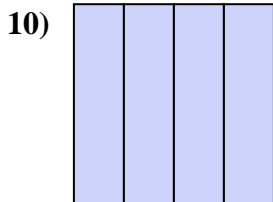
- A. one-third
- B. two quarters
- C. one quarter



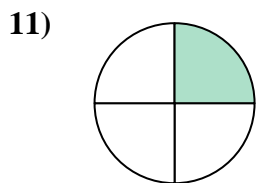
- A. three quarters
- B. two quarters
- C. four quarters



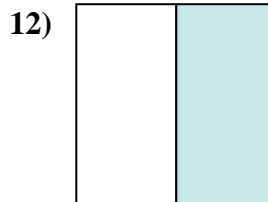
- A. one half
- B. two halves
- C. one-third



- A. four quarters
- B. one half
- C. two quarters



- A. one quarter
- B. one-third
- C. one half



- A. one half
- B. one-third
- C. three-thirds

1.   **C**  

2.   **C**  

3.   **A**  

4.   **C**  

5.   **A**  

6.   **C**  

7.   **C**  

8.   **B**  

9.   **C**  

10.   **A**  

11.   **A**  

12.   **A**  

12.   **A**