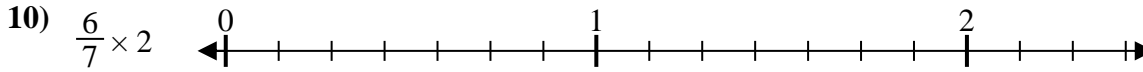
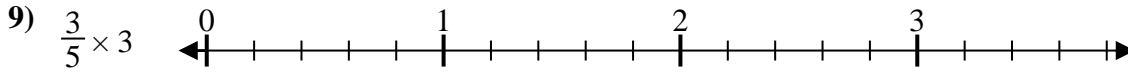
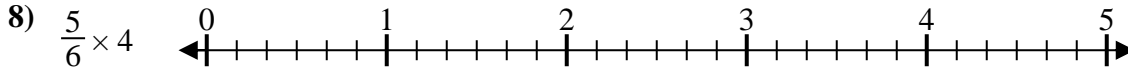
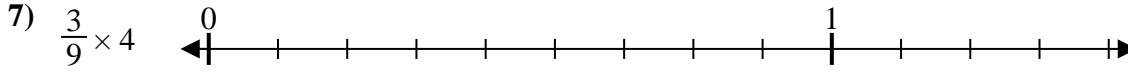
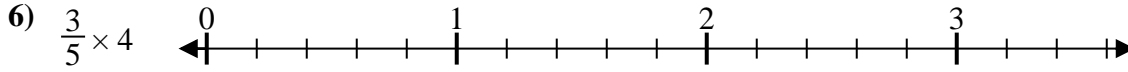
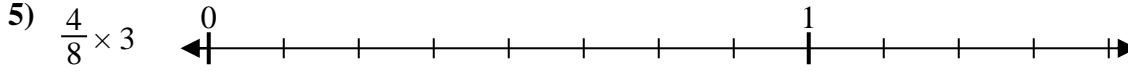
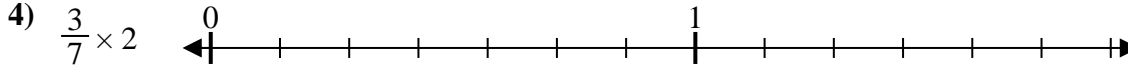

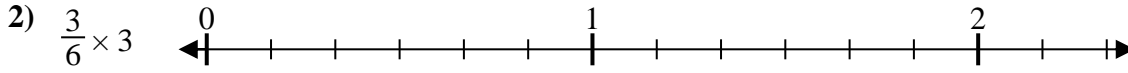
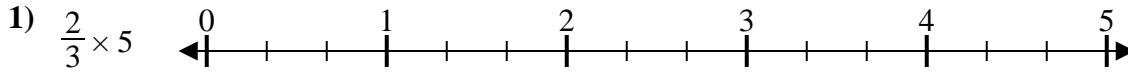




Solve each problem.

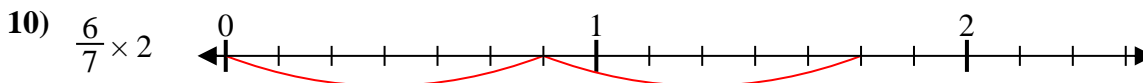
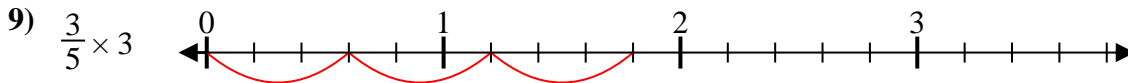
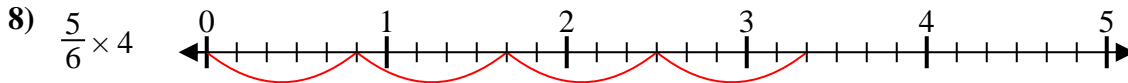
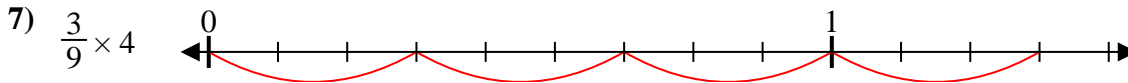
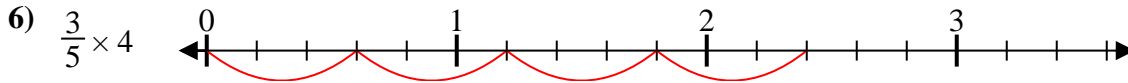
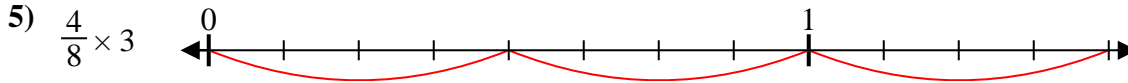
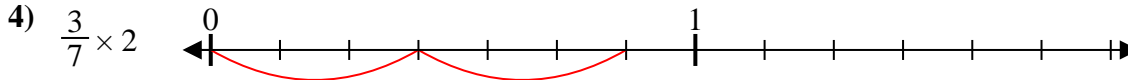
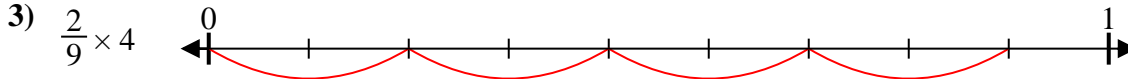
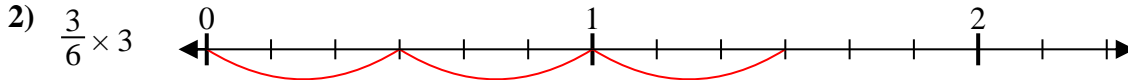
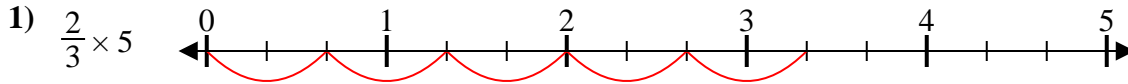


Answers

- 1. _____
- 2. _____
- 3. _____
- 4. _____
- 5. _____
- 6. _____
- 7. _____
- 8. _____
- 9. _____
- 10. _____



Solve each problem.



Answers

1. $\frac{10}{3} = 3\frac{1}{3}$

2. $\frac{9}{6} = 1\frac{3}{6}$

3. $\frac{8}{9}$

4. $\frac{6}{7}$

5. $\frac{12}{8} = 1\frac{4}{8}$

6. $\frac{12}{5} = 2\frac{2}{5}$

7. $\frac{12}{9} = 1\frac{3}{9}$

8. $\frac{20}{6} = 3\frac{2}{6}$

9. $\frac{9}{5} = 1\frac{4}{5}$

10. $\frac{12}{7} = 1\frac{5}{7}$