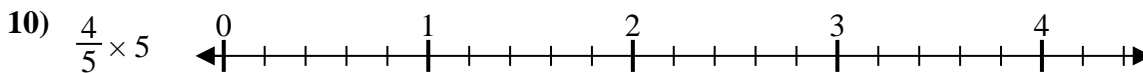
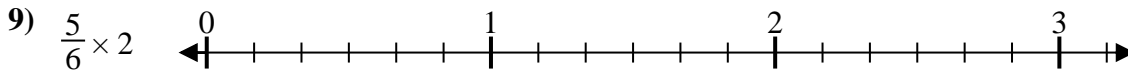
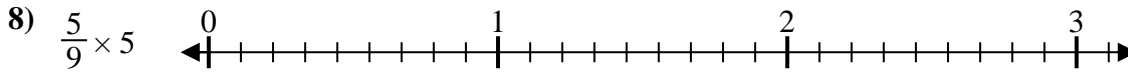
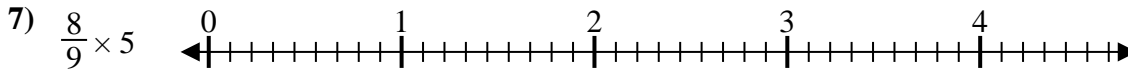
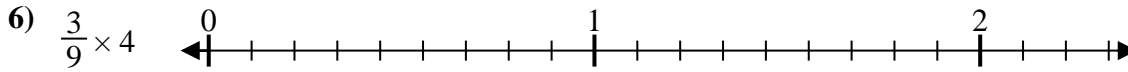
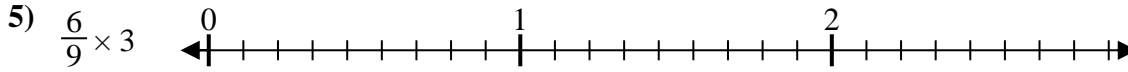
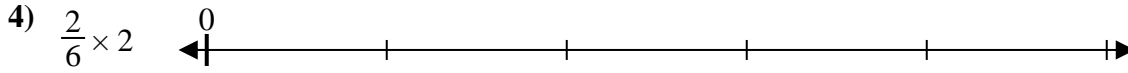
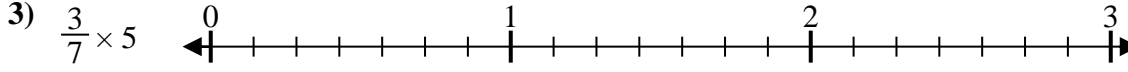
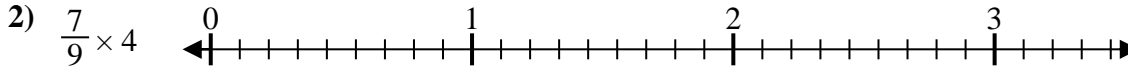
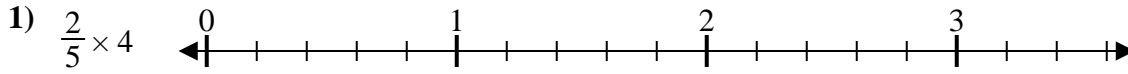




Solve each problem.

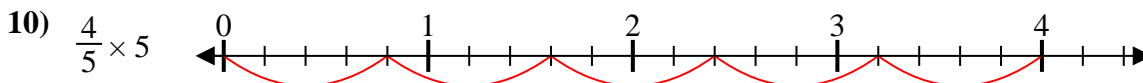
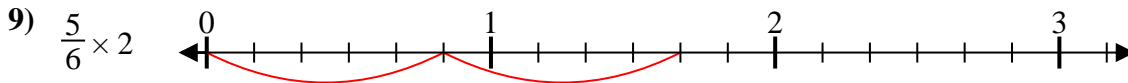
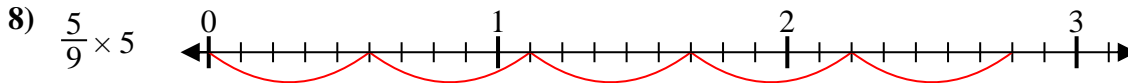
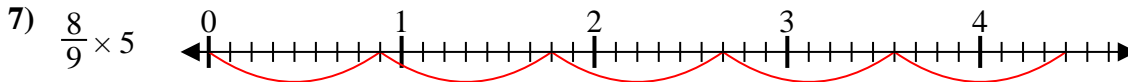
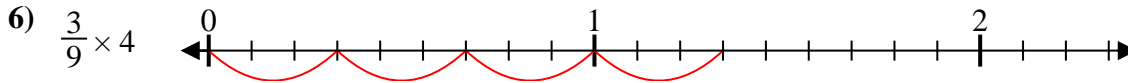
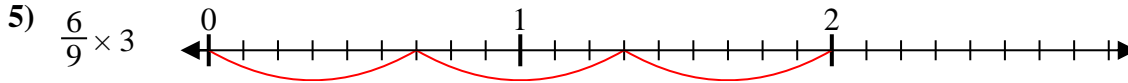
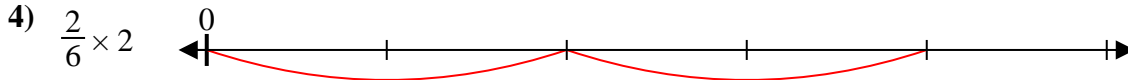
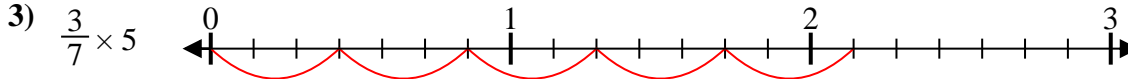
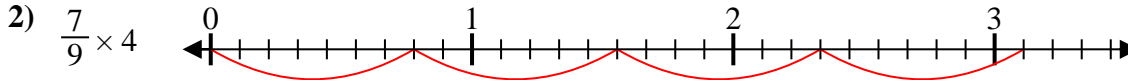
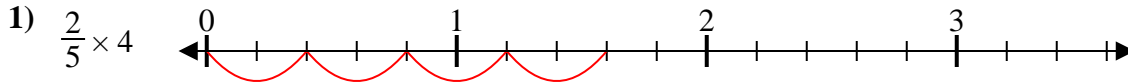


Answers

1. _____
2. _____
3. _____
4. _____
5. _____
6. _____
7. _____
8. _____
9. _____
10. _____



Solve each problem.



Answers

1. $\frac{8}{5} = 1\frac{3}{5}$

2. $\frac{28}{9} = 3\frac{1}{9}$

3. $\frac{15}{7} = 2\frac{1}{7}$

4. $\frac{4}{6}$

5. $\frac{18}{9} = 2$

6. $\frac{12}{9} = 1\frac{3}{9}$

7. $\frac{40}{9} = 4\frac{4}{9}$

8. $\frac{25}{9} = 2\frac{7}{9}$

9. $\frac{10}{6} = 1\frac{4}{6}$

10. $\frac{20}{5} = 4$