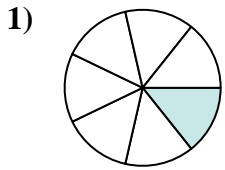





Determine which letter best represents an equivalent fraction.

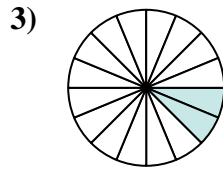
**Answers**



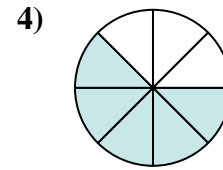
$$\frac{1}{7}$$



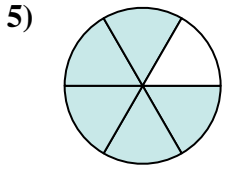
$$\frac{10}{20}$$



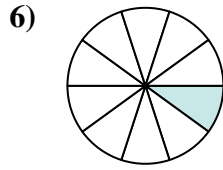
$$\frac{2}{16}$$



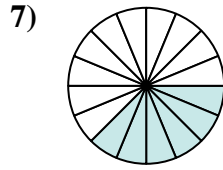
$$\frac{5}{8}$$



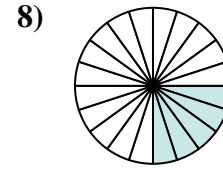
$$\frac{5}{6}$$



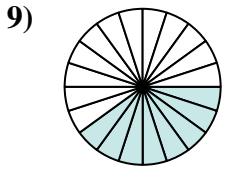
$$\frac{1}{10}$$



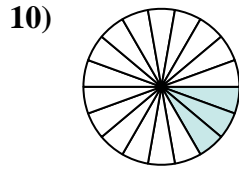
$$\frac{6}{16}$$



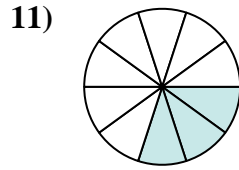
$$\frac{5}{20}$$



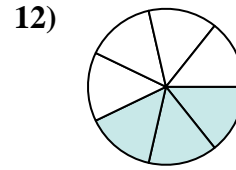
$$\frac{8}{20}$$



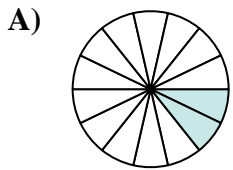
$$\frac{3}{18}$$



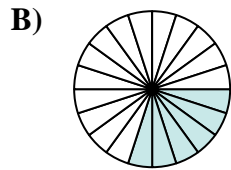
$$\frac{3}{10}$$



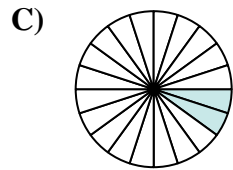
$$\frac{3}{7}$$



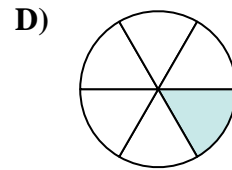
$$\frac{2}{14}$$



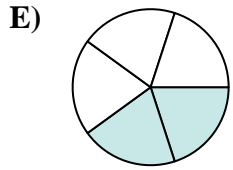
$$\frac{6}{20}$$



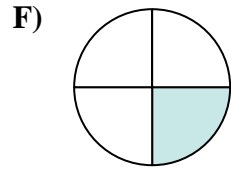
$$\frac{2}{20}$$



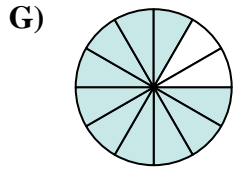
$$\frac{1}{6}$$



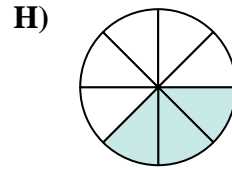
$$\frac{2}{5}$$



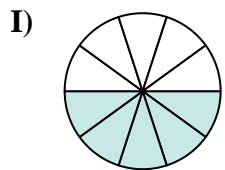
$$\frac{1}{4}$$



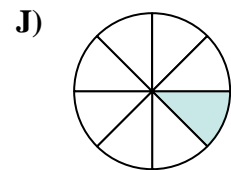
$$\frac{10}{12}$$



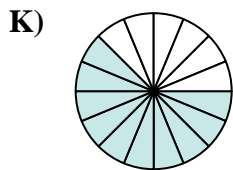
$$\frac{3}{8}$$



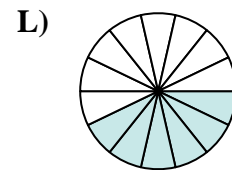
$$\frac{5}{10}$$



$$\frac{1}{8}$$



$$\frac{10}{16}$$

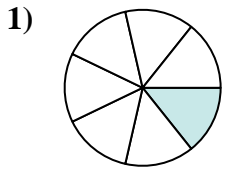


$$\frac{6}{14}$$

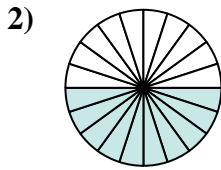
1. \_\_\_\_\_
2. \_\_\_\_\_
3. \_\_\_\_\_
4. \_\_\_\_\_
5. \_\_\_\_\_
6. \_\_\_\_\_
7. \_\_\_\_\_
8. \_\_\_\_\_
9. \_\_\_\_\_
10. \_\_\_\_\_
11. \_\_\_\_\_
12. \_\_\_\_\_



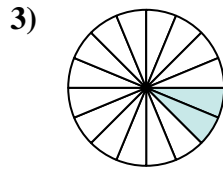
Determine which letter best represents an equivalent fraction.



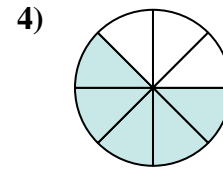
$$\frac{1}{7}$$



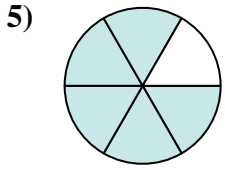
$$\frac{10}{20}$$



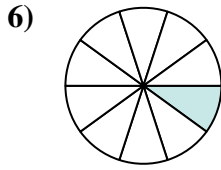
$$\frac{2}{16}$$



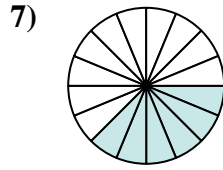
$$\frac{5}{8}$$



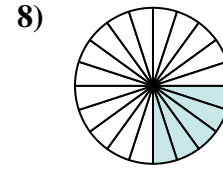
$$\frac{5}{6}$$



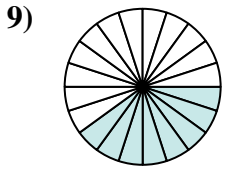
$$\frac{1}{10}$$



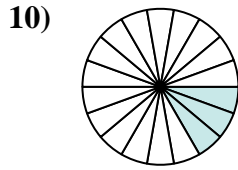
$$\frac{6}{16}$$



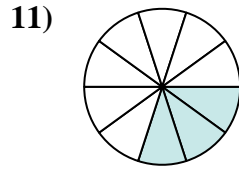
$$\frac{5}{20}$$



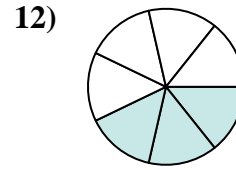
$$\frac{8}{20}$$



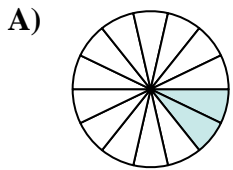
$$\frac{3}{18}$$



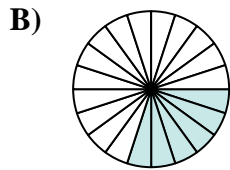
$$\frac{3}{10}$$



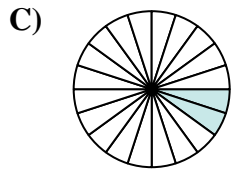
$$\frac{3}{7}$$



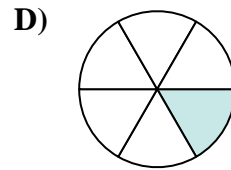
$$\frac{2}{14}$$



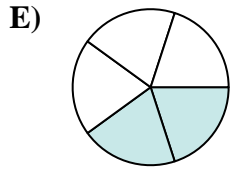
$$\frac{6}{20}$$



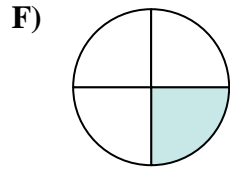
$$\frac{2}{20}$$



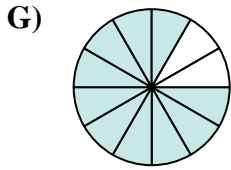
$$\frac{1}{6}$$



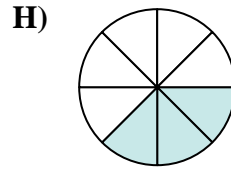
$$\frac{2}{5}$$



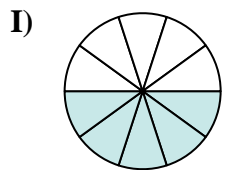
$$\frac{1}{4}$$



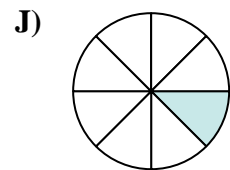
$$\frac{10}{12}$$



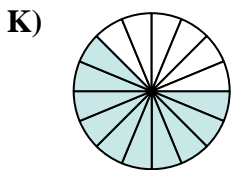
$$\frac{3}{8}$$



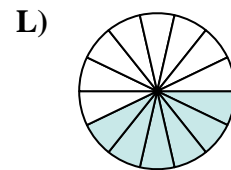
$$\frac{5}{10}$$



$$\frac{1}{8}$$



$$\frac{10}{16}$$



$$\frac{6}{14}$$

**Answers**

1.   **A**  

2.   **I**  

3.   **J**  

4.   **K**  

5.   **G**  

6.   **C**  

7.   **H**  

8.   **F**  

9.   **E**  

10.   **D**  

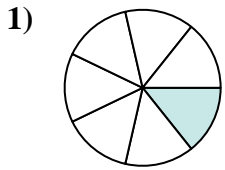
11.   **B**  

12.   **L**




Determine which letter best represents an equivalent fraction.

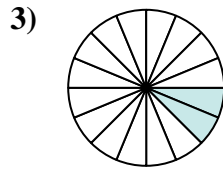
**Answers**



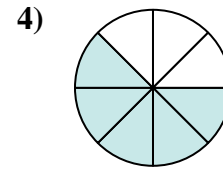
$$\frac{1 \cdot 2}{7 \cdot 2}$$



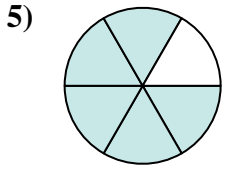
$$\frac{10 \div 2}{20 \div 2}$$



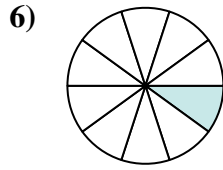
$$\frac{2 \div 2}{16 \div 2}$$



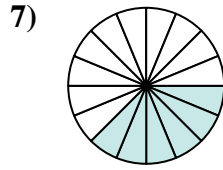
$$\frac{5 \cdot 2}{8 \cdot 2}$$



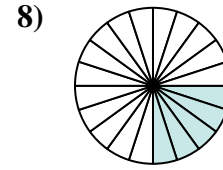
$$\frac{5 \cdot 2}{6 \cdot 2}$$



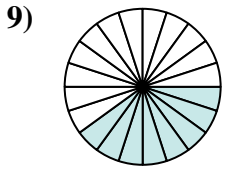
$$\frac{1 \cdot 2}{10 \cdot 2}$$



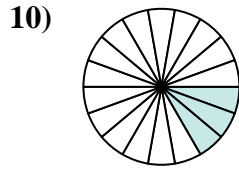
$$\frac{6 \div 2}{16 \div 2}$$



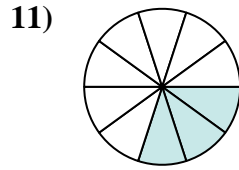
$$\frac{5 \div 5}{20 \div 5}$$



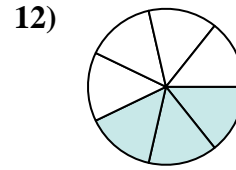
$$\frac{8 \div 4}{20 \div 4}$$



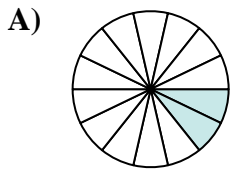
$$\frac{3 \div 3}{18 \div 3}$$



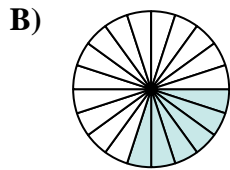
$$\frac{3 \cdot 2}{10 \cdot 2}$$



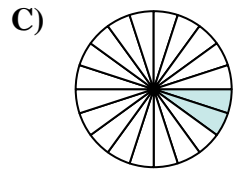
$$\frac{3 \cdot 2}{7 \cdot 2}$$



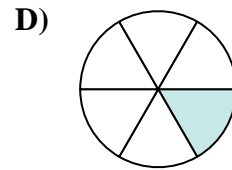
$$\frac{2}{14}$$



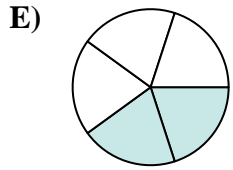
$$\frac{6}{20}$$



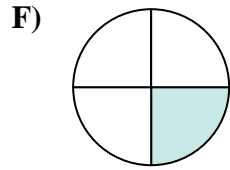
$$\frac{2}{20}$$



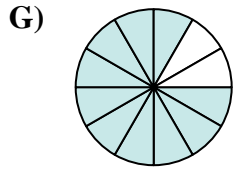
$$\frac{1}{6}$$



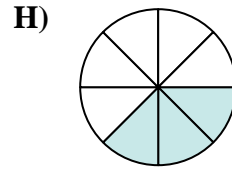
$$\frac{2}{5}$$



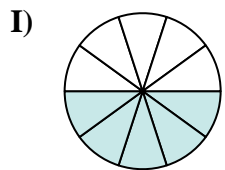
$$\frac{1}{4}$$



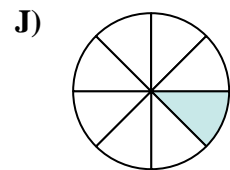
$$\frac{10}{12}$$



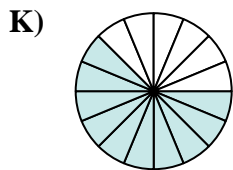
$$\frac{3}{8}$$



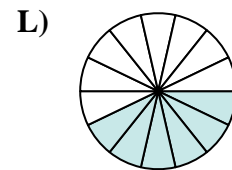
$$\frac{5}{10}$$



$$\frac{1}{8}$$



$$\frac{10}{16}$$



$$\frac{6}{14}$$

1. \_\_\_\_\_
2. \_\_\_\_\_
3. \_\_\_\_\_
4. \_\_\_\_\_
5. \_\_\_\_\_
6. \_\_\_\_\_
7. \_\_\_\_\_
8. \_\_\_\_\_
9. \_\_\_\_\_
10. \_\_\_\_\_
11. \_\_\_\_\_
12. \_\_\_\_\_