





Write the shaded amount as a fraction.

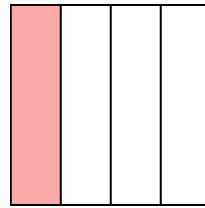
Ex)



1)



2)



Answers

Ex. $\frac{1}{4}$

1. _____

2. _____

3. _____

4. _____

5. _____

6. _____

7. _____

8. _____

9. _____

10. _____

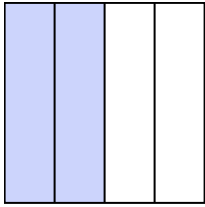
11. _____

12. _____

13. _____

14. _____


3)




4)



5)



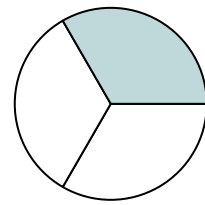
6)




7)




8)



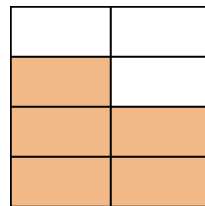
9)




10)




11)



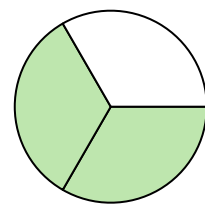
12)



13)



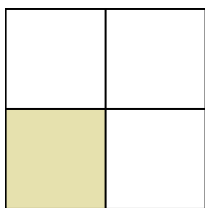
14)






Write the shaded amount as a fraction.

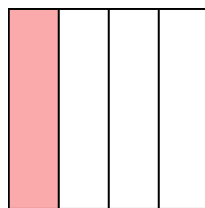
Ex)



1)



2)



Answers

Ex. 1/4

1. 1/2

2. 1/4

3. 2/4

4. 2/5

5. 2/8

6. 6/8

7. 2/2

8. 1/3

9. 3/3

10. 1/2

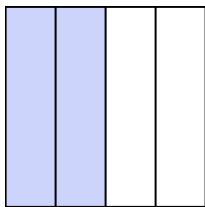
11. 5/8

12. 1/5


13. 3/5

14. 2/3


3)




4)



5)



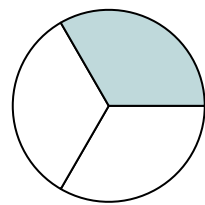
6)




7)




8)



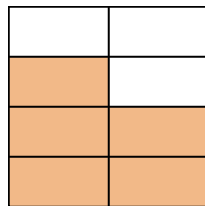
9)




10)




11)



12)



13)



14)

