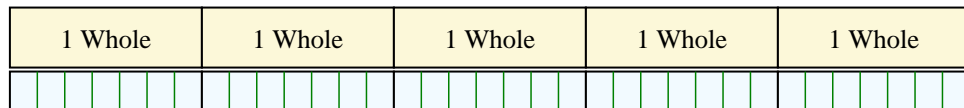




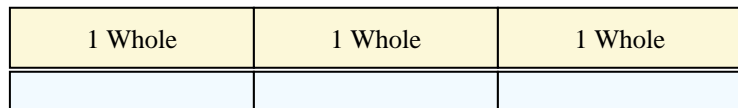
Solve each problem by marking off the fractions. The first is completed for you.

**Answers**

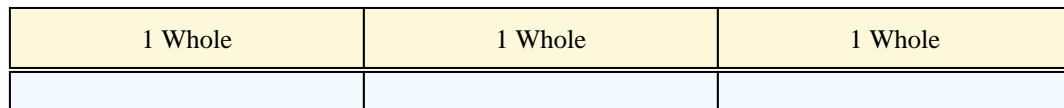
1)  $5 \div \frac{1}{7} = ?$  This is the same as saying: How many  $\frac{1}{7}$  are there in 5 wholes?



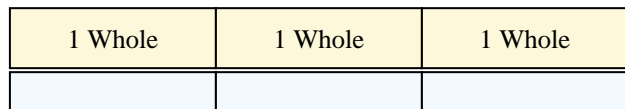
2)  $3 \div \frac{1}{4} =$




3)  $3 \div \frac{1}{6} =$




4)  $3 \div \frac{1}{7} =$




5)  $4 \div \frac{1}{5} =$



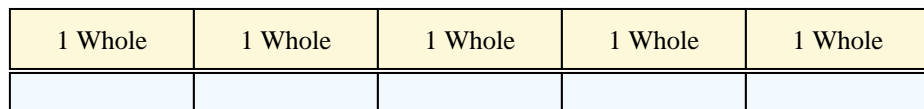
6)  $4 \div \frac{1}{6} =$



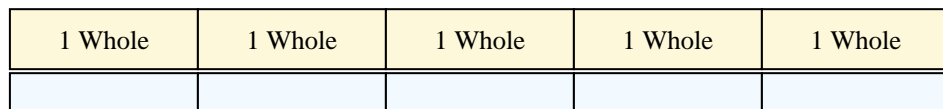
7)  $2 \div \frac{1}{6} =$




8)  $5 \div \frac{1}{3} =$



9)  $5 \div \frac{1}{5} =$



10)  $2 \div \frac{1}{4} =$



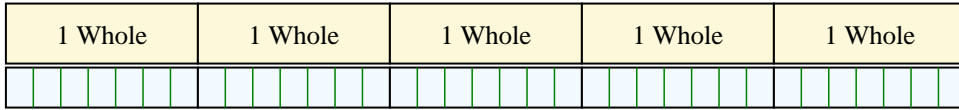
1. \_\_\_\_\_
2. \_\_\_\_\_
3. \_\_\_\_\_
4. \_\_\_\_\_
5. \_\_\_\_\_
6. \_\_\_\_\_
7. \_\_\_\_\_
8. \_\_\_\_\_
9. \_\_\_\_\_
10. \_\_\_\_\_



Solve each problem by marking off the fractions. The first is completed for you.

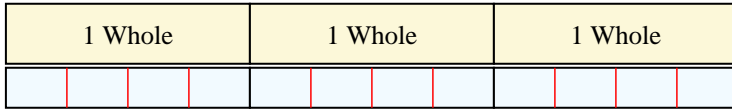
Answers

1)  $5 \div \frac{1}{7} = ?$  This is the same as saying: How many  $\frac{1}{7}$  are there in 5 wholes?



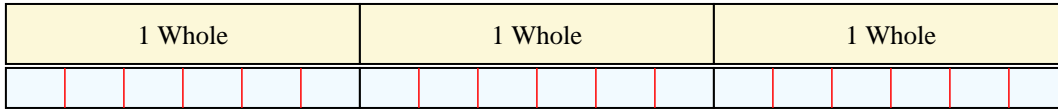
1. 35

2)  $3 \div \frac{1}{4} =$  This is the same as saying: How many  $\frac{1}{4}$  are there in 3 wholes?



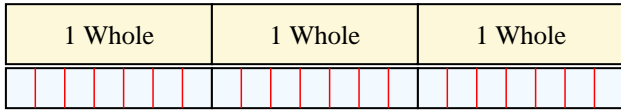
2. 12

3)  $3 \div \frac{1}{6} =$  This is the same as saying: How many  $\frac{1}{6}$  are there in 3 wholes?



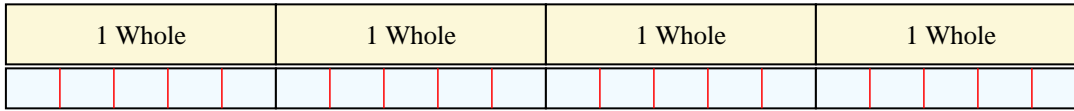
3. 18

4)  $3 \div \frac{1}{7} =$  This is the same as saying: How many  $\frac{1}{7}$  are there in 3 wholes?



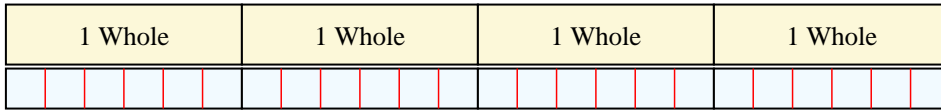
4. 21

5)  $4 \div \frac{1}{5} =$  This is the same as saying: How many  $\frac{1}{5}$  are there in 4 wholes?



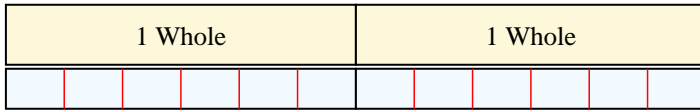
5. 20

6)  $4 \div \frac{1}{6} =$  This is the same as saying: How many  $\frac{1}{6}$  are there in 4 wholes?



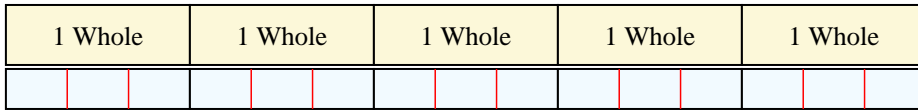
6. 24

7)  $2 \div \frac{1}{6} =$  This is the same as saying: How many  $\frac{1}{6}$  are there in 2 wholes?



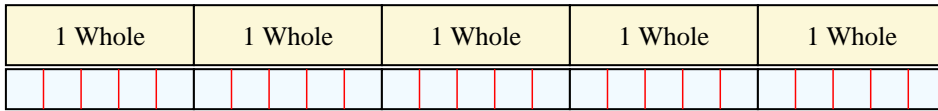
7. 12

8)  $5 \div \frac{1}{3} =$  This is the same as saying: How many  $\frac{1}{3}$  are there in 5 wholes?



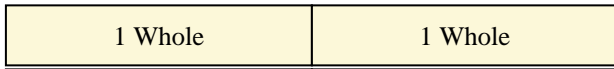
8. 15

9)  $5 \div \frac{1}{5} =$  This is the same as saying: How many  $\frac{1}{5}$  are there in 5 wholes?



9. 25

10)  $2 \div \frac{1}{4} =$  This is the same as saying: How many  $\frac{1}{4}$  are there in 2 wholes?



10. 8



Solve each problem by marking off the fractions. The first is completed for you.

**Answers**

1)  $6 \div \frac{1}{2} = ?$  This is the same as saying: How many  $\frac{1}{2}$  are there in 6 wholes?

1 Whole	1 Whole	1 Whole	1 Whole	1 Whole	1 Whole
<input type="checkbox"/>	<input type="checkbox"/>	<input type="checkbox"/>	<input type="checkbox"/>	<input type="checkbox"/>	<input type="checkbox"/>

2)  $5 \div \frac{1}{4} =$

1 Whole	1 Whole	1 Whole	1 Whole	1 Whole
<input type="checkbox"/>	<input type="checkbox"/>	<input type="checkbox"/>	<input type="checkbox"/>	<input type="checkbox"/>

3)  $3 \div \frac{1}{3} =$

1 Whole	1 Whole	1 Whole
<input type="checkbox"/>	<input type="checkbox"/>	<input type="checkbox"/>

4)  $5 \div \frac{1}{3} =$

1 Whole	1 Whole	1 Whole	1 Whole	1 Whole
<input type="checkbox"/>	<input type="checkbox"/>	<input type="checkbox"/>	<input type="checkbox"/>	<input type="checkbox"/>

5)  $2 \div \frac{1}{6} =$

1 Whole	1 Whole
<input type="checkbox"/>	<input type="checkbox"/>

6)  $4 \div \frac{1}{4} =$

1 Whole	1 Whole	1 Whole	1 Whole
<input type="checkbox"/>	<input type="checkbox"/>	<input type="checkbox"/>	<input type="checkbox"/>

7)  $6 \div \frac{1}{5} =$

1 Whole	1 Whole	1 Whole	1 Whole	1 Whole	1 Whole
<input type="checkbox"/>	<input type="checkbox"/>	<input type="checkbox"/>	<input type="checkbox"/>	<input type="checkbox"/>	<input type="checkbox"/>

8)  $6 \div \frac{1}{6} =$

1 Whole	1 Whole	1 Whole	1 Whole	1 Whole	1 Whole
<input type="checkbox"/>	<input type="checkbox"/>	<input type="checkbox"/>	<input type="checkbox"/>	<input type="checkbox"/>	<input type="checkbox"/>

9)  $3 \div \frac{1}{7} =$

1 Whole	1 Whole	1 Whole
<input type="checkbox"/>	<input type="checkbox"/>	<input type="checkbox"/>

10)  $3 \div \frac{1}{6} =$

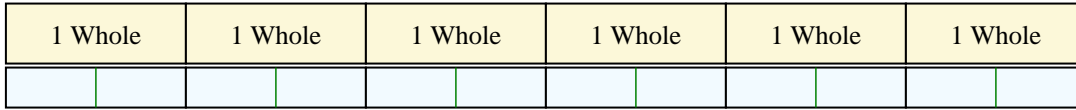
1 Whole	1 Whole	1 Whole
<input type="checkbox"/>	<input type="checkbox"/>	<input type="checkbox"/>

1. \_\_\_\_\_
2. \_\_\_\_\_
3. \_\_\_\_\_
4. \_\_\_\_\_
5. \_\_\_\_\_
6. \_\_\_\_\_
7. \_\_\_\_\_
8. \_\_\_\_\_
9. \_\_\_\_\_
10. \_\_\_\_\_

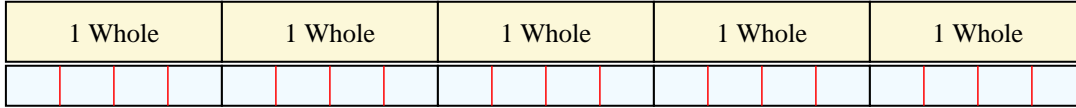


Solve each problem by marking off the fractions. The first is completed for you.

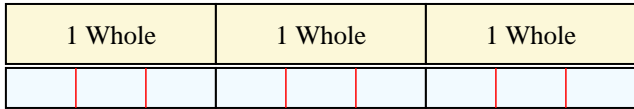
1)  $6 \div \frac{1}{2} = ?$  This is the same as saying: How many  $\frac{1}{2}$  are there in 6 wholes?



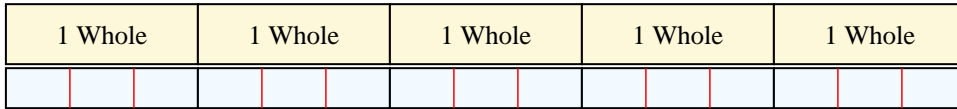
2)  $5 \div \frac{1}{4} =$  This is the same as saying: How many  $\frac{1}{4}$  are there in 5 wholes?



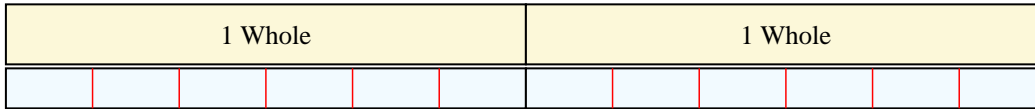
3)  $3 \div \frac{1}{3} =$  This is the same as saying: How many  $\frac{1}{3}$  are there in 3 wholes?




4)  $5 \div \frac{1}{3} =$  This is the same as saying: How many  $\frac{1}{3}$  are there in 5 wholes?



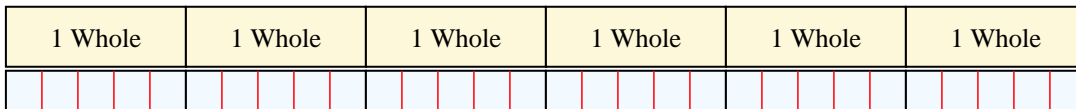
5)  $2 \div \frac{1}{6} =$  This is the same as saying: How many  $\frac{1}{6}$  are there in 2 wholes?




6)  $4 \div \frac{1}{4} =$  This is the same as saying: How many  $\frac{1}{4}$  are there in 4 wholes?



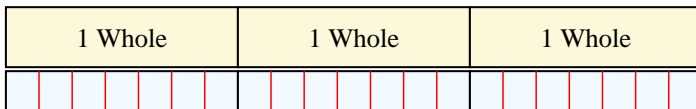
7)  $6 \div \frac{1}{5} =$  This is the same as saying: How many  $\frac{1}{5}$  are there in 6 wholes?



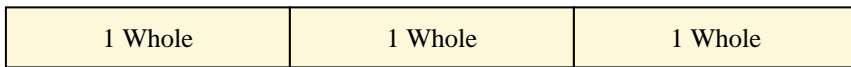
8)  $6 \div \frac{1}{6} =$  This is the same as saying: How many  $\frac{1}{6}$  are there in 6 wholes?



9)  $3 \div \frac{1}{7} =$  This is the same as saying: How many  $\frac{1}{7}$  are there in 3 wholes?



10)  $3 \div \frac{1}{6} =$  This is the same as saying: How many  $\frac{1}{6}$  are there in 3 wholes?



Answers

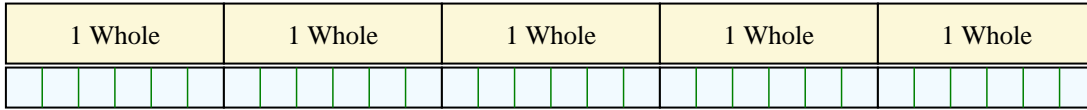
1. 12
2. 20
3. 9
4. 15
5. 12
6. 16
7. 30
8. 36
9. 21
10. 18



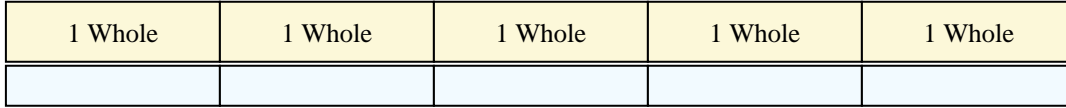
Solve each problem by marking off the fractions. The first is completed for you.

**Answers**


1)  $5 \div \frac{1}{6} = ?$  This is the same as saying: How many  $\frac{1}{6}$  are there in 5 wholes?



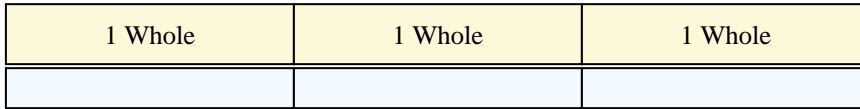
2)  $5 \div \frac{1}{2} =$



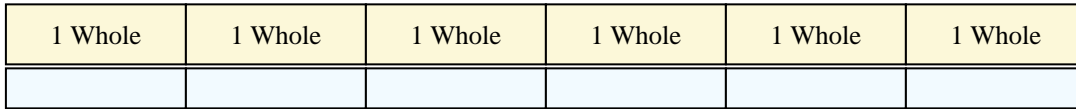
3)  $4 \div \frac{1}{4} =$



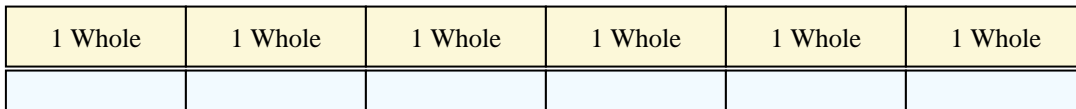
4)  $3 \div \frac{1}{7} =$



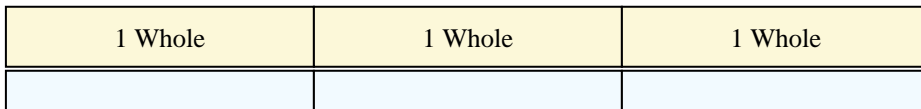
5)  $6 \div \frac{1}{6} =$



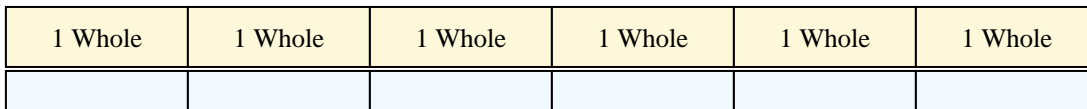
6)  $6 \div \frac{1}{2} =$



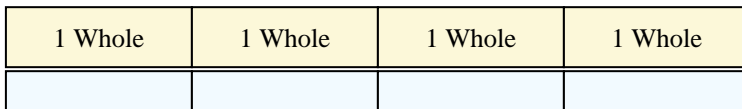
7)  $3 \div \frac{1}{3} =$



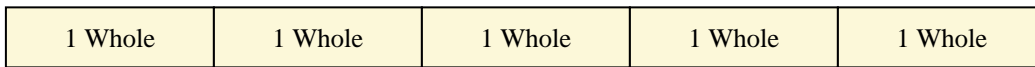
8)  $6 \div \frac{1}{7} =$



9)  $4 \div \frac{1}{2} =$



10)  $5 \div \frac{1}{3} =$



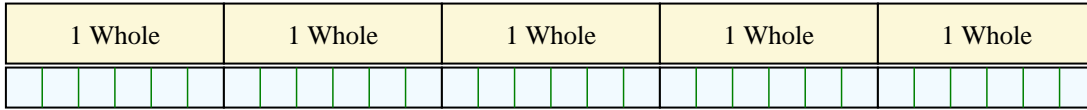
1. \_\_\_\_\_
2. \_\_\_\_\_
3. \_\_\_\_\_
4. \_\_\_\_\_
5. \_\_\_\_\_
6. \_\_\_\_\_
7. \_\_\_\_\_
8. \_\_\_\_\_
9. \_\_\_\_\_
10. \_\_\_\_\_



Solve each problem by marking off the fractions. The first is completed for you.

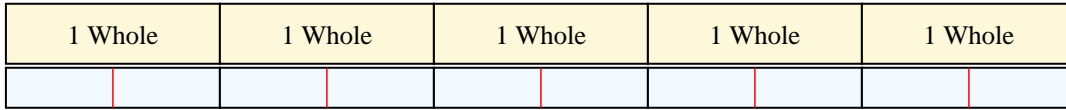
**Answers**

1)  $5 \div \frac{1}{6} = ?$  This is the same as saying: How many  $\frac{1}{6}$  are there in 5 wholes?




1. 30

2)  $5 \div \frac{1}{2} =$  This is the same as saying: How many  $\frac{1}{2}$  are there in 5 wholes?



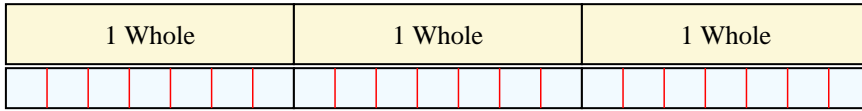
2. 10

3)  $4 \div \frac{1}{4} =$  This is the same as saying: How many  $\frac{1}{4}$  are there in 4 wholes?



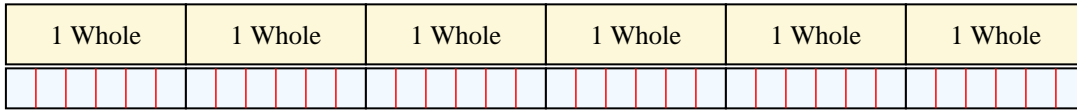
3. 16

4)  $3 \div \frac{1}{7} =$  This is the same as saying: How many  $\frac{1}{7}$  are there in 3 wholes?



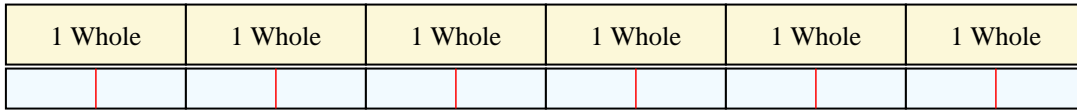
4. 21

5)  $6 \div \frac{1}{6} =$  This is the same as saying: How many  $\frac{1}{6}$  are there in 6 wholes?



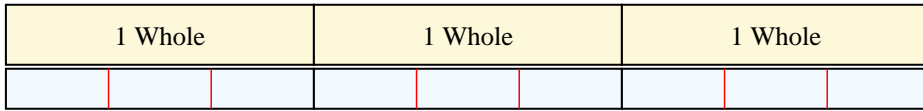
5. 36

6)  $6 \div \frac{1}{2} =$  This is the same as saying: How many  $\frac{1}{2}$  are there in 6 wholes?



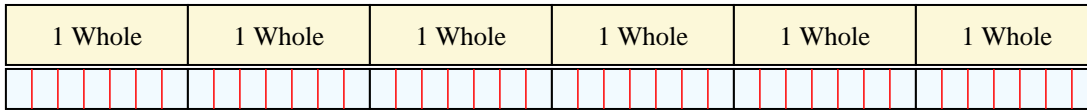
6. 12

7)  $3 \div \frac{1}{3} =$  This is the same as saying: How many  $\frac{1}{3}$  are there in 3 wholes?




7. 9

8)  $6 \div \frac{1}{7} =$  This is the same as saying: How many  $\frac{1}{7}$  are there in 6 wholes?



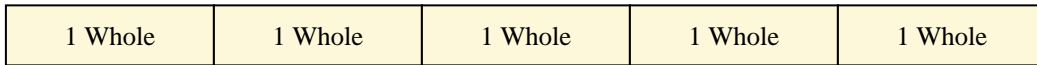
8. 42

9)  $4 \div \frac{1}{2} =$  This is the same as saying: How many  $\frac{1}{2}$  are there in 4 wholes?



9. 8

10)  $5 \div \frac{1}{3} =$  This is the same as saying: How many  $\frac{1}{3}$  are there in 5 wholes?



10. 15



Solve each problem by marking off the fractions. The first is completed for you.

**Answers**

1)  $5 \div \frac{1}{5} = ?$  This is the same as saying: How many  $\frac{1}{5}$  are there in 5 wholes?

1 Whole	1 Whole	1 Whole	1 Whole	1 Whole
<input type="checkbox"/>	<input type="checkbox"/>	<input type="checkbox"/>	<input type="checkbox"/>	<input type="checkbox"/>

2)  $2 \div \frac{1}{3} =$

1 Whole	1 Whole
<input type="checkbox"/>	<input type="checkbox"/>

3)  $2 \div \frac{1}{5} =$

1 Whole	1 Whole
<input type="checkbox"/>	<input type="checkbox"/>

4)  $5 \div \frac{1}{4} =$

1 Whole	1 Whole	1 Whole	1 Whole	1 Whole
<input type="checkbox"/>	<input type="checkbox"/>	<input type="checkbox"/>	<input type="checkbox"/>	<input type="checkbox"/>

5)  $5 \div \frac{1}{3} =$

1 Whole	1 Whole	1 Whole	1 Whole	1 Whole
<input type="checkbox"/>	<input type="checkbox"/>	<input type="checkbox"/>	<input type="checkbox"/>	<input type="checkbox"/>

6)  $5 \div \frac{1}{7} =$

1 Whole	1 Whole	1 Whole	1 Whole	1 Whole
<input type="checkbox"/>	<input type="checkbox"/>	<input type="checkbox"/>	<input type="checkbox"/>	<input type="checkbox"/>

7)  $3 \div \frac{1}{6} =$

1 Whole	1 Whole	1 Whole
<input type="checkbox"/>	<input type="checkbox"/>	<input type="checkbox"/>

8)  $2 \div \frac{1}{4} =$

1 Whole	1 Whole
<input type="checkbox"/>	<input type="checkbox"/>

9)  $6 \div \frac{1}{6} =$

1 Whole	1 Whole	1 Whole	1 Whole	1 Whole	1 Whole
<input type="checkbox"/>	<input type="checkbox"/>	<input type="checkbox"/>	<input type="checkbox"/>	<input type="checkbox"/>	<input type="checkbox"/>

10)  $6 \div \frac{1}{3} =$

1 Whole	1 Whole	1 Whole	1 Whole	1 Whole	1 Whole
<input type="checkbox"/>	<input type="checkbox"/>	<input type="checkbox"/>	<input type="checkbox"/>	<input type="checkbox"/>	<input type="checkbox"/>

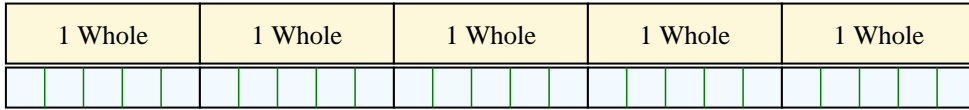
1. \_\_\_\_\_
2. \_\_\_\_\_
3. \_\_\_\_\_
4. \_\_\_\_\_
5. \_\_\_\_\_
6. \_\_\_\_\_
7. \_\_\_\_\_
8. \_\_\_\_\_
9. \_\_\_\_\_
10. \_\_\_\_\_



Solve each problem by marking off the fractions. The first is completed for you.


Answers

1)  $5 \div \frac{1}{5} = ?$  This is the same as saying: How many  $\frac{1}{5}$  are there in 5 wholes?



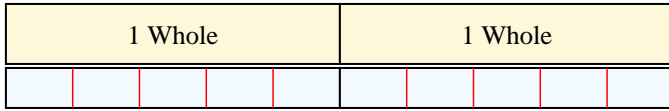
1. 25

2)  $2 \div \frac{1}{3} =$  This is the same as saying: How many  $\frac{1}{3}$  are there in 2 wholes?



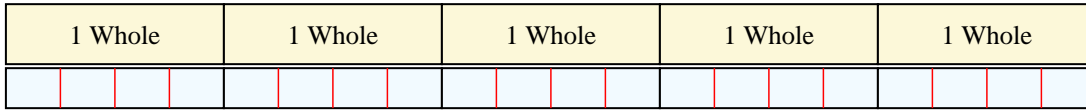
2. 6

3)  $2 \div \frac{1}{5} =$  This is the same as saying: How many  $\frac{1}{5}$  are there in 2 wholes?



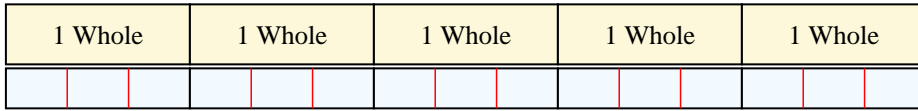
3. 10

4)  $5 \div \frac{1}{4} =$  This is the same as saying: How many  $\frac{1}{4}$  are there in 5 wholes?



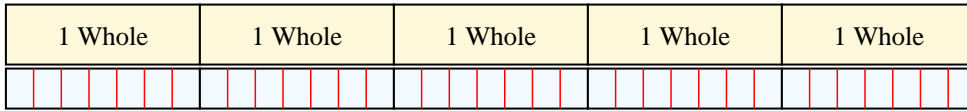
4. 20

5)  $5 \div \frac{1}{3} =$  This is the same as saying: How many  $\frac{1}{3}$  are there in 5 wholes?



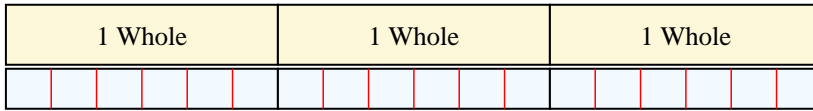
5. 15

6)  $5 \div \frac{1}{7} =$  This is the same as saying: How many  $\frac{1}{7}$  are there in 5 wholes?




6. 35

7)  $3 \div \frac{1}{6} =$  This is the same as saying: How many  $\frac{1}{6}$  are there in 3 wholes?



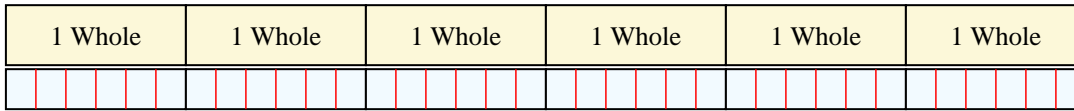
7. 18

8)  $2 \div \frac{1}{4} =$  This is the same as saying: How many  $\frac{1}{4}$  are there in 2 wholes?



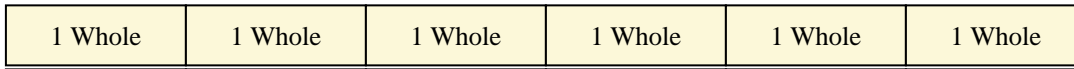
8. 8

9)  $6 \div \frac{1}{6} =$  This is the same as saying: How many  $\frac{1}{6}$  are there in 6 wholes?



9. 36

10)  $6 \div \frac{1}{3} =$  This is the same as saying: How many  $\frac{1}{3}$  are there in 6 wholes?



10. 18

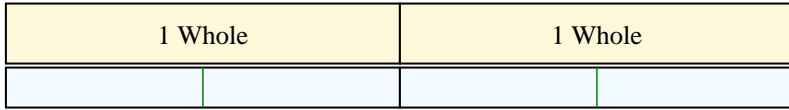




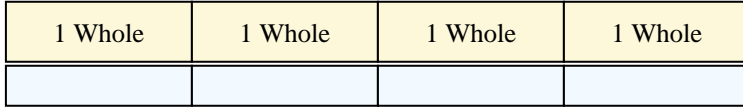
Solve each problem by marking off the fractions. The first is completed for you.

**Answers**


1)  $2 \div \frac{1}{2} = ?$  This is the same as saying: How many  $\frac{1}{2}$  are there in 2 wholes?



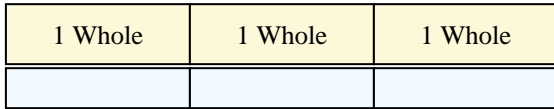
2)  $4 \div \frac{1}{4} =$



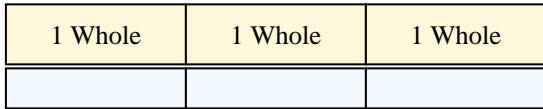
3)  $4 \div \frac{1}{7} =$



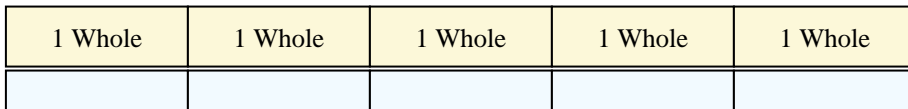
4)  $3 \div \frac{1}{3} =$




5)  $3 \div \frac{1}{4} =$




6)  $5 \div \frac{1}{2} =$



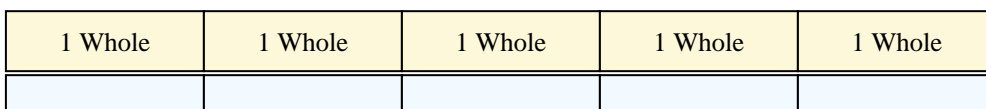
7)  $2 \div \frac{1}{6} =$




8)  $2 \div \frac{1}{4} =$



9)  $5 \div \frac{1}{5} =$



10)  $2 \div \frac{1}{3} =$



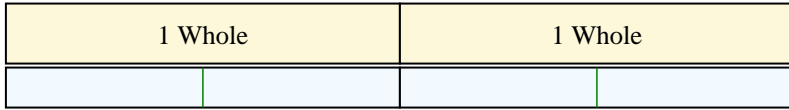
1. \_\_\_\_\_
2. \_\_\_\_\_
3. \_\_\_\_\_
4. \_\_\_\_\_
5. \_\_\_\_\_
6. \_\_\_\_\_
7. \_\_\_\_\_
8. \_\_\_\_\_
9. \_\_\_\_\_
10. \_\_\_\_\_



Solve each problem by marking off the fractions. The first is completed for you.


**Answers**

1)  $2 \div \frac{1}{2} = ?$  This is the same as saying: How many  $\frac{1}{2}$  are there in 2 wholes?



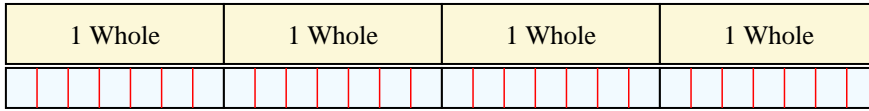
1. 4

2)  $4 \div \frac{1}{4} =$  This is the same as saying: How many  $\frac{1}{4}$  are there in 4 wholes?



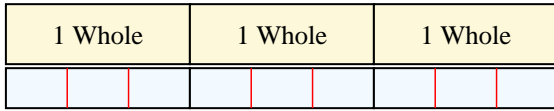
2. 16

3)  $4 \div \frac{1}{7} =$  This is the same as saying: How many  $\frac{1}{7}$  are there in 4 wholes?



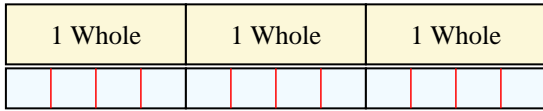
3. 28

4)  $3 \div \frac{1}{3} =$  This is the same as saying: How many  $\frac{1}{3}$  are there in 3 wholes?



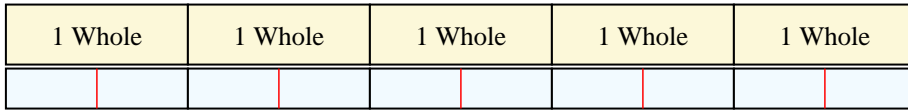
4. 9

5)  $3 \div \frac{1}{4} =$  This is the same as saying: How many  $\frac{1}{4}$  are there in 3 wholes?



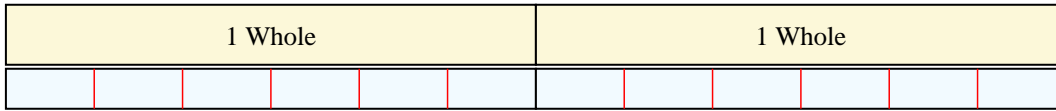
5. 12

6)  $5 \div \frac{1}{2} =$  This is the same as saying: How many  $\frac{1}{2}$  are there in 5 wholes?




6. 10

7)  $2 \div \frac{1}{6} =$  This is the same as saying: How many  $\frac{1}{6}$  are there in 2 wholes?



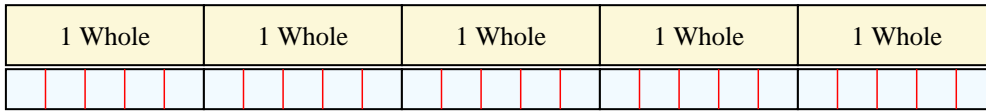
7. 12

8)  $2 \div \frac{1}{4} =$  This is the same as saying: How many  $\frac{1}{4}$  are there in 2 wholes?



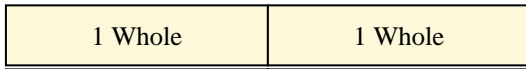
8. 8

9)  $5 \div \frac{1}{5} =$  This is the same as saying: How many  $\frac{1}{5}$  are there in 5 wholes?



9. 25

10)  $2 \div \frac{1}{3} =$  This is the same as saying: How many  $\frac{1}{3}$  are there in 2 wholes?




10. 6



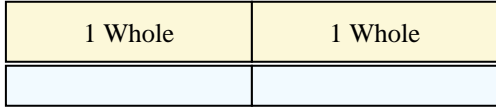
Solve each problem by marking off the fractions. The first is completed for you.

**Answers**

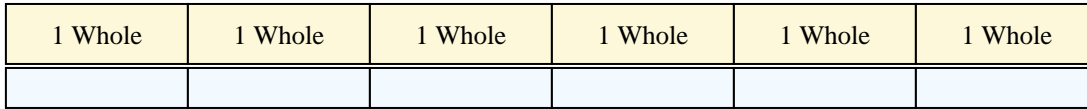
1)  $6 \div \frac{1}{5} = ?$  This is the same as saying: How many  $\frac{1}{5}$  are there in 6 wholes?



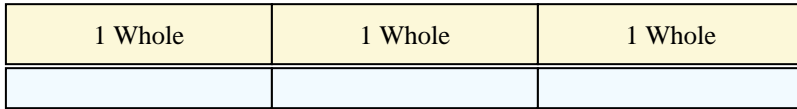
2)  $2 \div \frac{1}{4} =$



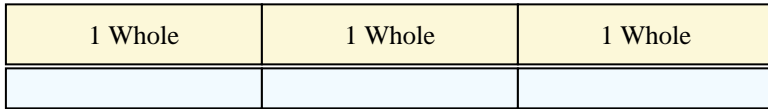
3)  $6 \div \frac{1}{6} =$



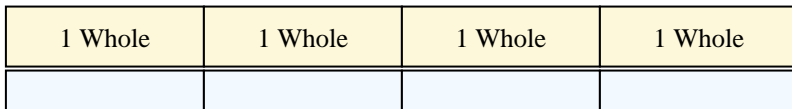
4)  $3 \div \frac{1}{7} =$




5)  $3 \div \frac{1}{3} =$




6)  $4 \div \frac{1}{4} =$



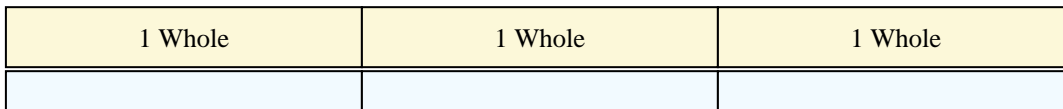
7)  $4 \div \frac{1}{2} =$



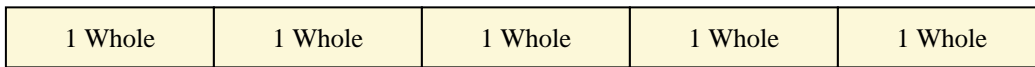
8)  $2 \div \frac{1}{5} =$



9)  $3 \div \frac{1}{2} =$



10)  $5 \div \frac{1}{6} =$




1. \_\_\_\_\_
2. \_\_\_\_\_
3. \_\_\_\_\_
4. \_\_\_\_\_
5. \_\_\_\_\_
6. \_\_\_\_\_
7. \_\_\_\_\_
8. \_\_\_\_\_
9. \_\_\_\_\_
10. \_\_\_\_\_



Solve each problem by marking off the fractions. The first is completed for you.


**Answers**

1)  $6 \div \frac{1}{5} = ?$  This is the same as saying: How many  $\frac{1}{5}$  are there in 6 wholes?



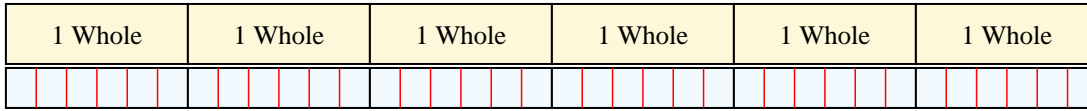
1. 30

2)  $2 \div \frac{1}{4} =$  This is the same as saying: How many  $\frac{1}{4}$  are there in 2 wholes?



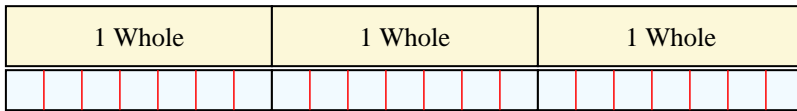
2. 8

3)  $6 \div \frac{1}{6} =$  This is the same as saying: How many  $\frac{1}{6}$  are there in 6 wholes?



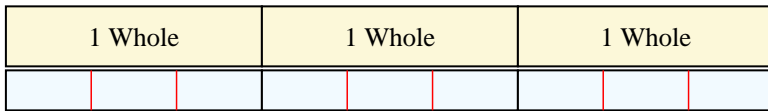
3. 36

4)  $3 \div \frac{1}{7} =$  This is the same as saying: How many  $\frac{1}{7}$  are there in 3 wholes?




4. 21

5)  $3 \div \frac{1}{3} =$  This is the same as saying: How many  $\frac{1}{3}$  are there in 3 wholes?




5. 9

6)  $4 \div \frac{1}{4} =$  This is the same as saying: How many  $\frac{1}{4}$  are there in 4 wholes?




6. 16

7)  $4 \div \frac{1}{2} =$  This is the same as saying: How many  $\frac{1}{2}$  are there in 4 wholes?



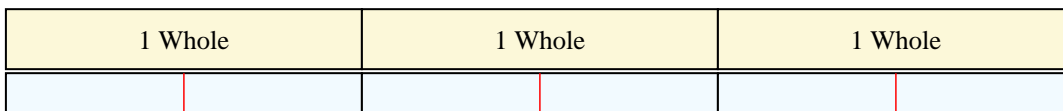
7. 8

8)  $2 \div \frac{1}{5} =$  This is the same as saying: How many  $\frac{1}{5}$  are there in 2 wholes?



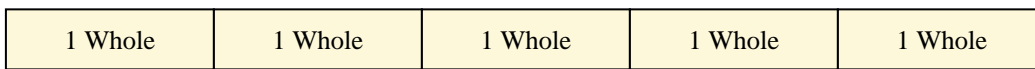
8. 10

9)  $3 \div \frac{1}{2} =$  This is the same as saying: How many  $\frac{1}{2}$  are there in 3 wholes?



9. 6

10)  $5 \div \frac{1}{6} =$  This is the same as saying: How many  $\frac{1}{6}$  are there in 5 wholes?



10. 30



Solve each problem by marking off the fractions. The first is completed for you.

**Answers**

1)  $5 \div \frac{1}{3} = ?$  This is the same as saying: How many  $\frac{1}{3}$  are there in 5 wholes?

1 Whole			1 Whole			1 Whole			1 Whole			1 Whole		

2)  $4 \div \frac{1}{3} =$

1 Whole			1 Whole			1 Whole			1 Whole		

3)  $5 \div \frac{1}{4} =$

1 Whole		1 Whole		1 Whole		1 Whole		1 Whole	

4)  $3 \div \frac{1}{7} =$

1 Whole			1 Whole			1 Whole		

5)  $2 \div \frac{1}{3} =$

1 Whole			1 Whole		

6)  $5 \div \frac{1}{7} =$

1 Whole		1 Whole		1 Whole		1 Whole		1 Whole	

7)  $6 \div \frac{1}{6} =$

1 Whole	1 Whole	1 Whole	1 Whole	1 Whole	1 Whole

8)  $4 \div \frac{1}{7} =$

1 Whole		1 Whole		1 Whole		1 Whole	

9)  $3 \div \frac{1}{2} =$

1 Whole		1 Whole		1 Whole	

10)  $5 \div \frac{1}{5} =$

1 Whole		1 Whole		1 Whole		1 Whole		1 Whole	

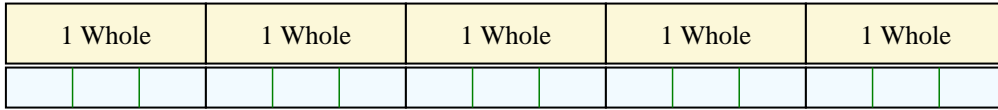
1. \_\_\_\_\_
2. \_\_\_\_\_
3. \_\_\_\_\_
4. \_\_\_\_\_
5. \_\_\_\_\_
6. \_\_\_\_\_
7. \_\_\_\_\_
8. \_\_\_\_\_
9. \_\_\_\_\_
10. \_\_\_\_\_



Solve each problem by marking off the fractions. The first is completed for you.

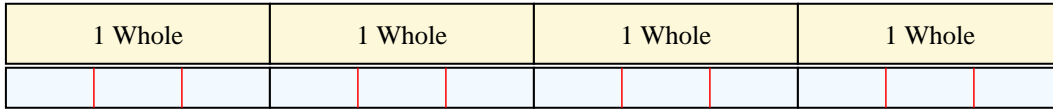
Answers

1)  $5 \div \frac{1}{3} = ?$  This is the same as saying: How many  $\frac{1}{3}$  are there in 5 wholes?



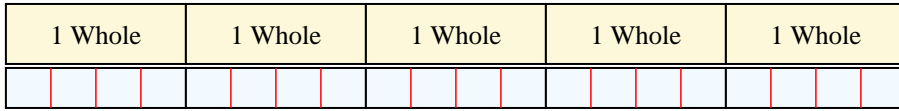
1. 15

2)  $4 \div \frac{1}{3} =$  This is the same as saying: How many  $\frac{1}{3}$  are there in 4 wholes?



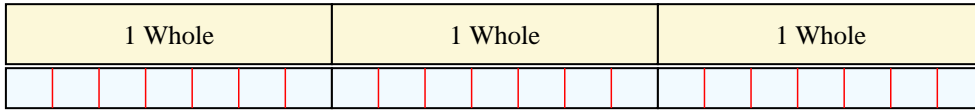
2. 12

3)  $5 \div \frac{1}{4} =$  This is the same as saying: How many  $\frac{1}{4}$  are there in 5 wholes?




3. 20

4)  $3 \div \frac{1}{7} =$  This is the same as saying: How many  $\frac{1}{7}$  are there in 3 wholes?



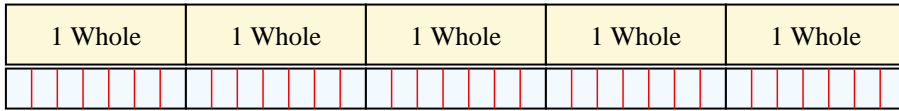
4. 21

5)  $2 \div \frac{1}{3} =$  This is the same as saying: How many  $\frac{1}{3}$  are there in 2 wholes?



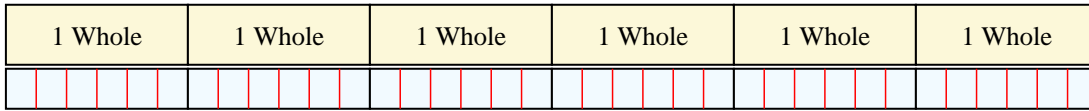
5. 6

6)  $5 \div \frac{1}{7} =$  This is the same as saying: How many  $\frac{1}{7}$  are there in 5 wholes?



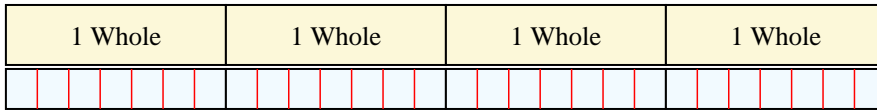
6. 35

7)  $6 \div \frac{1}{6} =$  This is the same as saying: How many  $\frac{1}{6}$  are there in 6 wholes?



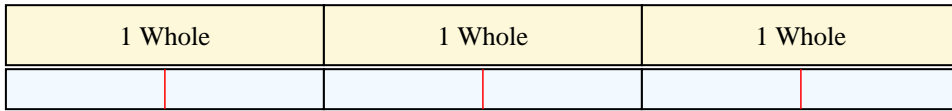
7. 36

8)  $4 \div \frac{1}{7} =$  This is the same as saying: How many  $\frac{1}{7}$  are there in 4 wholes?



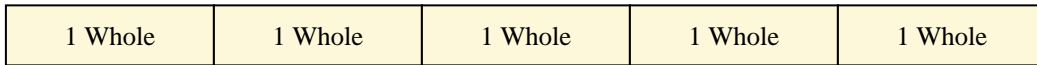
8. 28

9)  $3 \div \frac{1}{2} =$  This is the same as saying: How many  $\frac{1}{2}$  are there in 3 wholes?



9. 6

10)  $5 \div \frac{1}{5} =$  This is the same as saying: How many  $\frac{1}{5}$  are there in 5 wholes?



10. 25



Solve each problem by marking off the fractions. The first is completed for you.

**Answers**

1)  $3 \div \frac{1}{2} = ?$  This is the same as saying: How many  $\frac{1}{2}$  are there in 3 wholes?

1 Whole		1 Whole		1 Whole	
<input checked="" type="checkbox"/>	<input checked="" type="checkbox"/>	<input checked="" type="checkbox"/>	<input checked="" type="checkbox"/>	<input checked="" type="checkbox"/>	<input checked="" type="checkbox"/>

2)  $4 \div \frac{1}{2} =$

1 Whole	1 Whole	1 Whole	1 Whole
<input type="checkbox"/>	<input type="checkbox"/>	<input type="checkbox"/>	<input type="checkbox"/>

3)  $4 \div \frac{1}{7} =$

1 Whole	1 Whole	1 Whole	1 Whole
<input type="checkbox"/>	<input type="checkbox"/>	<input type="checkbox"/>	<input type="checkbox"/>

4)  $2 \div \frac{1}{3} =$

1 Whole		1 Whole	
<input type="checkbox"/>	<input type="checkbox"/>	<input type="checkbox"/>	<input type="checkbox"/>

5)  $4 \div \frac{1}{5} =$

1 Whole	1 Whole	1 Whole	1 Whole
<input type="checkbox"/>	<input type="checkbox"/>	<input type="checkbox"/>	<input type="checkbox"/>

6)  $6 \div \frac{1}{5} =$

1 Whole	1 Whole	1 Whole	1 Whole	1 Whole	1 Whole
<input type="checkbox"/>	<input type="checkbox"/>	<input type="checkbox"/>	<input type="checkbox"/>	<input type="checkbox"/>	<input type="checkbox"/>

7)  $5 \div \frac{1}{6} =$

1 Whole	1 Whole	1 Whole	1 Whole	1 Whole
<input type="checkbox"/>	<input type="checkbox"/>	<input type="checkbox"/>	<input type="checkbox"/>	<input type="checkbox"/>

8)  $2 \div \frac{1}{4} =$

1 Whole		1 Whole	
<input type="checkbox"/>	<input type="checkbox"/>	<input type="checkbox"/>	<input type="checkbox"/>

9)  $5 \div \frac{1}{5} =$

1 Whole	1 Whole	1 Whole	1 Whole	1 Whole
<input type="checkbox"/>	<input type="checkbox"/>	<input type="checkbox"/>	<input type="checkbox"/>	<input type="checkbox"/>

10)  $6 \div \frac{1}{6} =$

1 Whole	1 Whole	1 Whole	1 Whole	1 Whole	1 Whole
<input type="checkbox"/>	<input type="checkbox"/>	<input type="checkbox"/>	<input type="checkbox"/>	<input type="checkbox"/>	<input type="checkbox"/>

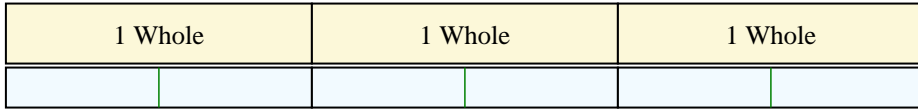
1. \_\_\_\_\_
2. \_\_\_\_\_
3. \_\_\_\_\_
4. \_\_\_\_\_
5. \_\_\_\_\_
6. \_\_\_\_\_
7. \_\_\_\_\_
8. \_\_\_\_\_
9. \_\_\_\_\_
10. \_\_\_\_\_



Solve each problem by marking off the fractions. The first is completed for you.

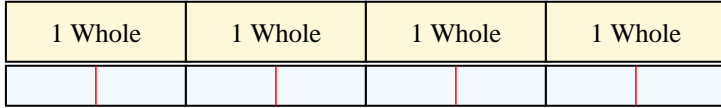
**Answers**

1)  $3 \div \frac{1}{2} = ?$  This is the same as saying: How many  $\frac{1}{2}$  are there in 3 wholes?



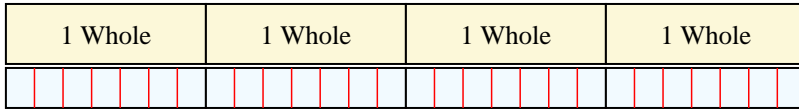
1. 6

2)  $4 \div \frac{1}{2} =$  This is the same as saying: How many  $\frac{1}{2}$  are there in 4 wholes?




2. 8

3)  $4 \div \frac{1}{7} =$  This is the same as saying: How many  $\frac{1}{7}$  are there in 4 wholes?



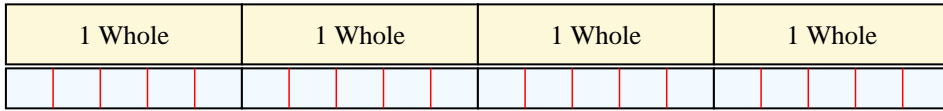
3. 28

4)  $2 \div \frac{1}{3} =$  This is the same as saying: How many  $\frac{1}{3}$  are there in 2 wholes?



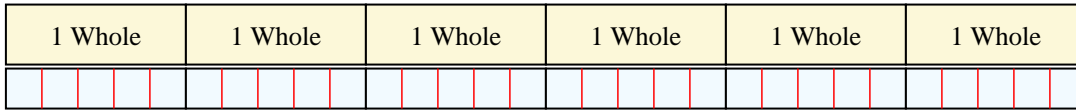
4. 6

5)  $4 \div \frac{1}{5} =$  This is the same as saying: How many  $\frac{1}{5}$  are there in 4 wholes?



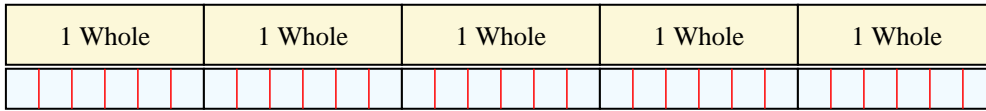
5. 20

6)  $6 \div \frac{1}{5} =$  This is the same as saying: How many  $\frac{1}{5}$  are there in 6 wholes?




6. 30

7)  $5 \div \frac{1}{6} =$  This is the same as saying: How many  $\frac{1}{6}$  are there in 5 wholes?



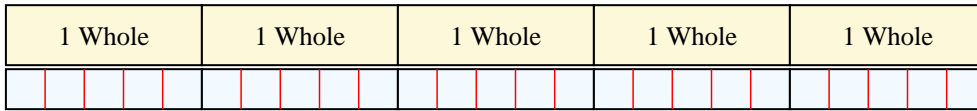
7. 30

8)  $2 \div \frac{1}{4} =$  This is the same as saying: How many  $\frac{1}{4}$  are there in 2 wholes?



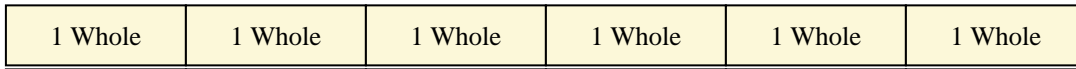
8. 8

9)  $5 \div \frac{1}{5} =$  This is the same as saying: How many  $\frac{1}{5}$  are there in 5 wholes?



9. 25

10)  $6 \div \frac{1}{6} =$  This is the same as saying: How many  $\frac{1}{6}$  are there in 6 wholes?



10. 36

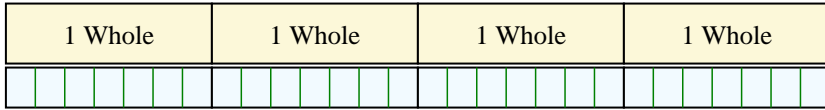




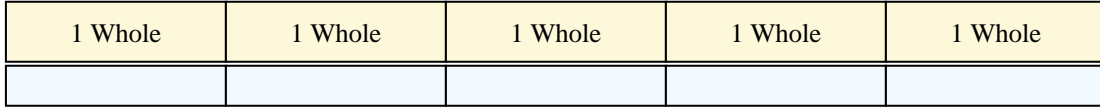
Solve each problem by marking off the fractions. The first is completed for you.

**Answers**

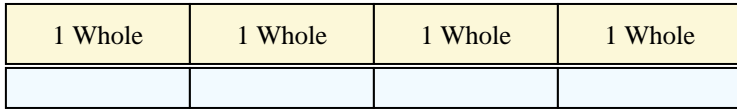
1)  $4 \div \frac{1}{7} = ?$  This is the same as saying: How many  $\frac{1}{7}$  are there in 4 wholes?



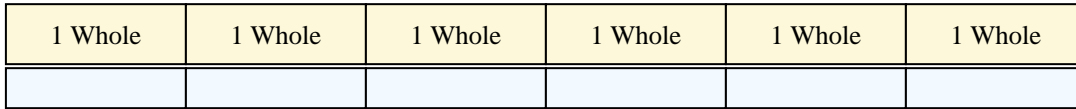
2)  $5 \div \frac{1}{6} =$



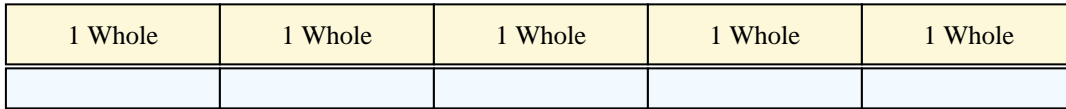
3)  $4 \div \frac{1}{5} =$



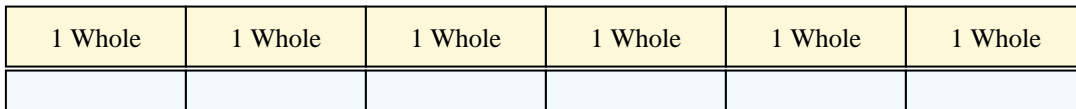
4)  $6 \div \frac{1}{7} =$



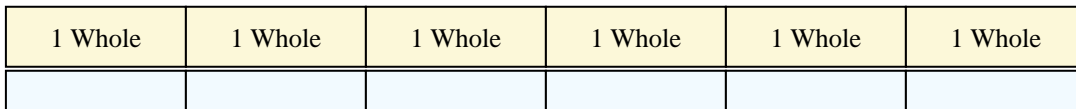
5)  $5 \div \frac{1}{5} =$



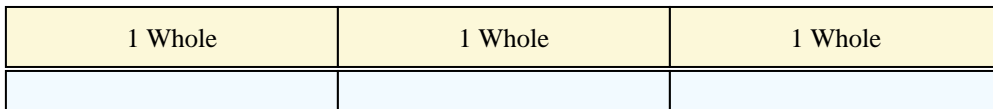
6)  $6 \div \frac{1}{2} =$



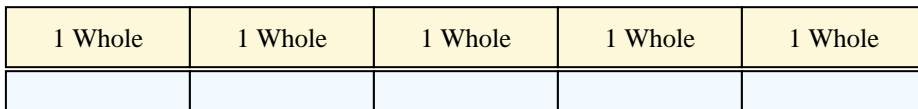
7)  $6 \div \frac{1}{4} =$




8)  $3 \div \frac{1}{4} =$



9)  $5 \div \frac{1}{4} =$



10)  $2 \div \frac{1}{7} =$



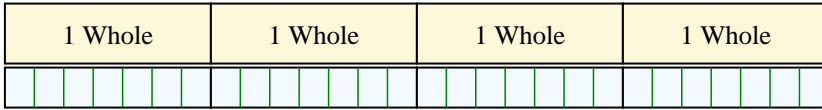
1. \_\_\_\_\_
2. \_\_\_\_\_
3. \_\_\_\_\_
4. \_\_\_\_\_
5. \_\_\_\_\_
6. \_\_\_\_\_
7. \_\_\_\_\_
8. \_\_\_\_\_
9. \_\_\_\_\_
10. \_\_\_\_\_



Solve each problem by marking off the fractions. The first is completed for you.

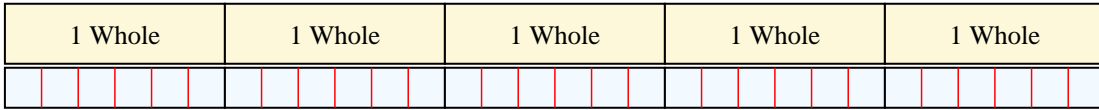
Answers

1)  $4 \div \frac{1}{7} = ?$  This is the same as saying: How many  $\frac{1}{7}$  are there in 4 wholes?



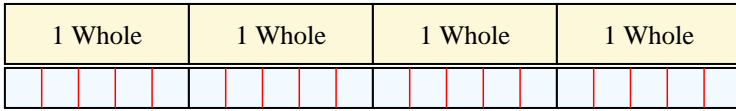
1. 28

2)  $5 \div \frac{1}{6} =$  This is the same as saying: How many  $\frac{1}{6}$  are there in 5 wholes?



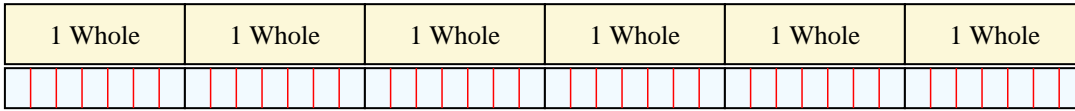
2. 30

3)  $4 \div \frac{1}{5} =$  This is the same as saying: How many  $\frac{1}{5}$  are there in 4 wholes?



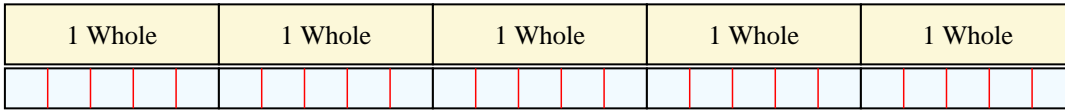
3. 20

4)  $6 \div \frac{1}{7} =$  This is the same as saying: How many  $\frac{1}{7}$  are there in 6 wholes?



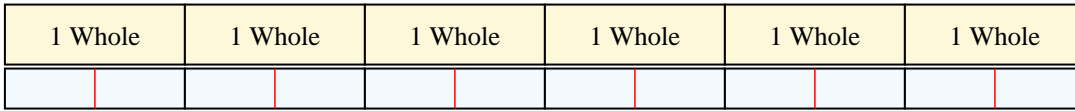
4. 42

5)  $5 \div \frac{1}{5} =$  This is the same as saying: How many  $\frac{1}{5}$  are there in 5 wholes?



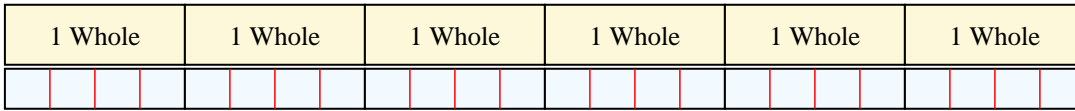
5. 25

6)  $6 \div \frac{1}{2} =$  This is the same as saying: How many  $\frac{1}{2}$  are there in 6 wholes?



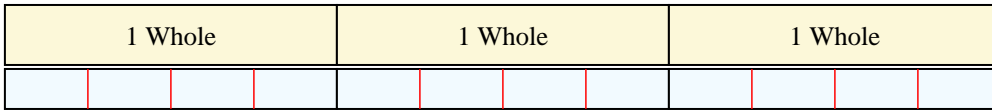
6. 12

7)  $6 \div \frac{1}{4} =$  This is the same as saying: How many  $\frac{1}{4}$  are there in 6 wholes?



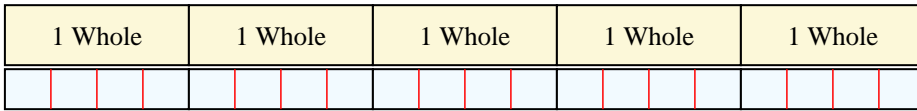
7. 24

8)  $3 \div \frac{1}{4} =$  This is the same as saying: How many  $\frac{1}{4}$  are there in 3 wholes?



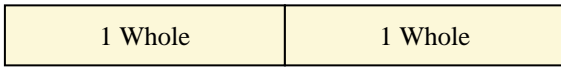
8. 12

9)  $5 \div \frac{1}{4} =$  This is the same as saying: How many  $\frac{1}{4}$  are there in 5 wholes?



9. 20

10)  $2 \div \frac{1}{7} =$  This is the same as saying: How many  $\frac{1}{7}$  are there in 2 wholes?



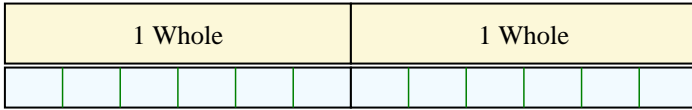
10. 14



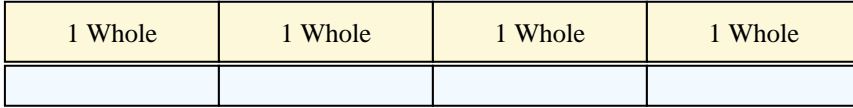
Solve each problem by marking off the fractions. The first is completed for you.

**Answers**

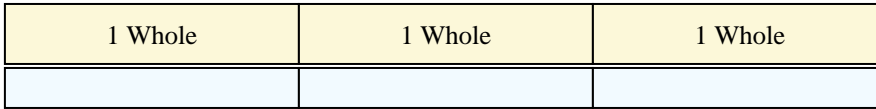
1)  $2 \div \frac{1}{6} = ?$  This is the same as saying: How many  $\frac{1}{6}$  are there in 2 wholes?




2)  $4 \div \frac{1}{2} =$



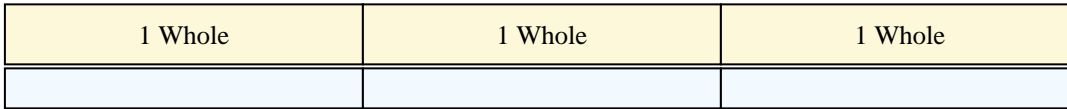
3)  $3 \div \frac{1}{5} =$



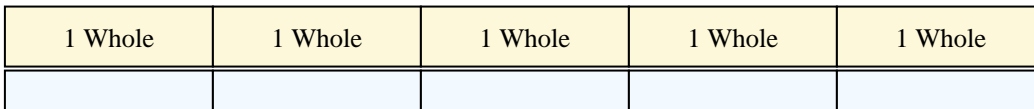
4)  $4 \div \frac{1}{4} =$



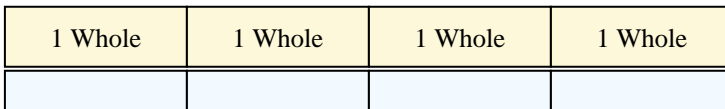
5)  $3 \div \frac{1}{6} =$



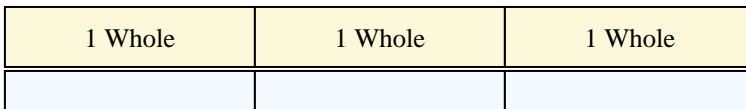
6)  $5 \div \frac{1}{3} =$



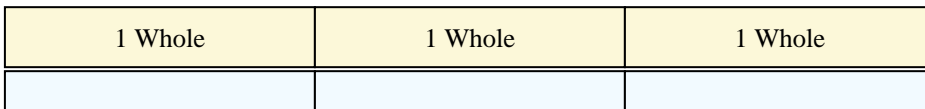
7)  $4 \div \frac{1}{5} =$




8)  $3 \div \frac{1}{3} =$



9)  $3 \div \frac{1}{2} =$



10)  $2 \div \frac{1}{2} =$



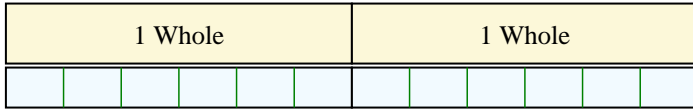
1. \_\_\_\_\_
2. \_\_\_\_\_
3. \_\_\_\_\_
4. \_\_\_\_\_
5. \_\_\_\_\_
6. \_\_\_\_\_
7. \_\_\_\_\_
8. \_\_\_\_\_
9. \_\_\_\_\_
10. \_\_\_\_\_



Solve each problem by marking off the fractions. The first is completed for you.


**Answers**

1)  $2 \div \frac{1}{6} = ?$  This is the same as saying: How many  $\frac{1}{6}$  are there in 2 wholes?



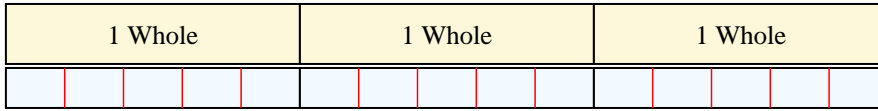
1. 12

2)  $4 \div \frac{1}{2} = ?$  This is the same as saying: How many  $\frac{1}{2}$  are there in 4 wholes?



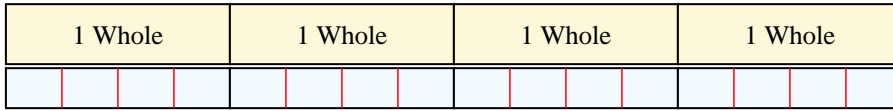
2. 8

3)  $3 \div \frac{1}{5} = ?$  This is the same as saying: How many  $\frac{1}{5}$  are there in 3 wholes?



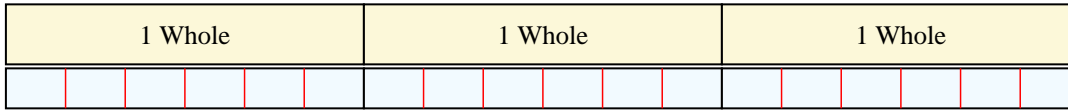
3. 15

4)  $4 \div \frac{1}{4} = ?$  This is the same as saying: How many  $\frac{1}{4}$  are there in 4 wholes?



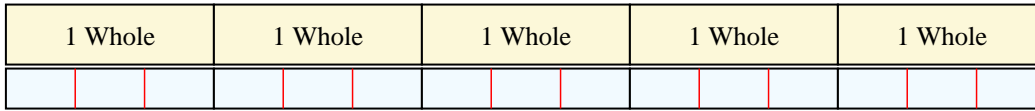
4. 16

5)  $3 \div \frac{1}{6} = ?$  This is the same as saying: How many  $\frac{1}{6}$  are there in 3 wholes?



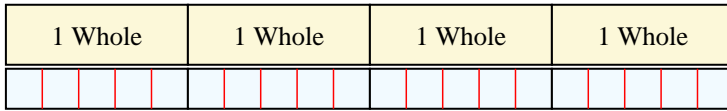
5. 18

6)  $5 \div \frac{1}{3} = ?$  This is the same as saying: How many  $\frac{1}{3}$  are there in 5 wholes?



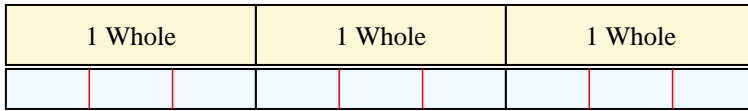
6. 15

7)  $4 \div \frac{1}{5} = ?$  This is the same as saying: How many  $\frac{1}{5}$  are there in 4 wholes?



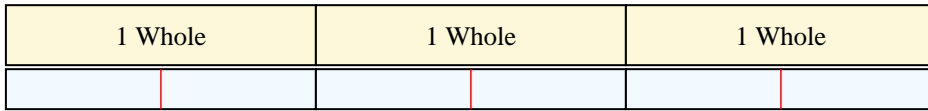
7. 20

8)  $3 \div \frac{1}{3} = ?$  This is the same as saying: How many  $\frac{1}{3}$  are there in 3 wholes?



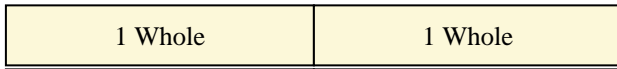
8. 9

9)  $3 \div \frac{1}{2} = ?$  This is the same as saying: How many  $\frac{1}{2}$  are there in 3 wholes?



9. 6

10)  $2 \div \frac{1}{2} = ?$  This is the same as saying: How many  $\frac{1}{2}$  are there in 2 wholes?



10. 4