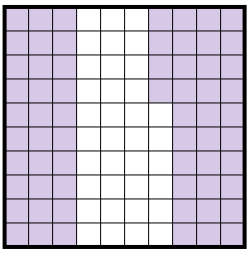




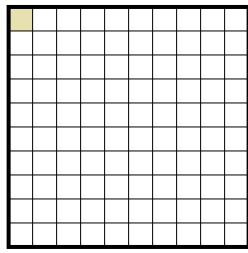
Determine the value written as a fraction, decimal & a percent.

Ex)




fraction $\frac{64}{100}$
 decimal 0.64
 percent 64%

1)



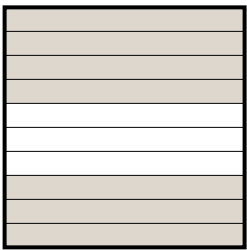
fraction _____
 decimal _____
 percent _____

2)



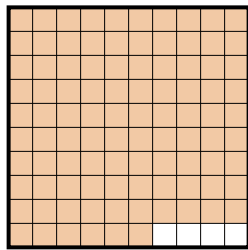
fraction _____
 decimal _____
 percent _____

3)



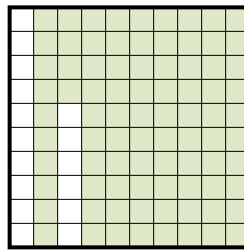
fraction _____
 decimal _____
 percent _____

4)



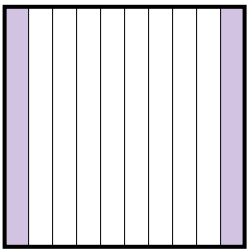
fraction _____
 decimal _____
 percent _____

5)



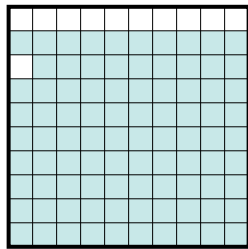
fraction _____
 decimal _____
 percent _____

6)



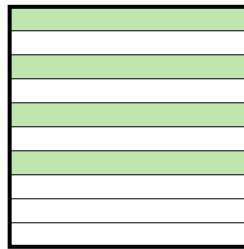
fraction _____
 decimal _____
 percent _____

7)




fraction _____
 decimal _____
 percent _____

8)



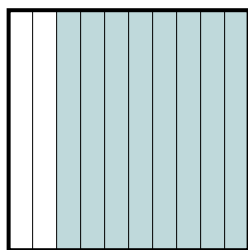
fraction _____
 decimal _____
 percent _____

9)



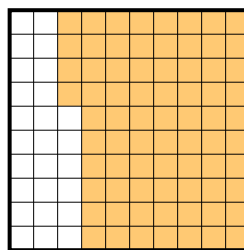
fraction _____
 decimal _____
 percent _____

10)



fraction _____
 decimal _____
 percent _____

11)



fraction _____
 decimal _____
 percent _____

Answers

Ex. $\frac{64}{100}$ 0.64 64%

1. _____

2. _____

3. _____

4. _____

5. _____

6. _____

7. _____

8. _____

9. _____

10. _____

11. _____

