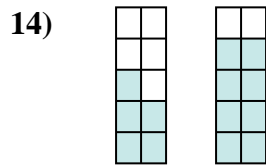
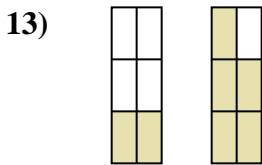
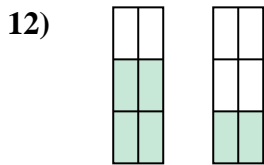
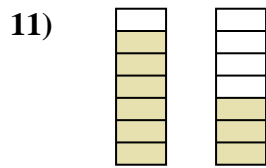
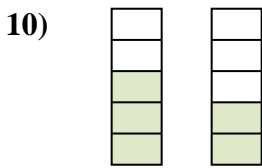
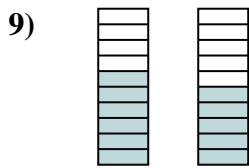
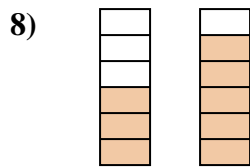
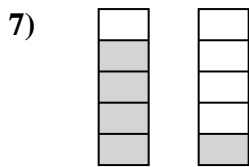
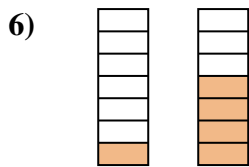
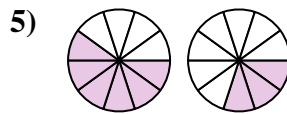
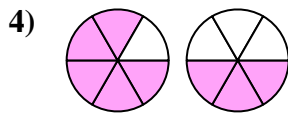
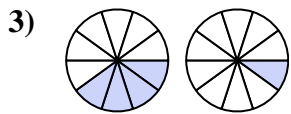
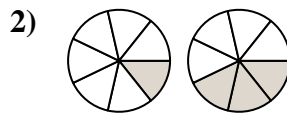
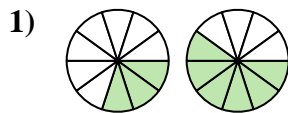
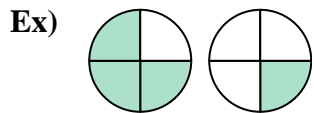




Compare the size of the fractions using $<$, $>$ or $=$.



Answers

Ex. $\frac{3}{4} > \frac{1}{4}$

1. _____

2. _____

3. _____

4. _____

5. _____

6. _____

7. _____

8. _____

9. _____

10. _____

11. _____

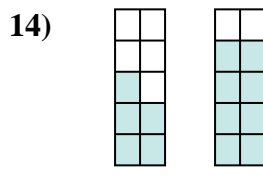
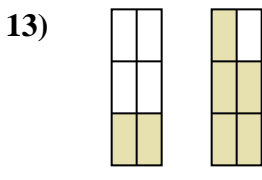
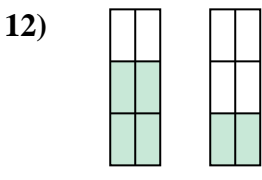
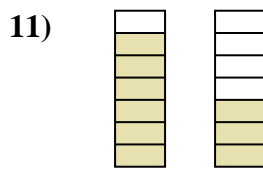
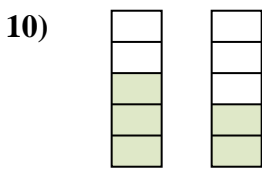
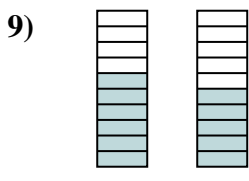
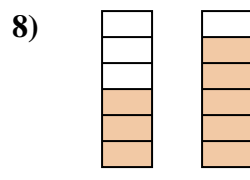
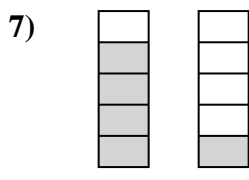
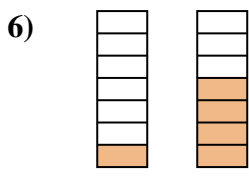
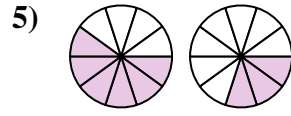
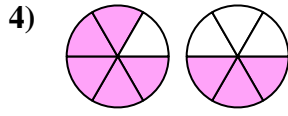
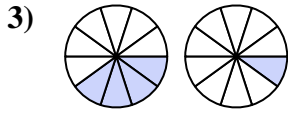
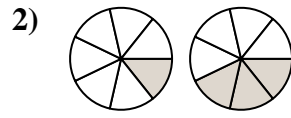
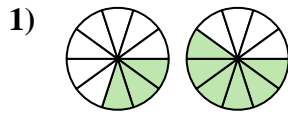
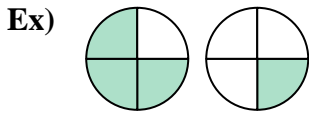
12. _____

13. _____

14. _____



Compare the size of the fractions using $<$, $>$ or $=$.



Answers

Ex. $\frac{3}{4} > \frac{1}{4}$

1. $\frac{3}{10} < \frac{6}{10}$

2. $\frac{1}{7} < \frac{3}{7}$

3. $\frac{4}{10} > \frac{1}{10}$

4. $\frac{5}{6} > \frac{3}{6}$

5. $\frac{6}{10} > \frac{3}{10}$

6. $\frac{1}{7} < \frac{4}{7}$

7. $\frac{4}{5} > \frac{1}{5}$

8. $\frac{3}{6} < \frac{5}{6}$

9. $\frac{6}{10} > \frac{5}{10}$

10. $\frac{3}{5} > \frac{2}{5}$

11. $\frac{6}{7} > \frac{3}{7}$

12. $\frac{4}{6} > \frac{2}{6}$

13. $\frac{2}{6} < \frac{5}{6}$

14. $\frac{5}{10} < \frac{8}{10}$