



Shade in the fraction to solve the problem.

Ex)



Answers

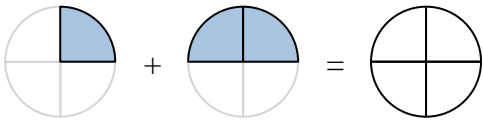
Ex. $\frac{3}{7} + \frac{2}{7} = \frac{5}{7}$

1)



1. _____ + _____ = _____

2)



2. _____ + _____ = _____

3)



3. _____ + _____ = _____

4)



4. _____ + _____ = _____

5)



5. _____ + _____ = _____

6)



6. _____ + _____ = _____

7)



7. _____ + _____ = _____

8)



8. _____ + _____ = _____

9)



9. _____ + _____ = _____

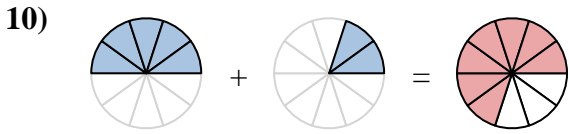
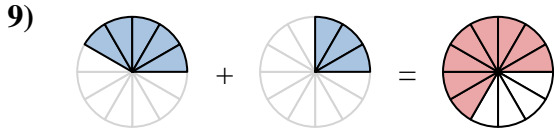
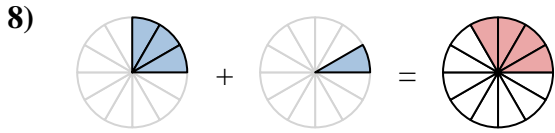
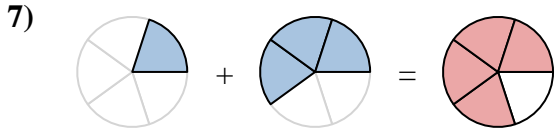
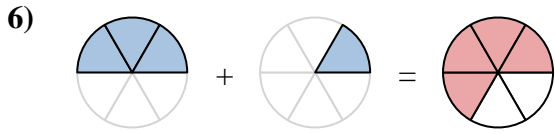
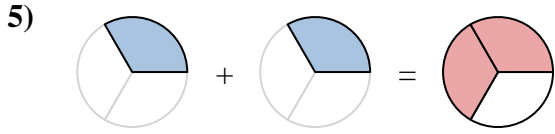
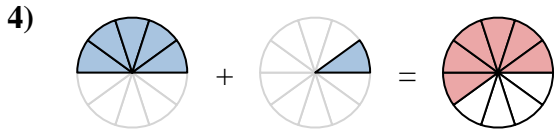
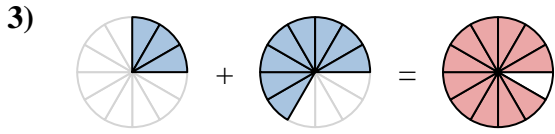
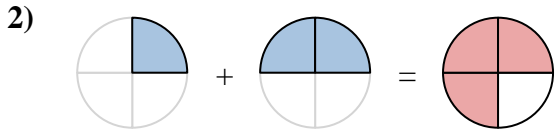
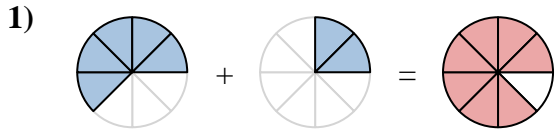
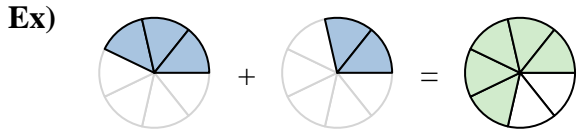
10)



10. _____ + _____ = _____



Shade in the fraction to solve the problem.



Answers

Ex. $\frac{3}{7} + \frac{2}{7} = \frac{5}{7}$

1. $\frac{5}{8} + \frac{2}{8} = \frac{7}{8}$

2. $\frac{1}{4} + \frac{2}{4} = \frac{3}{4}$

3. $\frac{3}{12} + \frac{8}{12} = \frac{11}{12}$

4. $\frac{5}{10} + \frac{1}{10} = \frac{6}{10}$

5. $\frac{1}{3} + \frac{1}{3} = \frac{2}{3}$

6. $\frac{3}{6} + \frac{1}{6} = \frac{4}{6}$

7. $\frac{1}{5} + \frac{3}{5} = \frac{4}{5}$

8. $\frac{3}{12} + \frac{1}{12} = \frac{4}{12}$

9. $\frac{5}{12} + \frac{3}{12} = \frac{8}{12}$

10. $\frac{5}{10} + \frac{2}{10} = \frac{7}{10}$