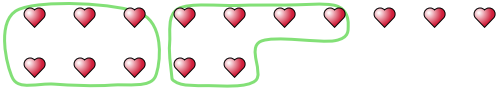


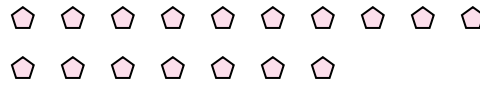


Use the shapes provided to answer the questions.

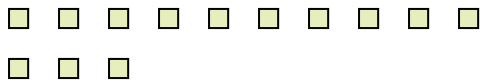
Ex) There are 15 shapes below. How many groups of 6 can you make with them? How many will you have left over?



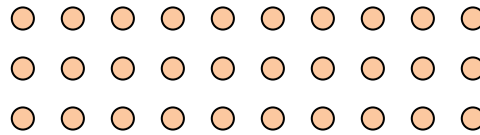
1) There are 17 shapes below. How many groups of 9 can you make with them? How many will you have left over?



2) There are 13 shapes below. How many groups of 3 can you make with them? How many will you have left over?



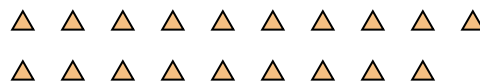
3) There are 30 shapes below. How many groups of 7 can you make with them? How many will you have left over?



4) There are 10 shapes below. How many groups of 3 can you make with them? How many will you have left over?



5) There are 19 shapes below. How many groups of 8 can you make with them? How many will you have left over?



6) There are 10 shapes below. How many groups of 3 can you make with them? How many will you have left over?



7) There are 10 shapes below. How many groups of 9 can you make with them? How many will you have left over?



8) There are 21 shapes below. How many groups of 9 can you make with them? How many will you have left over?



9) There are 16 shapes below. How many groups of 5 can you make with them? How many will you have left over?



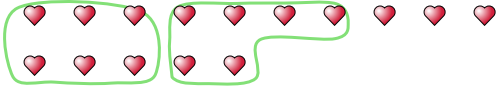
Answers

Ex.	<u>2</u>	<u>3</u>
1.	_____	_____
2.	_____	_____
3.	_____	_____
4.	_____	_____
5.	_____	_____
6.	_____	_____
7.	_____	_____
8.	_____	_____
9.	_____	_____

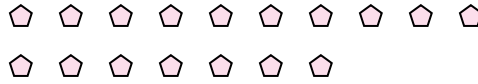


Use the shapes provided to answer the questions.

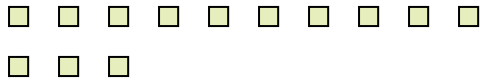
Ex) There are 15 shapes below. How many groups of 6 can you make with them? How many will you have left over?



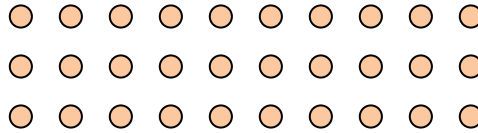
1) There are 17 shapes below. How many groups of 9 can you make with them? How many will you have left over?



2) There are 13 shapes below. How many groups of 3 can you make with them? How many will you have left over?




3) There are 30 shapes below. How many groups of 7 can you make with them? How many will you have left over?



4) There are 10 shapes below. How many groups of 3 can you make with them? How many will you have left over?



5) There are 19 shapes below. How many groups of 8 can you make with them? How many will you have left over?



6) There are 10 shapes below. How many groups of 3 can you make with them? How many will you have left over?



7) There are 10 shapes below. How many groups of 9 can you make with them? How many will you have left over?



8) There are 21 shapes below. How many groups of 9 can you make with them? How many will you have left over?



9) There are 16 shapes below. How many groups of 5 can you make with them? How many will you have left over?



Answers

Ex. 2 3

1. 1 8

2. 4 1

3. 4 2

4. 3 1

5. 2 3

6. 3 1

7. 1 1

8. 2 3

9. 3 1