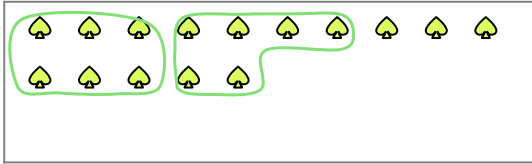


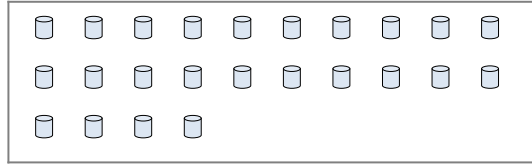


Use the shapes provided to answer the questions.

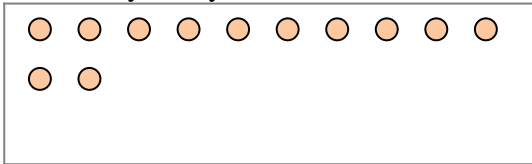
Ex) There are 15 shapes below. How many groups of 6 can you make with them?  
How many will you have left over?




1) There are 24 shapes below. How many groups of 9 can you make with them?  
How many will you have left over?



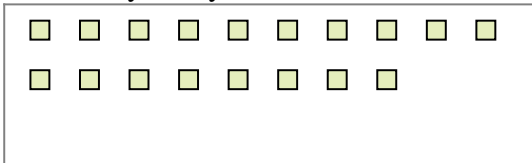
2) There are 12 shapes below. How many groups of 8 can you make with them?  
How many will you have left over?




3) There are 20 shapes below. How many groups of 5 can you make with them?  
How many will you have left over?



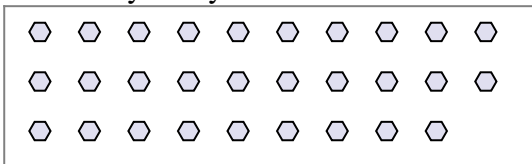
4) There are 18 shapes below. How many groups of 8 can you make with them?  
How many will you have left over?



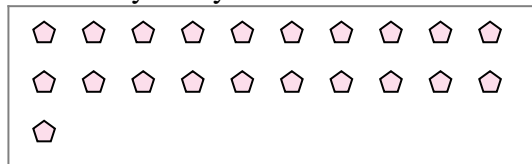
5) There are 19 shapes below. How many groups of 9 can you make with them?  
How many will you have left over?



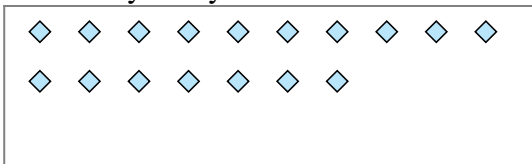
6) There are 29 shapes below. How many groups of 6 can you make with them?  
How many will you have left over?



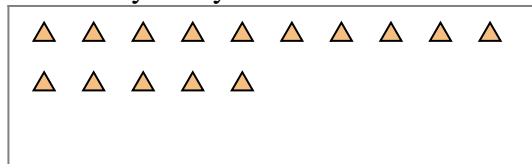
7) There are 21 shapes below. How many groups of 5 can you make with them?  
How many will you have left over?



8) There are 17 shapes below. How many groups of 7 can you make with them?  
How many will you have left over?



9) There are 15 shapes below. How many groups of 3 can you make with them?  
How many will you have left over?



**Answers**

Ex. 2

Ex. 3

1a. \_\_\_\_\_

1b. \_\_\_\_\_

2a. \_\_\_\_\_

2b. \_\_\_\_\_

3a. \_\_\_\_\_

3b. \_\_\_\_\_

4a. \_\_\_\_\_

4b. \_\_\_\_\_

5a. \_\_\_\_\_

5b. \_\_\_\_\_

6a. \_\_\_\_\_

6b. \_\_\_\_\_

7a. \_\_\_\_\_

7b. \_\_\_\_\_

8a. \_\_\_\_\_

8b. \_\_\_\_\_

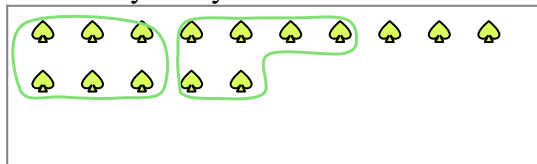
9a. \_\_\_\_\_

9b. \_\_\_\_\_

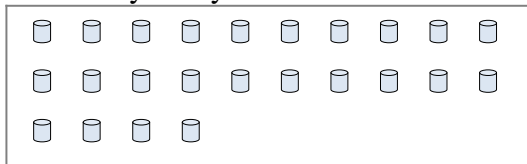


Use the shapes provided to answer the questions.

Ex) There are 15 shapes below. How many groups of 6 can you make with them? How many will you have left over?



1) There are 24 shapes below. How many groups of 9 can you make with them? How many will you have left over?



**Answers**

Ex. 2

Ex. 3

1a. 2

1b. 6

2a. 1

2b. 4

3a. 4

3b. 0

4a. 2

4b. 2

5a. 2

5b. 1

6a. 4

6b. 5

7a. 4

7b. 1

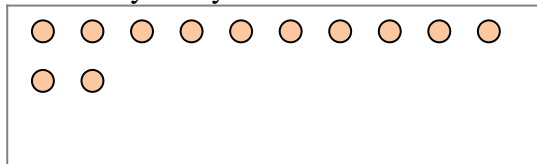
8a. 2

8b. 3


9a. 5

9b. 0

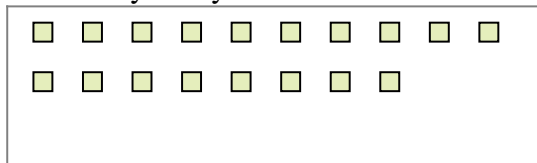
2) There are 12 shapes below. How many groups of 8 can you make with them? How many will you have left over?




3) There are 20 shapes below. How many groups of 5 can you make with them? How many will you have left over?



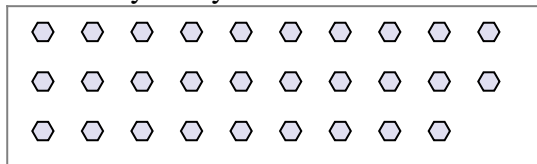
4) There are 18 shapes below. How many groups of 8 can you make with them? How many will you have left over?



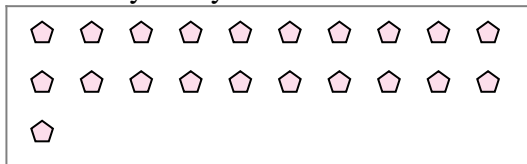
5) There are 19 shapes below. How many groups of 9 can you make with them? How many will you have left over?



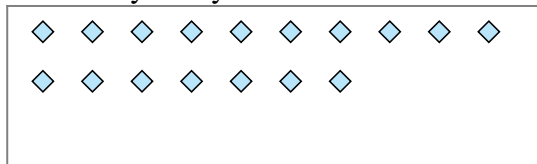
6) There are 29 shapes below. How many groups of 6 can you make with them? How many will you have left over?



7) There are 21 shapes below. How many groups of 5 can you make with them? How many will you have left over?



8) There are 17 shapes below. How many groups of 7 can you make with them? How many will you have left over?



9) There are 15 shapes below. How many groups of 3 can you make with them? How many will you have left over?

