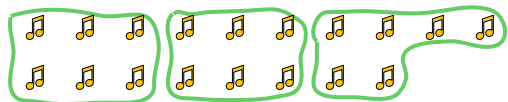





Use the shapes provided to answer the questions.

Ex) How many groups of 6 can you make with the 18 shapes below?



1) How many groups of 3 can you make with the 21 shapes below?



Answers

Ex. 3

1. 7

2. 4

3. 4

4. 2

5. 2

6. 5

7. 6

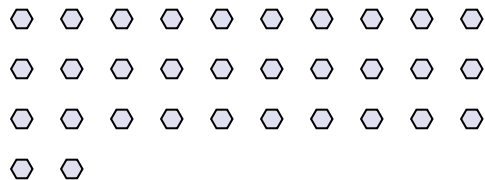
8. 5

9. 3


10. 3

11. 4

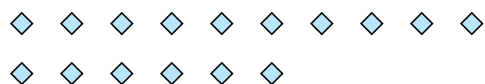
2) How many groups of 8 can you make with the 32 shapes below?



3) How many groups of 8 can you make with the 32 shapes below?



4) How many groups of 8 can you make with the 16 shapes below?



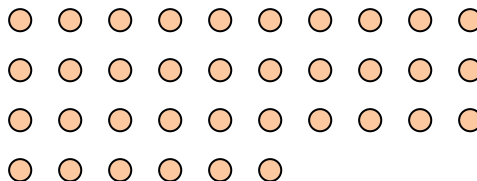
5) How many groups of 9 can you make with the 18 shapes below?



6) How many groups of 2 can you make with the 10 shapes below?



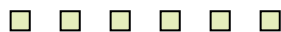
7) How many groups of 6 can you make with the 36 shapes below?




8) How many groups of 7 can you make with the 35 shapes below?



9) How many groups of 2 can you make with the 6 shapes below?



10) How many groups of 8 can you make with the 24 shapes below?



11) How many groups of 7 can you make with the 28 shapes below?

