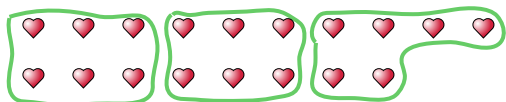




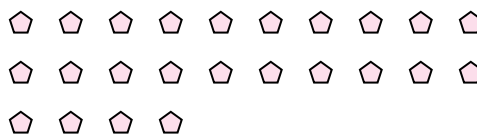


Use the shapes provided to answer the questions.

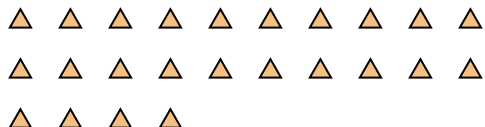
Ex) How many groups of 6 can you make with the 18 shapes below?



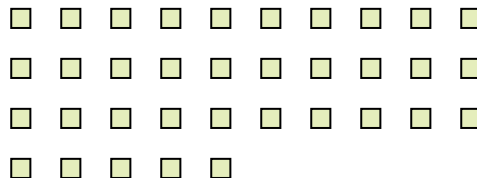
1) How many groups of 4 can you make with the 24 shapes below?



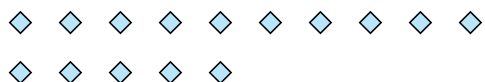
2) How many groups of 3 can you make with the 24 shapes below?



3) How many groups of 7 can you make with the 35 shapes below?



4) How many groups of 5 can you make with the 15 shapes below?



5) How many groups of 3 can you make with the 15 shapes below?



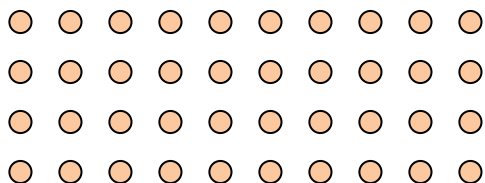
6) How many groups of 5 can you make with the 15 shapes below?




7) How many groups of 6 can you make with the 12 shapes below?



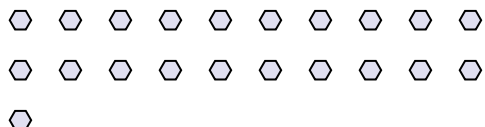
8) How many groups of 5 can you make with the 40 shapes below?




9) How many groups of 4 can you make with the 40 shapes below?



10) How many groups of 7 can you make with the 21 shapes below?



11) How many groups of 8 can you make with the 40 shapes below?



Answers

Ex. 3

1. 6

2. 8

3. 5

4. 3

5. 5

6. 3

7. 2

8. 8

9. 10

10. 3

11. 5