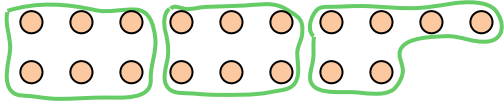







Use the shapes provided to answer the questions.

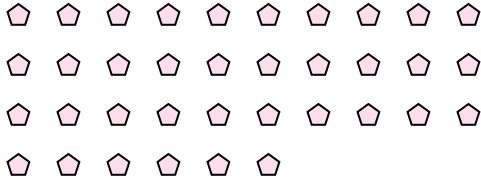
Ex) How many groups of 6 can you make with the 18 shapes below?



1) How many groups of 8 can you make with the 24 shapes below?



2) How many groups of 9 can you make with the 36 shapes below?



3) How many groups of 4 can you make with the 12 shapes below?



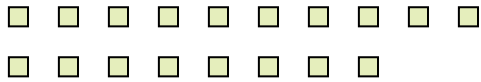
4) How many groups of 3 can you make with the 30 shapes below?



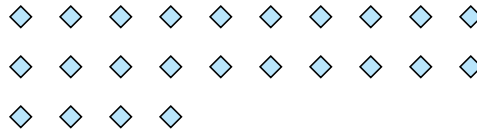
5) How many groups of 7 can you make with the 14 shapes below?



6) How many groups of 9 can you make with the 18 shapes below?



7) How many groups of 2 can you make with the 24 shapes below?




8) How many groups of 4 can you make with the 8 shapes below?



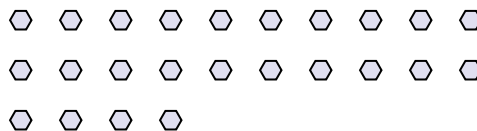
9) How many groups of 4 can you make with the 12 shapes below?



10) How many groups of 3 can you make with the 21 shapes below?



11) How many groups of 6 can you make with the 24 shapes below?



Answers

Ex. 3

1. 3

2. 4

3. 3

4. 10

5. 2

6. 2

7. 12

8. 2

9. 3

10. 7

11. 4