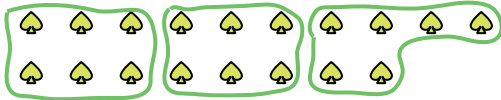




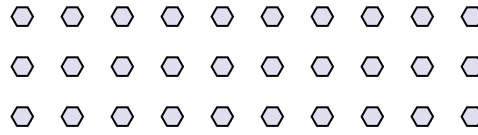


Use the shapes provided to answer the questions.

Ex) How many groups of 6 can you make with the 18 shapes below?



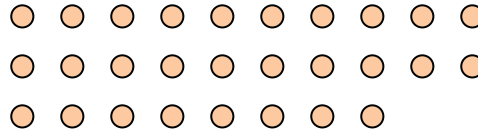
1) How many groups of 6 can you make with the 30 shapes below?



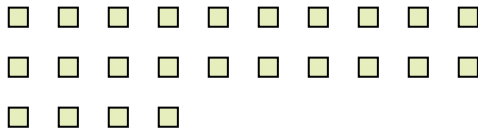
2) How many groups of 5 can you make with the 15 shapes below?



3) How many groups of 4 can you make with the 28 shapes below?




4) How many groups of 6 can you make with the 24 shapes below?




5) How many groups of 3 can you make with the 6 shapes below?



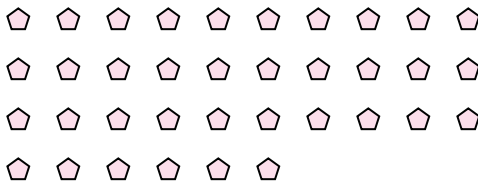
6) How many groups of 8 can you make with the 32 shapes below?



7) How many groups of 5 can you make with the 25 shapes below?




8) How many groups of 4 can you make with the 36 shapes below?



9) How many groups of 2 can you make with the 4 shapes below?



10) How many groups of 5 can you make with the 35 shapes below?



11) How many groups of 4 can you make with the 40 shapes below?



Answers

Ex. 3

1. 5

2. 3

3. 7

4. 4

5. 2

6. 4

7. 5

8. 9

9. 2

10. 7

11. 10