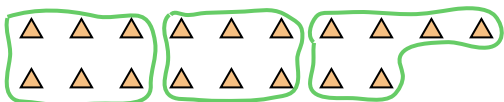




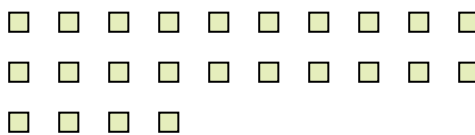


Use the shapes provided to answer the questions.

Ex) How many groups of 6 can you make with the 18 shapes below?



1) How many groups of 6 can you make with the 24 shapes below?



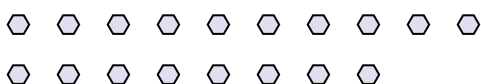
2) How many groups of 4 can you make with the 8 shapes below?




3) How many groups of 5 can you make with the 10 shapes below?



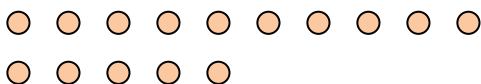
4) How many groups of 6 can you make with the 18 shapes below?



5) How many groups of 3 can you make with the 24 shapes below?



6) How many groups of 5 can you make with the 15 shapes below?



7) How many groups of 5 can you make with the 40 shapes below?




8) How many groups of 6 can you make with the 12 shapes below?



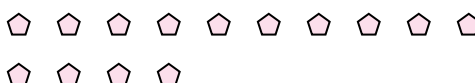
9) How many groups of 7 can you make with the 14 shapes below?



10) How many groups of 7 can you make with the 35 shapes below?



11) How many groups of 7 can you make with the 14 shapes below?



Answers

Ex. 3

1. 4

2. 2

3. 2

4. 3

5. 8

6. 3

7. 8

8. 2

9. 2

10. 5

11. 2