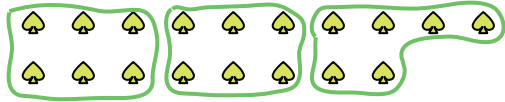




Use the shapes provided to answer the questions.

Answers

Ex) How many groups of 6 can you make with the 18 shapes below?




1) How many groups of 8 can you make with the 40 shapes below?

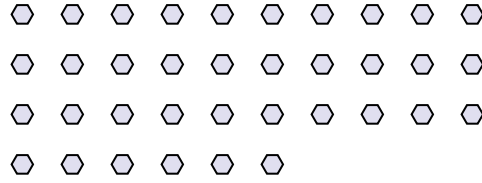


Ex. 3

2) How many groups of 2 can you make with the 34 shapes below?



3) How many groups of 9 can you make with the 36 shapes below?



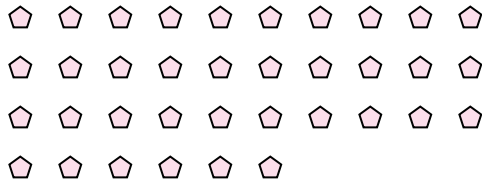
4) How many groups of 5 can you make with the 10 shapes below?



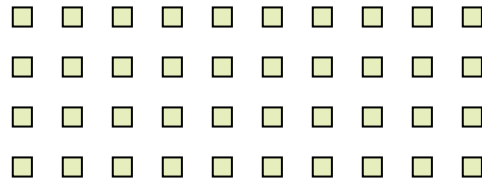
5) How many groups of 4 can you make with the 20 shapes below?




6) How many groups of 2 can you make with the 36 shapes below?



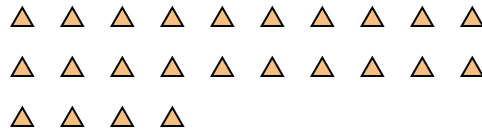
7) How many groups of 8 can you make with the 40 shapes below?



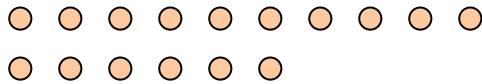
8) How many groups of 8 can you make with the 32 shapes below?



9) How many groups of 3 can you make with the 24 shapes below?



10) How many groups of 8 can you make with the 16 shapes below?



11) How many groups of 3 can you make with the 39 shapes below?

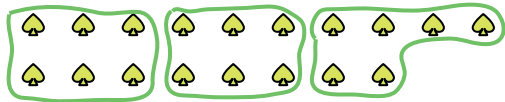


- 1. _____
- 2. _____
- 3. _____
- 4. _____
- 5. _____
- 6. _____
- 7. _____
- 8. _____
- 9. _____
- 10. _____
- 11. _____



Use the shapes provided to answer the questions.

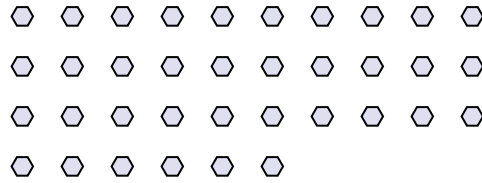
Ex) How many groups of 6 can you make with the 18 shapes below?



1) How many groups of 8 can you make with the 40 shapes below?



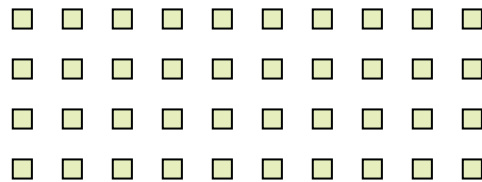
3) How many groups of 9 can you make with the 36 shapes below?



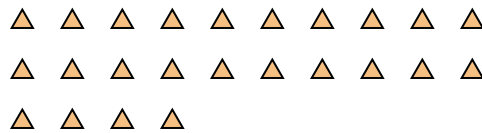
5) How many groups of 4 can you make with the 20 shapes below?




7) How many groups of 8 can you make with the 40 shapes below?



9) How many groups of 3 can you make with the 24 shapes below?



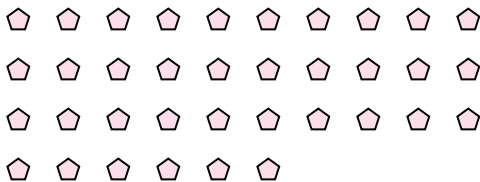
2) How many groups of 2 can you make with the 34 shapes below?




4) How many groups of 5 can you make with the 10 shapes below?



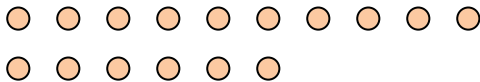
6) How many groups of 2 can you make with the 36 shapes below?



8) How many groups of 8 can you make with the 32 shapes below?



10) How many groups of 8 can you make with the 16 shapes below?



11) How many groups of 3 can you make with the 39 shapes below?



Answers

Ex. 3

1. 5

2. 17

3. 4

4. 2

5. 5

6. 18

7. 5

8. 4

9. 8

10. 2

11. 13