




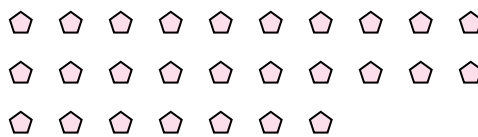


Use the shapes provided to answer the questions.

Ex) How many groups of 6 can you make with the 18 shapes below?



1) How many groups of 9 can you make with the 27 shapes below?



2) How many groups of 2 can you make with the 6 shapes below?




3) How many groups of 3 can you make with the 15 shapes below?




4) How many groups of 5 can you make with the 20 shapes below?



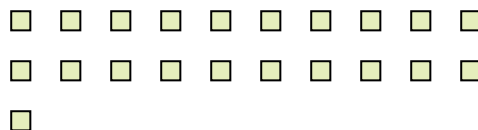
5) How many groups of 4 can you make with the 40 shapes below?



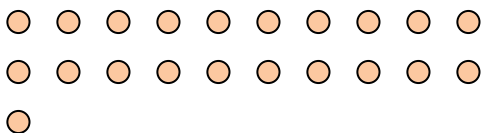
6) How many groups of 7 can you make with the 21 shapes below?



7) How many groups of 7 can you make with the 21 shapes below?



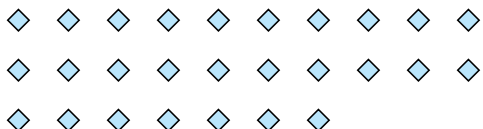
8) How many groups of 7 can you make with the 21 shapes below?



9) How many groups of 2 can you make with the 26 shapes below?



10) How many groups of 9 can you make with the 27 shapes below?



11) How many groups of 4 can you make with the 36 shapes below?



Answers

Ex. 3

1. 3

2. 3

3. 5

4. 4

5. 10

6. 3

7. 3

8. 3

9. 13

10. 3

11. 9