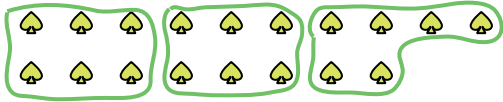







Use the shapes provided to answer the questions.

Ex) How many groups of 6 can you make with the 18 shapes below?




1) How many groups of 5 can you make with the 35 shapes below?



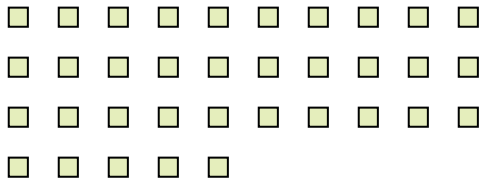
2) How many groups of 4 can you make with the 20 shapes below?




3) How many groups of 7 can you make with the 21 shapes below?



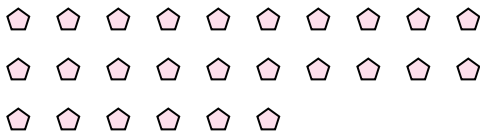
4) How many groups of 5 can you make with the 35 shapes below?



5) How many groups of 9 can you make with the 18 shapes below?



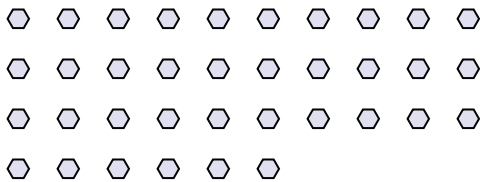
6) How many groups of 2 can you make with the 26 shapes below?




7) How many groups of 9 can you make with the 18 shapes below?



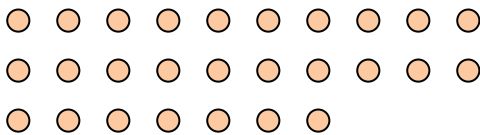
8) How many groups of 6 can you make with the 36 shapes below?



9) How many groups of 8 can you make with the 32 shapes below?



10) How many groups of 9 can you make with the 27 shapes below?



11) How many groups of 5 can you make with the 10 shapes below?



Answers

Ex. 3

1. 7

2. 5

3. 3

4. 7

5. 2

6. 13

7. 2

8. 6

9. 4

10. 3

11. 2