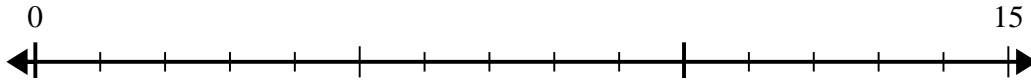


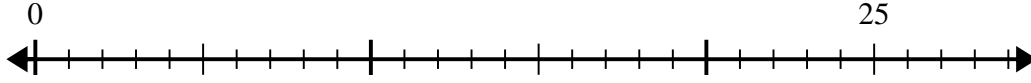


Use the number line to solve the division problem.

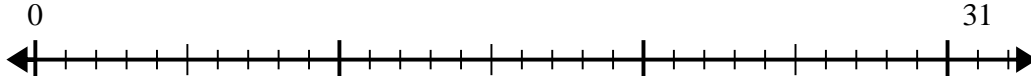
1) $15 \div 4 =$



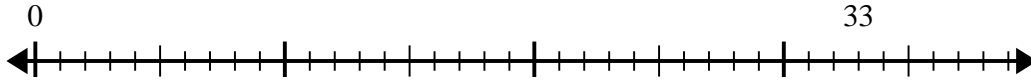
2) $25 \div 7 =$



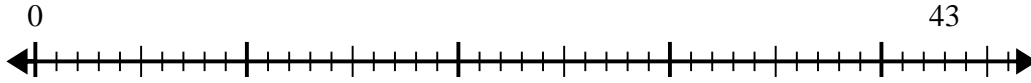
3) $31 \div 4 =$



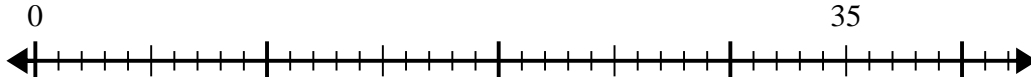
4) $33 \div 8 =$



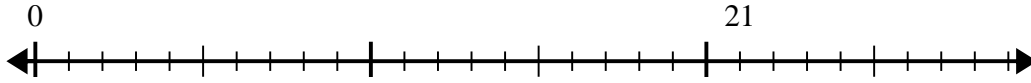
5) $43 \div 6 =$



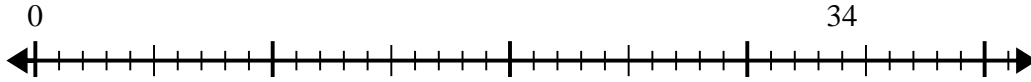
6) $35 \div 6 =$



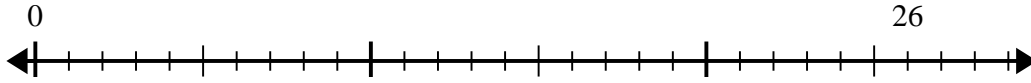
7) $21 \div 4 =$



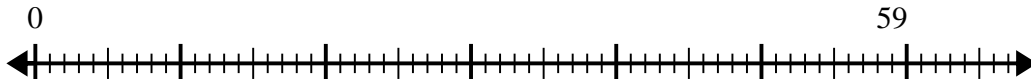
8) $34 \div 7 =$



9) $26 \div 4 =$



10) $59 \div 7 =$



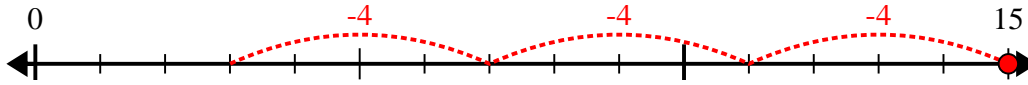
Answers

1. _____
2. _____
3. _____
4. _____
5. _____
6. _____
7. _____
8. _____
9. _____
10. _____

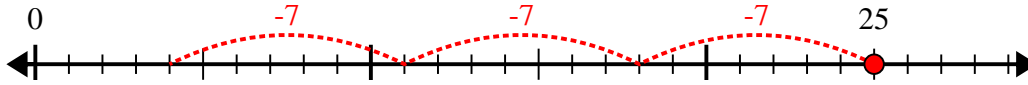


Use the number line to solve the division problem.

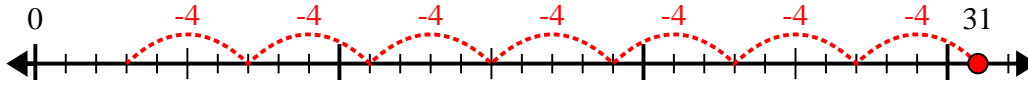
1) $15 \div 4 =$



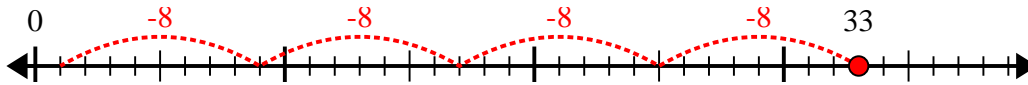
2) $25 \div 7 =$



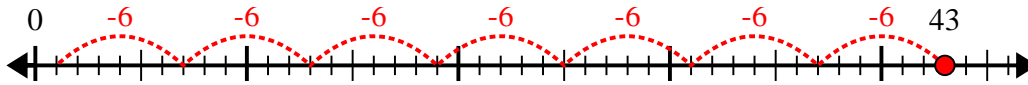
3) $31 \div 4 =$



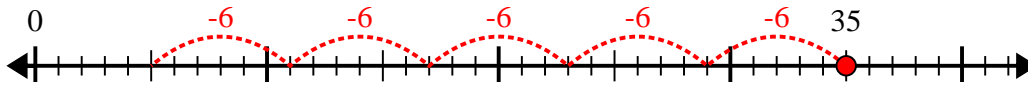
4) $33 \div 8 =$



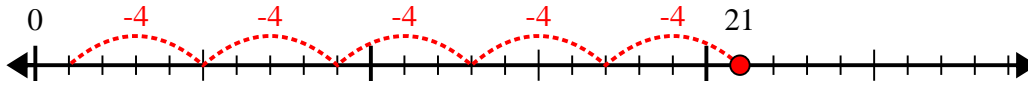
5) $43 \div 6 =$



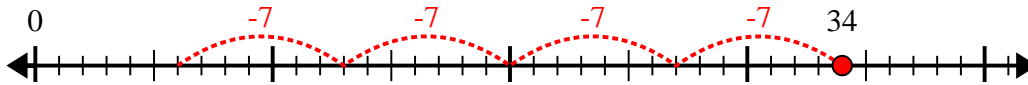
6) $35 \div 6 =$



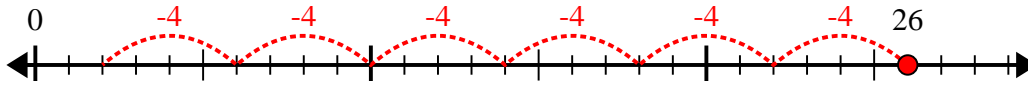
7) $21 \div 4 =$



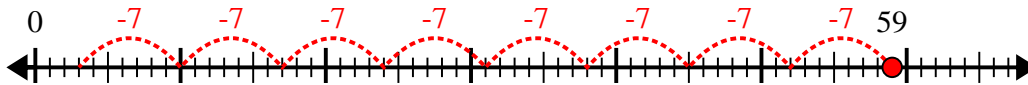
8) $34 \div 7 =$



9) $26 \div 4 =$



10) $59 \div 7 =$



Answers

1. 3r3

2. 3r4

3. 7r3

4. 4r1

5. 7r1

6. 5r5

7. 5r1

8. 4r6

9. 6r2

10. 8r3