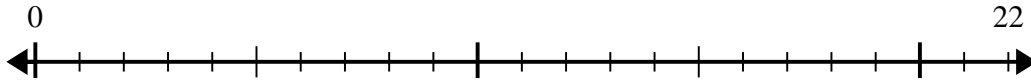


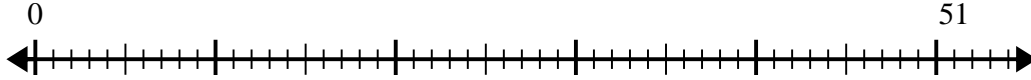


Use the number line to solve the division problem.

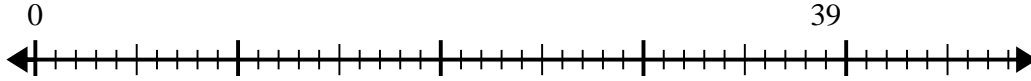
1) $22 \div 5 =$



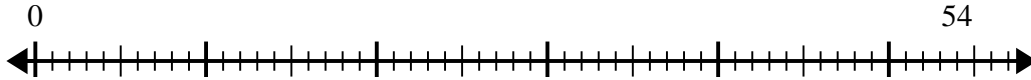
2) $51 \div 6 =$



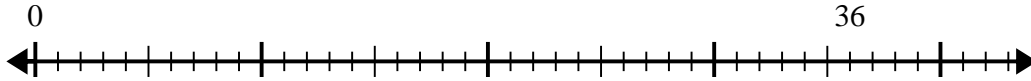
3) $39 \div 8 =$



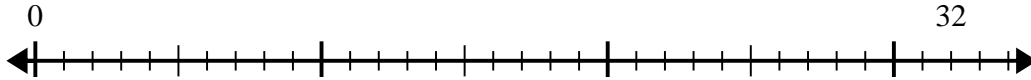
4) $54 \div 8 =$



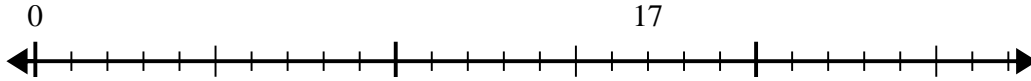
5) $36 \div 7 =$



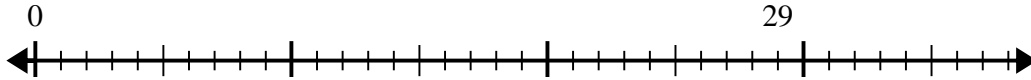
6) $32 \div 5 =$



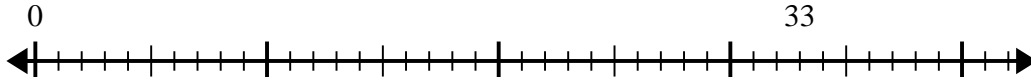
7) $17 \div 5 =$



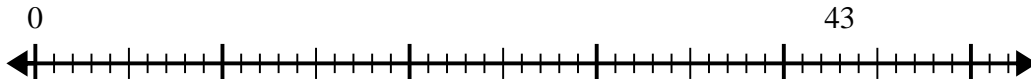
8) $29 \div 4 =$



9) $33 \div 4 =$



10) $43 \div 8 =$



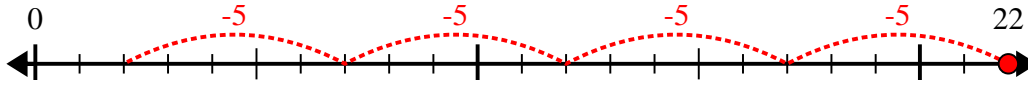
Answers

1. _____
2. _____
3. _____
4. _____
5. _____
6. _____
7. _____
8. _____
9. _____
10. _____

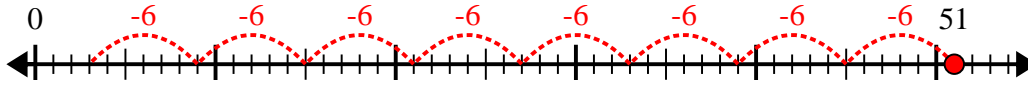


Use the number line to solve the division problem.

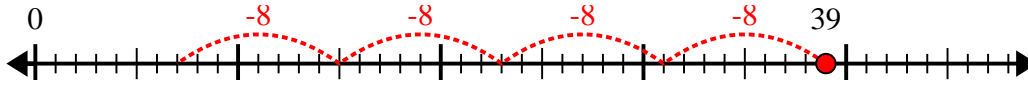
1) $22 \div 5 =$



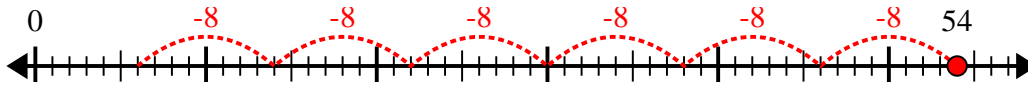
2) $51 \div 6 =$



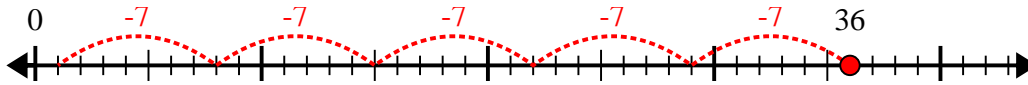
3) $39 \div 8 =$



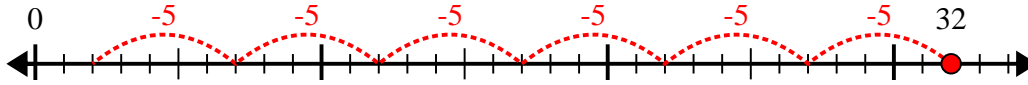
4) $54 \div 8 =$



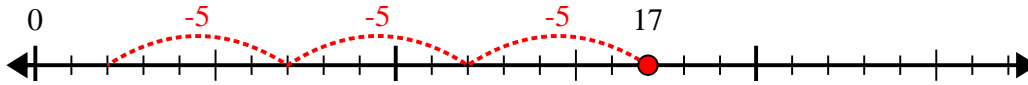
5) $36 \div 7 =$



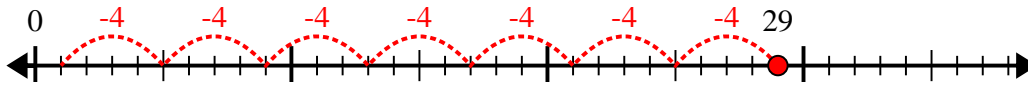
6) $32 \div 5 =$



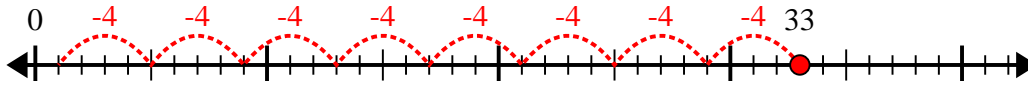
7) $17 \div 5 =$



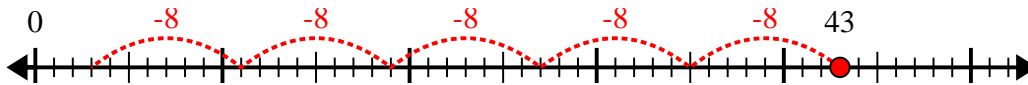
8) $29 \div 4 =$



9) $33 \div 4 =$



10) $43 \div 8 =$



Answers

1. 4r2

2. 8r3

3. 4r7

4. 6r6

5. 5r1

6. 6r2

7. 3r2

8. 7r1

9. 8r1

10. 5r3