


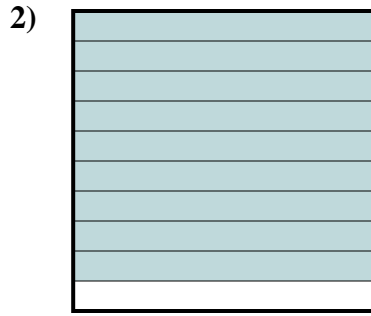


Determine which letter best represents the amount shaded of the whole.

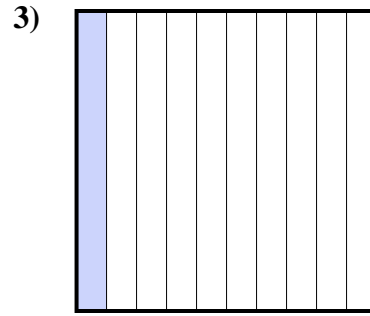
Answers



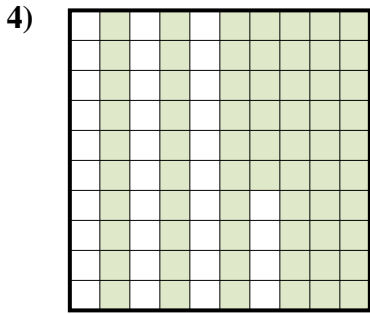
- A. 0.05
- B. 500
- C. 5
- D. 0.5



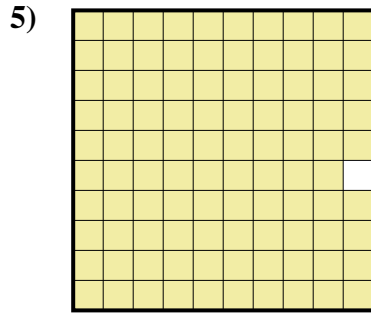
- A. 0.09
- B. 90
- C. 9
- D. 0.9



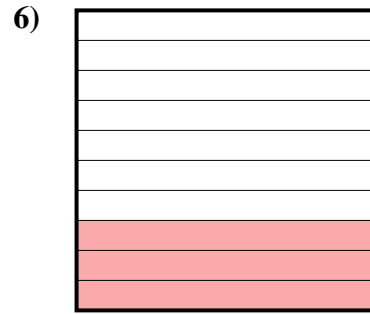
- A. 0.1
- B. 1
- C. 100
- D. 0.01



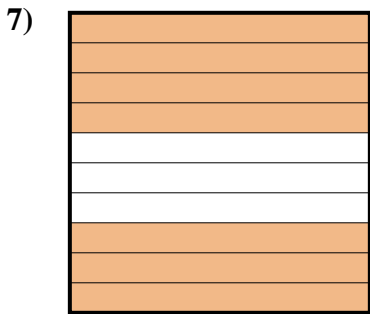
- A. 0.066
- B. 6.6
- C. 660
- D. 0.66



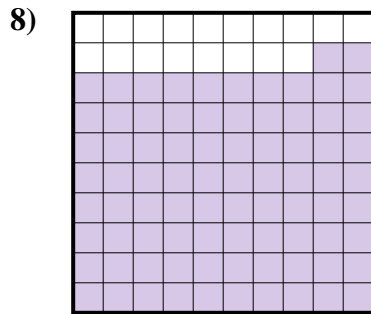
- A. 0.099
- B. 0.99
- C. 990
- D. 99



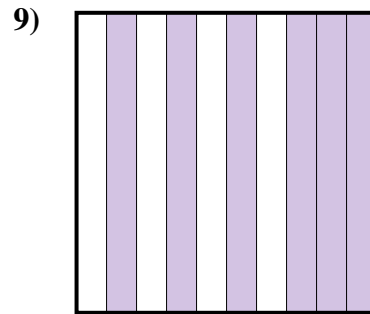
- A. 0.3
- B. 0.03
- C. 3
- D. 300



- A. 0.07
- B. 7
- C. 700
- D. 0.7



- A. 0.082
- B. 0.82
- C. 82
- D. 8.2




- A. 60
- B. 0.06
- C. 0.6
- D. 600

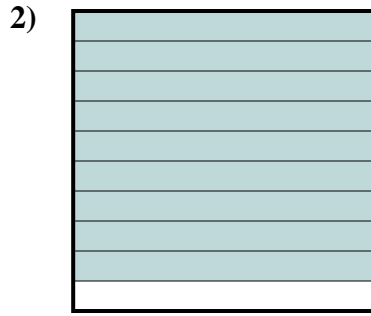
- 1. _____
- 2. _____
- 3. _____
- 4. _____
- 5. _____
- 6. _____
- 7. _____
- 8. _____
- 9. _____



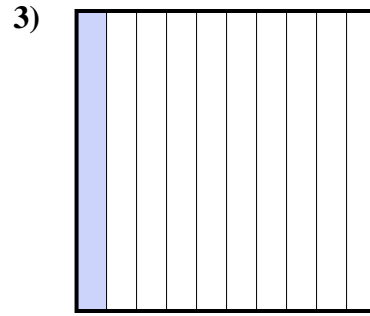
Determine which letter best represents the amount shaded of the whole.



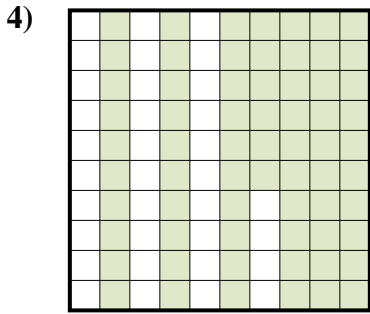
- A. 0.05
- B. 500
- C. 5
- D. 0.5



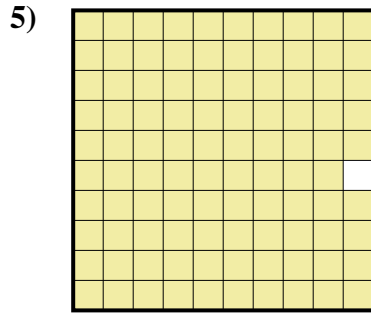
- A. 0.09
- B. 90
- C. 9
- D. 0.9



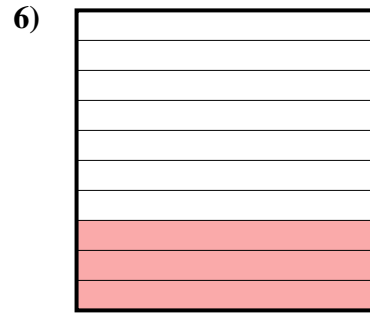
- A. 0.1
- B. 1
- C. 100
- D. 0.01



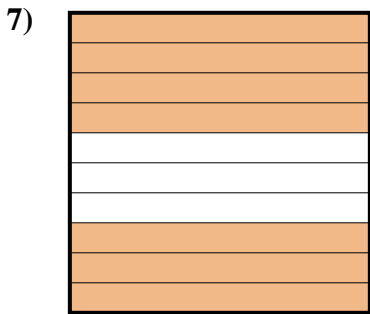
- A. 0.066
- B. 6.6
- C. 660
- D. 0.66



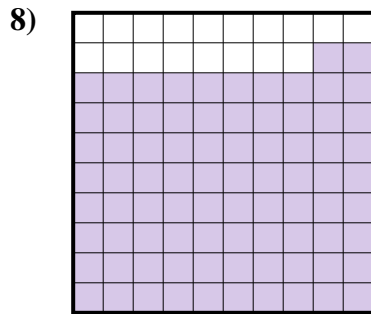
- A. 0.099
- B. 0.99
- C. 990
- D. 99



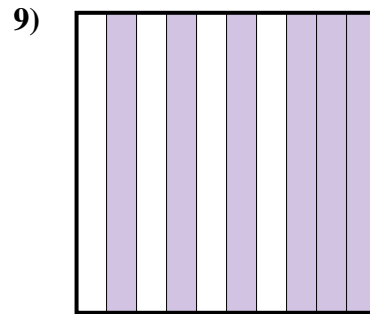
- A. 0.3
- B. 0.03
- C. 3
- D. 300



- A. 0.07
- B. 7
- C. 700
- D. 0.7



- A. 0.082
- B. 0.82
- C. 82
- D. 8.2



- A. 60
- B. 0.06
- C. 0.6
- D. 600

Answers

- 1. **D**
- 2. **D**
- 3. **A**
- 4. **D**
- 5. **B**
- 6. **A**
- 7. **D**
- 8. **B**
- 9. **C**