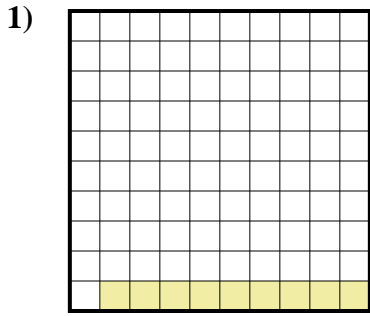


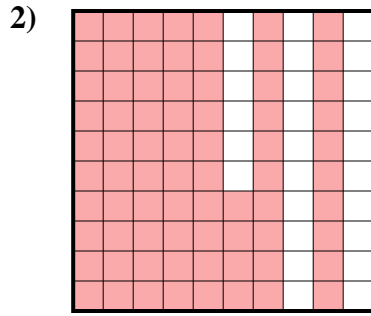


Determine which letter best represents the amount shaded of the whole.

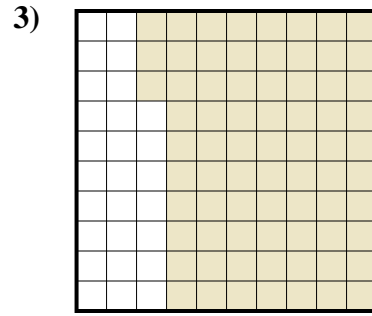
Answers




- A. 0.009
- B. 0.09
- C. 90
- D. 0.9



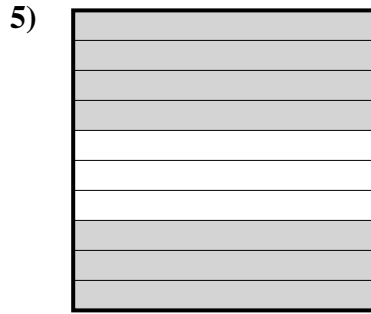
- A. 0.074
- B. 74
- C. 0.74
- D. 740



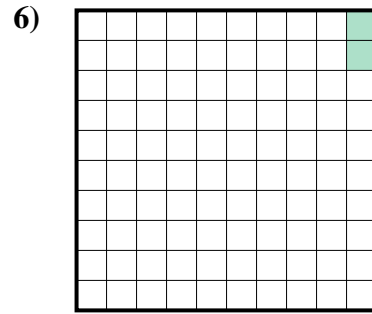
- A. 0.73
- B. 730
- C. 73
- D. 7.3



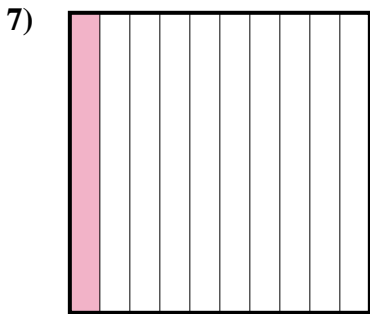
- A. 60
- B. 0.6
- C. 6
- D. 0.06



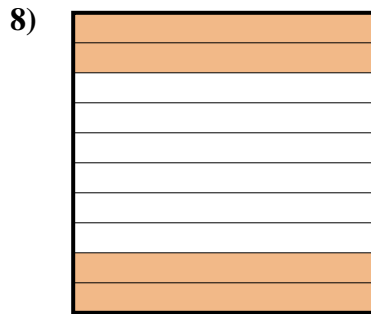
- A. 0.7
- B. 0.07
- C. 700
- D. 7



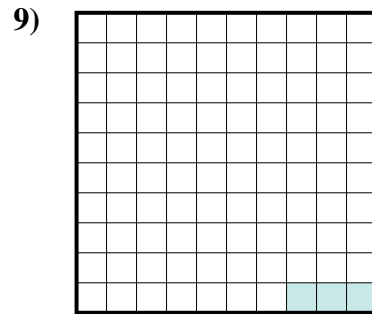
- A. 0.2
- B. 0.002
- C. 2
- D. 0.02



- A. 10
- B. 1
- C. 100
- D. 0.1



- A. 40
- B. 0.4
- C. 0.04
- D. 4

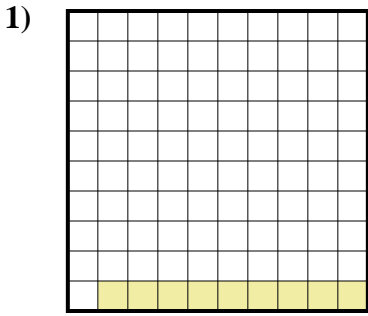


- A. 3
- B. 0.003
- C. 0.03
- D. 30

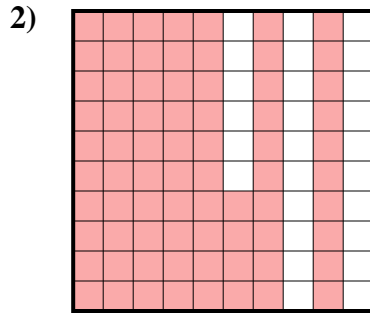
- 1. _____
- 2. _____
- 3. _____
- 4. _____
- 5. _____
- 6. _____
- 7. _____
- 8. _____
- 9. _____



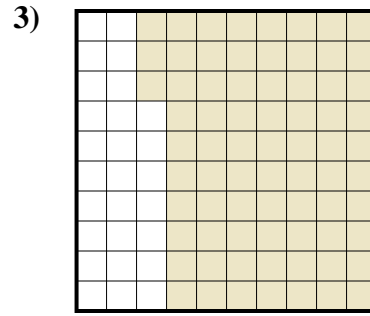
Determine which letter best represents the amount shaded of the whole.




- A. 0.009
- B. 0.09
- C. 90
- D. 0.9



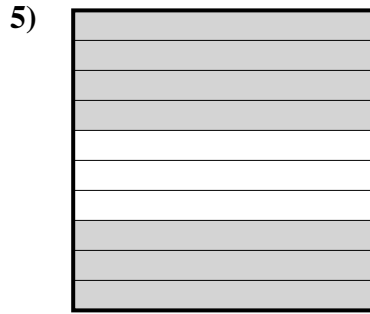
- A. 0.074
- B. 74
- C. 0.74
- D. 740



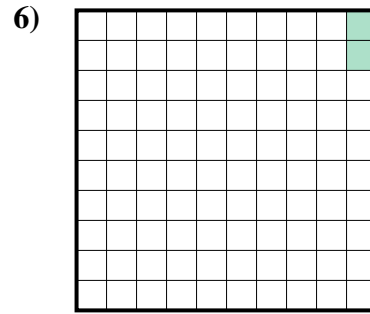
- A. 0.73
- B. 730
- C. 73
- D. 7.3



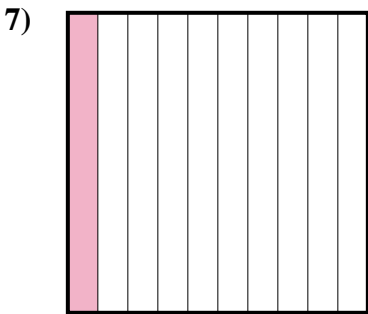
- A. 60
- B. 0.6
- C. 6
- D. 0.06



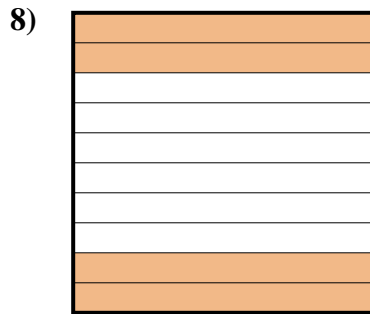
- A. 0.7
- B. 0.07
- C. 700
- D. 7



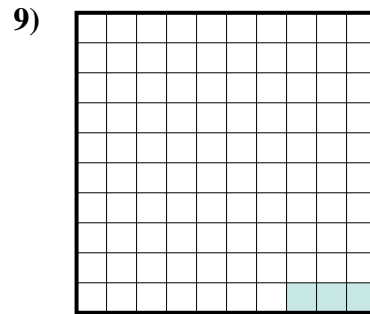
- A. 0.2
- B. 0.002
- C. 2
- D. 0.02



- A. 10
- B. 1
- C. 100
- D. 0.1



- A. 40
- B. 0.4
- C. 0.04
- D. 4



- A. 3
- B. 0.003
- C. 0.03
- D. 30

Answers

- 1. **B**
- 2. **C**
- 3. **A**
- 4. **B**
- 5. **A**
- 6. **D**
- 7. **D**
- 8. **B**
- 9. **C**