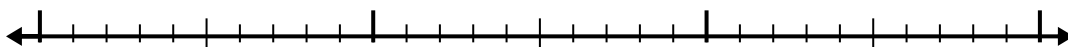


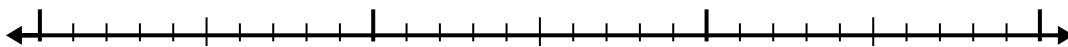


Use the number line to solve each problem.

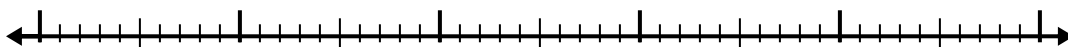
1) $8.7 - 1.1 =$



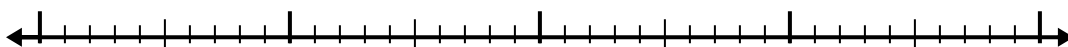
2) $5.1 - 1.8 =$



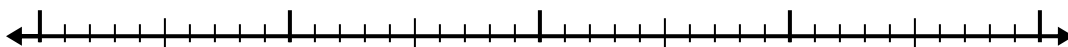
3) $10.6 - 3.3 =$



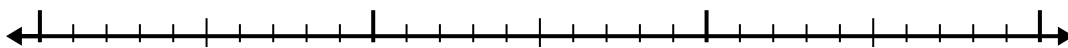
4) $5 - 1.1 =$



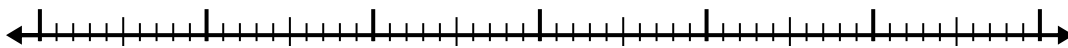
5) $6.1 - 2.9 =$



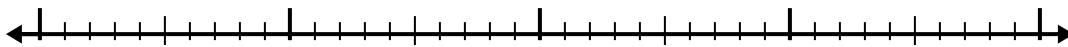
6) $10 - 1.1 =$



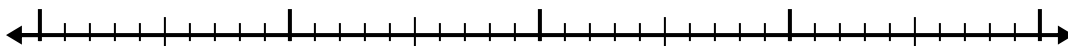
7) $4.4 - 3.1 =$



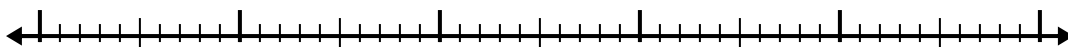
8) $6.3 - 2.7 =$



9) $6.7 - 1.9 =$



10) $9.4 - 2.9 =$



Answers

1. _____

2. _____

3. _____

4. _____

5. _____

6. _____

7. _____

8. _____

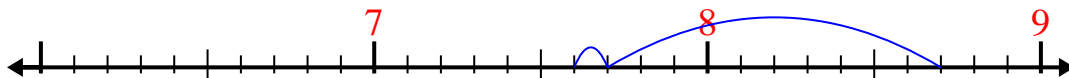
9. _____

10. _____




Use the number line to solve each problem.

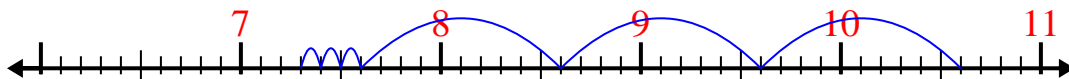
1) $8.7 - 1.1 =$



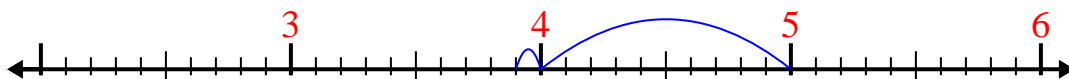
2) $5.1 - 1.8 =$



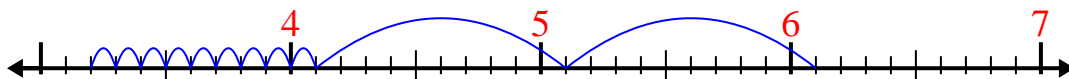
3) $10.6 - 3.3 =$



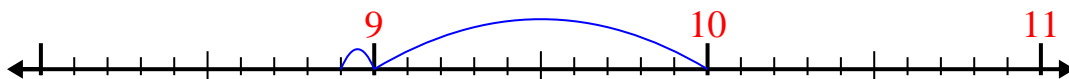
4) $5 - 1.1 =$



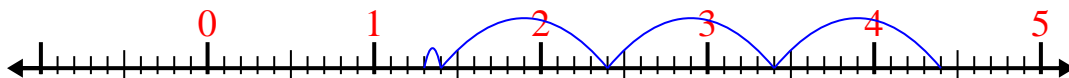
5) $6.1 - 2.9 =$



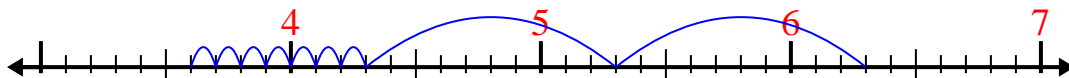
6) $10 - 1.1 =$



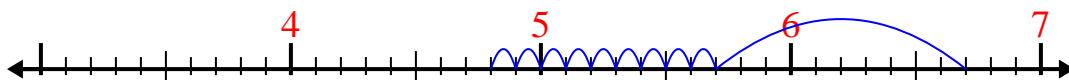
7) $4.4 - 3.1 =$



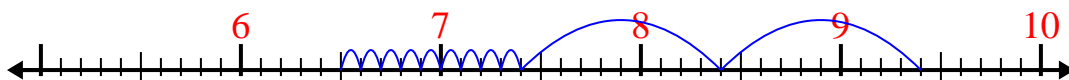
8) $6.3 - 2.7 =$



9) $6.7 - 1.9 =$



10) $9.4 - 2.9 =$

**Answers**1. 7.62. 3.33. 7.34. 3.95. 3.26. 8.97. 1.38. 3.69. 4.810. 6.5